

Constable GD in Central Armed Police Forces CAPFs SSF Rifleman GD in Assam Rifles Examination 2024

Roll Number	
Candidate Name	
Venue Name	
Exam Date	29/02/2024
Exam Time	11:30 AM - 12:30 PM
Subject	Constable GD Examination 2024

Section : Part-A-General Intelligence and Reasoning

Q.1 A series is given with one term missing. Select the correct alternative from the given ones that will complete the series.

NRHD, RVLH, VZPL, ZDTP, ?

- Ans**
- 1. DHXT
 - 2. DTCM
 - 3. DQPT
 - 4. DTNR

Question ID : 264330191528
Option 1 ID : 264330749467
Option 2 ID : 264330749468
Option 3 ID : 264330749466
Option 4 ID : 264330749469
Status : Answered
Chosen Option : 1

Q.2 In the following question below are given some statements followed by some conclusions based on those statements. Taking the given statements to be true even if they seem to be at variance from commonly known facts. Read all the conclusions and then decide which of the given conclusion(s) logically follows the given statements.

Statements:

- I. No M are N.
- II. Some O are N.

Conclusions:

- I. All O are M.
- II. No N is M.

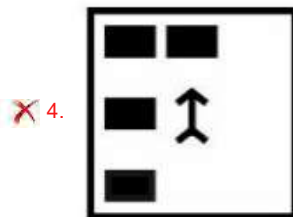
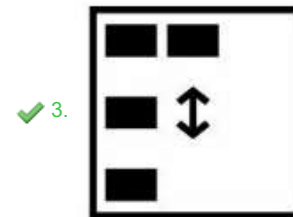
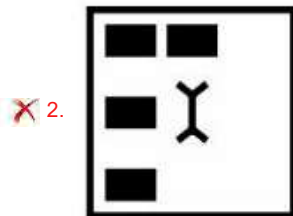
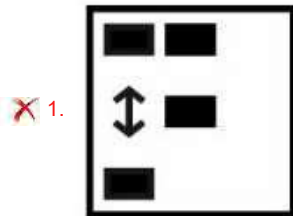
- Ans**
- 1. Only conclusion II follows
 - 2. Both conclusions I and II follows
 - 3. Only conclusion I follows
 - 4. Neither conclusion follows

Question ID : 264330187109
Option 1 ID : 264330732365
Option 2 ID : 264330732366
Option 3 ID : 264330732364
Option 4 ID : 264330732367
Status : Answered
Chosen Option : 1

Q.3 In the following question, select the figure which can be placed at the sign of question mark (?) from the given alternatives.



Ans

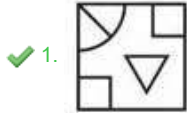


Question ID : 264330187094
 Option 1 ID : 264330732305
 Option 2 ID : 264330732304
 Option 3 ID : 264330732306
 Option 4 ID : 264330732307
 Status : Answered
 Chosen Option : 3

Q.4 Which answer figure will complete the pattern in the question figure?



Ans



Question ID : 264330187358

Option 1 ID : 264330733363

Option 2 ID : 264330733362

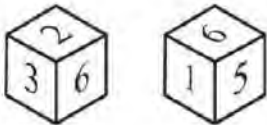
Option 3 ID : 264330733361

Option 4 ID : 264330733360

Status : Answered

Chosen Option : 1

Q.5 Two positions of a dice are given below. What will come on the face opposite to the face containing '5' on it?



Ans ✗ 1. 2

✓ 2. 3

✗ 3. 4

✗ 4. 1

Question ID : 264330191405

Option 1 ID : 264330748975

Option 2 ID : 264330748974

Option 3 ID : 264330748976

Option 4 ID : 264330748977

Status : Marked For Review

Chosen Option : 2

Q.6 In a certain code language, if France is called Italy, Italy is called Spain, Spain is called Greece, Greece is called Germany, then where is the Eiffel Tower located?

- Ans 1. Greece
 2. Italy
 3. Germany
 4. France

Question ID : 264330191112
Option 1 ID : 264330747805
Option 2 ID : 264330747803
Option 3 ID : 264330747804
Option 4 ID : 264330747802
Status : Answered
Chosen Option : 2

Q.7 Eight friends A, B, C, D, E, F, G and H are seated in a straight line and all of them are facing north, but not necessarily in the same order. B sits second to right of F. F sits at one of the extreme ends of the line. Only three people sit between B and E. C sits third to the left of D. Only two people sit between D and A. G is not an immediate neighbour of E. Who is sitting on the immediate left of B?

- Ans 1. F
 2. A
 3. C
 4. G

Question ID : 264330187348
Option 1 ID : 264330733320
Option 2 ID : 264330733323
Option 3 ID : 264330733321
Option 4 ID : 264330733322
Status : Not Attempted and Marked For Review
Chosen Option : --

Q.8 Which of the following numbers will replace the question mark (?) in the given series?

14, 13, 15, 12, 16, 11, ?

- Ans 1. 15
 2. 17
 3. 18
 4. 16

Question ID : 264330191119
Option 1 ID : 264330747830
Option 2 ID : 264330747832
Option 3 ID : 264330747831
Option 4 ID : 264330747833
Status : Answered
Chosen Option : 2

Q.9 In a certain code language, 'DAILY' is coded as '50739'. 'EARLY' is coded as '75834', 'EVENT' is coded as '42641'.

What can be the code for 'D' in that code language?

- Ans
- 1. 5
 - 2. 9
 - 3. 7
 - 4. 3

Question ID : 264330191334
Option 1 ID : 264330748690
Option 2 ID : 264330748693
Option 3 ID : 264330748691
Option 4 ID : 264330748692
Status : Answered
Chosen Option : 2

Q.10 Which of the following numbers will replace the question mark (?) in the given series?

126, 147, ?, 189, 210, 231

- Ans
- 1. 176
 - 2. 152
 - 3. 168
 - 4. 160

Question ID : 264330192279
Option 1 ID : 264330752473
Option 2 ID : 264330752470
Option 3 ID : 264330752472
Option 4 ID : 264330752471
Status : Answered
Chosen Option : 3

Q.11 Pointing towards a man in photo, Ram said, "He is the brother of my son's paternal grandfather". How man is related to Ram?

- Ans
- 1. Son
 - 2. Father's brother
 - 3. Brother
 - 4. Father

Question ID : 264330187346
Option 1 ID : 264330733314
Option 2 ID : 264330733313
Option 3 ID : 264330733312
Option 4 ID : 264330733315
Status : Answered
Chosen Option : 2

Q.12 In the following question, select the related letters from the given alternatives.

QTW : MPS :: DGJ : ?

- Ans
- 1. XTM
 - 2. WXX
 - 3. ZCF
 - 4. RUV

Question ID : 264330187042
Option 1 ID : 264330732098
Option 2 ID : 264330732099
Option 3 ID : 264330732096
Option 4 ID : 264330732097
Status : Answered
Chosen Option : 3

Q.13 Which of the following groups of letters when sequentially placed from left to right will complete the given series?

r_tuvrstuvr_tuvrstuvrstuvr_tuvrstuvrst_v

- Ans
- 1. tust
 - 2. suvt
 - 3. sssu
 - 4. utvu

Question ID : 264330191349
Option 1 ID : 264330748753
Option 2 ID : 264330748752
Option 3 ID : 264330748750
Option 4 ID : 264330748751
Status : Answered
Chosen Option : 3

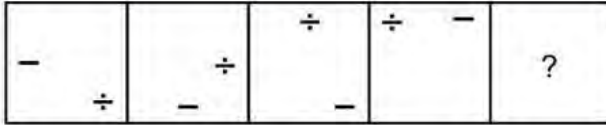
Q.14 In the following question, select the related letter pair from the given alternatives.

WZC : XAD :: ?

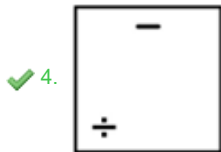
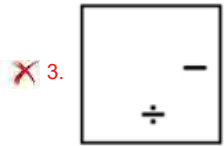
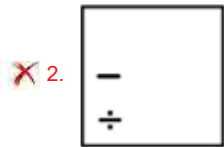
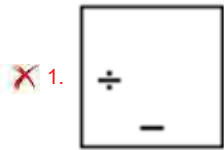
- Ans
- 1. CGK : DHL
 - 2. PPV : VUL
 - 3. HAV : BUX
 - 4. ABB : BZU

Question ID : 264330190191
Option 1 ID : 264330744346
Option 2 ID : 264330744347
Option 3 ID : 264330744349
Option 4 ID : 264330744348
Status : Answered
Chosen Option : 1

Q.15 Select the figure that will replace the question mark (?) in the following figure series.



Ans



Question ID : 264330191123

Option 1 ID : 264330747847

Option 2 ID : 264330747849

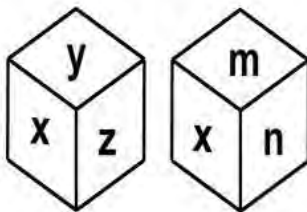
Option 3 ID : 264330747848

Option 4 ID : 264330747846

Status : Answered

Chosen Option : 1

Q.16 Two different positions of the same dice are given below. Find the letter opposite of y.



- Ans
- 1. z
 - 2. p
 - 3. m
 - 4. x

Question ID : 264330192085

Option 1 ID : 264330751697

Option 2 ID : 264330751695

Option 3 ID : 264330751696

Option 4 ID : 264330751694

Status : Not Attempted and Marked For Review

Chosen Option : --

Q.17 Five persons A, B, C, D and E are sitting around a circular table facing towards the centre (not necessarily in the same order). C is not an immediate neighbour of D and A. B is sitting second to the right of E. A is sitting second to the left of E. Who is sitting on the immediate right of C?

- Ans 1. B
 2. E
 3. A
 4. D

Question ID : 264330190215
Option 1 ID : 264330744442
Option 2 ID : 264330744445
Option 3 ID : 264330744443
Option 4 ID : 264330744444
Status : Answered
Chosen Option : 1

Q.18 Arrange the given words in the sequence in which they occur in the dictionary.

1. Lid
2. Lick
3. Lien
4. Lie
5. Lieu

- Ans 1. 2, 4, 1, 3, 5
 2. 2, 1, 4, 3, 5
 3. 1, 2, 3, 4, 5
 4. 1, 2, 4, 3, 5

Question ID : 264330190269
Option 1 ID : 264330744659
Option 2 ID : 264330744658
Option 3 ID : 264330744661
Option 4 ID : 264330744660
Status : Answered
Chosen Option : 2

Q.19 If $105 @ 100 * 6 \# 7 = 712$ and $108 @ 80 * 15 \# 60 = 1368$, then $60 @ 45 * 16 \# 25 = ?$

- Ans 1. 870
 2. 805
 3. 900
 4. 450

Question ID : 264330187353
Option 1 ID : 264330733342
Option 2 ID : 264330733340
Option 3 ID : 264330733341
Option 4 ID : 264330733343
Status : Answered
Chosen Option : 2

Q.20 Which two signs should be interchanged to make the given equation correct?

$$29 + 12 - 4 \times 40 \div 5 = 49$$

- Ans
- 1. \times and $+$
 - 2. $+$ and \div
 - 3. $+$ and $-$
 - 4. \times and $-$

Question ID : 264330192341

Option 1 ID : 264330752718

Option 2 ID : 264330752721

Option 3 ID : 264330752720

Option 4 ID : 264330752719

Status : Answered

Chosen Option : 3

Section : Part-B-General Knowledge and General awareness

Q.1 The Fundamental Rights is mentioned in which Part of the Indian Constitution?

- Ans
- 1. PART I
 - 2. PART III
 - 3. PART IV
 - 4. PART II

Question ID : 264330191059

Option 1 ID : 264330747590

Option 2 ID : 264330747592

Option 3 ID : 264330747593

Option 4 ID : 264330747591

Status : Answered

Chosen Option : 2

Q.2 'Yakshagana' is associated with which of the following states?

- Ans
- 1. Odisha
 - 2. Maharashtra
 - 3. Tamilnadu
 - 4. Karnataka

Question ID : 264330188775

Option 1 ID : 264330738903

Option 2 ID : 264330738902

Option 3 ID : 264330738905

Option 4 ID : 264330738904

Status : Answered

Chosen Option : 4

Q.3 Which of the following articles of the Indian Constitution mentions 'Special address by the Governor to the State Legislature'?

- Ans
- 1. Article 171
 - 2. Article 175
 - 3. Article 176
 - 4. Article 173

Question ID : 264330188865
Option 1 ID : 264330739265
Option 2 ID : 264330739263
Option 3 ID : 264330739262
Option 4 ID : 264330739264
Status : Not Answered
Chosen Option : --

Q.4 Janardan Prasad has been appointed as the new Director General of the _____ in June 2023?

- Ans
- 1. Steel Authority of India Limited (SAIL)
 - 2. Geological Survey of India (GSI)
 - 3. Bharat Heavy Electricals Limited (BHEL)
 - 4. Oil and Natural Gas Corporation Limited (ONGC)

Question ID : 264330188833
Option 1 ID : 264330739134
Option 2 ID : 264330739137
Option 3 ID : 264330739135
Option 4 ID : 264330739136
Status : Not Answered
Chosen Option : --

Q.5 Who among the following hosted the ICC Men's T20 World Cup 2022?

- Ans
- 1. UAE
 - 2. England
 - 3. Australia
 - 4. India

Question ID : 264330188666
Option 1 ID : 264330738469
Option 2 ID : 264330738467
Option 3 ID : 264330738466
Option 4 ID : 264330738468
Status : Not Answered
Chosen Option : --

Q.6 In swimming, how many "false start" warnings are there?

- Ans
- 1. 4
 - 2. 0
 - 3. 6
 - 4. 2

Question ID : 264330190643
Option 1 ID : 264330746154
Option 2 ID : 264330746156
Option 3 ID : 264330746157
Option 4 ID : 264330746155
Status : Not Answered
Chosen Option : --

Q.7 According to 2011 census of India, what is the urban population as percentage of total population?

- Ans
- 1. 35.2 percent
 - 2. 31.2 percent
 - 3. 39.2 percent
 - 4. 37.2 percent

Question ID : 264330190634
Option 1 ID : 264330746119
Option 2 ID : 264330746118
Option 3 ID : 264330746121
Option 4 ID : 264330746120
Status : Not Answered
Chosen Option : --

Q.8 _____ has been appointed as the new head of India's external spy agency ,Research & Analysis Wing (RAW) in June,

- 2023
- Ans
- 1. Ravi Sinha
 - 2. Samant Goel
 - 3. Alok Joshi
 - 4. Anil Dhasmana

Question ID : 264330191290
Option 1 ID : 264330748517
Option 2 ID : 264330748516
Option 3 ID : 264330748515
Option 4 ID : 264330748514
Status : Answered
Chosen Option : 1

Q.9 What is the other name for solid carbon dioxide?

- Ans
- 1. White ice
 - 2. Dry ice
 - 3. Freezed ice
 - 4. Ice at room temperature

Question ID : 264330190792
Option 1 ID : 264330746525
Option 2 ID : 264330746522
Option 3 ID : 264330746523
Option 4 ID : 264330746524
Status : Answered
Chosen Option : 2

Q.10 New Foreign Trade Policy has been launched on 31st March, 2023 and came in to effect from _____, 2023.

- Ans
- 1. 1st June
 - 2. 1st May
 - 3. 1st July
 - 4. 1st April

Question ID : 264330188870
Option 1 ID : 264330739284
Option 2 ID : 264330739283
Option 3 ID : 264330739285
Option 4 ID : 264330739282
Status : Not Answered
Chosen Option : --

Q.11 Which of the following is the time period of the First Five year Plan?

- Ans
- 1. 1951- 1956
 - 2. 1966-1969
 - 3. 1961-1966
 - 4. 1956-1961

Question ID : 264330191227
Option 1 ID : 264330748262
Option 2 ID : 264330748265
Option 3 ID : 264330748264
Option 4 ID : 264330748263
Status : Answered
Chosen Option : 1

Q.12 Who of following was Mohiniyattam doyen who died in February 2023?

- Ans
- 1. Kanak Rele
 - 2. Shobha Naidu
 - 3. Kelucharan Mohapatra
 - 4. Gaddam Padmaja

Question ID : 264330190778
Option 1 ID : 264330746466
Option 2 ID : 264330746468
Option 3 ID : 264330746467
Option 4 ID : 264330746469
Status : Not Answered
Chosen Option : --

Q.13 Indian composer whose extensive body of work for film and stage earned him the nickname "the Mozart of Madras."

- Ans
- 1. A R Rahman
 - 2. Sonu Nigam
 - 3. Ravi Shankar
 - 4. Zakir Hussain

Question ID : 264330191858
Option 1 ID : 264330750789
Option 2 ID : 264330750786
Option 3 ID : 264330750788
Option 4 ID : 264330750787
Status : Not Answered
Chosen Option : --

Q.14 Which of the following sports is played by Aparna Popat?

- Ans
- 1. Volleyball
 - 2. Badminton
 - 3. Cricket
 - 4. Table Tennis

Question ID : 264330192043
Option 1 ID : 264330751528
Option 2 ID : 264330751527
Option 3 ID : 264330751526
Option 4 ID : 264330751529
Status : Not Answered
Chosen Option : --

Q.15 Baisakhi is the festival of _____.

- Ans
- 1. Manipur
 - 2. Gujarat
 - 3. Haryana
 - 4. Maharashtra

Question ID : 264330191952
Option 1 ID : 264330751164
Option 2 ID : 264330751163
Option 3 ID : 264330751162
Option 4 ID : 264330751165
Status : Answered
Chosen Option : 3

Q.16 Indian Muslims launched the Khilafat Movement under the leadership of _____, popularly known as the Ali brothers.

- Ans
- 1. Mohammad Ali and Saiyyed Ali
 - 2. Feroz Ali and Shaukat Ali
 - 3. Mohammad Ali and Ahmed Ali
 - 4. Mohammad Ali and Shaukat Ali

Question ID : 264330190856
Option 1 ID : 264330746781
Option 2 ID : 264330746780
Option 3 ID : 264330746778
Option 4 ID : 264330746779
Status : Answered
Chosen Option : 4

Q.17 Which ancient text, attributed to the sage Vyasa, is a central epic of ancient India and consists of 100,000 verses in 18 parvas (books)?

- Ans
- 1. Mahabharata
 - 2. Rigveda
 - 3. Ramayana
 - 4. Arthashastra

Question ID : 264330191496
Option 1 ID : 264330749341
Option 2 ID : 264330749339
Option 3 ID : 264330749340
Option 4 ID : 264330749338
Status : Answered
Chosen Option : 1

Q.18 The United Nations designates _____ as the 'International Year of Micro Credit'.

- Ans
- 1. 2001
 - 2. 2003
 - 3. 2005
 - 4. 2007

Question ID : 264330191084
Option 1 ID : 264330747690
Option 2 ID : 264330747691
Option 3 ID : 264330747692
Option 4 ID : 264330747693
Status : Not Answered
Chosen Option : --

Q.19 Which scheme is not launched by Ministry of Health & Family Welfare in 2023?

- Ans
- 1. Mid-Day meal
 - 2. Intensified Mission Indradhanush 3.0
 - 3. National Digital Health Mission
 - 4. Ayushman Bharat Pradhan Mantri Jan Aarogya Yojana

Question ID : 264330191728
Option 1 ID : 264330750267
Option 2 ID : 264330750269
Option 3 ID : 264330750266
Option 4 ID : 264330750268
Status : Not Attempted and Marked For Review
Chosen Option : --

Q.20 What is the total percentage of the Christian population according to the 2011 Census of India?

- Ans
- 1. 2.3 percent
 - 2. 3.3 percent
 - 3. 1.3 percent
 - 4. 0.3 percent

Question ID : 264330191033
Option 1 ID : 264330747488
Option 2 ID : 264330747489
Option 3 ID : 264330747487
Option 4 ID : 264330747486
Status : Not Answered
Chosen Option : --

Q.1 In a mixture water and wine are in the ratio of 7 : 19. If it contains 12 litres more wine than water, then what will be the quantity of wine in mixture?

- Ans
- 1. 16 litres
 - 2. 7 litres
 - 3. 12 litres
 - 4. 19 litres

Question ID : 264330187691
Option 1 ID : 264330734695
Option 2 ID : 264330734694
Option 3 ID : 264330734693
Option 4 ID : 264330734692
Status : Answered
Chosen Option : 4

Q.2 If D can do 10 percent of a work in 3 days, then D can complete the entire work in how many days?

- Ans
- 1. 42 days
 - 2. 31 days
 - 3. 30 days
 - 4. 36 days

Question ID : 264330188549
Option 1 ID : 264330738001
Option 2 ID : 264330737999
Option 3 ID : 264330737998
Option 4 ID : 264330738000
Status : Answered
Chosen Option : 3

Q.3 After a discount of 25 percent an article is sold for Rs. 5550. What is the marked price of the article?

- Ans
- 1. Rs. 7500
 - 2. Rs. 7200
 - 3. Rs. 7000
 - 4. Rs. 7400

Question ID : 264330187729
Option 1 ID : 264330734845
Option 2 ID : 264330734847
Option 3 ID : 264330734846
Option 4 ID : 264330734844
Status : Answered
Chosen Option : 4

Q.4 In a group of 60 students, 50% are interested in history, and the rest are interested in geography. If the average score in history is 85, and the average score in geography is 75, what is the average score for the entire group?

- Ans
- 1. 77
 - 2. 64
 - 3. 89
 - 4. 80

Question ID : 264330191192
Option 1 ID : 264330748122
Option 2 ID : 264330748123
Option 3 ID : 264330748124
Option 4 ID : 264330748125
Status : Answered
Chosen Option : 4

Q.5 P1, P2 and P3 are three students. P1 got 62.5 percent less marks than P2 and 70 percent more marks than P3. If P2 got 8160 marks, then what are the marks got by P3?

- Ans
- 1. 1780
 - 2. 1700
 - 3. 1800
 - 4. 1880

Question ID : 264330191615
Option 1 ID : 264330749815
Option 2 ID : 264330749817
Option 3 ID : 264330749816
Option 4 ID : 264330749814
Status : Answered
Chosen Option : 3

Q.6 If $X = 50$ and $Y = 25$, then X is how much percentage more than Y?

- Ans
- 1. 90 percent
 - 2. 105 percent
 - 3. 100 percent
 - 4. 110 percent

Question ID : 264330187545
Option 1 ID : 264330734108
Option 2 ID : 264330734111
Option 3 ID : 264330734110
Option 4 ID : 264330734109
Status : Answered
Chosen Option : 3

Q.7 What is the value of $415 \div 5 - 44 \times 2 \div 8 + 53$?

- Ans
- 1. 138
 - 2. 132
 - 3. 128
 - 4. 125

Question ID : 264330187639
Option 1 ID : 264330734487
Option 2 ID : 264330734486
Option 3 ID : 264330734485
Option 4 ID : 264330734484
Status : Answered
Chosen Option : 4

Q.8 A sum of ₹ 600 was lent to two people, one at the rate of 5% per annum and the other at the rate of 13% per annum. If the simple interest after one year is ₹ 62, find the sum lent at each rate.

- Ans
- 1. ₹ 250 and ₹ 350
 - 2. ₹ 100 and ₹ 500
 - 3. ₹ 150 and ₹ 450
 - 4. ₹ 200 and ₹ 400

Question ID : 264330188428
Option 1 ID : 264330737582
Option 2 ID : 264330737581
Option 3 ID : 264330737583
Option 4 ID : 264330737580
Status : Answered
Chosen Option : 4

Q.9 What is the value of $8400 \div 2 - 2100 + 15 \times 8$?

- Ans
- 1. 2120
 - 2. 2220
 - 3. 2280
 - 4. 2060

Question ID : 264330187479
Option 1 ID : 264330733845
Option 2 ID : 264330733846
Option 3 ID : 264330733847
Option 4 ID : 264330733844
Status : Answered
Chosen Option : 2

Q.10 Three friends can complete a puzzle in 4 hours. If they invite two more friends to help, how long will it take to complete the same puzzle?

- Ans
- 1. 132 minutes
 - 2. 120 minutes
 - 3. 130 minutes
 - 4. 144 minutes

Question ID : 264330190745
Option 1 ID : 264330746412
Option 2 ID : 264330746413
Option 3 ID : 264330746411
Option 4 ID : 264330746410
Status : Answered
Chosen Option : 4

Q.11 The average height of W, X and Y is 185 cm. If the average height of W and X is 153 cm and the average height of X and Y is 152 cm, then what is the height of X?

- Ans
- 1. 57 cm
 - 2. 61 cm
 - 3. 60 cm
 - 4. 55 cm

Question ID : 264330187483
Option 1 ID : 264330733861
Option 2 ID : 264330733863
Option 3 ID : 264330733862
Option 4 ID : 264330733860
Status : Answered
Chosen Option : 4

Q.12 If a train runs at $\frac{6}{7}$ th of its original speed, then it reaches the station 20 minutes late. Find out the usual time taken by train to cover the distance.

- Ans
- 1. 100 minutes
 - 2. 140 minutes
 - 3. 144 minutes
 - 4. 120 minutes

Question ID : 264330191664
Option 1 ID : 264330750013
Option 2 ID : 264330750012
Option 3 ID : 264330750011
Option 4 ID : 264330750010
Status : Answered
Chosen Option : 2

Q.13 The ratio between two numbers is 7: 8. If each number is increased by 4, the ratio becomes 9: 10, then find the difference between the numbers.

- Ans
- 1. 8
 - 2. 2
 - 3. 4
 - 4. 10

Question ID : 264330191661
Option 1 ID : 264330750000
Option 2 ID : 264330749999
Option 3 ID : 264330749998
Option 4 ID : 264330750001
Status : Answered
Chosen Option : 2

Q.14 Saurabh purchased a ring at 26% less of the marked price and sold it at 10% more than the marked price. Find the approximate profit earned by him.

- Ans
- 1. 48.6%
 - 2. 45.2%
 - 3. 46.7%
 - 4. 49.9%

Question ID : 264330192297
Option 1 ID : 264330752544
Option 2 ID : 264330752542
Option 3 ID : 264330752543
Option 4 ID : 264330752545
Status : Answered
Chosen Option : 1

Q.15 A principal of Rs. 20000 is borrowed at compound interest (compounding annually) at the rate of 9 percent per annum. What will be the amount after 2 years?

- Ans
- 1. Rs. 23789
 - 2. Rs. 23762
 - 3. Rs. 24840
 - 4. Rs. 25500

Question ID : 264330191623
Option 1 ID : 264330749847
Option 2 ID : 264330749848
Option 3 ID : 264330749849
Option 4 ID : 264330749846
Status : Answered
Chosen Option : 2

Q.16

What is the value of $\frac{98}{56}$ of $\left(\frac{63}{7} + \frac{35}{5}\right) \div \frac{7}{49}$?

- Ans 1. 98
 2. 196
 3. 49
 4. 63

Question ID : 264330187240

Option 1 ID : 264330732889

Option 2 ID : 264330732891

Option 3 ID : 264330732888

Option 4 ID : 264330732890

Status : Answered

Chosen Option : 2

Q.17 The cost price of an article is 60 percent of the marked price. What will be the profit percentage after allowing a discount of 4 percent on the marked price?

- Ans 1. 50 percent
 2. 40 percent
 3. 30 percent
 4. 60 percent

Question ID : 264330187930

Option 1 ID : 264330735651

Option 2 ID : 264330735648

Option 3 ID : 264330735649

Option 4 ID : 264330735650

Status : Answered

Chosen Option : 4

Q.18 Area of a triangle is 1470 cm^2 . If base of this triangle is $\frac{3}{5}$ th of the height corresponding to that base, then what will be the height of triangle?

- Ans 1. 69 cm
 2. 70 cm
 3. 72 cm
 4. 63 cm

Question ID : 264330191707

Option 1 ID : 264330750185

Option 2 ID : 264330750183

Option 3 ID : 264330750184

Option 4 ID : 264330750182

Status : Answered

Chosen Option : 2

Q.19 What is the least number, which when divided by 15, 80, 20 and 75 leaves remainder 14 in each case?

- Ans
- 1. 1455
 - 2. 1245
 - 3. 1214
 - 4. 1244

Question ID : 264330188555
Option 1 ID : 264330738023
Option 2 ID : 264330738025
Option 3 ID : 264330738024
Option 4 ID : 264330738022
Status : Answered
Chosen Option : 3

Q.20 Cost price of an article is Rs. 440. If the profit percentage is 18 percent, then what is the value of profit?

- Ans
- 1. Rs. 82.5
 - 2. Rs. 78.2
 - 3. Rs. 75.6
 - 4. Rs. 79.2

Question ID : 264330187727
Option 1 ID : 264330734836
Option 2 ID : 264330734839
Option 3 ID : 264330734838
Option 4 ID : 264330734837
Status : Answered
Chosen Option : 4

Section : Part-D-English

Q.1 Choose the word that is opposite in meaning to the given word.

Successful

- Ans
- 1. Vile
 - 2. Vestige
 - 3. Vagary
 - 4. Hopeless

Question ID : 264330185659
Option 1 ID : 264330726993
Option 2 ID : 264330726992
Option 3 ID : 264330726995
Option 4 ID : 264330726994
Status : Not Attempted and Marked For Review
Chosen Option : --

Q.2 In the following question, out of the given four alternatives, select the alternative which best expresses the meaning of the Idiom/Phrase.

To go to the devil

Ans 1. To mourn the death of a close friend

2. To switch allegiance

3. To curse someone

4.

To be in an extremely and increasingly bad or ruinous condition

Question ID : 264330186187

Option 1 ID : 264330729005

Option 2 ID : 264330729007

Option 3 ID : 264330729004

Option 4 ID : 264330729006

Status : Answered

Chosen Option : 4

Q.3 Select the most appropriate option for the given blank.

We are _____ of flour. So, we have to buy the bread.

Ans 1. by

2. in

3. up

4. out

Question ID : 264330185629

Option 1 ID : 264330726881

Option 2 ID : 264330726883

Option 3 ID : 264330726882

Option 4 ID : 264330726880

Status : Answered

Chosen Option : 4

Q.4 Choose the word that is opposite in meaning to the given word.

Acquire

Ans 1. Barter

2. Reach

3. Garner

4. Discard

Question ID : 264330185869

Option 1 ID : 264330727795

Option 2 ID : 264330727793

Option 3 ID : 264330727794

Option 4 ID : 264330727792

Status : Answered

Chosen Option : 4

Q.5 Select the word segment that substitutes (replaces) the bracketed word segment correctly and completes the sentence meaningfully. Select the option 'no correction required' if the sentence is correct as given.

At last Godfrey (turning his head against her), and their eyes met, dwelling in that meeting without any movement on either side.

Ans 1. turned his head toward her

2. no correction required

3. turning his head for their

4. turn his head along

Question ID : 264330186973

Option 1 ID : 264330732002

Option 2 ID : 264330732003

Option 3 ID : 264330732001

Option 4 ID : 264330732000

Status : Answered

Chosen Option : 1

Q.6 Select the incorrectly spelt word from the given sentence.

While he stood, in the cluch of his adversary, he still held his hand on his sword.

Ans 1. While

2. adversary

3. cluch

4. sword

Question ID : 264330185852

Option 1 ID : 264330727728

Option 2 ID : 264330727730

Option 3 ID : 264330727729

Option 4 ID : 264330727731

Status : Answered

Chosen Option : 3

Q.7 Identify the segment that contains a grammatical error. If there is no error, select 'No error'.

It kept getting darker and darker, / and we could rarely see / the ball any more.

Ans 1. No error

2. the ball any more.

3. It kept getting darker and darker,

4. and we could rarely see

Question ID : 264330186822

Option 1 ID : 264330731427

Option 2 ID : 264330731426

Option 3 ID : 264330731424

Option 4 ID : 264330731425

Status : Answered

Chosen Option : 3

Q.8 Select the most appropriate meaning of the given idiom

Leave no stone unturned

- Ans
- 1. To share a secret that wasn't suppose to be shared
 - 2. The final event in a series of unacceptable actions
 - 3. To act in a frenzied manner
 - 4. Make all possible efforts

Question ID : 264330186461

Option 1 ID : 264330730050

Option 2 ID : 264330730049

Option 3 ID : 264330730051

Option 4 ID : 264330730048

Status : Answered

Chosen Option : 4

Q.9 Select the sentence with no spelling errors.

- Ans
- 1. Water likage was thought to be a major cause of landslides.
 - 2. Water leakage was thought to be a major cause of landslides.
 - 3. Water leakage was thoght to be a major cause of landslides.
 - 4. Water leakage was thought to be a major cause of lendslides.

Question ID : 264330186778

Option 1 ID : 264330731256

Option 2 ID : 264330731258

Option 3 ID : 264330731257

Option 4 ID : 264330731259

Status : Answered

Chosen Option : 2

Q.10 Choose the word that means the same as the given word.

Competent

- Ans
- 1. Gullible
 - 2. Qualified
 - 3. Widened
 - 4. Untried

Question ID : 264330186772

Option 1 ID : 264330731233

Option 2 ID : 264330731235

Option 3 ID : 264330731232

Option 4 ID : 264330731234

Status : Answered

Chosen Option : 2

Q.11 Choose the most appropriate antonym of the underlined word.

Why is there fascination, dissection, and constant conversation whenever Beyoncé or any female celebrity changes her hair?

- Ans
- 1. Allure
 - 2. Spell
 - 3. Appeal
 - 4. Repulsion

Question ID : 264330185786
Option 1 ID : 264330727476
Option 2 ID : 264330727479
Option 3 ID : 264330727478
Option 4 ID : 264330727477
Status : Answered
Chosen Option : 4

Q.12 Improve the underlined part of the sentence. Choose 'No improvement' as an answer if the sentence is grammatically correct.

Season the meat with salt and pepper, and then fry it in a hot pan.

- Ans
- 1. in a hottest pan
 - 2. No improvement
 - 3. to hotter pan
 - 4. at a heat pan

Question ID : 264330185985
Option 1 ID : 264330728236
Option 2 ID : 264330728239
Option 3 ID : 264330728237
Option 4 ID : 264330728238
Status : Answered
Chosen Option : 2

Q.13 Find the part of the given sentence that has an error in it. If there is no error, choose 'No error'.

My nephew is the most naughtiest kid on this Earth.

- Ans
- 1. naughtiest kid
 - 2. No error
 - 3. on this Earth.
 - 4. My nephew is the most

Question ID : 264330185625
Option 1 ID : 264330726865
Option 2 ID : 264330726867
Option 3 ID : 264330726866
Option 4 ID : 264330726864
Status : Answered
Chosen Option : 4

Q.14 Identify the segment that contains a grammatical error. If there is no error, select 'No error'.

I am shocked as I saw her / yesterday, I was horrified / when I saw her today.

- Ans**
- 1. I am shocked as I saw her
 - 2. when I saw her today.
 - 3. yesterday, I was horrified
 - 4. No error

Question ID : 264330186824
Option 1 ID : 264330731432
Option 2 ID : 264330731434
Option 3 ID : 264330731433
Option 4 ID : 264330731435
Status : Answered
Chosen Option : 1

Q.15 Select the most appropriate word to fill in the blank.

Without a _____ package, our economy's going to go down the tubes.

- Ans**
- 1. stimulating
 - 2. stimulus
 - 3. stimulated
 - 4. stimulant

Question ID : 264330185797
Option 1 ID : 264330727523
Option 2 ID : 264330727522
Option 3 ID : 264330727521
Option 4 ID : 264330727520
Status : Answered
Chosen Option : 1

Comprehension:

In the following passage some words have been deleted. Fill in the blanks with the help of the alternatives given. Select the most appropriate option for each number.

For a (1) _____ Nicole stood looking down at the Mediterranean but there was (2) _____ to do with that, even with her tireless hands. Presently Dicken came out of his one-room house (3) _____ a telescope and looked east toward Cannes. In a moment Nicole swam into his field of vision, (4) _____ he disappeared into his house and came out with a megaphone. Using the megaphone, he called out to Nicole with a mix of urgency and (5) _____ in his voice, alerting her to something important happening at the shore. Nicole, startled by the sudden amplification, turned quickly, her curiosity piqued as she noticed a small crowd beginning to gather by the water's edge.

SubQuestion No : 16

Q.16 Select the most appropriate option to fill in the blank No. 1.

- Ans**
- 1. moment
 - 2. occasion
 - 3. time
 - 4. minute

Question ID : 264330186977

Option 1 ID : 264330732014

Option 2 ID : 264330732013

Option 3 ID : 264330732015

Option 4 ID : 264330732012

Status : Answered

Chosen Option : 1

Comprehension:

In the following passage some words have been deleted. Fill in the blanks with the help of the alternatives given. Select the most appropriate option for each number.

For a (1) _____ Nicole stood looking down at the Mediterranean but there was (2) _____ to do with that, even with her tireless hands. Presently Dicken came out of his one-room house (3) _____ a telescope and looked east toward Cannes. In a moment Nicole swam into his field of vision, (4) _____ he disappeared into his house and came out with a megaphone. Using the megaphone, he called out to Nicole with a mix of urgency and (5) _____ in his voice, alerting her to something important happening at the shore. Nicole, startled by the sudden amplification, turned quickly, her curiosity piqued as she noticed a small crowd beginning to gather by the water's edge.

SubQuestion No : 17

Q.17 Select the most appropriate option to fill in the blank No. 2.

- Ans**
- 1. something
 - 2. mostly
 - 3. everything
 - 4. nothing

Question ID : 264330186978

Option 1 ID : 264330732016

Option 2 ID : 264330732019

Option 3 ID : 264330732018

Option 4 ID : 264330732017

Status : Answered

Chosen Option : 4

Comprehension:

In the following passage some words have been deleted. Fill in the blanks with the help of the alternatives given. Select the most appropriate option for each number.

For a (1) _____ Nicole stood looking down at the Mediterranean but there was (2) _____ to do with that, even with her tireless hands. Presently Dicken came out of his one-room house (3) _____ a telescope and looked east toward Cannes. In a moment Nicole swam into his field of vision, (4) _____ he disappeared into his house and came out with a megaphone. Using the megaphone, he called out to Nicole with a mix of urgency and (5) _____ in his voice, alerting her to something important happening at the shore. Nicole, startled by the sudden amplification, turned quickly, her curiosity piqued as she noticed a small crowd beginning to gather by the water's edge.

SubQuestion No : 18

Q.18 Select the most appropriate option to fill in the blank No. 3.

- Ans**
- 1. hauling
 - 2. carrying
 - 3. picking
 - 4. lift

Question ID : 264330186979

Option 1 ID : 264330732023

Option 2 ID : 264330732020

Option 3 ID : 264330732022

Option 4 ID : 264330732021

Status : Answered

Chosen Option : 2

Comprehension:

In the following passage some words have been deleted. Fill in the blanks with the help of the alternatives given. Select the most appropriate option for each number.

For a (1) _____ Nicole stood looking down at the Mediterranean but there was (2) _____ to do with that, even with her tireless hands. Presently Dicken came out of his one-room house (3) _____ a telescope and looked east toward Cannes. In a moment Nicole swam into his field of vision, (4) _____ he disappeared into his house and came out with a megaphone. Using the megaphone, he called out to Nicole with a mix of urgency and (5) _____ in his voice, alerting her to something important happening at the shore. Nicole, startled by the sudden amplification, turned quickly, her curiosity piqued as she noticed a small crowd beginning to gather by the water's edge.

SubQuestion No : 19

Q.19 Select the most appropriate option to fill in the blank No. 4.

- Ans**
- 1. wherein
 - 2. whereas
 - 3. whereupon
 - 4. when

Question ID : 264330186980

Option 1 ID : 264330732025

Option 2 ID : 264330732024

Option 3 ID : 264330732027

Option 4 ID : 264330732026

Status : Answered

Chosen Option : 2

Comprehension:

In the following passage some words have been deleted. Fill in the blanks with the help of the alternatives given. Select the most appropriate option for each number.

For a (1) _____ Nicole stood looking down at the Mediterranean but there was (2) _____ to do with that, even with her tireless hands. Presently Dicken came out of his one-room house (3) _____ a telescope and looked east toward Cannes. In a moment Nicole swam into his field of vision, (4) _____ he disappeared into his house and came out with a megaphone. Using the megaphone, he called out to Nicole with a mix of urgency and (5) _____ in his voice, alerting her to something important happening at the shore. Nicole, startled by the sudden amplification, turned quickly, her curiosity piqued as she noticed a small crowd beginning to gather by the water's edge.

SubQuestion No : 20

Q.20 Select the most appropriate option to fill in the blank No. 5.

- Ans**
- 1. excite
 - 2. excitation
 - 3. exciting
 - 4. excitement

Question ID : 264330186981
Option 1 ID : 264330732031
Option 2 ID : 264330732030
Option 3 ID : 264330732028
Option 4 ID : 264330732029
Status : Answered
Chosen Option : 4

Section : Part-D-Hindi

Q.1 निम्नलिखित प्रश्न में, दिए गए चार विकल्पों में से, उस विकल्प का चयन करें जो दिए गए मुहावरे के अर्थ को सर्वश्रेष्ठ रूप से व्यक्त करता है।

अपने पैरों पर खड़ा होना

- Ans**
- 1. प्रशंसा करना
 - 2. सिद्धांतहीन व्यक्ति
 - 3. खूब फायदा होना
 - 4. स्वावलम्बी होना

Question ID : 264330189199
Option 1 ID : 264330740549
Option 2 ID : 264330740548
Option 3 ID : 264330740547
Option 4 ID : 264330740546
Status : Not Answered
Chosen Option : --

Q.2 दिए गए वाक्य में से गलत वर्तनी ज्ञात कीजिए।
युधिष्ठिर का राजाभिषेक होते ही चारों तरफ उल्लास छा गया।

- Ans
- 1. राजाभिषेक
 - 2. उल्लास
 - 3. चारों
 - 4. युधिष्ठिर

Question ID : 264330190083
Option 1 ID : 264330743914
Option 2 ID : 264330743915
Option 3 ID : 264330743917
Option 4 ID : 264330743916
Status : Not Answered
Chosen Option : --

Q.3 दिए गए शब्द का पर्यायवाची ज्ञात कीजिए।

विलोम

- Ans
- 1. उदास
 - 2. उल्टा
 - 3. भोग
 - 4. निष्फल

Question ID : 264330189489
Option 1 ID : 264330741652
Option 2 ID : 264330741651
Option 3 ID : 264330741653
Option 4 ID : 264330741650
Status : Not Answered
Chosen Option : --

Q.4 दिए गए वाक्य में रेखांकित शब्द का विलोम शब्द ज्ञात कीजिए।

रिक्त स्थानों की पूर्ति कीजिए।

- Ans
- 1. संदेह
 - 2. विनाश
 - 3. पूर्ण
 - 4. खाली

Question ID : 264330188260
Option 1 ID : 264330736938
Option 2 ID : 264330736939
Option 3 ID : 264330736937
Option 4 ID : 264330736936
Status : Not Answered
Chosen Option : --

Q.5 दिए गए वाक्य में रेखांकित शब्द के लिए सही वर्तनी ज्ञात कीजिए।

धैर्य से काम लो।

- Ans
- 1. धैय
 - 2. धैर्य
 - 3. धेय
 - 4. धार्य

Question ID : 264330188243
Option 1 ID : 264330736873
Option 2 ID : 264330736872
Option 3 ID : 264330736874
Option 4 ID : 264330736875
Status : Not Answered
Chosen Option : --

Q.6 निम्नलिखित प्रश्न में, चार विकल्पों में से, उस विकल्प का चयन करें जो कोष्ठक में दिए गए शब्द के तद्भव रूप का सही विकल्प है।
मेरी माताजी (कटफल) _____ की बहुत ही स्वादिष्ट सब्जी बनाती हैं।

- Ans
- 1. कटहल
 - 2. खीरा
 - 3. करेला
 - 4. आलू

Question ID : 264330189728
Option 1 ID : 264330742562
Option 2 ID : 264330742563
Option 3 ID : 264330742564
Option 4 ID : 264330742565
Status : Not Answered
Chosen Option : --

Q.7 दिए गए शब्द का पर्यायवाची ज्ञात कीजिए।

पत्थर

- Ans
- 1. प्रारंभ
 - 2. समीप
 - 3. पाषाण
 - 4. पति

Question ID : 264330189153
Option 1 ID : 264330740371
Option 2 ID : 264330740372
Option 3 ID : 264330740373
Option 4 ID : 264330740370
Status : Not Answered
Chosen Option : --

Q.8 निम्नलिखित वाक्य में रेखांकित भाग के लिए एक सार्थक शब्द ज्ञात कीजिए।

इस बात को गुप्त ही रखना।

- Ans
- 1. जानकारी
 - 2. गोपनीय
 - 3. समदर्शी
 - 4. वाचाल

Question ID : 264330189256

Option 1 ID : 264330740762

Option 2 ID : 264330740763

Option 3 ID : 264330740764

Option 4 ID : 264330740765

Status : Not Answered

Chosen Option : --

Q.9 दिए गए वाक्यांश के लिए सार्थक शब्द ज्ञात कीजिए।

किसी बात को जानने की इच्छा

- Ans
- 1. जिज्ञासा
 - 2. आशावादी
 - 3. कल्पनाशील
 - 4. टकसाल

Question ID : 264330189131

Option 1 ID : 264330740286

Option 2 ID : 264330740287

Option 3 ID : 264330740288

Option 4 ID : 264330740289

Status : Not Answered

Chosen Option : --

Q.10 निम्नलिखित वाक्य में रेखांकित भाग के लिए एक शब्द ज्ञात कीजिए।

हमारे देश ने दाल विदेश से खरीदी है।

- Ans
- 1. आयात
 - 2. निर्यात
 - 3. व्यापार
 - 4. मालवाही

Question ID : 264330188276

Option 1 ID : 264330736999

Option 2 ID : 264330736997

Option 3 ID : 264330736998

Option 4 ID : 264330736996

Status : Not Answered

Chosen Option : --

Q.11 दिए गए वाक्य का वह भाग ज्ञात करें, जिसमें कोई त्रुटि है।

प्रत्येक प्राणी को स्वयं आत्म-निर्भर होना चाहिए ताकि आगे चलकर उसे कोई परेशानी न हो।

- Ans
- 1. ताकि आगे चलकर उसे
 - 2. कोई परेशानी न हो।
 - 3. स्वयं आत्म-निर्भर होना चाहिए
 - 4. प्रत्येक प्राणी को

Question ID : 264330189143
Option 1 ID : 264330740336
Option 2 ID : 264330740337
Option 3 ID : 264330740335
Option 4 ID : 264330740334
Status : Not Answered
Chosen Option : --

Q.12 दिए गए शब्द का विलोम शब्द ज्ञात कीजिए।

इनकार

- Ans
- 1. हैवान
 - 2. इकरार
 - 3. हुक्म
 - 4. मना

Question ID : 264330188175
Option 1 ID : 264330736615
Option 2 ID : 264330736613
Option 3 ID : 264330736614
Option 4 ID : 264330736612
Status : Not Answered
Chosen Option : --

Q.13 निम्नलिखित प्रश्न में, दिए गए चार विकल्पों में से, उस विकल्प का चयन करें जो दिए गए मुहावरे के अर्थ को सर्वश्रेष्ठ रूप से व्यक्त करता है।

ग्रह उलटे हो जाना

- Ans
- 1. बुरा समय आना
 - 2. आश्चर्यचकित होना
 - 3. स्थिर न रहना
 - 4. काम बिगाड़ना

Question ID : 264330189347
Option 1 ID : 264330741111
Option 2 ID : 264330741110
Option 3 ID : 264330741112
Option 4 ID : 264330741113
Status : Not Answered
Chosen Option : --

Q.14 दिए गए वाक्य का वह भाग ज्ञात करें, जिसमें कोई त्रुटि है। यदि कोई त्रुटि नहीं है, तो 'कोई त्रुटि नहीं है' चुनें।
इस कार्य के विघ्न बनकर तुम आए हो।

- Ans
- 1. कोई त्रुटि नहीं है
 - 2. इस कार्य
 - 3. के विघ्न बनकर
 - 4. तुम आए हो।

Question ID : 264330188120

Option 1 ID : 264330736407

Option 2 ID : 264330736404

Option 3 ID : 264330736405

Option 4 ID : 264330736406

Status : Not Answered

Chosen Option : --

Q.15 दिए गए वाक्य में से निरर्थक शब्द ज्ञात कीजिए।

मुझे वहाँ से पेन-वेन दे दो।

- Ans
- 1. वहाँ
 - 2. दो
 - 3. मुझे
 - 4. पेन-वेन

Question ID : 264330189057

Option 1 ID : 264330740006

Option 2 ID : 264330740007

Option 3 ID : 264330740009

Option 4 ID : 264330740008

Status : Not Answered

Chosen Option : --

Comprehension:

नीचे दिए गए गद्या में कुछ शब्द छोड़ दिए गए हैं और प्रत्येक रिक्त स्थान के चार विकल्प दिए गए हैं। इन चारों में से कौन सा विकल्प रिक्त स्थान की पूर्ति करेगा-

मोटे अनाज का (1)_____ बढ़ने से जनसामान्य सहित किसानों को लाभ मिलने की बड़ी (2)_____ है। एक ओर इससे कृषोषण की समस्या से निपटने का नया और सरल मार्ग मिलेगा। वहीं दूसरी ओर इससे किसानों की (3)_____ दोगूनी होने का मार्ग भी प्रशस्त होगा। यही कारण है कि मोटा अनाज वर्ष में एक ओर किसानों को इन अनाजों की खेती करने के लिए (4)_____ किया जाएगा और दूसरी ओर लोगों को मोटे अनाज के महत्व से (5)_____ कराया जाएगा जिससे इनकी खपत बढ़े और किसान इनकी खेती में रुचि दिखाएं।

SubQuestion No : 16

Q.16 रिक्त1 के लिए सबसे उपयुक्त विकल्प का चयन कीजिए।

- Ans 1. प्रचलन
 2. इंधन
 3. कीमत
 4. प्रभाव

Question ID : 264330189041

Option 1 ID : 264330739943

Option 2 ID : 264330739944

Option 3 ID : 264330739945

Option 4 ID : 264330739942

Status : Not Answered

Chosen Option : --

Comprehension:

नीचे दिए गए गद्या में कुछ शब्द छोड़ दिए गए हैं और प्रत्येक रिक्त स्थान के चार विकल्प दिए गए हैं। इन चारों में से कौन सा विकल्प रिक्त स्थान की पूर्ति करेगा-

मोटे अनाज का (1)_____ बढ़ने से जनसामान्य सहित किसानों को लाभ मिलने की बड़ी (2)_____ है। एक ओर इससे कृषोषण की समस्या से निपटने का नया और सरल मार्ग मिलेगा। वहीं दूसरी ओर इससे किसानों की (3)_____ दोगूनी होने का मार्ग भी प्रशस्त होगा। यही कारण है कि मोटा अनाज वर्ष में एक ओर किसानों को इन अनाजों की खेती करने के लिए (4)_____ किया जाएगा और दूसरी ओर लोगों को मोटे अनाज के महत्व से (5)_____ कराया जाएगा जिससे इनकी खपत बढ़े और किसान इनकी खेती में रुचि दिखाएं।

SubQuestion No : 17

Q.17 रिक्त2 के लिए सबसे उपयुक्त विकल्प का चयन कीजिए।

- Ans 1. व्यंजन
 2. समस्या
 3. संभावना
 4. परिणाम

Question ID : 264330189042

Option 1 ID : 264330739948

Option 2 ID : 264330739946

Option 3 ID : 264330739949

Option 4 ID : 264330739947

Status : Not Answered

Chosen Option : --

Comprehension:

नीचे दिए गए गद्या में कुछ शब्द छोड़ दिए गए हैं और प्रत्येक रिक्त स्थान के चार विकल्प दिए गए हैं। इन चारों में से कौन सा विकल्प रिक्त स्थान की पूर्ति करेगा-

मोटे अनाज का (1)_____ बढ़ने से जनसामान्य सहित किसानों को लाभ मिलने की बड़ी (2)_____ है। एक ओर इससे कृषि की समस्या से निपटने का नया और सरल मार्ग मिलेगा। वहीं दूसरी ओर इससे किसानों की (3)_____ दोगूनी होने का मार्ग भी प्रशस्त होगा। यही कारण है कि मोटा अनाज वर्ष में एक ओर किसानों को इन अनाजों की खेती करने के लिए (4)_____ किया जाएगा और दूसरी ओर लोगों को मोटे अनाज के महत्व से (5)_____ कराया जाएगा जिससे इनकी खपत बढ़े और किसान इनकी खेती में रुचि दिखाएं।

SubQuestion No : 18

Q.18 रिक्त3 के लिए सबसे उपयुक्त विकल्प का चयन कीजिए।

- Ans
- 1. महत्व
 - 2. आय
 - 3. मात्रा
 - 4. पीढ़ी

Question ID : 264330189043

Option 1 ID : 264330739953

Option 2 ID : 264330739950

Option 3 ID : 264330739951

Option 4 ID : 264330739952

Status : Not Answered

Chosen Option : --

Comprehension:

नीचे दिए गए गद्या में कुछ शब्द छोड़ दिए गए हैं और प्रत्येक रिक्त स्थान के चार विकल्प दिए गए हैं। इन चारों में से कौन सा विकल्प रिक्त स्थान की पूर्ति करेगा-

मोटे अनाज का (1)_____ बढ़ने से जनसामान्य सहित किसानों को लाभ मिलने की बड़ी (2)_____ है। एक ओर इससे कृषि की समस्या से निपटने का नया और सरल मार्ग मिलेगा। वहीं दूसरी ओर इससे किसानों की (3)_____ दोगूनी होने का मार्ग भी प्रशस्त होगा। यही कारण है कि मोटा अनाज वर्ष में एक ओर किसानों को इन अनाजों की खेती करने के लिए (4)_____ किया जाएगा और दूसरी ओर लोगों को मोटे अनाज के महत्व से (5)_____ कराया जाएगा जिससे इनकी खपत बढ़े और किसान इनकी खेती में रुचि दिखाएं।

SubQuestion No : 19

Q.19 रिक्त4 के लिए सबसे उपयुक्त विकल्प का चयन कीजिए।

- Ans
- 1. अंधापन
 - 2. स्वीकार
 - 3. मोटापन
 - 4. जागरूक

Question ID : 264330189044

Option 1 ID : 264330739954

Option 2 ID : 264330739957

Option 3 ID : 264330739955

Option 4 ID : 264330739956

Status : Not Answered

Chosen Option : --

Comprehension:

नीचे दिए गए गद्य में कुछ शब्द छोड़ दिए गए हैं और प्रत्येक रिक्त स्थान के चार विकल्प दिए गए हैं। इन चारों में से कौन सा विकल्प रिक्त स्थान की पूर्ति करेगा-

मोटे अनाज का (1)_____ बढ़ने से जनसामान्य सहित किसानों को लाभ मिलने की बड़ी (2)_____ है। एक ओर इससे कृषि की समस्या से निपटने का नया और सरल मार्ग मिलेगा। वहीं दूसरी ओर इससे किसानों की (3)_____ दोगुनी होने का मार्ग भी प्रशस्त होगा। यही कारण है कि मोटा अनाज वर्ष में एक ओर किसानों को इन अनाजों की खेती करने के लिए (4)_____ किया जाएगा और दूसरी ओर लोगों को मोटे अनाज के महत्व से (5)_____ कराया जाएगा जिससे इनकी खपत बढ़े और किसान इनकी खेती में रुचि दिखाएं।

SubQuestion No : 20

Q.20 रिक्त 5 के लिए सबसे उपयुक्त विकल्प का चयन कीजिए।

- Ans
- 1. परिपूर्ण
 - 2. स्वीकृत
 - 3. अधितकतर
 - 4. अवगत

Question ID : 264330189045

Option 1 ID : 264330739959

Option 2 ID : 264330739960

Option 3 ID : 264330739961

Option 4 ID : 264330739958

Status : Not Answered

Chosen Option : --