

Exam Date	16/11/2021
Exam Time :	4:00 PM - 5:30 PM
Subject	Constable GD 2021

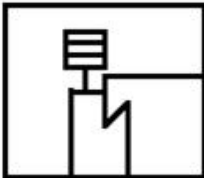
Section : Part A General Intelligence and Reasoning

Q.1 Select the option in which the given figure is embedded (rotation is NOT allowed).

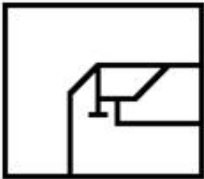


Ans

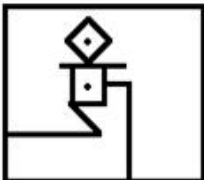
✗ 1.



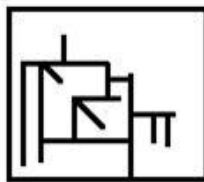
✗ 2.



✗ 3.



✓ 4.



Question ID : 65497828854

Status : Answered

Chosen Option : 4

Q.2 Select the option that is related to the third number in the same way as the second number is related to the first number and the sixth number is related to the fifth number.




16 : 120 :: 18 : ? :: 22 : 231

- Ans  1. 134  
 2. 153  
 3. 531  
 4. 513

Question ID : 65497828851  
Status : Answered  
Chosen Option : 2

Q.3 Select the correct mirror image of the given combination when the mirror is placed to its right side.

4 2 5 3 e f

- Ans  1.   
 2.   
 3.   
 4. 

Question ID : 65497828871  
Status : Answered  
Chosen Option : 1

Q.4 Select the letter-cluster from among the given options that can replace the question mark (?) in the following series.

DOK, ENL, FMM, GLN, ?

- Ans  1. HLP  
 2. HKO  
 3. GHP  
 4. GLO

Question ID : 65497828859  
Status : Answered  
Chosen Option : 2

Q.5 Select the number from among the given options that can replace the question mark (?) in the following series.

14, 15, 24, 49, 98, 179, ?

- Ans  1. 312  
 2. 290  
 3. 300  
 4. 340

Question ID : 65497828870  
Status : Answered  
Chosen Option : 3

**Q.6** Select the correct option that indicates the arrangement of the given words in the order in which they appear in an English dictionary.

1. Pitted
2. Pivot
3. Pixie
4. Pivotal
5. pity

- Ans
- 1. 1, 5, 4, 2, 3
  - 2. 1, 2, 3, 4, 5
  - 3. 2, 1, 4, 5, 3
  - 4. 1, 5, 2, 4, 3

Question ID : 65497828855  
Status : Answered  
Chosen Option : 4

**Q.7** Select the option that is related to the third letter-cluster in the same way as the second letter-cluster is related to the first letter-cluster.

HOST : FMQR :: DRON : ?

- Ans
- 1. BPML
  - 2. BLMP
  - 3. BPLM
  - 4. BMPL

Question ID : 65497828847  
Status : Answered  
Chosen Option : 1

**Q.8** (i) Anupama, Bavya, Chahal, Dilip, Sourab, Varun and Govind are sitting in a circle, facing the centre and playing cards.  
(ii) Sourab is the neighbour of Anupama and Dilip.  
(iii) Govind is not between Varun and Chahal.  
(iv) Varun is to the immediate right of Anupama.  
Which of the following pairs of persons is NOT sitting adjacent to each other?

- Ans
- 1. Govind, Dilip
  - 2. Bavya, Anupama
  - 3. Chahal, Bavya
  - 4. Dilip, Sourab

Question ID : 65497828850  
Status : Answered  
Chosen Option : 2

**Q.9** Read the given statements and conclusions carefully. Assuming that the information given in the statements is true, even if it appears to be at variance with commonly known facts, decide which of the given conclusions logically follow(s) from the statements.

**Statements:**

No boy is an engineer.  
No engineer is a driver.  
All girls are boys.

**Conclusions:**

I. All boys are drivers.  
II. No girl is an engineer.

- Ans**  1. Only conclusion I follows  
 2. Only conclusion II follows  
 3. Both conclusions I and II follow  
 4. Either conclusion I or II follows

Question ID : 65497828863

Status : Answered

Chosen Option : 2

**Q.10** Select the combination of letters that when sequentially placed in the blanks of the given series will complete the series.

D \_ \_ S H T \_ \_ R I S H \_ \_ D R I \_ \_ T I D R I S \_ \_ I

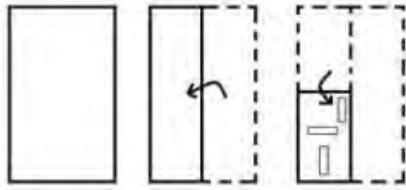
- Ans**  1. RDIITISHHT  
 2. RDIISHTIHT  
 3. RIIDTISHHT  
 4. RITIDTSHHT

Question ID : 65497828856

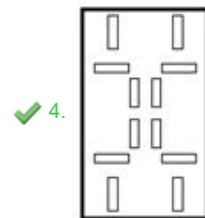
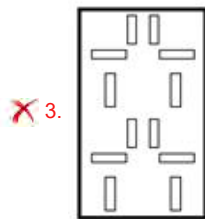
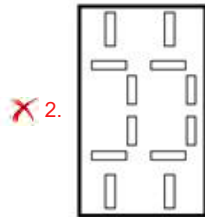
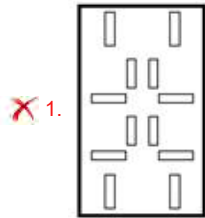
Status : Answered

Chosen Option : 3

Q.11 The sequence of folding a piece of paper and the manner in which the folded paper has been cut is shown in the following figures. How would this paper look when unfolded?



Ans



Question ID : 65497828866

Status : Answered

Chosen Option : 3

Q.12 Select the number from among the given options that can replace the question mark (?) in the following series.

209, 205, 196, 180, ?, 119

Ans  1. 155

2. 160

3. 149

4. 165

Question ID : 65497828857

Status : Answered

Chosen Option : 1

Q.13 In a certain code language, MORSEL is written as LESROM. How will GATEWAY be written in that language?

- Ans  1. YAWETAG  
 2. AWYETAG  
 3. YAWTEAG  
 4. YAWATEG

Question ID : 65497828861  
Status : Answered  
Chosen Option : 1

Q.14 'Cricket' is related to 'LBW' in the same way as 'Chess' is related to '\_\_\_\_\_'.  
\_\_\_\_\_

- Ans  1. Deuce  
 2. Hit wicket  
 3. Checkmate  
 4. Backstroke

Question ID : 65497828860  
Status : Answered  
Chosen Option : 3

Q.15 Seema, pointing towards a photo, said to me, "He is the son of your father." What is the relation of the person in the photo with me?

- Ans  1. Uncle  
 2. Grandfather  
 3. Brother  
 4. Father

Question ID : 65497828849  
Status : Answered  
Chosen Option : 3

Q.16 Select the option in which the numbers are related in the same way as are the numbers in the given set.

11, 4, 137

- Ans  1. 10, 5, 148  
 2. 9, 8, 145  
 3. 12, 7, 190  
 4. 15, 14, 205

Question ID : 65497828864  
Status : Answered  
Chosen Option : 3

Q.17 In a certain code language, APRIL is written as  $\alpha\beta\alpha@$  and MARCH is written as  $\epsilon+\beta\textcircled{\infty}$ . How will PARAM be written in that language?

- Ans  1.  $x+\beta+\epsilon$   
 2.  $\alpha+\epsilon\beta$   
 3.  $\beta\alpha+\textcircled{\infty}$   
 4.  $\alpha\beta\alpha+\epsilon$

Question ID : 65497828848  
Status : Answered  
Chosen Option : 1

Q.18 If 21 March 2007 is a Wednesday, what would be the day of the week on 25 May 2015?

- Ans  1. Tuesday  
 2. Wednesday  
 3. Monday  
 4. Sunday

Question ID : 65497828865  
Status : Answered  
Chosen Option : 3

Q.19 If 'A' denotes 'addition', 'B' denotes 'multiplication', 'C' denotes 'subtraction', and 'D' denotes 'division', then what will be the value of the following expression?

60 D 2 A 3 B 6 C 5 C (4 B 3)

- Ans  1. 41  
 2. 31  
 3. 35  
 4. 45

Question ID : 65497828852  
Status : Answered  
Chosen Option : 2

Q.20 Six girls A, B, C, D, E and F stand in two vertical lines; all girls face the north. three girls are there in each line. E is immediately behind D. F is to the left of A. C is just ahead of B. A is immediately ahead of D. Which two girls stand in the last position of lines?

- Ans  1. A, B  
 2. C, E  
 3. A, F  
 4. B, E

Question ID : 65497828862  
Status : Answered  
Chosen Option : 4

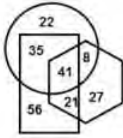
Q.21 Three different positions of the same dice are shown. Select the number/symbol that will be on the face opposite to the face showing the symbol '&'.



- Ans  1. 9  
 2. \$  
 3. %  
 4. #

Question ID : 65497828853  
Status : Answered  
Chosen Option : 3

**Q.22** In the following diagram, the 'hexagon' stands for 'engineers', the 'circle' stands for 'music lovers', and the 'rectangle' stands for 'morning walkers'. The numbers given in the different segments represent the number of persons of that category.

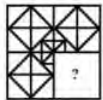


How many morning walkers are music-lovers but are NOT engineers?

- Ans
- 1. 21
  - 2. 35
  - 3. 41
  - 4. 8

Question ID : **65497828867**  
 Status : **Answered**  
 Chosen Option : **2**

**Q.23** Select the figure from among the given options that can replace the question mark (?) in the following figure and complete the pattern (rotation is NOT allowed).



- Ans
- 1.
  - 2.
  - 3.
  - 4.

Question ID : **65497828858**  
 Status : **Answered**  
 Chosen Option : **4**

**Q.24** Four letter-clusters have been given, out of which three are alike in some manner and one is different. Select the letter-cluster that is different.

- Ans
- 1. AEU
  - 2. AEI
  - 3. IOU
  - 4. ZDK

Question ID : **65497828868**  
 Status : **Answered**  
 Chosen Option : **4**



**Q.25** In a certain code language, ALARMING is coded as 150. How will FLOATER be coded in that language?

- Ans
- 1. 124
  - 2. 156
  - 3. 141
  - 4. 154

Question ID : 65497828869  
Status : Answered  
Chosen Option : 4

Section : Part B General Knowledge and General Awareness

**Q.1** The Central Pollution Control Board (CPCB) was constituted under \_\_\_\_\_.

- Ans
- 1. The Air (Prevention and Control of Pollution) Act, 1981
  - 2. The Water (Prevention and Control of Pollution) Act, 1974
  - 3. The National Environmental Tribunal Act, 1995
  - 4. The National Environment Appellate Authority Act, 1997

Question ID : 65497828888  
Status : Answered  
Chosen Option : 1

**Q.2** In which of the following years was the first cotton textile mill established in Bombay?

- Ans
- 1. 1845
  - 2. 1867
  - 3. 1876
  - 4. 1854

Question ID : 65497828873  
Status : Not Answered  
Chosen Option : --

**Q.3** Which of the following banks features in the Fortune Global 500 list 2021?

- Ans
- 1. State Bank of India
  - 2. Bank of Baroda
  - 3. ICICI Bank
  - 4. HDFC Bank

Question ID : 65497828896  
Status : Not Answered  
Chosen Option : --

**Q.4** In October 2020, World Bank expected India's GDP to contract by how much per cent in the fiscal year 2020-21?

- Ans
- 1. 9.5
  - 2. 9.8
  - 3. 9
  - 4. 9.6

Question ID : 65497828877  
Status : Not Answered  
Chosen Option : --

**Q.5** The religious festival of Ganesh Chaturthi is especially associated with which of the following states?

- Ans  1. Punjab  
 2. Maharashtra  
 3. Uttar Pradesh  
 4. Haryana

Question ID : 65497828879  
Status : Answered  
Chosen Option : 2

**Q.6** Which of the following statements is true?

- Ans  1. Bases are bitter in taste.  
 2. Acids change the colour of red litmus to blue.  
 3. Acids are salty in taste.  
 4. Bases change the colour of the blue litmus to red.

Question ID : 65497828883  
Status : Answered  
Chosen Option : 1

**Q.7** Talaja Caves are located in the state of \_\_\_\_\_.

- Ans  1. Madhya Pradesh  
 2. Maharashtra  
 3. Andhra Pradesh  
 4. Gujarat

Question ID : 65497828890  
Status : Not Answered  
Chosen Option : --

**Q.8** 11 July is observed as \_\_\_\_\_ every year.

- Ans  1. World Health Day  
 2. World Environment Day  
 3. World Population Day  
 4. World Water Day

Question ID : 65497828894  
Status : Not Answered  
Chosen Option : --

**Q.9** In which of the following states are the Abor hills located?

- Ans  1. West Bengal  
 2. Arunachal Pradesh  
 3. Assam  
 4. Sikkim

Question ID : 65497828878  
Status : Answered  
Chosen Option : 3

**Q.10 Diego Maradona, the great football legend, died in November 2020. Which of the following countries did he represent?**

- Ans
- 1. Brazil
  - 2. France
  - 3. Spain
  - 4. Argentina

Question ID : 65497828876  
Status : Answered  
Chosen Option : 1

**Q.11 When was the Imperial Bank of India established?**

- Ans
- 1. 1947
  - 2. 1921
  - 3. 1919
  - 4. 1948

Question ID : 65497828886  
Status : Answered  
Chosen Option : 2

**Q.12 Prime Minister Narendra Modi visited Bangladesh in March 2021 in connection with the commemoration of three events. Which of the following is NOT one of them?**

- Ans
- 1. 50 years of Bangladesh's war of liberation.
  - 2. Birth centenary of Sheikh Mujibur Rahman.
  - 3. 10 years of signing of the India-Bangladesh Land Boundary Agreement (LBA).
  - 4. 50 years of the establishment of diplomatic ties between India and Bangladesh.

Question ID : 65497828889  
Status : Answered  
Chosen Option : 4

**Q.13 Actress Kangana Ranaut won the 'Best Actress' award at the 67th National Film Awards, 2019 for the films \_\_\_\_\_.**

- Ans
- 1. 'Panga' and 'Judgementall Hai Kya'
  - 2. 'Manikarnika: The Queen of Jhansi' and 'Panga'
  - 3. 'Judgementall Hai Ky and 'Manikarnika: The Queen of Jhansi'
  - 4. 'Judgementall Hai Kya' and 'Simran'

Question ID : 65497828892  
Status : Answered  
Chosen Option : 2

**Q.14 Water which is purified and fit for drinking is known as \_\_\_\_\_.**

- Ans
- 1. hard water
  - 2. potable water
  - 3. diluted water
  - 4. river water

Question ID : 65497828880  
Status : Answered  
Chosen Option : 2

Q.15 Who among the following became the first Mughal emperor after defeating Ibrahim Lodi?

- Ans  1. Nadir Shah  
 2. Shah Jahan  
 3. Babur  
 4. Aurangzeb

Question ID : 65497828872  
Status : Answered  
Chosen Option : 3

Q.16 The \_\_\_\_\_ Schedule of the Constitution of India added by the Constitution (Fifty-Second Amendment) Act, 1985 deals with the disqualification of a person for being a member of either house of Parliament or the Legislative Assembly or Legislative Council of a State, on the ground of defection.

- Ans  1. Tenth  
 2. Sixth  
 3. Third  
 4. Fifth

Question ID : 65497828874  
Status : Answered  
Chosen Option : 1

Q.17 In November 2020, Twitter launched tweets that disappear in 24 hours called '\_\_\_\_\_' globally.

- Ans  1. fleets  
 2. bleats  
 3. meets  
 4. greets

Question ID : 65497828885  
Status : Not Answered  
Chosen Option : --

Q.18 Shariatullah Khan was a part of the \_\_\_\_\_ against the British.

- Ans  1. Faqir/Fakir Rebellion  
 2. Wahabi Movement  
 3. Sanyasi Rebellion  
 4. Farazi/Faraizi Movement

Question ID : 65497828887  
Status : Answered  
Chosen Option : 2

Q.19 Which of the following is NOT a consequence of deforestation?

- Ans  1. Decrease in level of ground water  
 2. Increase in pollution level on earth  
 3. Increase in level of oxygen in the atmosphere  
 4. Disturbance in the overall balance of nature

Question ID : 65497828881  
Status : Answered  
Chosen Option : 3

Q.20 \_\_\_\_\_, the newly elected Prime Minister of Somalia, took office in September 2020.

- Ans
- 1. Omar Sharmarke
  - 2. Hassan Ali Khaire
  - 3. Abdi Farah Shirdon
  - 4. Mohamed Hussein Roble

Question ID : 65497828882  
Status : Not Answered  
Chosen Option : --

Q.21 Mir Jafar was reinstated as the Nawab of Bengal in the year \_\_\_\_\_.

- Ans
- 1. 1764
  - 2. 1647
  - 3. 1674
  - 4. 1746

Question ID : 65497828884  
Status : Answered  
Chosen Option : 1

Q.22 As of September 2021, India has won \_\_\_\_\_ medals in the Paralympic Games since their introduction in 1960.

- Ans
- 1. 9 gold, 10 silver and 12 bronze
  - 2. 7 gold, 9 silver and 11 bronze
  - 3. 9 gold, 12 silver and 10 bronze
  - 4. 7 gold, 11 silver and 9 bronze

Question ID : 65497828895  
Status : Answered  
Chosen Option : 4

Q.23 As per the Census of India–2011, there are \_\_\_\_\_ statutory towns in the country.

- Ans
- 1. 10,756
  - 2. 1,362
  - 3. 4,041
  - 4. 7,935

Question ID : 65497828891  
Status : Not Answered  
Chosen Option : --

Q.24 The Scheme of Mega Food Park aims at providing a mechanism of direct linkage from farm to processing and then to consumer markets through a network of collection centres and primary processing centres. In which of the following states did Narendra Singh Tomar virtually inaugurate Mega Food Park in November 2020?

- Ans
- 1. Gujarat
  - 2. Rajasthan
  - 3. Punjab
  - 4. Odisha

Question ID : 65497828875  
Status : Answered  
Chosen Option : 3

**Q.25** Who among the following is an Indian badminton player?

- Ans  1. Satish Kumar  
 2. Ashish Kumar  
 3. B Sai Praneeth  
 4. Vikas Krishan

Question ID : 65497828893  
Status : Answered  
Chosen Option : 3

Section : Part C Elementary Mathematics

**Q.1** A loss of 12% gets converted into a profit of 8.5% when the selling price of an article is increased by ₹164. The cost price of the article is:

- Ans  1. ₹760  
 2. ₹840  
 3. ₹850  
 4. ₹800

Question ID : 65497828902  
Status : Answered  
Chosen Option : 4

**Q.2** Pens are bought by a shopkeeper at the rate of ₹1,200 for 150 pens and sold at the rate of ₹1,620 for 180 pens. His profit or loss per cent is:

- Ans  1. Profit 12%  
 2. Profit 12.5%  
 3. Loss 12%  
 4. Profit 14%

Question ID : 65497828900  
Status : Answered  
Chosen Option : 2

**Q.3** The value of  $8 - [88 \div 2 \text{ of } 11 - (22 - 72 \div 4)]$  is:

- Ans  1. 0  
 2. 6  
 3. 4  
 4. 8

Question ID : 65497828899  
Status : Answered  
Chosen Option : 4

Q.4 If the compound interest on a certain sum for 2 years at 4% per annum is ₹1530. What would be the simple interest on the same sum for the same period and at the same rate?

- Ans
- 1. ₹1400
  - 2. ₹1500
  - 3. ₹1350
  - 4. ₹1510

Question ID : 65497828920  
Status : Answered  
Chosen Option : 2

Q.5 A takes 15 days to complete  $\frac{5}{7}$  of a work. With the help of B, they finish the whole work in 12 days. In how many days, B alone will complete the same work?

- Ans
- 1. 18 days
  - 2. 20 days
  - 3. 28 days
  - 4. 25 days

Question ID : 65497828901  
Status : Answered  
Chosen Option : 3

Q.6 A shopkeeper sells an item for ₹1,638 after offering a discount of 16% on its list price. Had he not offered any discount, he would have earned a profit of 30%. What is the cost price (in ₹) of the article?

- Ans
- 1. 1,500
  - 2. 1,425
  - 3. 1,400
  - 4. 1,450

Question ID : 65497828917  
Status : Answered  
Chosen Option : 1

Q.7 There are five numbers. The average of the first four numbers is  $\frac{5}{6}$  of the fifth number. If the average of all the five numbers is 26, then what is the fifth number?

- Ans
- 1. 28
  - 2. 29
  - 3. 30
  - 4. 32

Question ID : 65497828911  
Status : Answered  
Chosen Option : 3

Q.8 The HCF of 2091, 3485 and 4879 is  $x$ . The sum of the digits of  $x$  is:

- Ans
- 1. 20
  - 2. 22
  - 3. 19
  - 4. 23

Question ID : 65497828910  
Status : Answered  
Chosen Option : 1

Q.9 Working together, A, B and C can do a certain work in 10 days. A is 20% more efficient than B, and C is 50% less than efficient than B. B alone can complete the same work in:

- Ans
- 1.  $22\frac{1}{2}$  days
  - 2. 27 days
  - 3. 30 days
  - 4. 25 days

Question ID : 65497828915  
Status : Answered  
Chosen Option : 2

Q.10 A trader marked the price of an article so as to earn a profit of 28% on its cost price. He sold it by giving 15% discount on its marked price. What was his actual profit percentage?

- Ans
- 1. 13%
  - 2. 9%
  - 3. 8.8%
  - 4. 12.5%

Question ID : 65497828912  
Status : Answered  
Chosen Option : 3

Q.11 The lengths of the sides of a right-angled triangle are in the ratio 5 : 12 : 13 and its perimeter is 90 cm. What is the area (in  $\text{cm}^2$ ) of the triangle?

- Ans
- 1. 540
  - 2. 780
  - 3. 270
  - 4. 702

Question ID : 65497828921  
Status : Answered  
Chosen Option : 3



Q.12 There is 70% increase in an amount in 7 years at simple interest. What will be the compound interest on ₹8,000 after 3 years at the same rate of interest?

- Ans
- 1. ₹2,640
  - 2. ₹2,548
  - 3. ₹2,654
  - 4. ₹2,648

Question ID : 65497828903  
Status : Answered  
Chosen Option : 4

Q.13 The income of A is 70% more than the income of B, and the income of C is 80% of the combined income of A and B. By what percentage is the income of A less than that of C? (Correct to one decimal place)

- Ans
- 1. 27.1%
  - 2. 20.4%
  - 3. 21.3%
  - 4. 19.8%

Question ID : 65497828913  
Status : Answered  
Chosen Option : 2

Q.14 The prices of two woolen jackets A and B are in the ratio 7 : 9. If jacket A costs ₹380 less than jacket B, then find the price of jacket B.

- Ans
- 1. ₹1680
  - 2. ₹1330
  - 3. ₹1710
  - 4. ₹1650

Question ID : 65497828919  
Status : Answered  
Chosen Option : 3

Q.15 If three numbers are in the ratio of 3 : 5 : 7 and their LCM is 2415, what is the difference between the second number and the first number?

- Ans
- 1. 46
  - 2. 92
  - 3. 23
  - 4. 69

Question ID : 65497828904  
Status : Answered  
Chosen Option : 1

Q.16 A wire encloses an area of  $18634 \text{ cm}^2$ , when it is bent in the form of a circle. The same wire is now bent to form a rectangle whose sides are in the ratio  $5 : 6$ . The length (in cm) of the shorter side of the rectangle is (Take  $\pi = \frac{22}{7}$ ):

- Ans
- 1. 100
  - 2. 132
  - 3. 110
  - 4. 154

Question ID : 65497828898  
Status : Answered  
Chosen Option : 3

Q.17 If the average of the following six observations:  $x + 2, x + 5, x + 8, x + 11, x + 14$  and  $x + 17$  is 12.5, what is the average of the first three observations?

- Ans
- 1. 3
  - 2. 9
  - 3. 8
  - 4. 6

Question ID : 65497828905  
Status : Answered  
Chosen Option : 3

Q.18 By selling 18 oranges for ₹151.20, a man loses 20%. How many oranges should he sell for ₹819 to earn a profit of 30%?

- Ans
- 1. 50
  - 2. 65
  - 3. 60
  - 4. 45

Question ID : 65497828918  
Status : Answered  
Chosen Option : 3

Q.19 A car covers the first 41 km of its journey in 45 min and covers the remaining 23 km in 35 min. What is the average speed (in m/sec) of the car?

- Ans
- 1.  $13\frac{1}{3}$
  - 2. 15
  - 3. 16
  - 4.  $16\frac{2}{3}$

Question ID : 65497828909  
Status : Answered  
Chosen Option : 1

Q.20 Somu has borrowed ₹10,000 from a money lender with simple interest at a rate of 7% per 6 months. How much amount will he pay to the money lender after 3 years?

- Ans
- 1. ₹13,000
  - 2. ₹14,200
  - 3. ₹12,500
  - 4. ₹12,100

Question ID : 65497828907  
Status : Answered  
Chosen Option : 2

Q.21 If a sum of ₹6225 is divided into three parts such that 4 times the first part is equal to 5 times the second part and 7 times the third part. The difference between the first and second part (in ₹) is:

- Ans
- 1. 525
  - 2. 300
  - 3. 600
  - 4. 450

Question ID : 65497828897  
Status : Answered  
Chosen Option : 1

Q.22 The value of  $\left(\frac{7}{16} \div 10\frac{1}{2} \text{ of } 7\frac{1}{5}\right) \times 3\frac{3}{5} - 1\frac{1}{3} \times 1\frac{1}{8} \div \frac{1}{2} + \frac{3}{4}$  is:

- Ans
- 1.  $\frac{-179}{48}$
  - 2.  $\frac{61}{8}$
  - 3.  $\frac{181}{24}$
  - 4.  $\frac{-107}{48}$

Question ID : 65497828908  
Status : Answered  
Chosen Option : 4

Q.23 A boat can go 10 km upstream and 11 km downstream in a total time of 52 minutes. If the speed of the stream is 5 km/h, then what is the speed (in km/h) of the boat when going downstream?

- Ans
- 1. 30
  - 2. 20
  - 3. 35
  - 4. 25

Question ID : 65497828916  
Status : Answered  
Chosen Option : 4

Q.24 In a mixture of 75 litres, the ratio of milk to water is 3 : 2. If the ratio is to be 1 : 2, how much of water should be added?

- Ans
- 1. 65 litres
  - 2. 90 litres
  - 3. 60 litres
  - 4. 50 litres

Question ID : 65497828906  
Status : Answered  
Chosen Option : 3

Q.25 In 2021, a cricket team wants to win 80% of the matches out of 225 matches. Out of 120 matches already played, the success rate is 70%. What should be the success rate for the remaining matches in order to reach the target?

- Ans
- 1.  $89\frac{5}{7}\%$
  - 2. 86%
  - 3. 90%
  - 4.  $91\frac{3}{7}\%$

Question ID : 65497828914  
Status : Answered  
Chosen Option : 4

Section : Part D English

Q.1 Select the most appropriate option to fill in the blank.

The man felt exhausted after climbing a \_\_\_\_\_ of stairs.

- Ans
- 1. heap
  - 2. fleet
  - 3. pack
  - 4. flight

Question ID : 65497828941  
Status : Not Answered  
Chosen Option : --

Q.2 Select the most appropriate meaning of the given idiom.

Come to blows

- Ans
- 1. Insult someone
  - 2. Agree on a plan
  - 3. Get into a fight physically
  - 4. Return a favour

Question ID : 65497828939  
Status : Not Answered  
Chosen Option : --

**Q.3** Parts of the given sentence have been given as options. One of them contains a grammatical error. Select the option that has the error.

Pray to the Almighty God with utmost devotion and help the needy and poored people.

- Ans
- 1. with utmost devotion
  - 2. help the needy
  - 3. to the Almighty God
  - 4. poored people

Question ID : 65497828930  
Status : Not Answered  
Chosen Option : --

**Q.4** Select the INCORRECTLY spelt word.

- Ans
- 1. Quarantine
  - 2. Commitment
  - 3. Bouquet
  - 4. Proceedure

Question ID : 65497828936  
Status : Not Answered  
Chosen Option : --

**Q.5** The following sentence has been split into four segments. Identify the segment that contains a grammatical error.

I saw some / children playing happily / below the shade / of a tree.

- Ans
- 1. I saw some
  - 2. children playing happily
  - 3. below the shade
  - 4. of a tree

Question ID : 65497828933  
Status : Not Answered  
Chosen Option : --

**Q.6** The following sentence has been split into four segments. Identify the segment that contains a grammatical error.

The man turned to him with a look of disapprove.

- Ans
- 1. The man
  - 2. with a look
  - 3. of disapprove
  - 4. turned to him

Question ID : 65497828924  
Status : Not Answered  
Chosen Option : --

Q.7 Select the most appropriate ANTONYM of the given word.

Criticise

- Ans  1. Analyse  
 2. Approve  
 3. Oppose  
 4. Clarify

Question ID : 65497828934  
Status : Not Answered  
Chosen Option : --

Q.8 Select the most appropriate option to fill in the blank.

The Egyptians developed ways to prevent the dead body from \_\_\_\_\_.

- Ans  1. decaying  
 2. destroying  
 3. drooping  
 4. dying

Question ID : 65497828927  
Status : Not Answered  
Chosen Option : --

Q.9 Select the option that will improve the underlined part of the given sentence. In case no improvement is needed, select 'No improvement required'.

My teacher said me that I would be famous one day.

- Ans  1. say to me  
 2. told me  
 3. No improvement required  
 4. asked me

Question ID : 65497828940  
Status : Not Answered  
Chosen Option : --

Q.10 Select the most appropriate option to fill in the blank.

She is on six months' \_\_\_\_\_ leave.

- Ans  1. material  
 2. paternity  
 3. paternal  
 4. maternity

Question ID : 65497828929  
Status : Not Answered  
Chosen Option : --

Q.11 Select the INCORRECTLY spelt word.

- Ans  1. Eraser  
 2. Erode  
 3. Erosion  
 4. Eratic

Question ID : 65497828928  
Status : Not Answered  
Chosen Option : --

Q.12 Select the most appropriate ANTONYM of the given word.

Prudent

- Ans  1. Shrewd  
 2. Wasteful  
 3. Cautious  
 4. Clever

Question ID : 65497828937  
Status : Not Answered  
Chosen Option : --

Q.13 Select the most appropriate option that can substitute the underlined segment in the given sentence. If there is no need to substitute it, select 'No substitution required'.

Using a word processor for writing have a number of advantages.

- Ans  1. for writing having number  
 2. No substitution required  
 3. to write have a number  
 4. for writing has a number

Question ID : 65497828923  
Status : Not Answered  
Chosen Option : --

Q.14 Select the most appropriate meaning of the given idiom.

Cool as a cucumber

- Ans  1. Calm  
 2. Lazy  
 3. Wise  
 4. Scared

Question ID : 65497828938  
Status : Not Answered  
Chosen Option : --

Q.15 Select the option that can be used as a one-word substitute for the given group of words.

That which is lawful

- Ans  1. Proper  
 2. Illegal  
 3. Valid  
 4. Legal

Question ID : 65497828926  
Status : Not Answered  
Chosen Option : --

Q.16 Select the most appropriate synonym of the given word.

Recommend

- Ans  1. Oppose  
 2. Adhere  
 3. Reward  
 4. Approve

Question ID : 65497828925  
Status : Not Answered  
Chosen Option : --

Q.17 Select the most appropriate option that can substitute the underlined segment in the given sentence. If there is no need to substitute it, select 'No substitution required'.

Wool and silk are materials those are the easiest to dye.

- Ans  1. that is easy  
 2. that are the easiest  
 3. No substitution required  
 4. that are the easier

Question ID : 65497828922  
Status : Not Answered  
Chosen Option : --

Q.18 Select the option that can be used as a one-word substitute for the given group of words.

A piece of land where fruit trees are grown

- Ans  1. Pasture  
 2. Orchard  
 3. Barnyard  
 4. Meadow

Question ID : 65497828935  
Status : Not Answered  
Chosen Option : --



**Q.19** Select the most appropriate synonym of the given word.

**Substitution**

- Ans  1. Give  
 2. Exchange  
 3. Logical  
 4. Hold

Question ID : **65497828931**  
Status : **Not Answered**  
Chosen Option : --

**Q.20** Select the option that can be used as a one-word substitute for the given group of words.

**A volume containing several books previously published separately**

- Ans  1. Thesaurus  
 2. Dictionary  
 3. Novel  
 4. Omnibus

Question ID : **65497828932**  
Status : **Not Answered**  
Chosen Option : --

**Comprehension:**

In the following passage, some words have been deleted. Read the passage carefully and select the most appropriate option to fill in each blank.

A giant plane carrying 43 passengers was (1) \_\_\_\_\_ to crash-land when its landing gear got (2) \_\_\_\_\_. Only the skill of the pilot was able to (3) \_\_\_\_\_ a major tragedy. Expert mechanics laboured (4) \_\_\_\_\_ hours before they could find the (5) \_\_\_\_\_ of the mechanical failure.

**SubQuestion No : 21**

**Q.21** Select the most appropriate option to fill in blank no.1.

- Ans  1. bumped  
 2. poked  
 3. forced  
 4. pushed

Question ID : **65497828943**  
Status : **Not Answered**  
Chosen Option : --

**Comprehension:**

In the following passage, some words have been deleted. Read the passage carefully and select the most appropriate option to fill in each blank.

A giant plane carrying 43 passengers was (1) \_\_\_\_\_ to crash-land when its landing gear got (2) \_\_\_\_\_. Only the skill of the pilot was able to (3) \_\_\_\_\_ a major tragedy. Expert mechanics laboured (4) \_\_\_\_\_ hours before they could find the (5) \_\_\_\_\_ of the mechanical failure.

**SubQuestion No : 22**

**Q.22 Select the most appropriate option to fill in blank no.2.**

- Ans  1. glued  
 2. caught  
 3. stuck  
 4. fixed

Question ID : 65497828944  
Status : Not Answered  
Chosen Option : --

**Comprehension:**

In the following passage, some words have been deleted. Read the passage carefully and select the most appropriate option to fill in each blank.

A giant plane carrying 43 passengers was (1) \_\_\_\_\_ to crash-land when its landing gear got (2) \_\_\_\_\_. Only the skill of the pilot was able to (3) \_\_\_\_\_ a major tragedy. Expert mechanics laboured (4) \_\_\_\_\_ hours before they could find the (5) \_\_\_\_\_ of the mechanical failure.

**SubQuestion No : 23**

**Q.23 Select the most appropriate option to fill in blank no.3.**

- Ans  1. forbid  
 2. limit  
 3. prevent  
 4. restrict

Question ID : 65497828945  
Status : Not Answered  
Chosen Option : --

**Comprehension:**

In the following passage, some words have been deleted. Read the passage carefully and select the most appropriate option to fill in each blank.

A giant plane carrying 43 passengers was (1) \_\_\_\_\_ to crash-land when its landing gear got (2) \_\_\_\_\_. Only the skill of the pilot was able to (3) \_\_\_\_\_ a major tragedy. Expert mechanics laboured (4) \_\_\_\_\_ hours before they could find the (5) \_\_\_\_\_ of the mechanical failure.

**SubQuestion No : 24**

**Q.24 Select the most appropriate option to fill in blank no.4.**

- Ans  1. over  
 2. from  
 3. at  
 4. for

Question ID : 65497828946  
Status : Not Answered  
Chosen Option : --

**Comprehension:**

In the following passage, some words have been deleted. Read the passage carefully and select the most appropriate option to fill in each blank.

A giant plane carrying 43 passengers was (1) \_\_\_\_\_ to crash-land when its landing gear got (2) \_\_\_\_\_. Only the skill of the pilot was able to (3) \_\_\_\_\_ a major tragedy. Expert mechanics laboured (4) \_\_\_\_\_ hours before they could find the (5) \_\_\_\_\_ of the mechanical failure.

**SubQuestion No : 25****Q.25 Select the most appropriate option to fill in blank no.5.**

- Ans  1. plan  
 2. motive  
 3. agency  
 4. cause

Question ID : 65497828947  
Status : Not Answered  
Chosen Option : --

Section : Part D Hindi

**Q.1 र थान को भरने के लिए सबसे उपयु श का चयन कर।**

सफलता पाने के लिए कठोर \_\_\_\_\_ करना पड़ता है।

- Ans  1. म  
 2. अ यन  
 3. अनुशासन  
 4. आवागमन

Question ID : 65497828954  
Status : Answered  
Chosen Option : 1

**Q.2 दिए गए वा का वह भाग त कर जिसमें कोई टि है। यदि कोई टि नहीं है, तो 'कोई टि नहीं है' चुन।**

कभी-कभी, आकाश में दिखाई देने वाला उ ापतन एक विल ण घटना है।

- Ans  1. दिखाई देने वाला  
 2. उ ापतन एक विल ण घटना है।  
 3. कभी-कभी, आकाश में  
 4. कोई टि नहीं है।

Question ID : 65497828948  
Status : Answered  
Chosen Option : 2

**Q.3 दिये गये वा ंश के लिए एक श दीजिये।**

अपने पास रखी ई, दूसरे की व ु

- Ans  1. धरनी  
 2. धराऊ  
 3. धरोहर  
 4. धन

Question ID : 65497828953  
Status : Answered  
Chosen Option : 3

Q.4 'खून का घूँट पीना' मुहावरे का सही अर्थ है-

- Ans
- 1. घृणा करना
  - 2. गुंटा पचा जाना
  - 3. भयभीत होना
  - 4. अंतर्निहित होना

Question ID : 65497828959  
Status : Answered  
Chosen Option : 2

Q.5 दिये गये वाक्य में रेखांकित अंश को सही तथ्यापत्ति के लिए सबसे उपयुक्त विकल्प का चयन कर।

मोहन के गए पर वह उठ बैठा।

- Ans
- 1. उठने पर
  - 2. दौड़ने पर
  - 3. मरने पर
  - 4. जाने पर

Question ID : 65497828961  
Status : Answered  
Chosen Option : 4

Q.6 दिए गए शब्दों के समानार्थक शब्दों का चयन कर।

बाण

- Ans
- 1. अगम
  - 2. नाराज
  - 3. तनय
  - 4. दहन

Question ID : 65497828952  
Status : Answered  
Chosen Option : 2

Q.7 'पंकज' किसका पर्यायवाची है?

- Ans
- 1. व
  - 2. किरण
  - 3. कमल
  - 4. आँख

Question ID : 65497828965  
Status : Answered  
Chosen Option : 3

Q.8 दिए गए वा म रेखांकित खंड को ति थापित करने के लिए सबसे उपयु विक का चयन कर।  
यदि इसे ति थापित करने की आव कता नहीं है, तो विक 'किसी बदलाव की आव कता नहीं है'  
का चयन कर।

इस काय के वि बन कर तुम आए हो।

- Ans
- 1. किसी बदलाव की आव कता नहीं है।
  - 2. इस काय का
  - 3. इस काय म
  - 4. इस काय की

Question ID : 65497828955  
Status : Answered  
Chosen Option : 3

Q.9 सही वतनी वाले श का चयन कर।

- Ans
- 1. थायी
  - 2. थायि
  - 3. इ थायि
  - 4. थाई

Question ID : 65497828956  
Status : Answered  
Chosen Option : 1

Q.10 दिए गए वा का वह भाग। त कर जिसम कोई टि है। यदि कोई टि नहीं है, तो 'कोई टि नहीं है'  
चुन।

महेश जी बता रहे थे कि उनका भतीजा अपने ल पर नजर रखते ह।

- Ans
- 1. महेश जी बता रहे थे
  - 2. अपने ल पर नजर रखते ह।
  - 3. कोई टि नहीं है।
  - 4. कि उनका भतीजा

Question ID : 65497828951  
Status : Answered  
Chosen Option : 2

Q.11 दिये गये वा म रेखांकित अंश को ति थापित करने के लिए सबसे उपयु विक का चयन कर।

पृी का प गोल है।

- Ans
- 1. प
  - 2. कार
  - 3. आकार
  - 4. I प

Question ID : 65497828960  
Status : Answered  
Chosen Option : 3

Q.12 र थान को भरने के लिए सबसे उपयु विक का चयन कर।

शिशु \_\_\_\_\_ और अबोध होता है।

- Ans  1. अ  
 2. भि  
 3. ब  
 4. अ

Question ID : 65497828962  
Status : Answered  
Chosen Option : 4

Q.13 दिये गये वा के किस भाग म टि है?

उसने अवाज देकर पूछा।

- Ans  1. पूछा।  
 2. देकर  
 3. अवाज  
 4. उसने

Question ID : 65497828964  
Status : Answered  
Chosen Option : 2

Q.14 सही वतनी वाले श का चयन कर।

- Ans  1. शूपणखा  
 2. शुपणखा  
 3. सुपनखा  
 4. सूपनखा

Question ID : 65497828957  
Status : Answered  
Chosen Option : 1

Q.15 र थान को भरने के लिए सबसे उपयु विक का चयन कर।

शि क दिवस पर छो ने शि क को पु क \_\_\_\_\_ की।

- Ans  1. ह गत  
 2. दान  
 3. दान  
 4. भट

Question ID : 65497828967  
Status : Answered  
Chosen Option : 4

Q.16 'धन से संबंध रखने वाला' वा ंश के लिए एक श होगा-

- Ans  1. अथशा  
 2. भौतिक  
 3. आर्थिक  
 4. संपा शा

Question ID : 65497828966  
Status : Answered  
Chosen Option : 1

Q.17 'पसीना पसीना होना' मुहावरे का सही अर्थ है-

- Ans  1. रोधित होना  
 2. शमिदा होना  
 3. सा होना  
 4. भयभीत होना

Question ID : 65497828963  
Status : Answered  
Chosen Option : 4

Q.18 दिये गये वांश के लिए एक श दीजिये।

खेतों में, मड़ों से बनाए गए छोटे-छोटे, वगाकार या आयताकार भाग

- Ans  1. नहर  
 2. परनाला  
 3. ारी  
 4. नाली

Question ID : 65497828950  
Status : Answered  
Chosen Option : 3

Q.19 दिए गए श का विलोम चुन।

जातीय

- Ans  1. विजातीय  
 2. अजातीय  
 3. जातीय  
 4. सजातीय

Question ID : 65497828949  
Status : Answered  
Chosen Option : 4

Q.20 'कृपण' का विलोम श होगा-

- Ans  1. सरल  
 2. कठोर  
 3. दाता  
 4. कमठ

Question ID : 65497828958  
Status : Answered  
Chosen Option : 3

**Comprehension:**

दिए गए अनुेद म कुछ श हटा दिए गए ह। दिए गए विकों की सहायता से र थान भर। ेक संा के लिए सबसे उपयु विक का चयन कर-

भारत के गाँव (1) \_\_\_\_\_ के मनोरम थल ह। वहाँ का निवासी कृति की (2) \_\_\_\_\_ म ही पल रहा है पर (3) \_\_\_\_\_ ि से पिछड़े ए गाँवों की थ ति अ ही (4) \_\_\_\_\_ है ेकि वहाँ के लोग (5) \_\_\_\_\_ पर ही निभर रहते ह।

**SubQuestion No : 21**

Q.21 ग ंश के र थान (1) के लिए सवाधिक उपयु श होगा-

- Ans  1. रा  
 2. िलोक  
 3. कृति  
 4. शहरों

Question ID : 65497828969

Status : Answered

Chosen Option : 3

**Comprehension:**

दिए गए अनुेद म कुछ श हटा दिए गए ह। दिए गए विकों की सहायता से र थान भर। ेक संा के लिए सबसे उपयु विक का चयन कर-

भारत के गाँव (1) \_\_\_\_\_ के मनोरम थल ह। वहाँ का निवासी कृति की (2) \_\_\_\_\_ म ही पल रहा है पर (3) \_\_\_\_\_ ि से पिछड़े ए गाँवों की थ ति अ ही (4) \_\_\_\_\_ है ेकि वहाँ के लोग (5) \_\_\_\_\_ पर ही निभर रहते ह।

**SubQuestion No : 22**

Q.22 ग ंश के र थान (2) के लिए सवाधिक उपयु श होगा-

- Ans  1. साथ  
 2. हाथ  
 3. छाँव  
 4. गोद

Question ID : 65497828970

Status : Answered

Chosen Option : 4

**Comprehension:**

दिए गए अनुेद म कुछ श हटा दिए गए ह। दिए गए विकों की सहायता से र थान भर। ेक संा के लिए सबसे उपयु विक का चयन कर-

भारत के गाँव (1) \_\_\_\_\_ के मनोरम थल ह। वहाँ का निवासी कृति की (2) \_\_\_\_\_ म ही पल रहा है पर (3) \_\_\_\_\_ ि से पिछड़े ए गाँवों की थ ति अ ही (4) \_\_\_\_\_ है ेकि वहाँ के लोग (5) \_\_\_\_\_ पर ही निभर रहते ह।

**SubQuestion No : 23**

Q.23 ग ंश के र थान (3) के लिए सवाधिक उपयु श होगा-

- Ans  1. राजनीतिक  
 2. आधिक  
 3. शारीर क  
 4. मानसिक

Question ID : 65497828971

Status : Answered

Chosen Option : 2



**Comprehension:**

दिए गए अनुेद म कुछ श हटा दिए गए ह। दिए गए विकों की सहायता से र थान भर। ेक संा के लिए सबसे उपयु विक का चयन कर-

भारत के गाँव (1) \_\_\_\_\_ के मनोरम थल ह। वहाँ का निवासी कृति की (2) \_\_\_\_\_ म ही पल रहा है पर (3) \_\_\_\_\_ ि से पिछड़े ए गाँवों की थ ति अ ही (4) \_\_\_\_\_ है ोकि वहाँ के लोग (5) \_\_\_\_\_ पर ही निभर रहते ह।

**SubQuestion No : 24**

Q.24 ग ांश के र थान (4) के लिए सवाधिक उपयु श होगा-

- Ans  1. कठिन  
 2. दयनीय  
 3. रीय  
 4. स

Question ID : 65497828972

Status : Answered

Chosen Option : 2

**Comprehension:**

दिए गए अनुेद म कुछ श हटा दिए गए ह। दिए गए विकों की सहायता से र थान भर। ेक संा के लिए सबसे उपयु विक का चयन कर-

भारत के गाँव (1) \_\_\_\_\_ के मनोरम थल ह। वहाँ का निवासी कृति की (2) \_\_\_\_\_ म ही पल रहा है पर (3) \_\_\_\_\_ ि से पिछड़े ए गाँवों की थ ति अ ही (4) \_\_\_\_\_ है ोकि वहाँ के लोग (5) \_\_\_\_\_ पर ही निभर रहते ह।

**SubQuestion No : 25**

Q.25 ग ांश के र थान (5) के लिए सवाधिक उपयु श होगा-

- Ans  1. कृषि  
 2. कृति  
 3. सरकार  
 4. पंचायत

Question ID : 65497828973

Status : Answered

Chosen Option : 1