

Constable GD in CAPFs SSF Rifleman GD in Assam Rifles and Sepoy in NCB Examination 2022

Roll Number	
Candidate Name	
Venue Name	Pawan Ganga Educational Centre 1
Exam Date	12/01/2023
Exam Time	11:45 AM - 12:45 PM
Subject	Constable GD Examination 2022

Section : **Part-A-General Intelligence and Reasoning**

Q.1 Which of the following numbers will replace the question mark (?) in the given series?
5, 13, 29, ?, 125, 253

Ans 1. 75

2. 58

3. 61

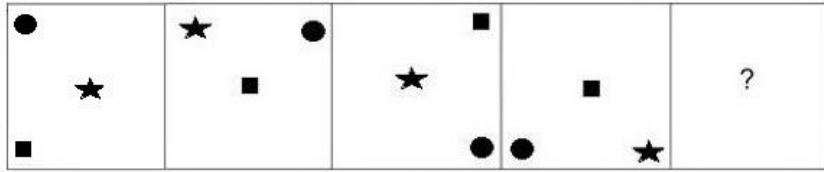
4. 52

Question ID : 26433068095

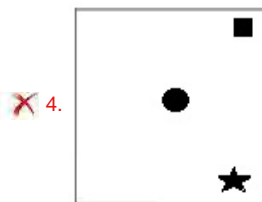
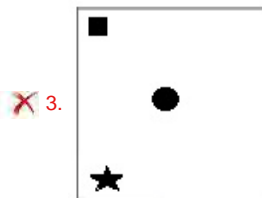
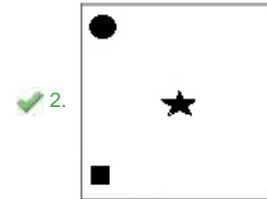
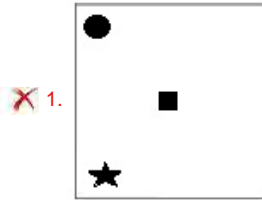
Status : Answered

Chosen Option : 3

Q.2 Select the figure that will replace the question mark (?) in the following figure series.

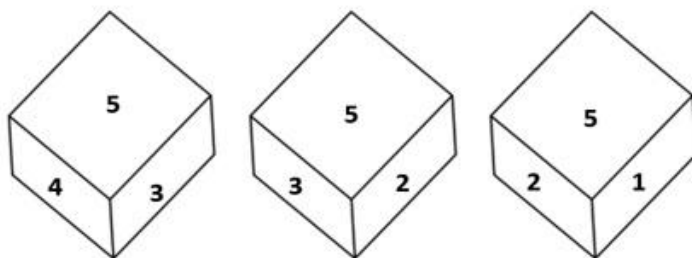


Ans



Question ID : 26433070420
 Status : Answered
 Chosen Option : 2

Q.3 Three different positions of the same dice are shown. Find the number on the face opposite the face showing '4'.



- Ans 1. 2
 2. 6
 3. 1
 4. 3

Question ID : 26433082890
 Status : Answered
 Chosen Option : 1

Q.4 Six girls D, K, M, P, R and S are sitting around a circular table, facing the centre. S is sitting third to the left of R. P is sitting to the immediate right of R and to the immediate left of D. M is sitting to the immediate left of R. K is sitting to the immediate right of S and to the immediate left of M. Who is sitting at the third position from the left of D?

- Ans** 1. M
 2. P
 3. R
 4. S

Question ID : 26433080471
Status : **Answered**
Chosen Option : 1

Q.5 Select the letter-cluster from among the given options that can replace the question mark (?) in the following series.
?, HLEJ, JNGL, LPIN

- Ans** 1. FJCH
 2. EDHI
 3. FJCD
 4. FGCF

Question ID : 26433068351
Status : **Answered**
Chosen Option : 1

Q.6 Three statements are given followed by three conclusions numbered I, II and III. Assuming the statements to be true, even if they seem to be at variance with commonly known facts, decide which of the conclusions logically follow(s) from the statements.

Statements:

All gloves are bats.

All stumps are bats.

All bats are balls.

Conclusions:

I. All stumps are balls.

II. Some balls are gloves.

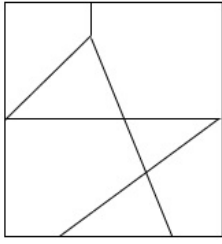
III. Some gloves are stumps.

- Ans** 1. All conclusions follow
 2. Only conclusions I and II follow
 3. Only conclusions I and III follow
 4. Only conclusions II and III follow

Question ID : 26433082310
Status : **Answered**
Chosen Option : 2

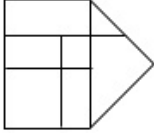
Q.7 वह विकल्प चित्र चुनिए, जो प्रस्तुत चित्र में अंतर्निहित है। (घुमाना अनुमन्य नहीं

है)

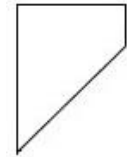


Ans

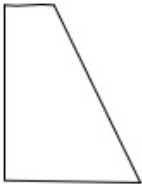
1.



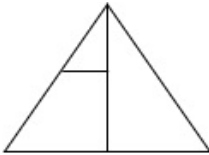
2.



3.



4.



Question ID : 26433069348

Status : Answered

Chosen Option : 2

Q.8 Select the option that is related to the fifth letter-cluster in the same way as the second letter-cluster is related to the first letter-cluster and the fourth letter-cluster is related to the third letter-cluster.

RAIN : SZJM :: FALL : GZMK :: JUMP : ?

Ans 1. KNT0

2. KTNO

3. KOTN

4. OKTN

Question ID : 26433070326

Status : Answered

Chosen Option : 2

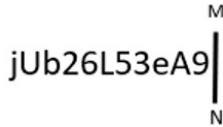
Q.9 Which of the mathematical signs should be interchanged in the below equation to make it mathematically correct?

$$3 + 78 \div 13 - 9 \times 117 = 126$$

- Ans 1. + and -
 2. + and x
 3. + and ÷
 4. ÷ and x

Question ID : 264330114175
Status : Answered
Chosen Option : 2

Q.10 Select the correct mirror image of the given figure when the mirror is placed at MN as shown below.



- Ans 1. jA93eL26Uj
 2. jUb26L53eA9
 3. jA93eL26Uj
 4. jUb26L53eA9

Question ID : 26433085544
Status : Answered
Chosen Option : 1

Q.11 Which number will replace the question mark (?) in the following series?
19, 21, ?, 134, 538, 2692

- Ans 1. 44
 2. 38
 3. 68
 4. 84

Question ID : 26433068970
Status : Answered
Chosen Option : 1

Q.12 Seven people, A, B, C, D, E, F and G are sitting in a straight row, facing north. A sits third to the left of D. D sits to the extreme right. Only two people sit between A and F. B is an immediate neighbour of F. Only 1 person sits between C and D. G is not an immediate neighbour of A. How many people sit between F and C?

- Ans 1. 2
 2. 5
 3. 3
 4. 4

Question ID : 26433056930
Status : Answered
Chosen Option : 3

Q.13 Which option represents the correct order of the given words as they would appear in the English dictionary?

- 1 Peanut
- 2 Peasant
- 3 Peacock
- 4 Peach
- 5 Pencil

- Ans
- 1. 4,3,5,1,2
 - 2. 3,4,5,1,2
 - 3. 4,3,1,2,5
 - 4. 3,4,1,2,5

Question ID : 26433069258
Status : Answered
Chosen Option : 3

Q.14 'G + H' means 'G is the daughter of H'.

'G - H' means 'G is the husband of H'.

'G × H' means 'G is the brother of H'.

If the relationships in a family are represented as: A + Q - R + K - Y, then how is K related to A?

- Ans
- 1. Brother
 - 2. Father
 - 3. Husband
 - 4. Mother's father

Question ID : 26433069176
Status : Answered
Chosen Option : 4

Q.15 Select the option that is related to the fifth term in the same way as the second term is related to the first term and the fourth term is related to the third term.

ARCS : ENHN :: GHAT : KDFO :: MUSK : ?

- Ans
- 1. PRYE
 - 2. QRXE
 - 3. PQYF
 - 4. QQXF

Question ID : 26433058009
Status : Answered
Chosen Option : 4

Q.16 Which of the following letters will replace the question mark (?) and complete the following letter series?

T, R, P, N, L, J, ?

- Ans
- 1. I
 - 2. H
 - 3. F
 - 4. G

Question ID : 26433067277
Status : Answered
Chosen Option : 2

Q.17 In a certain coded language, 'distant face' is coded as 'human sad', 'face stairs' is coded as 'sad overpower', 'distant cup' is coded as 'human tea', and 'stairs cup' is coded as 'overpower tea'. What is the code word for 'face'?

- Ans
- 1. overpower
 - 2. tea
 - 3. human
 - 4. sad

Question ID : 26433069040
Status : Answered
Chosen Option : 4

Q.18 Select the option that is related to the sixth term in the same way as the first term is related to the second term and the third term is related to the fourth term.
169 : 182 :: 225 : 240 :: ? : 306

- Ans
- 1. 291
 - 2. 289
 - 3. 192
 - 4. 195

Question ID : 26433069093
Status : Answered
Chosen Option : 2

Q.19 In a certain code language, 'TRUTH' is coded as UQVSI and 'FIRST' is coded as GHSRU. How will 'WHITE' be coded in that language?

- Ans
- 1. DSRGV
 - 2. XIJUF
 - 3. VGHSD
 - 4. XGJSF

Question ID : 26433074514
Status : Answered
Chosen Option : 4

Q.20 Which two signs should be interchanged to make the below equation mathematically correct?
 $72 \times 3 + 32 \div 4 - 16 = 136$

- Ans
- 1. \times and \div
 - 2. \div and $-$
 - 3. $+$ and $-$
 - 4. \times and $+$

Question ID : 264330117504
Status : Answered
Chosen Option : 1

Section : Part-B-General Knowledge and General awareness

Q.1 Sphalerite is the ore of which of the following metals?

- Ans
- 1. Copper
 - 2. Silver
 - 3. Zinc
 - 4. Tin

Question ID : 264330115142
Status : Not Answered
Chosen Option : --

Q.2 _____ are present only in plant cells.

- Ans 1. Mitochondria
 2. Nucleus
 3. Golgi apparatus
 4. Plastids

Question ID : 264330115239
Status : Answered
Chosen Option : 4

Q.3 Nishagandhi Nritya Utsav is celebrated in which state of India?

- Ans 1. Kerala
 2. Tamil Nadu
 3. Telangana
 4. Karnataka

Question ID : 26433072922
Status : Answered
Chosen Option : 1

Q.4 Which of the following oilseeds is grown both, as a rabi crop and a kharif crop?

- Ans 1. Linseed
 2. Groundnut
 3. Mustard
 4. Castor seed

Question ID : 264330115538
Status : Not Answered
Chosen Option : --

Q.5 On which of the following issues, Lok Sabha and Rajya Sabha don't enjoy equal powers?

- Ans 1. Impeaching the Judges of the Supreme Court and High Court
 2. Impeaching the President
 3. Constitutional amendments
 4. Passing of money bills

Question ID : 26433054105
Status : Answered
Chosen Option : 4

Q.6 Which hills in Meghalaya receive the maximum rainfall?

- Ans 1. Khasi hills
 2. Aravali
 3. Nilgiri
 4. Shivalik

Question ID : 26433086755
Status : Answered
Chosen Option : 1

Q.7 Which country surrounds Tripura from west, north and south sides?

- Ans 1. Bhutan
 2. Vietnam
 3. Myanmar
 4. Bangladesh

Question ID : 264330116098
Status : Answered
Chosen Option : 4

Q.8 Theme of eleventh five year plan in India, was _____.

- Ans 1. Population Growth
 2. Equal Pay for Equal Work
 3. Towards Faster & More Inclusive Growth
 4. Inflation Growth

Question ID : 264330115360
Status : Not Answered
Chosen Option : --

Q.9 The 36th edition of the 2022 National Games of India was held in the state of _____.

- Ans 1. Madhya Pradesh
 2. Gujarat
 3. Maharashtra
 4. Punjab

Question ID : 264330115909
Status : Answered
Chosen Option : 2

Q.10 The total value of goods and services traded is considered to be the _____ of trade.

- Ans 1. Volume
 2. Composition
 3. Direction
 4. Exhibition

Question ID : 26433054780
Status : Not Answered
Chosen Option : --

Q.11 Alarmel Valli a classical dancer who received the Padma Bhushan is known for _____.

- Ans 1. Mohiniattam
 2. Bharatnatyam
 3. Kuchipudi
 4. Kathakali

Question ID : 264330115860
Status : Answered
Chosen Option : 2

Q.12 Article 17 of the Constitution of India deals with _____.

- Ans 1. abolition of untouchability
 2. equality before law
 3. abolition of titles
 4. right to education

Question ID : 26433089905
Status : Answered
Chosen Option : 1

Q.13 Which of the following is NOT a part of revenue budget of the government?

- Ans 1. Non-tax Revenue
 2. Tax Revenue
 3. Plan Revenue Expenditure
 4. Plan Capital Expenditure

Question ID : 264330115291
Status : Not Answered
Chosen Option : --

Q.14 The Rig Veda is a collection of _____ hymns.

- Ans 1. 1028
 2. 1076
 3. 1124
 4. 1152

Question ID : 264330115440
Status : Answered
Chosen Option : 1

Q.15 Who among the following became the chief minister of Uttar Pradesh in March 2022?

- Ans 1. Akhilesh Yadav
 2. Mayawati
 3. Mulayam Singh Yadav
 4. Yogi Adityanath

Question ID : 264330114894
Status : Answered
Chosen Option : 4

Q.16 Who has been elected as the lifetime president of Yuvajana Sramika Rythu Congress Party in July 2022?

- Ans 1. Ajay Maken
 2. Avinash Pandey
 3. Jagan Mohan Reddy
 4. Jitendra Singh

Question ID : 264330114994
Status : Not Answered
Chosen Option : --

Q.17 _____ was an Act passed to make a provision for levy and collection of tax on intra-State supply of goods or services.

- Ans 1. The Central Goods and Services Tax Act
 2. The Central Gifts and Services Tax Act
 3. The Central Goods and Secured Tax Act
 4. The Cost of Goods and Services Tax Act

Question ID : 264330116206
Status : Answered
Chosen Option : 1

Q.18 Awadh was annexed by the British in _____.

- Ans 1. 1845
 2. 1856
 3. 1838
 4. 1859

Question ID : 26433090581
Status : Answered
Chosen Option : 4

Q.19 Famous Indian Boxer Mary Kom is from which state?

- Ans 1. Nagaland
 2. Manipur
 3. Tamil Nadu
 4. Mizoram

Question ID : 264330116274
Status : Answered
Chosen Option : 2

Q.20 Which among the following festivals is also known as "Festival of Festivals"?

- Ans 1. Chapchar Kut
 2. Hornbill Festival
 3. Moatsu
 4. Wangala

Question ID : 264330115080
Status : Not Answered
Chosen Option : --

Section : Part-C-Elementary Mathematics

Q.1 In a store, an item with an MRP of Rs.28,500 is available at a discounted price of Rs.27,645. What is the percentage of discount given on that item?

- Ans 1. 4%
 2. 1%
 3. 3%
 4. 2%

Question ID : 26433082971
Status : Answered
Chosen Option : 3

Q.2 If the difference between compound interest, compounding annually and simple interest on a certain sum at 10% per annum for 2 years is ₹464, then find the sum invested.

- Ans
- 1. ₹46,040
 - 2. ₹46,400
 - 3. ₹44,006
 - 4. ₹44,600

Question ID : 26433081590
Status : Answered
Chosen Option : 2

Q.3 The marked price of an item is 25% more than the cost. What should be the discount on the selling price to earn 10% profit?

- Ans
- 1. 12%
 - 2. 15%
 - 3. 10.5%
 - 4. 12.5%

Question ID : 26433082853
Status : Answered
Chosen Option : 1

Q.4 The length of the rectangle is three times its breadth. If its length is decreased by 7 cm and breadth is increased by 7 cm, its area is increased by 21 cm^2 . The length of the first rectangle is:

- Ans
- 1. 21 cm
 - 2. 18 cm
 - 3. 15 cm
 - 4. 12 cm

Question ID : 26433075477
Status : Answered
Chosen Option : 3

Q.5 A sum of Rs.P was borrowed and paid back in two equal yearly instalments, each of Rs.35,280. If the rate of interest was 5% per annum and interest is compounding annually, then the value of P is _____.

- Ans
- 1. Rs.64,400
 - 2. Rs.65,600
 - 3. Rs.65,400
 - 4. Rs.64,800

Question ID : 26433066412
Status : Answered
Chosen Option : 2

Q.6 A five-digit number 32054 is divisible by 11. If the digits are rearranged in increasing order, then the new number which is formed will be divisible by:

- Ans 1. 3
 2. 11
 3. 5
 4. 2

Question ID : 26433075518
Status : Answered
Chosen Option : 3

Q.7 30 men cut 50 trees in 10 h. If 10 men leave the job, how many trees will be cut in 15 h?

- Ans 1. 50
 2. 45
 3. 55
 4. 60

Question ID : 26433065100
Status : Answered
Chosen Option : 1

Q.8 Find the fourth proportional to the numbers 36, 48 and 90.

- Ans 1. 120
 2. 67.5
 3. 64
 4. 40

Question ID : 26433076188
Status : Answered
Chosen Option : 1

Q.9 In a mixture of 60 litres, the ratio of milk and water is 2 : 3. What amount of water must be added to make the ratio of milk and water 1 : 2?

- Ans 1. 56 litres
 2. 60 litres
 3. 76 litres
 4. 12 litres

Question ID : 26433075497
Status : Answered
Chosen Option : 4

Q.10 What is the HCF of $\frac{4}{5}, \frac{8}{15}, \frac{2}{35}$?

Ans

1. $\frac{2}{525}$

2. $\frac{2}{105}$

3. $\frac{4}{105}$

4. $\frac{2}{75}$

Question ID : 26433075540
Status : Answered
Chosen Option : 2

Q.11 What is the average of the first six even numbers?

Ans

1. 10

2. 5

3. 6

4. 7

Question ID : 26433075054
Status : Answered
Chosen Option : 4

Q.12 A person can row 88 km downstream in 11 h, and 72 km upstream in 12 h. What is the speed of the current?

Ans

1. 1 km/h

2. 2 km/h

3. 1.5 km/h

4. 3 km/h

Question ID : 26433079889
Status : Answered
Chosen Option : 1

Q.13 Suman buys 40 kg of wheat at Rs.12.50/kg and 30 kg of wheat at Rs.14/kg. At what rate per kg should he sell the mixture to gain 5% on the whole?

Ans

1. Rs.14.80

2. Rs.13.80

3. Rs.12.80

4. Rs.11.80

Question ID : 26433066361
Status : Answered
Chosen Option : 2

Q.14 Kapil and Prakash together can do a piece of work in 45 days. Prakash and Pihu together can do it in 60 days. Kapil and Pihu together can do it in 60 days. In how many days will Kapil, Prakash and Pihu finish it together?

- Ans 1. 42 days
 2. 38 days
 3. 36 days
 4. 34 days

Question ID : 264330116890
Status : Answered
Chosen Option : 3

Q.15 A cylindrical tank has a capacity of 5632 m^3 . If the diameter of its base is 8 m, what is the depth of the cylindrical tank?

(Use $\pi = \frac{22}{7}$)

- Ans 1. 112 m
 2. 118 m
 3. 116 m
 4. 114 m

Question ID : 26433079778
Status : Answered
Chosen Option : 1

Q.16 The weight of a baby is increased from 3.2 kg to 6 kg in 3 months. The percent increase in weight of the baby is:

- Ans 1. 75.5 percent
 2. 87.5 percent
 3. 70.5 percent
 4. 82.5 percent

Question ID : 264330116810
Status : Answered
Chosen Option : 2

Q.17 Munaf and Surya start simultaneously at the same point on a circular track and run along the track in the same direction. The point on the track at which they meet for the 31st time is the same as that at which they meet for the 43rd time. If the ratio of the speed of the faster boy to that of the slower one is $n : 1$, where 'n' is a natural number, which of the following is NOT a possible value of 'n'?

- Ans 1. 5
 2. 4
 3. 3
 4. 6

Question ID : 26433073134
Status : Not Answered
Chosen Option : --

Q.18 In an election between two candidates, one who gets 64% of the votes polled is elected by a majority of 4,340 votes. What is the total number of votes polled? (considering that all the polled votes are valid)

- Ans 1. 15500
 2. 16500
 3. 16000
 4. 15000

Question ID : 26433075464
Status : Answered
Chosen Option : 1

Q.19 Shashi buys an old refrigerator for ₹12,000 and spends ₹1,000 on its repairs. If he sells the refrigerator for ₹15,000, then his gain percentage is:

- Ans 1. $13\frac{5}{13}\%$
 2. $14\frac{5}{13}\%$
 3. $15\frac{5}{13}\%$
 4. $16\frac{5}{13}\%$

Question ID : 26433080105
Status : Answered
Chosen Option : 3

Q.20 The average of 9 numbers is 15. If the average of the first five numbers is 13 and the average of the last five numbers is 17, then what is the fifth number?

- Ans 1. 16
 2. 18
 3. 15
 4. 20

Question ID : 26433075639
Status : Answered
Chosen Option : 3

Section : Part-D-English

Q.1 Select the most appropriate synonym of the given word.

Omnipresent

- Ans 1. Powerful
 2. Unique
 3. Contemporary
 4. Universal

Question ID : 26433072349
Status : Answered
Chosen Option : 4

Q.2 Choose the sentence that is in simple past tense:

- A. I was giving some of the chocolates to my younger sister.
- B. I had been giving some of the chocolates to my younger sister.
- C. I had given some of the chocolates to my younger sister.
- D. I gave some of the chocolates to my younger sister.

- Ans
- 1. A
 - 2. D
 - 3. B
 - 4. C

Question ID : 26433089017
Status : Answered
Chosen Option : 2

Q.3 Select the most appropriate synonym of the word given in brackets to fill in the blank.

Dishonest people always _____ (deceive) others.

- Ans
- 1. assist
 - 2. cheat
 - 3. gladden
 - 4. defend

Question ID : 26433070468
Status : Answered
Chosen Option : 2

Q.4 Select the most appropriate option that can substitute the underlined segment in the given sentence.

I asked Rita that how far her school was.

- Ans
- 1. how far her school is
 - 2. that how her school is
 - 3. then how far her school was
 - 4. how far her school was

Question ID : 26433099095
Status : Answered
Chosen Option : 4

Q.5 Select the INCORRECTLY spelt word.

- Ans
- 1. Passage
 - 2. Pancake
 - 3. Pasion
 - 4. Modern

Question ID : 26433085207
Status : Answered
Chosen Option : 3

Q.6 Select the most appropriate synonym of the given word.

Awkward

- Ans** 1. Dormant
 2. Asleep
 3. Clever
 4. Unskillful

Question ID : 26433072186
Status : Answered
Chosen Option : 4

Q.7 Select the most appropriate ANTONYM for the underlined word in the following sentence.

He neglected his duties and was dismissed from his job.

- Ans** 1. Succeeded
 2. Ignored
 3. Attended
 4. Scorned

Question ID : 26433093034
Status : Answered
Chosen Option : 3

Q.8 Select the most appropriate option to fill in the blank.

My mother was _____ at my negligence and scolded me.

- Ans** 1. energetic
 2. furious
 3. thrilled
 4. pleased

Question ID : 26433071882
Status : Answered
Chosen Option : 2

Q.9 Select the most appropriate meaning of the given idiom.

Light at the end of tunnel

- Ans** 1. Something that signals the end of a difficult situation
 2. An opening at the end of a matter
 3. New light coming out from darkness
 4. Preparing for examinations

Question ID : 26433073477
Status : Answered
Chosen Option : 1

Q.10 Select the most appropriate ANTONYM of the given word.

Retain

- Ans 1. Maintain
 2. Forget
 3. Restore
 4. Attain

Question ID : 26433074052
Status : Answered
Chosen Option : 2

Q.11 Select the most appropriate meaning of the idiom in bold in the given sentence.

Because the shop is closing down, most of the stock is going for a song.

- Ans 1. Incredibly expensive
 2. Incredibly inexpensive
 3. Something that is soothing to your ears
 4. Receive punishment

Question ID : 26433072451
Status : Answered
Chosen Option : 2

Q.12 Select the most appropriate ANTONYM to substitute the underlined word in the given sentence.

The goods being sold are of inferior quality.

- Ans 1. superior
 2. anterior
 3. exterior
 4. ulterior

Question ID : 26433074009
Status : Answered
Chosen Option : 1

Q.13 Select the INCORRECTLY spelt word.

- Ans 1. Nutrient
 2. Suitable
 3. Seperate
 4. Permanent

Question ID : 26433073500
Status : Answered
Chosen Option : 3

Q.14 Select the most appropriate ANTONYM of the given word.

Benign

- Ans 1. Favourable
 2. Wicked
 3. Friendly
 4. Cheerful

Question ID : 26433073576
Status : Answered
Chosen Option : 2

Q.15 Select the most appropriate option that can substitute the underlined segment in the given sentence.

The way someone talks and behaves introduces the characteristics of a person.

- Ans
- 1. symbolises the gestures
 - 2. effects the aura
 - 3. defines the personality
 - 4. postulates the personality

Question ID : 26433088502
Status : Answered
Chosen Option : 3

Comprehension:

In the following passage, some words have been deleted. Read the passage carefully and select the most appropriate option to fill in each blank.
Notebook software is included (1)_____ the SMART Board Interactive Whiteboard device. This programme includes a (2)_____ of tools for differentiating education. Professors and students can write on the SMART Board screen using a digital pen or (3)_____ finger if they have a SMART Board. Notebook files may be saved in various formats, printed, emailed, or posted, providing students with a total (4)_____ to course materials. Essentially, having a SMART Board available may (5)_____ everything that can be done on a computer.

SubQuestion No : 16

Q.16 Select the most appropriate option to fill in blank no. 1.

- Ans
- 1. upon
 - 2. to
 - 3. along
 - 4. with

Question ID : 26433058721
Status : Answered
Chosen Option : 4

Comprehension:

In the following passage, some words have been deleted. Read the passage carefully and select the most appropriate option to fill in each blank.
Notebook software is included (1)_____ the SMART Board Interactive Whiteboard device. This programme includes a (2)_____ of tools for differentiating education. Professors and students can write on the SMART Board screen using a digital pen or (3)_____ finger if they have a SMART Board. Notebook files may be saved in various formats, printed, emailed, or posted, providing students with a total (4)_____ to course materials. Essentially, having a SMART Board available may (5)_____ everything that can be done on a computer.

SubQuestion No : 17

Q.17 Select the most appropriate option to fill in blank no. 2.

- Ans
- 1. total
 - 2. limit
 - 3. number
 - 4. design

Question ID : 26433058722
Status : Answered
Chosen Option : 3

Comprehension:

In the following passage, some words have been deleted. Read the passage carefully and select the most appropriate option to fill in each blank.

Notebook software is included (1)_____ the SMART Board Interactive Whiteboard device. This programme includes a (2)_____ of tools for differentiating education. Professors and students can write on the SMART Board screen using a digital pen or (3)_____ finger if they have a SMART Board. Notebook files may be saved in various formats, printed, emailed, or posted, providing students with a total (4)_____ to course materials. Essentially, having a SMART Board available may (5)_____ everything that can be done on a computer.

SubQuestion No : 18

Q.18 Select the most appropriate option to fill in blank no. 3.

- Ans 1. their
 2. there
 3. those
 4. these

Question ID : 26433058723
Status : Answered
Chosen Option : 1

Comprehension:

In the following passage, some words have been deleted. Read the passage carefully and select the most appropriate option to fill in each blank.

Notebook software is included (1)_____ the SMART Board Interactive Whiteboard device. This programme includes a (2)_____ of tools for differentiating education. Professors and students can write on the SMART Board screen using a digital pen or (3)_____ finger if they have a SMART Board. Notebook files may be saved in various formats, printed, emailed, or posted, providing students with a total (4)_____ to course materials. Essentially, having a SMART Board available may (5)_____ everything that can be done on a computer.

SubQuestion No : 19

Q.19 Select the most appropriate option to fill in blank no. 4.

- Ans 1. access
 2. validity
 3. download
 4. exception

Question ID : 26433058724
Status : Answered
Chosen Option : 1

Comprehension:

In the following passage, some words have been deleted. Read the passage carefully and select the most appropriate option to fill in each blank.

Notebook software is included (1)_____ the SMART Board Interactive Whiteboard device. This programme includes a (2)_____ of tools for differentiating education. Professors and students can write on the SMART Board screen using a digital pen or (3)_____ finger if they have a SMART Board. Notebook files may be saved in various formats, printed, emailed, or posted, providing students with a total (4)_____ to course materials. Essentially, having a SMART Board available may (5)_____ everything that can be done on a computer.

SubQuestion No : 20

Q.20 Select the most appropriate option to fill in blank no. 5.

- Ans 1. form
 2. enlighten
 3. create
 4. enhance

Question ID : 26433058725
Status : Answered
Chosen Option : 3

Section : Part-D-Hindi

Q.1 निम्नलिखित वाक्य के किस शब्द में वर्तनी सम्बन्धी अशुद्धि है?
तुफान से डरकर नौका पार नहीं होती।

- Ans
- 1. पार
 - 2. डरकर
 - 3. तुफान
 - 4. नौका

Question ID : 26433066826
Status : Not Answered
Chosen Option : --

Q.2 अपना गुस्सा काबू में करो, शांत रहो।
निम्न में से किस विकल्प में उपरोक्त वाक्य में प्रयुक्त 'शांत' शब्द का विलोम नहीं दिया गया है?

- Ans
- 1. उद्विग्न
 - 2. स्थिर
 - 3. उत्तेजित
 - 4. अशांत

Question ID : 26433080872
Status : Not Answered
Chosen Option : --

Q.3 रोहन ने मंहगा सफारी सूट पहन रखा था और उसके साथ फटे हुए चमरौधे जूते पहन रखे थे, ये तो वही
हुआ _____।
रिक्त स्थान की पूर्ति उचित मुहावरे द्वारा कीजिए।

- Ans
- 1. आधा गंगा आधा जमुना
 - 2. दिखने में अलग असल में अलग
 - 3. रंगा सियार
 - 4. आधा तीतर आधा बटेर

Question ID : 26433062602
Status : Not Answered
Chosen Option : --

Q.4 वह उसका चश्मा भूल गया।
उपरोक्त वाक्य में रेखांकित शब्द के स्थान पर उचित शब्द क्या होगा?

- Ans
- 1. क्या
 - 2. किसका
 - 3. अपना
 - 4. कुछ

Question ID : 26433062202
Status : Not Answered
Chosen Option : --

Q.5 'रमेश को जब उत्तर नहीं मिला तो वह दूसरी तरफ चला गया।' वाक्य में प्रयुक्त 'उत्तर' शब्द निम्न में से
किस अर्थ को व्यक्त करता है?

- Ans
- 1. जवाब
 - 2. पिछला
 - 3. उत्तर दिशा
 - 4. अतीत

Question ID : 26433069731
Status : Not Answered
Chosen Option : --

Q.6 दिए गए वाक्य में प्रयुक्त गलत विभक्ति चिह्न के स्थान पर सही विभक्ति चिह्न होगा—
छुट्टियों में सभी बच्चों का अपने मम्मी-पापा के साथ घूमने जाने का कार्यक्रम बना लिया था।

- Ans 1. ने
 2. से
 3. द्वारा
 4. पर

Question ID : 26433062865
Status : Not Answered
Chosen Option : --

Q.7 'जो कम बोलता है' वाक्यांश के लिए एक शब्द क्या होगा?

- Ans 1. मृदुभाषी
 2. कटुभाषी
 3. मितभाषी
 4. अपभाषी

Question ID : 26433070100
Status : Not Answered
Chosen Option : --

Q.8 रेखांकित शब्द-समूह के लिए सर्वाधिक उपयुक्त विकल्प चुनें।
आज दोपहर के बाद मैं व्यस्त हूँ।

- Ans 1. अपराह्न
 2. पूर्वाह्न
 3. सुबह
 4. भोर

Question ID : 26433062286
Status : Not Answered
Chosen Option : --

Q.9 उन्होंने बोल उठे।

उपरोक्त वाक्य में त्रुटि पहचानकर वाक्य शुद्ध कीजिए।

- Ans 1. वे बोल उठे।
 2. वे ने बोल उठे।
 3. उसने बोल उठे।
 4. उन्होंने बोल उठें।

Question ID : 26433063043
Status : Not Answered
Chosen Option : --

Q.10 'घर में गंगा बहाना' मुहावरे का सही अर्थ है -

- Ans 1. रोज गंगा स्नान करना
 2. धार्मिक प्रवृत्ति का होना
 3. निश्चल व्यक्ति होना
 4. घर में सभी सुविधाएँ होना

Question ID : 26433065926
Status : Not Answered
Chosen Option : --

Q.11 'राधा गौर वर्ण की सुंदर महिला थी।' वाक्य में प्रयुक्त 'वर्ण' शब्द निम्न में से किस अर्थ को व्यक्त करता है?

- Ans
- 1. जाति
 - 2. लक्षण
 - 3. रंग
 - 4. रूप

Question ID : 26433069727
Status : Not Answered
Chosen Option : --

Q.12 'जानने की इच्छा करने वाला' वाक्यांश के लिए उचित शब्द क्या होगा?

- Ans
- 1. दूरदर्शी
 - 2. जितेन्द्रिय
 - 3. जिज्ञासु
 - 4. युयुत्सु

Question ID : 26433067063
Status : Not Answered
Chosen Option : --

Q.13 'ग्रामवास _____।' उपर्युक्त वाक्य में रिक्त स्थान के लिए उपयुक्त विकल्प निम्न में से क्या होगा?

- Ans
- 1. से अभिप्राय होता है ग्राम में वास करना
 - 2. से अभिप्राय होता है ग्राम द्वारा वास करना
 - 3. से अभिप्राय होता है ग्राम के लिए वास करना
 - 4. से अभिप्राय होता है ग्राम से वास करना

Question ID : 26433067040
Status : Not Answered
Chosen Option : --

Q.14 तुम्हारे चले जाने से मुझे बहुत दुःख हुआ।

रेखांकित शब्द के उचित पर्यायवाची शब्द का चयन कीजिए।

- Ans
- 1. ईप्सा
 - 2. बेशर
 - 3. व्यथा
 - 4. तापस

Question ID : 26433079625
Status : Not Answered
Chosen Option : --

Q.15 वर्तनी की दृष्टि से शुद्ध वाक्य का चयन कीजिए-

- Ans
- 1. काम पूरा कर डालो, नहीं तो जूर्माना होगा।
 - 2. इस समय सरदी है, इस्लिए कोट पहन लो।
 - 3. वक्त्र निकल जाता है, पर बात याद रह जाती है।
 - 4. दोश तुम्हारा है, और इसका मुझे विश्वास है।

Question ID : 26433062894
Status : Not Answered
Chosen Option : --

Comprehension:

निम्नलिखित गद्यांश में कुछ शब्दों को हटा दिया गया है। दिए गए विकल्पों की सहायता से रिक्त स्थानों की पूर्ति कीजिए। प्रत्येक संख्या के लिए सबसे उपयुक्त विकल्प का चयन करें।
परमात्मा ने सभी नर-नारियों की आँखों में 1. _____ दिए हैं। इन्हीं आंसुओं के बल पर कोई साधारण मनुष्य 2. _____ बन जाता है और कोई राक्षस पिघलकर फिर से 3. _____ बन जाता है। जिस मनुष्य में जितनी अधिक 4. _____ होती है वह उतना ही कोमल, उदार और 5. _____ इंसान बन जाता है।

SubQuestion No : 16**Q.16 रिक्त स्थान 1 की पूर्ति के लिए सबसे उपयुक्त विकल्प का चयन करें।**

- Ans 1. आँसू
 2. हँसी
 3. मुस्कान
 4. स्मिति

Question ID : 264330110861
Status : Not Answered
Chosen Option : --

Comprehension:

निम्नलिखित गद्यांश में कुछ शब्दों को हटा दिया गया है। दिए गए विकल्पों की सहायता से रिक्त स्थानों की पूर्ति कीजिए। प्रत्येक संख्या के लिए सबसे उपयुक्त विकल्प का चयन करें।
परमात्मा ने सभी नर-नारियों की आँखों में 1. _____ दिए हैं। इन्हीं आंसुओं के बल पर कोई साधारण मनुष्य 2. _____ बन जाता है और कोई राक्षस पिघलकर फिर से 3. _____ बन जाता है। जिस मनुष्य में जितनी अधिक 4. _____ होती है वह उतना ही कोमल, उदार और 5. _____ इंसान बन जाता है।

SubQuestion No : 17**Q.17 रिक्त स्थान 2 की पूर्ति के लिए सबसे उपयुक्त विकल्प का चयन करें।**

- Ans 1. दानव
 2. देवता
 3. असुर
 4. निशाचर

Question ID : 264330110862
Status : Not Answered
Chosen Option : --

Comprehension:

निम्नलिखित गद्यांश में कुछ शब्दों को हटा दिया गया है। दिए गए विकल्पों की सहायता से रिक्त स्थानों की पूर्ति कीजिए। प्रत्येक संख्या के लिए सबसे उपयुक्त विकल्प का चयन करें।
परमात्मा ने सभी नर-नारियों की आँखों में 1. _____ दिए हैं। इन्हीं आंसुओं के बल पर कोई साधारण मनुष्य 2. _____ बन जाता है और कोई राक्षस पिघलकर फिर से 3. _____ बन जाता है। जिस मनुष्य में जितनी अधिक 4. _____ होती है वह उतना ही कोमल, उदार और 5. _____ इंसान बन जाता है।

SubQuestion No : 18**Q.18 रिक्त स्थान 3 की पूर्ति के लिए सबसे उपयुक्त विकल्प का चयन करें।**

- Ans 1. सच्चा मानव
 2. क्रोधी मानव
 3. अहंकारी मानव
 4. बुरा मानव

Question ID : 264330110863
Status : Not Answered
Chosen Option : --

Comprehension:

निम्नलिखित गद्यांश में कुछ शब्दों को हटा दिया गया है। दिए गए विकल्पों की सहायता से रिक्त स्थानों की पूर्ति कीजिए। प्रत्येक संख्या के लिए सबसे उपयुक्त विकल्प का चयन करें।
परमात्मा ने सभी नर-नारियों की आँखों में 1. _____ दिए हैं। इन्हीं आंसुओं के बल पर कोई साधारण मनुष्य 2. _____ बन जाता है और कोई राक्षस पिघलकर फिर से 3. _____ बन जाता है। जिस मनुष्य में जितनी अधिक 4. _____ होती है वह उतना ही कोमल, उदार और 5. _____ इंसान बन जाता है।

SubQuestion No : 19

Q.19 रिक्त स्थान 4 की पूर्ति के लिए सबसे उपयुक्त विकल्प का चयन करें।

- Ans 1. दया
 2. बेदर्दी
 3. क्रूरता
 4. निर्दयता

Question ID : 264330110864
Status : Not Answered
Chosen Option : --

Comprehension:

निम्नलिखित गद्यांश में कुछ शब्दों को हटा दिया गया है। दिए गए विकल्पों की सहायता से रिक्त स्थानों की पूर्ति कीजिए। प्रत्येक संख्या के लिए सबसे उपयुक्त विकल्प का चयन करें।
परमात्मा ने सभी नर-नारियों की आँखों में 1. _____ दिए हैं। इन्हीं आंसुओं के बल पर कोई साधारण मनुष्य 2. _____ बन जाता है और कोई राक्षस पिघलकर फिर से 3. _____ बन जाता है। जिस मनुष्य में जितनी अधिक 4. _____ होती है वह उतना ही कोमल, उदार और 5. _____ इंसान बन जाता है।

SubQuestion No : 20

Q.20 रिक्त स्थान 5 की पूर्ति के लिए सबसे उपयुक्त विकल्प का चयन करें।

- Ans 1. पूजनीय
 2. बदनाम
 3. घृण्य
 4. निंदनीय

Question ID : 264330110865
Status : Not Answered
Chosen Option : --