

Constable GD in CAPFs SSF Rifleman GD in Assam Rifles and Sepoy in NCB Examination 2022

Roll Number	
Candidate Name	
Venue Name	iON Digital Zone iDZ 2 Sector 62
Exam Date	12/01/2023
Exam Time	9:00 AM - 10:00 AM
Subject	Constable GD Examination 2022

Section : Part-A-General Intelligence and Reasoning

Q.1 Select the correct mirror image of the given figure when the mirror is placed at MN as shown below.



- Ans
- 1. J I e @ P w u n m
 - 2. J I @ e P w u n m
 - 3. J I @ e P m u n w
 - 4. J I e @ P m u n w

Question ID : 26433082333

Status : Answered

Chosen Option : 2

Q.2 6 व्यक्ति - A, B, C, D, E और F, एक वृत्ताकार मेज के परितः केंद्र के विपरीत मुख करके बैठे हैं। B, A के बाईं ओर ठीक बगल में बैठा है। F, A के दाईं ओर ठीक बगल में बैठा है। E, F और D के ठीक बगल में बैठा है। C, D के दाईं ओर ठीक बगल में बैठा है। इनमें से कौन A और C के ठीक बगल में बैठा है?

- Ans
- 1. B
 - 2. F
 - 3. E
 - 4. D

Question ID : 26433074608

Status : Not Answered

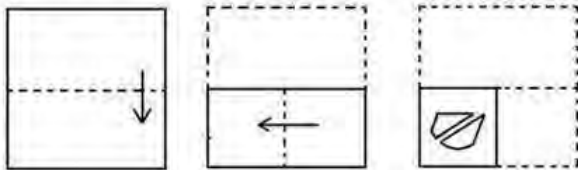
Chosen Option : --

Q.3 Eight friends P, Q, R, S, T, U, V and W are sitting in two rows facing each other. Each row has four persons. Q and R are sitting in front of each other. R is the immediate neighbour of S and T. W is sitting to the immediate left of T. W and U are diagonally opposite. V and Q are not next to each other. Who is in front of T?

- Ans
- 1. Q
 - 2. R
 - 3. P
 - 4. S

Question ID : 26433079065
 Status : Not Answered
 Chosen Option : --

Q.4 The sequence of folding a piece of paper and the manner in which the folded paper has been cut is shown below. Select the figure which would most closely resemble the unfolded form of the paper.



Ans

- 1.
- 2.
- 3.
- 4.

Question ID : 26433087096
 Status : Answered
 Chosen Option : 4

Q.5 Select the option that is related to the fifth letter-cluster in the same way as the second letter-cluster is related to the first letter-cluster and the fourth letter-cluster is related to the third letter-cluster.

KSW : NUX :: AGP : DIQ :: EOY : ?

Ans 1. BQU

2. HQW

3. BQW

4. HOW

Question ID : 26433057747

Status : Answered

Chosen Option : 2

Q.6 In a certain code language, 'FAVOUR' is written as 'RUOVAF' and 'REVEAL' is written as 'LAEVER'. How will 'MIRACLE' be written in that language?

Ans 1. ECLRAIM

2. ELCARIM

3. ECLARMI

4. EMLCRIA

Question ID : 26433082559

Status : Answered

Chosen Option : 2

Q.7 Which letter-cluster will replace the question mark (?) to complete the given series?

SEJW, QGMT, OIPQ, ? , K MVK

Ans 1. MKTN

2. MKTM

3. MKMT

4. MKSN

Question ID : 26433068575

Status : Answered

Chosen Option : 1

Q.8 In a certain code language, 'HUSBAND' is written as 'DNABSUH' and 'CLEARLY' is written as 'YLRAELC'. How will 'HARBOUR' be written in that language?

Ans 1. RUOBRHA

2. ORUBRAH

3. ORUBHRA

4. RUOBRAH

Question ID : 26433068891

Status : Answered

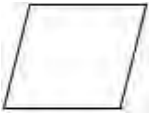
Chosen Option : 4

Q.9 Select the option figure which is embedded in the given figure. (Rotation is NOT allowed)

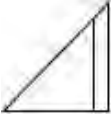


Ans

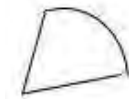
1.



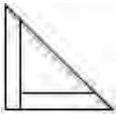
2.



3.



4.



Question ID : 26433069344

Status : Answered

Chosen Option : 3

Q.10 Which two signs should be interchanged to make the below equation mathematically correct?

$$24 + 36 - 81 \times 9 \div 2 = 42$$

Ans 1. ÷ and -

2. × and +

3. + and ×

4. + and -

Question ID : 264330117500

Status : Answered

Chosen Option : 3

Q.11 Which option represents the correct order of the given words as they would appear in the English dictionary?

- 1 Jacket
- 2 Japanese
- 3 Jabbed
- 4 Jackpot
- 5 Janitor

- Ans 1. 3,1,2,5,4
2. 3,1,4,5,2
3. 3,5,2,1,4
4. 3,2,1,4,5

Question ID : 26433069318
Status : Answered
Chosen Option : 2

Q.12 Select the option that is related to the fifth letter-cluster in the same way as the second letter-cluster is related to the first letter-cluster and the fourth letter-cluster is related to the third letter-cluster.

SURGERY : TVSHFSZ :: SILENCE : TJMFODF :: SOCIETY : ?

- Ans 1. YTEICOS
2. TPDJFUZ
3. COSYTEI
4. CIETYSO

Question ID : 26433069638
Status : Answered
Chosen Option : 3

Q.13 Which of the following numbers will replace the question mark (?) in the given series?
1483, 2369, ?, 4141, 5027, 5913

- Ans 1. 3255
2. 2869
3. 3119
4. 3189

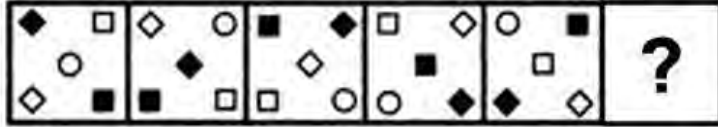
Question ID : 26433068091
Status : Answered
Chosen Option : 1

Q.14 Which of the following terms will replace the question mark (?) in the given series?
RHWC, QKVF, ? , OQTL, NTSO

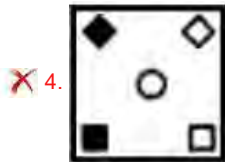
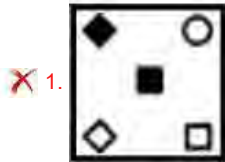
- Ans 1. PMUJ
2. PNUI
3. QNUI
4. ONUJ

Question ID : 26433068309
Status : Answered
Chosen Option : 2

Q.15 Select the figure from among the given options that can replace the question mark (?) in the following series.



Ans



Question ID : 26433080495
 Status : Answered
 Chosen Option : 3

Q.16 Three Statements are given followed by Three conclusions numbered I, II and III. Assuming the statements to be true, even if they seem to be at variance with commonly known facts, decide which of the conclusions logically follow(s) from the statements.

Statements:

Some trees are fish.

All fishes are goats.

No goat is a flower.

Conclusions:

I. Some trees are goats.

II. Some fishes are not flowers.

III. Some flowers are not goats.

Ans ✗ 1. Only conclusion I follows.

✗ 2. Only conclusion II follows.

✗ 3. Only conclusion III follows.

✓ 4. All conclusions follow.

Question ID : 26433081794
 Status : Answered
 Chosen Option : 1

Q.17 Select the correct combination of mathematical signs to sequentially replace the % signs and to balance the given equation.

$42 \% 7 \% 5 \% 10 \% 3$

Ans 1. $\div, \times, =, \times$

2. $\times, =, -, \div$

3. $\div, \times, =, -$

4. $\times, \div, =, -$

Question ID : 26433087046

Status : Answered

Chosen Option : 1

Q.18 Which of the following numbers will replace the question mark (?) in the given series?

1, 2, 2, 4, 3, 6, 4, 8, ?

Ans 1. 7

2. 10

3. 5

4. 9

Question ID : 26433082003

Status : Answered

Chosen Option : 3

Q.19 Select the set in which the numbers are related in the same way as are the numbers of the following sets.

(NOTE : Operations should be performed on the whole numbers, without breaking down the numbers into its constituent digits. E.g. 13 – Operations on 13 such as adding/subtracting/multiplying etc. to 13 can be performed. Breaking down 13 into 1 and 3 and then performing mathematical operations on 1 and 3 is not allowed)

(17, 136, 40)

(11, 198, 90)

Ans 1. (12, 108, 45)

2. (9, 135, 70)

3. (24, 96, 25)

4. (12, 228, 105)

Question ID : 26433076548

Status : Not Answered

Chosen Option : --

Q.20 A @ B का अर्थ है 'A, B की बहन है'।
A & B का अर्थ है 'A, B का भाई है'।
A # B का अर्थ है 'A, B की पत्नी है'।
A ^ B का अर्थ है 'A, B की माता है'।
A + B का अर्थ है 'A, B के पिता है'।
यदि Z & P + N ^ Q # S & V + E @ L है, तो निम्नलिखित में से कौन-सा कथन सही नहीं है?

- Ans
- 1. V, L के पिता हैं।
 - 2. Q, E की माता है।
 - 3. P, Q के नाना हैं।
 - 4. N, S की सास है।

Question ID : 26433068953
Status : Answered
Chosen Option : 1

Section : Part-B-General Knowledge and General awareness

Q.1 Startup India was launched under the _____.

- Ans
- 1. Ministry of Skill Development and Entrepreneurship
 - 2. Ministry of Social Justice and Empowerment
 - 3. Ministry of Labour and Employment
 - 4. Ministry of Commerce and Industry

Question ID : 264330116192
Status : Answered
Chosen Option : 1

Q.2 It is used in making gunny bags, mats, ropes, yarn, carpets and other artefacts. Which crop is being spoken about here?

- Ans
- 1. jute
 - 2. banana
 - 3. coconut
 - 4. palm

Question ID : 264330115534
Status : Answered
Chosen Option : 1

Q.3 Who among the following has received Rajiv Gandhi Puraskar, Indira Priyadarshini Samman and Rotary International Award?

- Ans
- 1. N. Rajam
 - 2. Mahaboob Subhani
 - 3. Zia Mohiuddin Dagar
 - 4. Shovana Narayan

Question ID : 264330115846
Status : Answered
Chosen Option : 1

Q.4 Which of the following is NOT related with the primary sector of economy?

- Ans 1. Forestry
 2. Dairy
 3. Fishing
 4. Banking

Question ID : 26433082166
Status : Answered
Chosen Option : 4

Q.5 The intervention of the government whether to expand demand or reduce it constitutes the _____ function.

- Ans 1. customisation
 2. initiation
 3. stabilisation
 4. creation

Question ID : 264330115287
Status : Answered
Chosen Option : 4

Q.6 Sattriya, is the classical dance form of which of the following states?

- Ans 1. Tamil Nadu
 2. Uttar Pradesh
 3. Maharashtra
 4. Assam

Question ID : 26433071659
Status : Answered
Chosen Option : 4

Q.7 विश्व का सबसे लंबा लिखित संविधान किस देश का है?

- Ans 1. नीदरलैंड
 2. दक्षिण अफ्रीका
 3. संयुक्त राज्य अमेरिका
 4. भारत

Question ID : 26433089176
Status : Answered
Chosen Option : 4

Q.8 What makes the imported goods more expensive?

- Ans 1. Superior Quality
 2. Custom Made goods
 3. Tariffs
 4. Rarity in nature

Question ID : 264330116141
Status : Answered
Chosen Option : 3

Q.9 Which Shiv Sena leader from India was elected as Member of Rajya Sabha from Maharashtra in July 2022?

- Ans 1. Sanjay Raut
 2. Vinayak Raut
 3. Uddhav Thackeray
 4. Aaditya Thackeray

Question ID : 264330114949
Status : Answered
Chosen Option : 3

Q.10 Which of the following is not a Cricketer?

- Ans 1. Saina Nehwal
 2. Sachin Tendulkar
 3. Javagal Srinath
 4. Rahul Dravid

Question ID : 264330116260
Status : Answered
Chosen Option : 1

Q.11 In which region did the Swadeshi Movement have the strongest impact on people?

- Ans 1. Bengal
 2. Kashmir
 3. Berar
 4. United Provinces

Question ID : 26433089884
Status : Answered
Chosen Option : 1

Q.12 In a badminton singles game, if both the players are on 29 points then at what point will one of them win the game?

- Ans 1. 31st point
 2. Match will be drawn
 3. 30th point
 4. 32nd point

Question ID : 264330115929
Status : Answered
Chosen Option : 1

Q.13 The term of the Lok Sabha, unless dissolved is _____ from the date appointed for its first meeting.

- Ans 1. 6 years
 2. 5 Years
 3. 3 Years
 4. 4 years

Question ID : 26433089968
Status : Answered
Chosen Option : 2

Q.14 What is the white precipitate formed in the reaction of sodium sulphate and barium chloride?

- Ans 1. Barium hydroxide
 2. Sodium chloride
 3. Sodium oxide
 4. Barium sulphate

Question ID : 26433091480
Status : Not Answered
Chosen Option : --

Q.15 Ravikirti composed prashasti of which of following Chalukya rulers?

- Ans 1. Mangalesha I
 2. Pulakeshin II
 3. Kirtivaraman II
 4. Vikramaditya IV

Question ID : 26433085221
Status : Not Answered
Chosen Option : --

Q.16 Loo is a characteristic feature of which season?

Ans 1. Summer

2. Winter

3. Spring

4. Autumn

Question ID : 264330115989
Status : Answered
Chosen Option : 1

Q.17 How many balanced meals of average size each day should adolescents have?

Ans 1. three

2. six

3. one

4. two

Question ID : 264330115229
Status : Not Answered
Chosen Option : --

Q.18 As per the Census 2011, what was the literacy rate in India?

Ans 1. 74.04%

2. 88.23%

3. 65.27%

4. 69.90%

Question ID : 264330116055
Status : Answered
Chosen Option : 1

Q.19 Buddha Purnima, celebrated by the devotees of Gautam Buddha, is known as Saga Dawa in which of the following states?

Ans 1. Andhra Pradesh

2. Maharashtra

3. Sikkim

4. Assam

Question ID : 264330115125
Status : Not Answered
Chosen Option : --

Q.20 Who was appointed as the first female Director General of the Council of Scientific and Industrial Research (CSIR) in August 2022?

- Ans
- 1. Navjit Kaur Brar
 - 2. Apeksha Fernandes
 - 3. Nallathamby Kalaiselvi
 - 4. Savitri Jindal

Question ID : 264330114990
Status : Answered
Chosen Option : 1

Section : Part-C-Elementary Mathematics

Q.1 The selling price of an article is $\frac{4}{3}$ times of its cost price. The gain percentage is:

- Ans
- 1. $32\frac{1}{2}\%$
 - 2. $32\frac{1}{3}\%$
 - 3. $33\frac{1}{3}\%$
 - 4. $33\frac{2}{3}\%$

Question ID : 26433075146
Status : Answered
Chosen Option : 3

Q.2 The product of 2 numbers is 6750 and their LCM is 450. If difference between the numbers is equal to their HCF, then find the smaller number.

- Ans
- 1. 150
 - 2. 75
 - 3. 120
 - 4. 90

Question ID : 264330116666
Status : Answered
Chosen Option : 2

Q.3 X gets on a lift at the ground floor which goes up at speed of 30 floors per minute whereas Y gets on another lift at the same time on the 50th floor which goes down at the speed of 45 floors per minute. At which floor will their paths cross?(lifts are moving without stopping at any floor)

- Ans
- 1. 18th
 - 2. 25th
 - 3. 24th
 - 4. 20th

Question ID : 264330116694
Status : Answered
Chosen Option : 4

Q.4 Two athletes A and B are running on a circular track of length 1800 m from the same starting point at the same starting time, at the speeds of 9 m/s and 6 m/s, respectively. At how many distinct points will they meet while running in opposite directions?

- Ans
- 1. 15
 - 2. 3
 - 3. 1
 - 4. 5

Question ID : 26433063241
Status : Answered
Chosen Option : 3

Q.5 Mehul buys a car for Rs. 560000. He renovates it and eventually sells it for Rs. 640000. The percent increase in the price of the car is:

- Ans
- 1. 80/9 percent
 - 2. 100/7 percent
 - 3. 60/7 percent
 - 4. 50/3 percent

Question ID : 264330116796
Status : Answered
Chosen Option : 2

Q.6 If the length of the longest diagonal of a cube is $6\sqrt{3}$ cm, then find the volume of the cube.

- Ans
- 1. 126 cm^3
 - 2. 612 cm^3
 - 3. 216 cm^3
 - 4. 261 cm^3

Question ID : 26433073051
Status : Answered
Chosen Option : 3

Q.7 The total amount after 3 quarters would be Rs.13,310. If the rate of interest is 40% per annum and compounding is performed quarterly, determine the present value (in Rs.).

- Ans
- 1. 13000
 - 2. 11000
 - 3. 10000
 - 4. 9000

Question ID : 26433071332

Status : Answered

Chosen Option : 3

Q.8 Akash travels the distance from his home to school in three equal parts on his bicycle at a speed of 5 km/h, 10 km/h and 15 km/h, respectively. What is the average speed of Akash going from his home to school?

- Ans
- 1. 10 km/h
 - 2. $9\frac{1}{11}$ km/h
 - 3. $8\frac{2}{11}$ km/h
 - 4. 11 km/h

Question ID : 26433080376

Status : Answered

Chosen Option : 3

Q.9 Rs.12,600 is divided among 15 labourers. There are 7 men, 3 women and 5 boys. If each woman receives three times as much as each boy, and each man receives seven times as much as each boy, the share of each woman is _____.

- Ans
- 1. Rs.1,800
 - 2. Rs.1,200
 - 3. Rs.600
 - 4. Rs.900

Question ID : 26433091920

Status : Answered

Chosen Option : 3

Q.10 Find the compound interest on a sum of ₹50,000 at the rate of 6% per annum to be compounded half yearly at the end of 2 years. (Approximate to the nearest integer.)

- Ans
- 1. ₹5,676
 - 2. ₹5,978
 - 3. ₹6,275
 - 4. ₹6,933

Question ID : 26433091560

Status : Answered

Chosen Option : 3

Q.11 The marked price of a fan is 25% more than its cost price. If a discount of 12% is given on the marked price, then the gain per cent is:

- Ans 1. 8%
 2. 9%
 3. 7%
 4. 10%

Question ID : 26433075468
Status : Answered
Chosen Option : 4

Q.12 If $3:5 = x:75$, then what is the value of x?

- Ans 1. 42
 2. 45
 3. 50
 4. 30

Question ID : 26433075662
Status : Answered
Chosen Option : 2

Q.13 Aarav and Durga together can do a piece of work in 33 days. They worked together for 15 days and then Aarav left the work and Durga alone finished the remaining work in 30 days. Find the number of days in which Aarav alone can do the total work.

- Ans 1. $145/2$ days
 2. $135/2$ days
 3. $155/2$ days
 4. $165/2$ days

Question ID : 264330116876
Status : Answered
Chosen Option : 4

Q.14 If a person buys 15 pencils for ₹12, and sells 12 pencils for ₹15, find the gain or loss percentage.

- Ans 1. Gain of 65.25%
 2. Loss of 56.25%
 3. Gain of 56.25%
 4. Loss of 56.52%

Question ID : 26433076174
Status : Answered
Chosen Option : 3

Q.15 There is 16 percent discount on a dozen pairs of trousers marked at Rs. 5000. How many pair of trousers can be bought with Rs. 2100?

- Ans
- 1. 1.5
 - 2. 2.7
 - 3. 3.4
 - 4. 4.6

Question ID : 264330116761
Status : Answered
Chosen Option : 4

Q.16 A number is decreased from 200 to 150. Find the decrease percentage.

- Ans
- 1. 25%
 - 2. 51%
 - 3. 43%
 - 4. 32%

Question ID : 26433080005
Status : Answered
Chosen Option : 1

Q.17 A cylinder has a diameter of 14 cm, and its curved surface area is 220 cm^2 . The volume of the cylinder is:

- Ans
- 1. 670 cm^3
 - 2. 770 cm^3
 - 3. 707 cm^3
 - 4. 620 cm^3

Question ID : 26433075897
Status : Answered
Chosen Option : 2

Q.18 A train is running at a speed of 129 km/h on a straight railway track, and a small car on a parallel road is running at a speed of 60 km/h. How long (in seconds, rounded off to the nearest integer) will the train take to cross the car completely if the train is 943 m long and they are running in the same direction? Ignore the length of the car as compared to the length of the train.

- Ans
- 1. 49
 - 2. 59
 - 3. 39
 - 4. 29

Question ID : 26433075767
Status : Not Answered
Chosen Option : --

Q.19 12 women and 16 men can do a piece of work in 11 days. If each woman takes twice the time taken by a man to do the work, in how many days will 16 men do the same work?

Ans

1. $\frac{117}{8}$ days

2. $\frac{115}{8}$ days

3. $\frac{125}{8}$ days

4. $\frac{121}{8}$ days

Question ID : 26433075120

Status : Not Answered

Chosen Option : --

Q.20 Which of the given pairs form a co-prime numbers pair?

Ans 1. (21 , 42)

2. (9 , 63)

3. (36 , 15)

4. (11 , 21)

Question ID : 26433082359

Status : Answered

Chosen Option : 4

Section : Part-D-English

Q.1 Select the INCORRECTLY spelt word.

Ans 1. Grammar

2. Swindle

3. Kindergarten

4. Imaginery

Question ID : 26433073740

Status : Not Answered

Chosen Option : --

Q.2 Select the most appropriate option that can substitute the underlined segment in the given sentence.

I still enjoyed the week despite of the weather.

Ans 1. despite with the weather

2. despite for the weather

3. despite to the weather

4. despite the weather

Question ID : 26433088168

Status : Not Answered

Chosen Option : --

Q.3 Select the most appropriate meaning of the given idiom.

An axe to grind

- Ans** 1. Personal and selfish reason
 2. Extra effort for solving problems
 3. Handling sharp items
 4. To act justly

Question ID : **26433072435**
Status : **Not Answered**
Chosen Option : --

Q.4 Select the most appropriate option to fill in the blanks and make the sentence meaningful.

My _____ gives me fresh coffee every _____.

- Ans** 1. made; morning
 2. made; mourning
 3. maid; mourning
 4. maid; morning

Question ID : **26433092103**
Status : **Not Answered**
Chosen Option : --

Q.5 Select the most appropriate synonym of the given word.

Exciting

- Ans** 1. Dreary
 2. Electrifying
 3. Moral
 4. Vengeful

Question ID : **26433084889**
Status : **Not Answered**
Chosen Option : --

Q.6 Select the most appropriate ANTONYM of the given word.

Eager

- Ans** 1. Indifferent
 2. Sharp
 3. Great
 4. Greedy

Question ID : **26433072274**
Status : **Not Answered**
Chosen Option : --

Q.7 Select the **INCORRECTLY** spelt word.

- Ans 1. Argue
 2. Lapse
 3. Spoil
 4. Blinc

Question ID : 26433073496
Status : **Not Answered**
Chosen Option : --

Q.8 Select the most appropriate **ANTONYM** of the given word.
Invincible

- Ans 1. Vulnerable
 2. Powerful
 3. Safe
 4. Secure

Question ID : 26433086489
Status : **Not Answered**
Chosen Option : --

Q.9 Select the most appropriate option that can substitute the underlined segment in the given sentence. If there is no need to substitute it, select 'No substitution required'.

The fire fighters were able to put out the fire in the industrial unit.

- Ans 1. to put off
 2. putting out
 3. No substitution required
 4. putting off

Question ID : 26433089754
Status : **Not Answered**
Chosen Option : --

Q.10 Select the most appropriate option to fill in the blank.

Differences among the various groups do not _____ well for the future of the peace treaty.

- Ans 1. auger
 2. ogre
 3. oar
 4. augur

Question ID : 26433090392
Status : **Not Answered**
Chosen Option : --

Q.11 Select the most appropriate option that can substitute the underlined segment in the given sentence. If there is no need to substitute it, select 'No substitution'.
The District Collector, Mr Kaushalendra Kumar, are visiting the site for inspection.

- Ans 1. No substitution
 2. is visiting the site
 3. is visiting cite
 4. are visiting site

Question ID : 26433093079
Status : Not Answered
Chosen Option : --

Q.12 Select the most appropriate meaning of the given idiom.

Get the picture

- Ans 1. To control something
 2. To understand what's happening
 3. To buy something
 4. To watch with own eyes

Question ID : 26433084897
Status : Not Answered
Chosen Option : --

Q.13 Select the most appropriate synonym of the given word.

Conquer

- Ans 1. Attach
 2. Separate
 3. Surrender
 4. Defeat

Question ID : 26433072182
Status : Not Answered
Chosen Option : --

Q.14 Select the option that expresses the given sentence in past perfect tense.

- A. The participants practised a lot for play.
B. The participants had practised a lot for play.
C. The participants had been practising a lot for play.
D. The participants were practising a lot for play.

- Ans 1. C
 2. A
 3. B
 4. D

Question ID : 26433073516
Status : Not Answered
Chosen Option : --

Q.15 Select the most appropriate ANTONYM of the given word.

Freedom

- Ans 1. Bondage
 2. Scarcity
 3. Starvation
 4. Courage

Question ID : 26433073798

Status : Not Answered

Chosen Option : --

Comprehension:

In the following passage, some words have been deleted. Read the passage carefully and select the most appropriate option to fill in each blank.

Delhi National Zoological Park, which opened in 1959, is (1.) _____ next to the well-known Old Fort. One of the top zoos in the entire Asian continent, it stands out for its (2.) _____ to give the animals and the birds housed there a habitat that is as close to natural as possible. With a total area of 214 acres, it is perfect for picnics, (3.) _____ in the winter. The National Zoological Gardens in New Delhi are home to over 2,000 different animal and bird (4.) _____. These animals and birds, which originate from many areas such as Africa, America, Australia, etc., (5.) _____ a home at this zoo. The Mughal Kos Minar serves as the Delhi Zoo's entrance.

SubQuestion No : 16

Q.16 Select the most appropriate option to fill in blank number 1.

- Ans 1. vacated
 2. waited
 3. located
 4. queued

Question ID : 26433089809

Status : Not Answered

Chosen Option : --

Comprehension:

In the following passage, some words have been deleted. Read the passage carefully and select the most appropriate option to fill in each blank.

Delhi National Zoological Park, which opened in 1959, is (1.) _____ next to the well-known Old Fort. One of the top zoos in the entire Asian continent, it stands out for its (2.) _____ to give the animals and the birds housed there a habitat that is as close to natural as possible. With a total area of 214 acres, it is perfect for picnics, (3.) _____ in the winter. The National Zoological Gardens in New Delhi are home to over 2,000 different animal and bird (4.) _____. These animals and birds, which originate from many areas such as Africa, America, Australia, etc., (5.) _____ a home at this zoo. The Mughal Kos Minar serves as the Delhi Zoo's entrance.

SubQuestion No : 17

Q.17 Select the most appropriate option to fill in blank number 2.

- Ans 1. effects
 2. efforts
 3. affects
 4. escalations

Question ID : 26433089810

Status : Not Answered

Chosen Option : --

Comprehension:

In the following passage, some words have been deleted. Read the passage carefully and select the most appropriate option to fill in each blank.

Delhi National Zoological Park, which opened in 1959, is (1.) _____ next to the well-known Old Fort. One of the top zoos in the entire Asian continent, it stands out for its (2.) _____ to give the animals and the birds housed there a habitat that is as close to natural as possible. With a total area of 214 acres, it is perfect for picnics, (3.) _____ in the winter. The National Zoological Gardens in New Delhi are home to over 2,000 different animal and bird (4.) _____. These animals and birds, which originate from many areas such as Africa, America, Australia, etc., (5.) _____ a home at this zoo. The Mughal Kos Minar serves as the Delhi Zoo's entrance.

SubQuestion No : 18

Q.18 Select the most appropriate option to fill in blank number 3.

- Ans 1. explicitly
 2. especially
 3. exactly
 4. variably

Question ID : 26433089811

Status : **Not Answered**

Chosen Option : --

Comprehension:

In the following passage, some words have been deleted. Read the passage carefully and select the most appropriate option to fill in each blank.

Delhi National Zoological Park, which opened in 1959, is (1.) _____ next to the well-known Old Fort. One of the top zoos in the entire Asian continent, it stands out for its (2.) _____ to give the animals and the birds housed there a habitat that is as close to natural as possible. With a total area of 214 acres, it is perfect for picnics, (3.) _____ in the winter. The National Zoological Gardens in New Delhi are home to over 2,000 different animal and bird (4.) _____. These animals and birds, which originate from many areas such as Africa, America, Australia, etc., (5.) _____ a home at this zoo. The Mughal Kos Minar serves as the Delhi Zoo's entrance.

SubQuestion No : 19

Q.19 Select the most appropriate option to fill in blank number 4.

- Ans 1. kingdoms
 2. varieties
 3. species
 4. beings

Question ID : 26433089812

Status : **Not Answered**

Chosen Option : --

Comprehension:

In the following passage, some words have been deleted. Read the passage carefully and select the most appropriate option to fill in each blank.

Delhi National Zoological Park, which opened in 1959, is (1.) _____ next to the well-known Old Fort. One of the top zoos in the entire Asian continent, it stands out for its (2.) _____ to give the animals and the birds housed there a habitat that is as close to natural as possible. With a total area of 214 acres, it is perfect for picnics, (3.) _____ in the winter. The National Zoological Gardens in New Delhi are home to over 2,000 different animal and bird (4.) _____. These animals and birds, which originate from many areas such as Africa, America, Australia, etc., (5.) _____ a home at this zoo. The Mughal Kos Minar serves as the Delhi Zoo's entrance.

SubQuestion No : 20

Q.20 Select the most appropriate option to fill in blank number 5.

- Ans 1. finding
 2. find
 3. found
 4. finds

Question ID : 26433089813
Status : Not Answered
Chosen Option : --

Section : Part-D-Hindi

Q.1 सभ्य व्यक्ति किसी का अपमान नहीं करते हैं।
उपरोक्त वाक्य में रेखांकित शब्द के विलोम शब्द का चयन कीजिए।

- Ans 1. असभ्य
 2. भद्र
 3. शील
 4. शालीन

Question ID : 26433079644
Status : Answered
Chosen Option : 1

Q.2 'साहित्यानुरागी _____।'
उपर्युक्त वाक्य में रिक्त स्थान के लिए उपयुक्त विकल्प निम्न में से क्या होगा?

- Ans 1. से तात्पर्य है साहित्य प्रेमी
 2. से साहित्य प्रेमी तात्पर्य है
 3. का तात्पर्य प्रेमी साहित्य है
 4. का प्रेमी तात्पर्य साहित्य है

Question ID : 26433067036
Status : Answered
Chosen Option : 1

Q.3 निम्नलिखित मुहावरे का उचित अर्थ विकल्पों में से चुनिए।
नाक रगड़ना

- Ans 1. दीनता पूर्वक प्रार्थना करना
 2. परेशान करना
 3. क्रोधित होना
 4. तंग करना

Question ID : 26433069998
Status : Answered
Chosen Option : 3

Q.4 जिसके सभी दाँत झड़ चुके हों।

दिए गए वाक्यांश के लिए एक शब्द होगा-

- Ans 1. पोपला
 2. खोखला
 3. बूढ़ा
 4. खल्वाट

Question ID : 26433070059
Status : Not Answered
Chosen Option : --

Q.5 गर्मियों में गर्म हवा चलती है।
उपरोक्त वाक्य में रेखांकित शब्द के उचित पर्यायवाची शब्द का चयन कीजिए।

- Ans 1. गजराज
 2. सर
 3. वासव
 4. बयार

Question ID : 26433079621
Status : Answered
Chosen Option : 1

Q.6 'भारत देश में इन्दोर स्वच्छता की सूची में प्रथम स्थान पर है।' वाक्य में अशुद्ध वर्तनी वाला शब्द है -

- Ans 1. प्रथम
 2. भारत
 3. इन्दोर
 4. स्वच्छता

Question ID : 26433069700
Status : Answered
Chosen Option : 3

Q.7 रेखांकित शब्द-समूह के लिए सर्वाधिक उपयुक्त विकल्प चुनें।
जिसमें चेतना न हो, उसकी दशा को नहीं सुधारा जा सकता।

- Ans 1. बेहोश
 2. मूर्ख
 3. अचेतन
 4. अवचेतन

Question ID : 26433062282
Status : Not Answered
Chosen Option : --

Q.8 'अकस्मात्' शब्द के लिए इनमें से उपयुक्त पर्यायवाची शब्द कौन-सा है?

- Ans 1. अनिवार्य
 2. अचानक
 3. अदृश्य
 4. अभंज

Question ID : 26433066894
Status : Not Answered
Chosen Option : --

Q.9 निम्नलिखित मुहावरे के लिए उपयुक्त सार्थक शब्द है-
गूलर का फूल होना

- Ans 1. दुर्लभ होना
 2. बहुत ज्यादा परेशान होना
 3. बहुत सुंदर होना
 4. क्रोध करना

Question ID : 26433065778
Status : Answered
Chosen Option : 3

Q.10 निम्नलिखित में से कौन सा संबोधन कारक चिह्न है?

- Ans 1. अरे
 2. हो
 3. ने
 4. से

Question ID : 26433085032
Status : Answered
Chosen Option : 1

Q.11 'राजनीतिज्ञों एवं राजदूतों की नीति संबंधी कला' वाक्यांश के लिए इनमें से उपयुक्त शब्द कौन-सा है?

- Ans 1. राजनीति
 2. कूटनीति
 3. अर्थनीति
 4. गृहनीति

Question ID : 26433066887
Status : Not Answered
Chosen Option : --

Q.12 निम्नलिखित वाक्य के किस शब्द में वर्तनीगत अशुद्धि है?
भगवान शिव का निवास स्थान केलाश है।

- Ans 1. केलाश
 2. शिव
 3. भगवान
 4. निवास

Question ID : 26433066822
Status : Answered
Chosen Option : 1

Q.13 युद्ध की इच्छा रखने वाला युवराज कहलाता है।
उपरोक्त वाक्य में रेखांकित पद के स्थान पर आने वाले सही शब्द का चयन विकल्पों में से कीजिए।

- Ans 1. युयुत्सु
 2. राजनीतिज्ञ
 3. यशस्वी
 4. यायावर

Question ID : 26433063060
Status : Answered
Chosen Option : 3

Q.14 निम्नलिखित विकल्पों में से किस एक वाक्य में संख्यावाचक विशेषण का उचित प्रयोग नहीं किया गया है?

- Ans 1. छत पर चार सफ़ेद कबूतर हैं।
 2. भव्या का स्वभाव अच्छा है।
 3. कुछ खिलाड़ी बहुत अच्छा खेले।
 4. कक्षा में चार छात्र पढ़ते हैं।

Question ID : 26433091237
Status : Answered
Chosen Option : 2

Q.15 'राधा जब घर पहुँची तो दिवस खत्म हो चला था।' वाक्य में प्रयुक्त 'दिवस' का विलोम शब्द नहीं है-

- Ans 1. रजनी
 2. अग्नि
 3. रात्रि
 4. निशा

Question ID : 26433069747

Status : Answered

Chosen Option : 4

Comprehension:

निम्न गद्यावतरण में से कुछ शब्दों को हटा दिया गया है। गद्यावतरण के आधार पर पूछे गए प्रश्नों में इन रिक्त स्थानों के लिए उपयुक्त शब्दों का चयन विकल्पों में से कीजिए।
आवश्यकता इस बात की है कि हमारी शिक्षा का माध्यम 1. _____ भाषा हो, जिसमें राष्ट्र के हृदय-मन-प्राण के सूक्ष्मतम और गंभीरतम संवेदन मुखरित हों और हमारा पाठ्यक्रम यूरोप तथा अमेरिका के पाठ्यक्रम पर 2. _____ न होकर हमारी अपनी सांस्कृतिक परम्पराओं एवं आवश्यकताओं का प्रतिनिधित्व करे। भारतीय भाषाओं, भारतीय 3. _____ भारतीय दर्शन, भारतीय धर्म और भारतीय समाजशास्त्र को हम सर्वोपरि स्थान दें। उन्हें अपने शिक्षाक्रम में गौण स्थान देकर या शिक्षित जन को उनसे वंचित रखकर हमने राष्ट्रीय संस्कृति में एक महान रिक्ति को जन्म दिया है, जो नई 4. _____ को भीतर से खोखला कर रहा है। हम राष्ट्रीय 5. _____ से ही नहीं, सामयिक जीवन प्रवाह से भी दूर जा पड़े हैं।

SubQuestion No : 16

Q.16 रिक्त स्थान 1 के लिए सर्वाधिक उपयुक्त शब्द इनमें से क्या होगा?

- Ans 1. विदेशी
 2. अरबी
 3. अंग्रेजी
 4. भारतीय

Question ID : 26433072594

Status : Answered

Chosen Option : 4

Comprehension:

निम्न गद्यावतरण में से कुछ शब्दों को हटा दिया गया है। गद्यावतरण के आधार पर पूछे गए प्रश्नों में इन रिक्त स्थानों के लिए उपयुक्त शब्दों का चयन विकल्पों में से कीजिए।
आवश्यकता इस बात की है कि हमारी शिक्षा का माध्यम 1. _____ भाषा हो, जिसमें राष्ट्र के हृदय-मन-प्राण के सूक्ष्मतम और गंभीरतम संवेदन मुखरित हों और हमारा पाठ्यक्रम यूरोप तथा अमेरिका के पाठ्यक्रम पर 2. _____ न होकर हमारी अपनी सांस्कृतिक परम्पराओं एवं आवश्यकताओं का प्रतिनिधित्व करे। भारतीय भाषाओं, भारतीय 3. _____ भारतीय दर्शन, भारतीय धर्म और भारतीय समाजशास्त्र को हम सर्वोपरि स्थान दें। उन्हें अपने शिक्षाक्रम में गौण स्थान देकर या शिक्षित जन को उनसे वंचित रखकर हमने राष्ट्रीय संस्कृति में एक महान रिक्ति को जन्म दिया है, जो नई 4. _____ को भीतर से खोखला कर रहा है। हम राष्ट्रीय 5. _____ से ही नहीं, सामयिक जीवन प्रवाह से भी दूर जा पड़े हैं।

SubQuestion No : 17

Q.17 रिक्त स्थान 2 के लिए सर्वाधिक उपयुक्त शब्द इनमें से क्या होगा?

- Ans 1. आधारित
 2. नकल
 3. निर्धारित
 4. जैसा

Question ID : 26433072595

Status : Answered

Chosen Option : 1

Comprehension:

निम्न गद्यावतरण में से कुछ शब्दों को हटा दिया गया है। गद्यावतरण के आधार पर पूछे गए प्रश्नों में इन रिक्त स्थानों के लिए उपयुक्त शब्दों का चयन विकल्पों में से कीजिए।

आवश्यकता इस बात की है कि हमारी शिक्षा का माध्यम 1. _____ भाषा हो, जिसमें राष्ट्र के हृदय-मन-प्राण के सूक्ष्मतम और गंभीरतम संवेदन मुखरित हों और हमारा पाठ्यक्रम यूरोप तथा अमेरिका के पाठ्यक्रम पर 2. _____ न होकर हमारी अपनी सांस्कृतिक परम्पराओं एवं आवश्यकताओं का प्रतिनिधित्व करे। भारतीय भाषाओं, भारतीय 3. _____ भारतीय दर्शन, भारतीय धर्म और भारतीय समाजशास्त्र को हम सर्वोपरि स्थान दें। उन्हें अपने शिक्षाक्रम में गौण स्थान देकर या शिक्षित जन को उनसे वंचित रखकर हमने राष्ट्रीय संस्कृति में एक महान रिक्ति को जन्म दिया है, जो नई 4. _____ को भीतर से खोखला कर रहा है। हम राष्ट्रीय 5. _____ से ही नहीं, सामयिक जीवन प्रवाह से भी दूर जा पड़े हैं।

SubQuestion No : 18

Q.18 रिक्त स्थान 3 के लिए सर्वाधिक उपयुक्त शब्द इनमें से क्या होगा?

Ans 1. इतिहास

2. हिन्दी

3. अंग्रेजी

4. उर्दू

Question ID : 26433072596

Status : Answered

Chosen Option : 1

Comprehension:

निम्न गद्यावतरण में से कुछ शब्दों को हटा दिया गया है। गद्यावतरण के आधार पर पूछे गए प्रश्नों में इन रिक्त स्थानों के लिए उपयुक्त शब्दों का चयन विकल्पों में से कीजिए।

आवश्यकता इस बात की है कि हमारी शिक्षा का माध्यम 1. _____ भाषा हो, जिसमें राष्ट्र के हृदय-मन-प्राण के सूक्ष्मतम और गंभीरतम संवेदन मुखरित हों और हमारा पाठ्यक्रम यूरोप तथा अमेरिका के पाठ्यक्रम पर 2. _____ न होकर हमारी अपनी सांस्कृतिक परम्पराओं एवं आवश्यकताओं का प्रतिनिधित्व करे। भारतीय भाषाओं, भारतीय 3. _____ भारतीय दर्शन, भारतीय धर्म और भारतीय समाजशास्त्र को हम सर्वोपरि स्थान दें। उन्हें अपने शिक्षाक्रम में गौण स्थान देकर या शिक्षित जन को उनसे वंचित रखकर हमने राष्ट्रीय संस्कृति में एक महान रिक्ति को जन्म दिया है, जो नई 4. _____ को भीतर से खोखला कर रहा है। हम राष्ट्रीय 5. _____ से ही नहीं, सामयिक जीवन प्रवाह से भी दूर जा पड़े हैं।

SubQuestion No : 19

Q.19 रिक्त स्थान 4 के लिए सर्वाधिक उपयुक्त शब्द इनमें से क्या होगा?

Ans 1. सेना

2. पीढ़ी

3. युवा

4. आदमी

Question ID : 26433072597

Status : Answered

Chosen Option : 2

Comprehension:

निम्न गद्यावतरण में से कुछ शब्दों को हटा दिया गया है। गद्यावतरण के आधार पर पूछे गए प्रश्नों में इन रिक्त स्थानों के लिए उपयुक्त शब्दों का चयन विकल्पों में से कीजिए।

आवश्यकता इस बात की है कि हमारी शिक्षा का माध्यम 1. _____ भाषा हो, जिसमें राष्ट्र के हृदय-मन-प्राण के सूक्ष्मतम और गंभीरतम संवेदन मुखरित हों और हमारा पाठ्यक्रम यूरोप तथा अमेरिका के पाठ्यक्रम पर 2. _____ न होकर हमारी अपनी सांस्कृतिक परम्पराओं एवं आवश्यकताओं का प्रतिनिधित्व करे। भारतीय भाषाओं, भारतीय 3. _____ भारतीय दर्शन, भारतीय धर्म और भारतीय समाजशास्त्र को हम सर्वोपरि स्थान दें। उन्हें अपने शिक्षाक्रम में गौण स्थान देकर या शिक्षित जन को उनसे वंचित रखकर हमने राष्ट्रीय संस्कृति में एक महान रिक्ति को जन्म दिया है, जो नई 4. _____ को भीतर से खोखला कर रहा है। हम राष्ट्रीय 5. _____ से ही नहीं, सामयिक जीवन प्रवाह से भी दूर जा पड़े हैं।

SubQuestion No : 20

Q.20 रिक्त स्थान 5 के लिए सर्वाधिक उपयुक्त शब्द इनमें से क्या होगा?

- Ans 1. रीति
 2. परम्परा
 3. नियम
 4. रूढ़ि

Question ID : 26433072598

Status : Answered

Chosen Option : 2