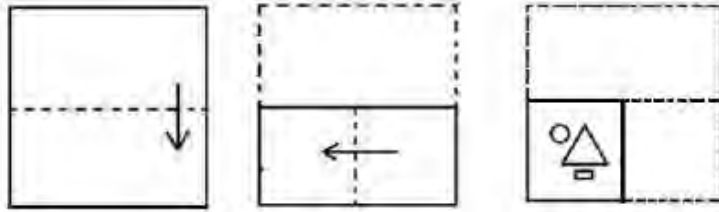


## Constable GD in CAPFs SSF Rifleman GD in Assam Rifles and Sepoy in NCB Examination 2022

Roll Number	
Candidate Name	
Venue Name	iON Digital Zone iDZ 1 Moula Ali
Exam Date	11/01/2023
Exam Time	5:15 PM - 6:15 PM
Subject	Constable GD Examination 2022

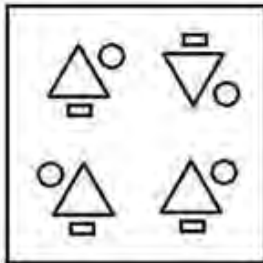
Section : **Part-A-General Intelligence and Reasoning**

**Q.1** The sequence of folding a piece of paper and the manner in which the folded paper has been cut is shown below. Select the figure which would most closely resemble the unfolded form of the paper.

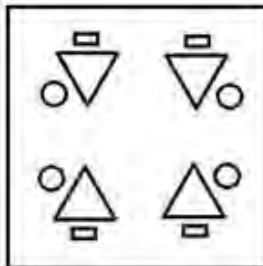


**Ans**

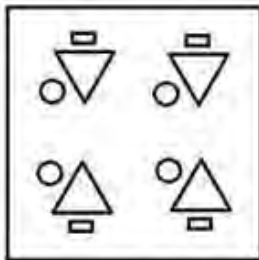
✗ 1.



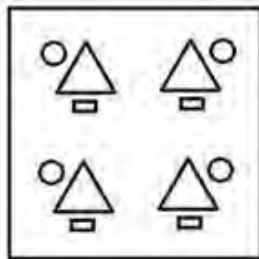
✓ 2.



✗ 3.



✗ 4.



Question ID : 26433087098

Status : Answered

Chosen Option : 2

Q.2 Select the correct combination of mathematical signs to sequentially replace the % signs and to balance the given equation.

48 % 12 % 5 % 5 % 4

- Ans  1.  $\times, \div, =, -$   
 2.  $\div, \times, =, \times$   
 3.  $\times, =, -, \div$   
 4.  $\div, \times, =, -$

Question ID : 26433087047  
Status : Answered  
Chosen Option : 2

Q.3 In a certain code language, BRAVE is coded as 48, and SPEAR is coded as 59. How will VICTOR be coded in that language?

- Ans  1. 85  
 2. 81  
 3. 87  
 4. 83

Question ID : 26433067996  
Status : Answered  
Chosen Option : 3

Q.4 Select the set in which the numbers are related in the same way as are the numbers of the following set.

(NOTE : Operations should be performed on the whole numbers, without breaking down the numbers into its constituent digits. E.g. 13 – Operations on 13 such as adding /subtracting/multiplying etc. to 13 can be performed. Breaking down 13 into 1 and 3 and then performing mathematical operations on 1 and 3 is NOT allowed)  
(11, 20, 341)  
(25, 33, 638)

- Ans  1. (20, 25, 625)  
 2. (12, 29, 341)  
 3. (14, 17, 363)  
 4. (12, 32, 484)

Question ID : 26433076488  
Status : Not Answered  
Chosen Option : --

Q.5 Which of the following letter-clusters will replace the question mark (?) in the given series?

XEJT, UHMQ, ?, ONSK, LQVH

- Ans  1. RKPN  
 2. SKQN  
 3. RKQM  
 4. RLPN

Question ID : 26433076447  
Status : Answered  
Chosen Option : 1

**Q.6** In this question, three statements are given, followed by two conclusions numbered I and II. Assuming the statements to be true, even if they seem to be at variance with commonly known facts, decide which of the conclusions logically follows/follow from the statements.

**Statements:**

All notebooks are pink.

All pinks are shirts.

Some shirts are trousers.

**Conclusions:**

I. All trousers are notebooks.

II. Some trousers are pink.

- Ans**
- 1. Only conclusion I follows.
  - 2. Both conclusions I and II follow.
  - 3. Neither conclusion I nor II follows.
  - 4. Only conclusion II follows.

Question ID : 26433070394

Status : Answered

Chosen Option : 3

**Q.7** A # B means 'A is the brother of B'  
A @ B means 'A is the daughter of B'  
A & B means 'A is the husband of B'  
A % B means 'A is the wife of B'  
A \* B means 'A is the son of B'  
If M\*G@K@B%\*A\*W, then how is A related to G?

- Ans**
- 1. Mother's father
  - 2. Brother
  - 3. Father
  - 4. Mother

Question ID : 26433082533

Status : Answered

Chosen Option : 1

**Q.8** In a certain code language, 'TRAVEL' is written as '156', 'PERSON' is written as '174', how will 'ALMOND' be written as in that language?

- Ans**
- 1. 64
  - 2. 118
  - 3. 59
  - 4. 120

Question ID : 26433083113

Status : Answered

Chosen Option : 2

**Q.9** Six candidates Anand, Balu, Charan, Dinesh, Emran and Farhad were seated on a circular table for group discussion at equal distance, facing the centre of the circle. Dinesh is the immediate neighbour of Emran and Balu while Charan is the immediate neighbour of Anand and Farhad. If Farhad is to the immediate right of Balu, then who is on the immediate right of Dinesh?

- Ans  1. Farhad  
 2. Anand  
 3. Emran  
 4. Balu

Question ID : 26433079053

Status : Answered

Chosen Option : 4

**Q.10** Six friends (P, Q, R, S, T and U) are sitting around a circular table facing the centre. P sits second to the right of U. R sits third to the right of Q. S and R both are the immediate neighbours of P. Who sits between Q and P?

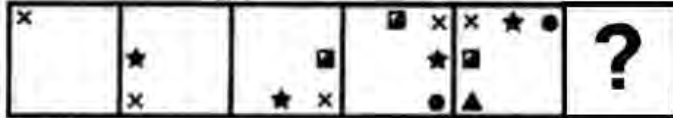
- Ans  1. T  
 2. R  
 3. S  
 4. U

Question ID : 26433092774

Status : Answered

Chosen Option : 3

Q.11 Select the figure from among the given options that can replace the question mark (?) in the following series.



Ans

1.



2.



3.

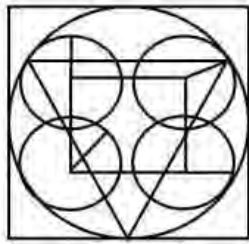


4.



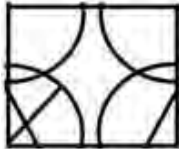
Question ID : 26433080496  
 Status : Answered  
 Chosen Option : 2

Q.12 Select the option figure which is embedded in the given figure. (Rotation is NOT allowed).

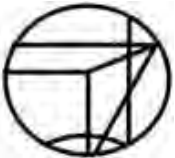


Ans

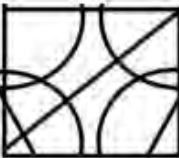
✓ 1.



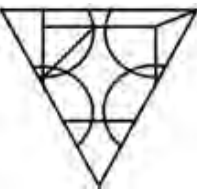
✗ 2.



✗ 3.



✗ 4.



Question ID : 26433076580

Status : Answered

Chosen Option : 2

Q.13 Which letter-cluster will replace the question mark (?) to complete the given series?  
AKED, ENGE, ?, MTKG, QWMH

Ans ✗ 1. IQJE

✗ 2. IRIF

✓ 3. IQIF

✗ 4. IQJF

Question ID : 26433068576

Status : Answered

Chosen Option : 3

Q.14 Which of the following numbers will replace the question mark (?) in the given series?  
50, 60, 51, 62, 54, 66, 59, 72, ?

- Ans  1. 71  
 2. 66  
 3. 65  
 4. 64

Question ID : 26433082868  
Status : Answered  
Chosen Option : 2

Q.15 Select the option that is related to the fifth letter-cluster in the same way as the second letter-cluster is related to the first letter-cluster and the fourth letter-cluster is related to the third letter-cluster.

EXPLAIN : AEILNPX :: MEDICAL : AEICDLM :: PRIVACY : ?

- Ans  1. AICPRYV  
 2. AICPRVY  
 3. AICRPVY  
 4. ACIPVRY

Question ID : 26433082629  
Status : Answered  
Chosen Option : 2

Q.16 Which option represents the correct order of the given words as they would appear in the English dictionary?

- 1 Bread
- 2 Brain
- 3 Break
- 4 Broom
- 5 Bridge

- Ans  1. 3,2,1,4,5  
 2. 2,1,3,5,4  
 3. 3,1,2,4,5  
 4. 2,3,1,4,5

Question ID : 26433069319  
Status : Answered  
Chosen Option : 2



Q.17 Select the correct mirror image of the given figure when the mirror is placed at MN as shown below.

X C W V 5 2 3 A  
M ————— N

- Ans
- 1. X C M Λ 5 5 3 A
  - 2. X C M Λ 2 2 3 A
  - 3. X C W V 2 5 3 A
  - 4. X C M Λ 2 5 3 A

Question ID : 26433080805  
Status : Answered  
Chosen Option : 4

Q.18 Which two signs should be interchanged to make the below equation mathematically correct?

$$112 - 14 \div 40 + 8 \times 12 = 64$$

- Ans
- 1. + and ÷
  - 2. + and ×
  - 3. ÷ and -
  - 4. - and +

Question ID : 264330117543  
Status : Answered  
Chosen Option : 3

Q.19 Select the option that is related to the fifth letter-cluster in the same way as the second letter-cluster is related to the first letter-cluster and the fourth letter-cluster is related to the third letter-cluster.

DOWN: VKCL:: ARMY: YHMA :: HOME:?

- Ans
- 1. GNLD
  - 2. RKMU
  - 3. TMOW
  - 4. SLNV

Question ID : 26433057495  
Status : Answered  
Chosen Option : 2

**Q.20** Which of the following numbers will replace the question mark (?) in the given series?  
23, 24, 50, 153, ?

- Ans  1. 512  
 2. 516  
 3. 616  
 4. 204

Question ID : 26433082004  
Status : Not Answered  
Chosen Option : --

Section : Part-B-General Knowledge and General awareness

**Q.1** \_\_\_\_\_ (NPS) is a voluntary, defined contribution retirement savings scheme to enable the subscribers to make optimum decisions regarding their future through systematic savings.

- Ans  1. National Permit System  
 2. National Pension System  
 3. National Paid Scheme  
 4. National Payer System

Question ID : 264330116174  
Status : Answered  
Chosen Option : 2

**Q.2** 'Gonph' dance is a famous folk dance of which state?

- Ans  1. Uttar Pradesh  
 2. Goa  
 3. Bihar  
 4. Odisha

Question ID : 26433074073  
Status : Not Answered  
Chosen Option : --

**Q.3** Which of the following is not an essential Qualification for the candidature of President?

- Ans  1. Qualified for election as a member of the House of the People  
 2. Minimum Thirty-Five years of Age  
 3. Citizen of India  
 4. Higher Education

Question ID : 264330115664  
Status : Answered  
Chosen Option : 4

**Q.4 In India, the responsibility of conducting the decadal census rests with which ministry?**

Ans  1. Ministry of Home Affairs

2. Ministry of Finance

3. Ministry of Corporate Affairs

4. Ministry of Statistics

Question ID : 264330116037

Status : Answered

Chosen Option : 1

**Q.5 Identify the third layer of soil from top.**

Ans  1. Unweathered parent bed rock

2. Sub soil

3. Top soil

4. Substratum weathered parent rock material

Question ID : 26433091492

Status : Not Answered

Chosen Option : --

**Q.6 The Hemis festival is predominantly celebrated in \_\_\_\_\_.**

Ans  1. Puducherry

2. Chandigarh

3. Ladakh

4. Lakshadweep

Question ID : 26433094885

Status : Answered

Chosen Option : 3

**Q.7 Which five year plan was running in India during the 1971 Indo-Pak war?**

Ans  1. Eighth

2. Fourth

3. Second

4. Sixth

Question ID : 264330116127

Status : Not Answered

Chosen Option : --

**Q.8 In India, the first phase of the green revolution was from mid \_\_\_\_\_ upto mid \_\_\_\_\_.**

Ans  1. 1940, 1950

2. 1970, 1980

3. 1960, 1970

4. 1950, 1960

Question ID : 264330115412

Status : Not Answered

Chosen Option : --

**Q.9 The Asian Games 2018 was held in which of the following country?**

Ans  1. Indonesia

2. Singapore

3. Thailand

4. Maldives

Question ID : 264330116256

Status : Not Answered

Chosen Option : --

**Q.10 Aparna Satheesan was honoured with the prestigious Bharata Shastra Nritya Praveena National Award for her outstanding performance in which dance form?**

Ans  1. Kathakali

2. Bharatnatyam

3. Lavani

4. Kuchipudi

Question ID : 264330115828

Status : Not Answered

Chosen Option : --

**Q.11 What is the diameter and weight of the discus used in a discus thrown in Men's category?**

Ans  1. 3kg in weight and 24cm in diameter

2. 2kg in weight and 23cm in diameter

3. 2kg in weight and 22cm in diameter

4. 2.5kg in weight and 22cm in diameter

Question ID : 264330115930

Status : Not Answered

Chosen Option : --

**Q.12 In 2019, with \_\_\_\_\_ million tonnes of crude steel production, India ranked 2nd among the world crude steel producers.**

Ans  1. 71

2. 234

3. 198

4. 111

Question ID : 264330115577

Status : Not Answered

Chosen Option : --

Q.13 Which among the following elements has atomic number 33?

Ans  1. Arsenic

2. Barium

3. Neon

4. Iodine

Question ID : 264330115169

Status : Answered

Chosen Option : 1

Q.14 The \_\_\_\_\_ has the sole authority to issue banknotes in India.

Ans  1. State Bank of India

2. Securities bank

3. World bank

4. Reserve bank of India

Question ID : 264330115330

Status : Not Answered

Chosen Option : --

Q.15 Who has been appointed as Vice Chairman of NITI AAYOG from 1 May 2022?

Ans  1. Gita Gopinath

2. Dr. Hiren Joshi

3. Ranjan Gogoi

4. Suman Bery

Question ID : 264330115033

Status : Answered

Chosen Option : 4

Q.16 As the Mauryan empire was so large, different parts were ruled differently. The area around \_\_\_\_\_ was under the direct control of the emperor.

Ans  1. Taxila

2. Ujjain

3. Pataliputra

4. Lumbini

Question ID : 26433085222

Status : Not Answered

Chosen Option : --

Q.17 To defend the Khalifa's temporal powers, a Khilafat Committee was formed in Bombay in \_\_\_\_\_.

- Ans  1. May 1918  
 2. May 1919  
 3. March 1918  
 4. March 1919

Question ID : 264330115720  
Status : Not Answered  
Chosen Option : --

Q.18 Which of the following pair of cell - shape is correct?

- I. Red blood cells - Spherical shape  
II. Muscle cells - Spindle shape

- Ans  1. Neither I nor II  
 2. Both I and II  
 3. Only II  
 4. Only I

Question ID : 264330115211  
Status : Not Answered  
Chosen Option : --

Q.19 Which of the following duties was NOT added by the 42nd amendment to the Indian Constitution?

- Ans  1. To provide opportunities for education to one's child or ward between the ages of six and fourteen years  
 2. To value and preserve the rich heritage of the country's composite culture  
 3. To safeguard public property and to abjure violence  
 4. To uphold and protect the sovereignty, unity and integrity of India

Question ID : 26433090666  
Status : Not Answered  
Chosen Option : --

Q.20 Who was approved as the non-executive part time chairman of Yes Bank by Reserve Bank of India in September 2022?

- Ans  1. Osborn Smith  
 2. Shaktikanta Das  
 3. Rama Subramaniam Gandhi  
 4. Raghuram Rajan

Question ID : 264330114950  
Status : Not Answered  
Chosen Option : --

Section : Part-C-Elementary Mathematics

Q.1 Ankita bought some toys at 10 percent discount on the original price. The original price of each toy was Rs. 50. If she made a total savings of Rs. 450, then how many toys did she buy?

- Ans  1. 75  
 2. 50  
 3. 90  
 4. 45

Question ID : 264330116743  
Status : Answered  
Chosen Option : 3

Q.2 A cyclist and a jogger cover a certain distance at a certain speed. If the jogger covers one-third of the distance covered by cyclist in double of the time as that taken by the cyclist, the ratio of the speed of the jogger to that of the cyclist is:

- Ans  1. 1 : 9  
 2. 9 : 1  
 3. 1 : 6  
 4. 6 : 1

Question ID : 26433075441  
Status : Answered  
Chosen Option : 3

Q.3 A woman buys an item for Rs.950 and sells it for Rs.1,150. What is her percentage profit (rounded off to the nearest integer)?

- Ans  1. 21%  
 2. 23%  
 3. 20%  
 4. 22%

Question ID : 26433075758  
Status : Not Answered  
Chosen Option : --

Q.4 On an item, a shopkeeper offers a discount of 7.5% on the marked price and a cashback of ₹10 per item. He still earns ₹5 per item. If ₹x is the marked price of each item, then, what is the cost price (in ₹) of each item?

- Ans  1.  $0.915x - 5$   
 2.  $0.925x - 5$   
 3.  $0.925x - 15$   
 4.  $0.915x - 15$

Question ID : 26433085451  
Status : Not Answered  
Chosen Option : --

Q.5 After deducting 15% from a certain sum and then 25% from the remainder, there is ₹4,335 left. Find the original sum.

- Ans
- 1. ₹6,800
  - 2. ₹6,700
  - 3. ₹6,500
  - 4. ₹7,000

Question ID : 26433080155  
Status : Not Answered  
Chosen Option : --

Q.6 The expenditure of a man is 70% of his income. If his income will successively increase by 20% and 50%, then his new expenditures is how much percentage more/less than his previous expenditure, so that his new savings become 2.5 times of the previous savings?

- Ans
- 1. More, 50%
  - 2. Less, 50%
  - 3. Less, 54%
  - 4. More, 54%

Question ID : 26433081066  
Status : Not Answered  
Chosen Option : --

Q.7 A completes 80% of a work in 20 days. Then B joins A and they complete the remaining work in 3 days. How long will B alone take to complete the whole work?

- Ans
- 1.  $37\frac{1}{2}$  days
  - 2. 40 days
  - 3. 39 days
  - 4.  $35\frac{1}{2}$  days

Question ID : 26433075163  
Status : Not Answered  
Chosen Option : --



Q.8 The maximum length of a rod (in m) that can be kept in a cuboidal room of length 10 m, breadth 6 m and height 8 m, is:

Ans

1.  $9\sqrt{2}$

2.  $12\sqrt{2}$

3.  $10\sqrt{2}$

4.  $15\sqrt{2}$

Question ID : 26433074475

Status : Not Answered

Chosen Option : --

Q.9 The ratio of cheese to sauce for a single pizza is 1 cup to  $\frac{1}{2}$  cup. If Rama used 15 cups of sauce to make a certain number of pizzas, then how many cups of cheese did she use on those pizzas?

Ans

1. 30

2. 20

3. 40

4. 10

Question ID : 26433075812

Status : Not Answered

Chosen Option : --

Q.10 A bicyclist travels 20 miles in 2 h and 30 min and 10 miles in 1 h 15 min. Find the average speed in miles per hour.

Ans

1. 6

2. 10

3. 4

4. 8

Question ID : 26433081550

Status : Not Answered

Chosen Option : --

Q.11 Sakshi and Komal together can complete a work in 10 days. Komal can complete the same work in 22 days. They started working together but Sakshi left the work after 3 days and Komal completed the remaining work alone. Find the total number of days in which the work is completed.

Ans

1.  $\frac{88}{5}$  days

2.  $\frac{92}{5}$  days

3.  $\frac{97}{5}$  days

4.  $\frac{44}{5}$  days

Question ID : 264330116858

Status : Not Answered

Chosen Option : --

Q.12 A bank offers compound interest at the rate of 10% per annum when interest is compounded half-yearly. A customer deposits Rs.3,200 each on 1<sup>st</sup> January and 1<sup>st</sup> July of a year. At the end of the year, what will be the amount received by customer as interest?

- Ans  1. Rs.488  
 2. Rs.656  
 3. Rs.720  
 4. Rs.528

Question ID : 26433072972  
Status : Not Answered  
Chosen Option : --

Q.13 The value of  $\frac{16 \times 9 \div 4 \text{ of } 2}{3 \times (9-6) - 2 \times 3 \div 4 \text{ of } \frac{1}{2}}$  is:

- Ans  1. 3  
 2. 9  
 3. 36  
 4. 18

Question ID : 26433075752  
Status : Answered  
Chosen Option : 1

Q.14 What is the difference between compound interests on ₹5,000 compounded yearly and half-yearly for 1 year at 4% per annum?

- Ans  1. ₹2.04  
 2. ₹2.00  
 3. ₹19.04  
 4. ₹3.20

Question ID : 26433076330  
Status : Not Answered  
Chosen Option : --

Q.15 The ratio of the money with Geeta and Radha is 7 : 15 and that of the money with Radha and Savitha is 7 : 16. If Geeta has ₹980, how much money does Savitha have?

- Ans  1. ₹2,400  
 2. ₹2,100  
 3. ₹9,800  
 4. ₹4,800

Question ID : 26433076184  
Status : Not Answered  
Chosen Option : --

**Q.16** A fast local train takes 30 minutes less than a slow local train for a journey of 60 km. If the speed of the slow local train is 20 km/h less than the speed of the fast local train, what is the speed of the slow local train?

- Ans
- 1. 60 km/h
  - 2. 30 km/h
  - 3. 40 km/h
  - 4. 50 km/h

Question ID : 26433080289  
Status : Not Answered  
Chosen Option : --

**Q.17** A person travels from one place to another at 180 km/h and returns to the starting point by the same route at 240 km/h. If the total time taken is 6 h, then find the distance between two places.

- Ans
- 1. 872.26 km
  - 2. 720.84 km
  - 3. 650.28 km
  - 4. 617.14 km

Question ID : 26433080047  
Status : Not Answered  
Chosen Option : --

**Q.18** The length, breadth and the height of a cuboid are 24 cm, 18 cm and 12 cm respectively. It is melted to make smaller cubes. If the length of the side of the cube is 6 cm, then what is the number of cubes formed?

- Ans
- 1. 22
  - 2. 26
  - 3. 18
  - 4. 24

Question ID : 26433075713  
Status : Not Answered  
Chosen Option : --

**Q.19** The numbers 73, 115 and 185 are divided a by number to leave the same remainder. Find the greater possible such number.

- Ans
- 1. 5
  - 2. 7
  - 3. 14
  - 4. 11

Question ID : 264330116667  
Status : Not Answered  
Chosen Option : --

**Q.20** As shopkeeper using a faulty weight while professes to sell the article at cost price and gains a profit of 25%. Find the faulty weight he uses for 1000 g.

- Ans  1. 850 g  
 2. 750 g  
 3. 800 g  
 4. 975 g

Question ID : 26433080020  
Status : Not Answered  
Chosen Option : --

Section : Part-D-English

**Q.1** Select the option that expresses the given sentence in future tense form.

We were holding the things with a strong rope.

- Ans  1. We will be holding the things with a strong rope.  
 2. We have been holding the things with a strong rope.  
 3. We were being holding the things with a strong rope.  
 4. We are holding the things with a strong rope.

Question ID : 26433089293  
Status : Answered  
Chosen Option : 1

**Q.2** Select the correct word for the blanks in the given sentence.

A \_\_\_\_\_ is a nocturnal animal and a \_\_\_\_\_ is needed for the game of cricket.

- Ans  1. ball  
 2. bales  
 3. goal  
 4. bat

Question ID : 26433060534  
Status : Answered  
Chosen Option : 4

**Q.3** Select the most appropriate option to fill in the blank.

Her face was \_\_\_\_\_ after seeing the house in such condition.

- Ans  1. bedew  
 2. blue  
 3. brew  
 4. blew

Question ID : 26433090393  
Status : Answered  
Chosen Option : 1

**Q.4** Select the most appropriate option that can substitute the underlined segment in the given sentence. If there is no need to substitute it, select 'No substitution'.

She has barely made it to the airport, when she heard the news of her dad's accident.

- Ans
- 1. have barely made it
  - 2. had barely made it
  - 3. No substitution
  - 4. is barely making it

Question ID : 26433089112  
Status : Answered  
Chosen Option : 2

**Q.5** Select the most appropriate set of words to complete the sentence.

I want to see the Dussehra \_\_\_\_\_ in Delhi, what is the second-class railway \_\_\_\_\_ from Agra to Delhi.

- Ans
- 1. fair; fare
  - 2. fare; fair
  - 3. fair; fair
  - 4. fare; fare

Question ID : 26433088871  
Status : Answered  
Chosen Option : 1

**Q.6** Select the most appropriate meaning of the given idiom.

Flash in the pan

- Ans
- 1. Someone who helps others when they are in need, with no discussion for compensation, and no thought of a reward
  - 2. Something that looks promising in the beginning but fails to deliver anything in the end
  - 3. Not willing or wanting to change from your normal way of doing something
  - 4. A place where people gather to buy and sell inexpensive goods

Question ID : 26433073715  
Status : Answered  
Chosen Option : 1

**Q.7** Select the most appropriate ANTONYM of the given word.

Autonomy

- Ans
- 1. Temperance
  - 2. Partiality
  - 3. Dependency
  - 4. Righteousness

Question ID : 26433086517  
Status : Answered  
Chosen Option : 1

**Q.8** Select the most appropriate option that can substitute the underlined segment in the given sentence.

Your health could suffer if you spend more time with the automobiles.

Ans  1. in front of electronic devices

2. in backlog of machines

3. besides the machines

4. after the digital devices

Question ID : 26433089800

Status : Answered

Chosen Option : 1

**Q.9** Select the most appropriate synonym of the given word.

**Compact**

Ans  1. Dense

2. Expand

3. Whole

4. Holistic

Question ID : 26433084890

Status : Answered

Chosen Option : 1

**Q.10** Select the most appropriate meaning of the given idiom.

**Go the extra mile**

Ans  1. Do much more than required

2. Spend more money than required

3. Walk more than required

4. Talk more than required

Question ID : 26433072676

Status : Answered

Chosen Option : 1

**Q.11** Select the most appropriate option that can substitute the underlined segment in the given sentence. If there is no need to substitute it, select 'No substitution'.  
Prince Charles became a youngest heir to the throne at the age of seven.

Ans  1. the youngest heir to an throne

2. No substitution

3. the youngest heir to the throne

4. a youngest heir to a throne

Question ID : 26433092939

Status : Answered

Chosen Option : 3

Q.12 Select the most appropriate ANTONYM of the given word.

Inspid

- Ans  1. Explicit  
 2. Opaque  
 3. Tasty  
 4. Immense

Question ID : 26433071978  
Status : Not Answered  
Chosen Option : --

Q.13 Select the INCORRECTLY spelt word.

- Ans  1. Slaughter  
 2. Dampness  
 3. Anthropology  
 4. Phinomenon

Question ID : 26433073514  
Status : Answered  
Chosen Option : 4

Q.14 Identify and correct the INCORRECTLY spelt word in the given sentence.

The flovvers in the garden seemed as if they refused to bloom for spraying pesticides on them.

- Ans  1. pestisides  
 2. blome  
 3. refuced  
 4. flowers

Question ID : 26433072762  
Status : Answered  
Chosen Option : 4

Q.15 Select the most appropriate synonym of the underlined word from the given options.

The benevolent lady donated her estate for the welfare of the city.

- Ans  1. Foolish  
 2. Gracious  
 3. Insane  
 4. Charming

Question ID : 26433086516  
Status : Answered  
Chosen Option : 4

**Comprehension:**

In the following passage, some words have been deleted. Read the passage carefully and select the most appropriate option to fill in each blank.

The most common health conditions (1)\_\_\_\_\_ people today include heart disease, stroke, diabetes, and cancer. When people are experiencing these conditions, they (2)\_\_\_\_\_ the illness side of the spectrum. Lifestyle factors that put you at risk for developing these conditions include smoking, alcohol substance use disorder, lack of exercise, sleep (3)\_\_\_\_\_, and a diet rich in processed foods, sugar, saturated fat, and artificial flavours. An (4)\_\_\_\_\_ weight is another factor that can put one at risk for these conditions, especially carrying extra weight (5)\_\_\_\_\_ your midsection.

**SubQuestion No : 16**

**Q.16 Select the most appropriate option to fill in blank 1.**

- Ans  1. looking  
 2. towards  
 3. facing  
 4. against

Question ID : 26433089843  
Status : Answered  
Chosen Option : 3

**Comprehension:**

In the following passage, some words have been deleted. Read the passage carefully and select the most appropriate option to fill in each blank.

The most common health conditions (1)\_\_\_\_\_ people today include heart disease, stroke, diabetes, and cancer. When people are experiencing these conditions, they (2)\_\_\_\_\_ the illness side of the spectrum. Lifestyle factors that put you at risk for developing these conditions include smoking, alcohol substance use disorder, lack of exercise, sleep (3)\_\_\_\_\_, and a diet rich in processed foods, sugar, saturated fat, and artificial flavours. An (4)\_\_\_\_\_ weight is another factor that can put one at risk for these conditions, especially carrying extra weight (5)\_\_\_\_\_ your midsection.

**SubQuestion No : 17**

**Q.17 Select the most appropriate option to fill in blank 2.**

- Ans  1. count to  
 2. dive in  
 3. pass off  
 4. fall into

Question ID : 26433089844  
Status : Answered  
Chosen Option : 4



**Comprehension:**

In the following passage, some words have been deleted. Read the passage carefully and select the most appropriate option to fill in each blank.

The most common health conditions (1)\_\_\_\_\_ people today include heart disease, stroke, diabetes, and cancer. When people are experiencing these conditions, they (2)\_\_\_\_\_ the illness side of the spectrum. Lifestyle factors that put you at risk for developing these conditions include smoking, alcohol substance use disorder, lack of exercise, sleep (3)\_\_\_\_\_, and a diet rich in processed foods, sugar, saturated fat, and artificial flavours. An (4)\_\_\_\_\_ weight is another factor that can put one at risk for these conditions, especially carrying extra weight (5)\_\_\_\_\_ your midsection.

**SubQuestion No : 18**

**Q.18 Select the most appropriate option to fill in blank 3.**

- Ans  1. desire  
 2. impoverishment  
 3. deprivation  
 4. poverty

Question ID : 26433089845

Status : **Not Answered**

Chosen Option : --

**Comprehension:**

In the following passage, some words have been deleted. Read the passage carefully and select the most appropriate option to fill in each blank.

The most common health conditions (1)\_\_\_\_\_ people today include heart disease, stroke, diabetes, and cancer. When people are experiencing these conditions, they (2)\_\_\_\_\_ the illness side of the spectrum. Lifestyle factors that put you at risk for developing these conditions include smoking, alcohol substance use disorder, lack of exercise, sleep (3)\_\_\_\_\_, and a diet rich in processed foods, sugar, saturated fat, and artificial flavours. An (4)\_\_\_\_\_ weight is another factor that can put one at risk for these conditions, especially carrying extra weight (5)\_\_\_\_\_ your midsection.

**SubQuestion No : 19**

**Q.19 Select the most appropriate option to fill in blank 4.**

- Ans  1. empirical  
 2. unhygienic  
 3. contaminated  
 4. unhealthy

Question ID : 26433089846

Status : **Not Answered**

Chosen Option : --

**Comprehension:**

In the following passage, some words have been deleted. Read the passage carefully and select the most appropriate option to fill in each blank.

The most common health conditions (1)\_\_\_\_\_ people today include heart disease, stroke, diabetes, and cancer. When people are experiencing these conditions, they (2)\_\_\_\_\_ the illness side of the spectrum. Lifestyle factors that put you at risk for developing these conditions include smoking, alcohol substance use disorder, lack of exercise, sleep (3)\_\_\_\_\_, and a diet rich in processed foods, sugar, saturated fat, and artificial flavours. An (4)\_\_\_\_\_ weight is another factor that can put one at risk for these conditions, especially carrying extra weight (5)\_\_\_\_\_ your midsection.

**SubQuestion No : 20**

**Q.20** Select the most appropriate option to fill in blank 5.

- Ans  1. concerning  
 2. around  
 3. directing  
 4. against

Question ID : 26433089847  
Status : Not Answered  
Chosen Option : --

## Section : Part-D-Hindi

**Q.1** गीतों की लड़ियाँ  
उपरोक्त अशुद्ध वाक्य-खंड का शुद्ध रूप क्या होगा?

- Ans  1. गीतों की कड़ियाँ  
 2. गीतों की छड़ियाँ  
 3. गीतों की कमियाँ  
 4. गीतों की बेड़ियाँ

Question ID : 26433063061  
Status : Not Answered  
Chosen Option : --

**Q.2** निम्नलिखित विकल्पों में से किस एक वाक्य में 'असुर' शब्द के लिए उचित पर्यायवाची का प्रयोग हुआ है?

- Ans  1. रजनीचर का स्वभाव दुष्टतापूर्ण होता है।  
 2. वह दम्भ करता है।  
 3. दर्प अच्छा नहीं होता है।  
 4. श्याम घमण्डी है।

Question ID : 26433091188  
Status : Not Answered  
Chosen Option : --

Q.3 'जिसकी सीमा न हो' वाक्यांश के लिए उचित शब्द बताइए-

- Ans  1. परिसीमित  
 2. सीमांकित  
 3. असीम  
 4. ससीम

Question ID : 26433065909  
Status : Not Answered  
Chosen Option : --

Q.4 इनमें से कौन-सा शब्द 'अग्नि' का पर्यायवाची नहीं है?

- Ans  1. पावक  
 2. अभंग  
 3. अनल  
 4. हुताशन

Question ID : 26433066895  
Status : Not Answered  
Chosen Option : --

Q.5 निम्नलिखित वाक्य के किस शब्द में अशुद्धि है?  
देशों में यह बीमारि कोरोना के कारण फैली थी।

- Ans  1. कोरोना  
 2. बीमारि  
 3. फैली  
 4. कारण

Question ID : 26433066767  
Status : Not Answered  
Chosen Option : --

Q.6 उसके पक्ष में अनेक लोग हैं।  
रेखांकित शब्द के विलोम शब्द का चयन कीजिए।

- Ans  1. विपक्ष  
 2. कुपक्ष  
 3. निपक्ष  
 4. सपक्ष

Question ID : 26433079645  
Status : Not Answered  
Chosen Option : --

Q.7 निम्नलिखित मुहावरे का उचित अर्थ विकल्पों में से चुनिए।  
मुट्टी गरम करना

- Ans  1. धाक जमाना  
 2. घूस देना  
 3. शुभारंभ करना  
 4. कलंक लगाना

Question ID : 26433069999  
Status : Not Answered  
Chosen Option : --

Q.8 हमें किसी बूढ़े व्यक्ति के \_\_\_\_\_ का तिरस्कार नहीं करना चाहिए।  
उचित भाववाचक संज्ञा से वाक्य पूर्ण कीजिए।

- Ans  1. बुढ़ापे  
 2. मोटापे  
 3. बूढ़ा  
 4. चाल-चलन

Question ID : 26433062853  
Status : Not Answered  
Chosen Option : --

Q.9 दिए गये वाक्यांश के लिए सार्थक शब्द बताइए – 'दोपहर के बाद का समय'

- Ans  1. मध्याह्न  
 2. अपराह्न  
 3. पूर्वाह्न  
 4. पूर्वमध्याह्न

Question ID : 26433062586  
Status : Not Answered  
Chosen Option : --

Q.10 निम्नलिखित वाक्य के किस खंड में त्रुटि है?  
जहां तक हमारा विचार तो यही है।

- Ans  1. विचार  
 2. जहां तक  
 3. यही है।  
 4. हमारा

Question ID : 26433066757  
Status : Not Answered  
Chosen Option : --

Q.11 अगले माह वसंत ऋतु प्रारंभ होगी।

रेखांकित शब्द के विलोम शब्द का चयन कीजिए।

- Ans  1. गरम  
 2. ठंडी  
 3. पतझड़  
 4. ग्रीष्म

Question ID : 26433066910  
Status : Not Answered  
Chosen Option : --

Q.12 'टट्टी की ओट से शिकार खेलना' मुहावरे का अर्थ है-

- Ans  1. छल कपट से काम लेना  
 2. बलपूर्वक काम निकालना  
 3. छिप कर शिकार करना  
 4. तनिक भी प्रभावित न होना

Question ID : 26433069948  
Status : Not Answered  
Chosen Option : --

Q.13 निम्नलिखित वाक्य में रेखांकित खंड के स्थान पर प्रयुक्त होने वाले सबसे उपयुक्त विकल्प का चयन कीजिए-

टब पानी से तूसमटूस भरा है।

- Ans  1. चकाचक  
 2. लबालब  
 3. ठसाठस  
 4. फुलमफुल

Question ID : 26433079667  
Status : Not Answered  
Chosen Option : --

Q.14 निम्नलिखित में से विशेषण शब्द का उदाहरण है-

- Ans  1. भारत  
 2. धन  
 3. समाज  
 4. भारतीय

Question ID : 26433085051  
Status : Not Answered  
Chosen Option : --

Q.15 निम्नलिखित वाक्यांश के लिय उपयुक्त सार्थक शब्द है:  
जो समान न हो

- Ans  1. एक समान  
 2. विषम  
 3. खुराक  
 4. बराबर

Question ID : 26433065757

Status : Not Answered

Chosen Option : --

**Comprehension:**

निम्नलिखित गद्यांश में से कुछ शब्दों को हटा दिया गया है। गद्यांश के आधार पर पूछे गए प्रश्नों में इसके रिक्त स्थान पर आने वाले उपयुक्त शब्दों का चयन कीजिए।

क्या आपने कभी इस बात पर गम्भीरतापूर्वक 1 \_\_\_\_\_ किया है कि आज हम जो कुछ भी हैं उसमें किस-किस का योगदान है? माता का, मातृभूमि का, मातृभाषा का, या फिर इन सब का? एक 2 \_\_\_\_\_ हमें जन्म देती है, एक के आंगन में खेल-कूद कर तथा खा-पी कर हम पुष्ट होते हैं और एक हमें अपने विचारों, भावों इत्यादि को प्रकट करने की शक्ति देती है। इसी शक्ति के अभाव में हम गूंगे और बहरे बन कर रह जाते हैं। यह शक्ति हम पर पूर्ण रूप से मनुष्य बनाने का उपकार करती है। इस उपकार का 3 \_\_\_\_\_ हम पर सबसे अधिक है। इसी ऋण से मुक्त होने के लिए हमें सच्चे मन से उसकी सेवा करनी चाहिए। विदेशी भाषा के सम्मुख इसका तिरस्कार नहीं करना चाहिए तभी हम अपनी 4 \_\_\_\_\_ के सच्चे सपूत कहलाएँगे किन्तु यह काम इतना सरल नहीं है। यह काम तो तलवार की 5 \_\_\_\_\_ पर चलने का है।

**SubQuestion No : 16**

Q.16 रिक्त स्थान 1 पर आने वाला सर्वाधिक उपयुक्त शब्द इनमें से क्या होगा?

- Ans  1. सोच  
 2. समझ  
 3. इच्छा  
 4. विचार

Question ID : 26433072600

Status : Not Answered

Chosen Option : --

**Comprehension:**

निम्नलिखित गद्यांश में से कुछ शब्दों को हटा दिया गया है। गद्यांश के आधार पर पूछे गए प्रश्नों में इसके रिक्त स्थान पर आने वाले उपयुक्त शब्दों का चयन कीजिए।

क्या आपने कभी इस बात पर गम्भीरतापूर्वक 1 \_\_\_\_\_ किया है कि आज हम जो कुछ भी हैं उसमें किस-किस का योगदान है? माता का, मातृभूमि का, मातृभाषा का, या फिर इन सब का? एक 2 \_\_\_\_\_ हमें जन्म देती है, एक के आंगन में खेल-कूद कर तथा खा-पी कर हम पुष्ट होते हैं और एक हमें अपने विचारों, भावों इत्यादि को प्रकट करने की शक्ति देती है। इसी शक्ति के अभाव में हम गूंगे और बहरे बन कर रह जाते हैं। यह शक्ति हम पर पूर्ण रूप से मनुष्य बनाने का उपकार करती है। इस उपकार का 3 \_\_\_\_\_ हम पर सबसे अधिक है। इसी ऋण से मुक्त होने के लिए हमें सच्चे मन से उसकी सेवा करनी चाहिए। विदेशी भाषा के सम्मुख इसका तिरस्कार नहीं करना चाहिए तभी हम अपनी 4 \_\_\_\_\_ के सच्चे सपूत कहलाएँगे किन्तु यह काम इतना सरल नहीं है। यह काम तो तलवार की 5 \_\_\_\_\_ पर चलने का है।

**SubQuestion No : 17**

Q.17 रिक्त स्थान 2 पर आने वाला सर्वाधिक उपयुक्त शब्द इनमें से क्या होगा?

- Ans
- 1. बहन
  - 2. जननी
  - 3. पिता
  - 4. भाई

Question ID : 26433072601

Status : Not Answered

Chosen Option : --

**Comprehension:**

निम्नलिखित गद्यांश में से कुछ शब्दों को हटा दिया गया है। गद्यांश के आधार पर पूछे गए प्रश्नों में इसके रिक्त स्थान पर आने वाले उपयुक्त शब्दों का चयन कीजिए।

क्या आपने कभी इस बात पर गम्भीरतापूर्वक 1 \_\_\_\_\_ किया है कि आज हम जो कुछ भी हैं उसमें किस-किस का योगदान है? माता का, मातृभूमि का, मातृभाषा का, या फिर इन सब का? एक 2 \_\_\_\_\_ हमें जन्म देती है, एक के आंगन में खेल-कूद कर तथा खा-पी कर हम पुष्ट होते हैं और एक हमें अपने विचारों, भावों इत्यादि को प्रकट करने की शक्ति देती है। इसी शक्ति के अभाव में हम गूंगे और बहरे बन कर रह जाते हैं। यह शक्ति हम पर पूर्ण रूप से मनुष्य बनाने का उपकार करती है। इस उपकार का 3 \_\_\_\_\_ हम पर सबसे अधिक है। इसी ऋण से मुक्त होने के लिए हमें सच्चे मन से उसकी सेवा करनी चाहिए। विदेशी भाषा के सम्मुख इसका तिरस्कार नहीं करना चाहिए तभी हम अपनी 4 \_\_\_\_\_ के सच्चे सपूत कहलाएँगे किन्तु यह काम इतना सरल नहीं है। यह काम तो तलवार की 5 \_\_\_\_\_ पर चलने का है।

**SubQuestion No : 18**

Q.18 रिक्त स्थान 3 पर आने वाला सर्वाधिक उपयुक्त शब्द इनमें से क्या होगा?

- Ans
- 1. नगद
  - 2. मुद्रा
  - 3. ऋण
  - 4. पैसा

Question ID : 26433072602

Status : Not Answered

Chosen Option : --

**Comprehension:**

निम्नलिखित गद्यांश में से कुछ शब्दों को हटा दिया गया है। गद्यांश के आधार पर पूछे गए प्रश्नों में इसके रिक्त स्थान पर आने वाले उपयुक्त शब्दों का चयन कीजिए।

क्या आपने कभी इस बात पर गम्भीरतापूर्वक 1 \_\_\_\_\_ किया है कि आज हम जो कुछ भी हैं उसमें किस-किस का योगदान है? माता का, मातृभूमि का, मातृभाषा का, या फिर इन सब का? एक 2 \_\_\_\_\_ हमें जन्म देती है, एक के आंगन में खेल-कूद कर तथा खा-पी कर हम पुष्ट होते हैं और एक हमें अपने विचारों, भावों इत्यादि को प्रकट करने की शक्ति देती है। इसी शक्ति के अभाव में हम गूंगे और बहरे बन कर रह जाते हैं। यह शक्ति हम पर पूर्ण रूप से मनुष्य बनाने का उपकार करती है। इस उपकार का 3 \_\_\_\_\_ हम पर सबसे अधिक है। इसी ऋण से मुक्त होने के लिए हमें सच्चे मन से उसकी सेवा करनी चाहिए। विदेशी भाषा के सम्मुख इसका तिरस्कार नहीं करना चाहिए तभी हम अपनी 4 \_\_\_\_\_ के सच्चे सपूत कहलाएँगे किन्तु यह काम इतना सरल नहीं है। यह काम तो तलवार की 5 \_\_\_\_\_ पर चलने का है।

**SubQuestion No : 19**

Q.19 रिक्त स्थान 4 पर आने वाला सर्वाधिक उपयुक्त शब्द इनमें से क्या होगा?

Ans  1. मातृभूमि

2. देश

3. शहर

4. गाँव

Question ID : 26433072603

Status : Not Answered

Chosen Option : --

**Comprehension:**

निम्नलिखित गद्यांश में से कुछ शब्दों को हटा दिया गया है। गद्यांश के आधार पर पूछे गए प्रश्नों में इसके रिक्त स्थान पर आने वाले उपयुक्त शब्दों का चयन कीजिए।

क्या आपने कभी इस बात पर गम्भीरतापूर्वक 1 \_\_\_\_\_ किया है कि आज हम जो कुछ भी हैं उसमें किस-किस का योगदान है? माता का, मातृभूमि का, मातृभाषा का, या फिर इन सब का? एक 2 \_\_\_\_\_ हमें जन्म देती है, एक के आंगन में खेल-कूद कर तथा खा-पी कर हम पुष्ट होते हैं और एक हमें अपने विचारों, भावों इत्यादि को प्रकट करने की शक्ति देती है। इसी शक्ति के अभाव में हम गूंगे और बहरे बन कर रह जाते हैं। यह शक्ति हम पर पूर्ण रूप से मनुष्य बनाने का उपकार करती है। इस उपकार का 3 \_\_\_\_\_ हम पर सबसे अधिक है। इसी ऋण से मुक्त होने के लिए हमें सच्चे मन से उसकी सेवा करनी चाहिए। विदेशी भाषा के सम्मुख इसका तिरस्कार नहीं करना चाहिए तभी हम अपनी 4 \_\_\_\_\_ के सच्चे सपूत कहलाएँगे किन्तु यह काम इतना सरल नहीं है। यह काम तो तलवार की 5 \_\_\_\_\_ पर चलने का है।

**SubQuestion No : 20**

Q.20 रिक्त स्थान 5 पर आने वाला सर्वाधिक उपयुक्त शब्द इनमें से क्या होगा?

Ans  1. किनारा

2. धार

3. नोक

4. रास्ता

Question ID : 26433072604

Status : Not Answered

Chosen Option : --