

Constable GD in CAPFs SSF Rifleman GD in Assam Rifles and Sepoy in NCB Examination 2022

Roll Number	
Candidate Name	
Venue Name	
Exam Date	10/01/2023
Exam Time	9:00 AM - 10:00 AM
Subject	Constable GD Examination 2022

Section : Part-A-General Intelligence and Reasoning

Q.1 Select the correct mirror image of the given figure when the mirror is placed at MN as shown below.

CLkv38z
M ————— N

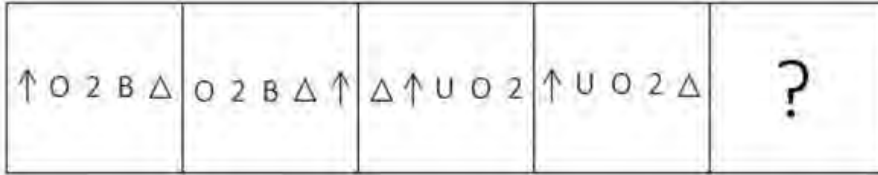
- Ans
- ✗ 1. CTKΛε8Σ
 - ✗ 2. CΓKΛ38Σ
 - ✓ 3. CΓKΛ38Σ
 - ✗ 4. Σ8εvκJC

Question ID : 26433080804

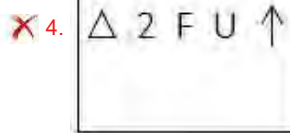
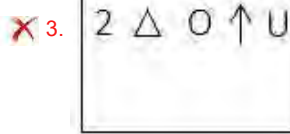
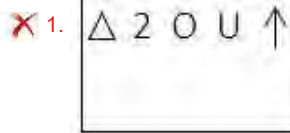
Status : Answered

Chosen Option : 3

Q.2 Which figure should replace the question mark (?) if the series were to be continued?



Ans



Question ID : 26433076637
 Status : Answered
 Chosen Option : 2

Q.3 Select the option that is related to the fifth letter-cluster in the same way as the second letter-cluster is related to the first letter-cluster and the fourth letter-cluster is related to the third letter-cluster.
 YOUR: XPEJ :: TONE: SPLW :: BANK: ?

- Ans
- ✗ 1. XYOP
 - ✗ 2. CBOL
 - ✓ 3. ABLQ
 - ✗ 4. YZMP

Question ID : 26433057494
 Status : Answered
 Chosen Option : 3

Q.4 Select the option that is related to the fifth letter-cluster in the same way as the second letter-cluster is related to the first letter-cluster and the fourth letter-cluster is related to the third letter-cluster.

COMFORT : OCFMTRO :: CONTROL : OCTNLOR :: DIGITAL : ?

Ans 1. IDIGLAT

2. GITALDI

3. GIDLATI

4. LATIGID

Question ID : 26433069633

Status : Answered

Chosen Option : 1

Q.5 In a certain code language, 'cart light' is coded as 'straw handle', 'plug light' is coded as 'toes handle', and 'cart plug' is coded as 'toes straw'. What is the code word for 'cart'?

Ans 1. plug

2. straw

3. handle

4. toes

Question ID : 26433079367

Status : Answered

Chosen Option : 2

Q.6 Which of the following numbers will replace the question mark (?) in the given series?

1, 6, 31, 156, ?, 3906

Ans 1. 781

2. 2125

3. 985

4. 1225

Question ID : 26433070219

Status : Answered

Chosen Option : 1

Q.7 Which two signs should be interchanged to make the below equation mathematically correct?

$72 \times 6 + 18 \div 5 - 9 = 93$

Ans 1. \times and $+$

2. $+$ and $-$

3. \div and $-$

4. \times and \div

Question ID : 264330117495

Status : Answered

Chosen Option : 4

Q.8 Which of the following numbers will replace the question mark (?) in the given series?
33, 47, 44, 58, 56, 70, 69, ?

- Ans
- 1. 80
 - 2. 82
 - 3. 84
 - 4. 83

Question ID : 26433067879
Status : Answered
Chosen Option : 4

Q.9 Select the set in which the numbers are related in the same way as are the numbers of the following set.

(NOTE : Operations should be performed on the whole numbers, without breaking down the numbers into its constituent digits. E.g. 13 – Operations on 13 such as adding /subtracting/multiplying etc. to 13 can be performed. Breaking down 13 into 1 and 3 and then performing mathematical operations on 1 and 3 is NOT allowed)
(20, 30, 450)
(35, 25, 540)

- Ans
- 1. (9, 17, 264)
 - 2. (20, 9, 297)
 - 3. (7, 18, 225)
 - 4. (8, 15, 227)

Question ID : 26433076487
Status : Answered
Chosen Option : 3

Q.10 In a certain code language, FORCE is coded as 47, and GREEN is coded as 49. How will FLAVOUR be coded in that language?

- Ans
- 1. 98
 - 2. 92
 - 3. 95
 - 4. 100

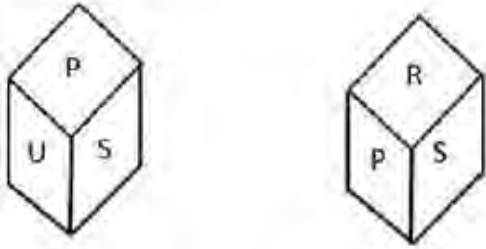
Question ID : 26433067995
Status : Answered
Chosen Option : 3

Q.11 Six people are sitting around a circular table facing the centre. Kaya is the immediate neighbour of Jaya and Tara. Sonal is the immediate neighbour of Priya and Swati. Sonal is sitting immediate right of Priya, Tara and Swati are not sitting immediately next to each other. Who is sitting to the immediate left of Priya?

- Ans
- 1. Tara
 - 2. Kaya
 - 3. Jaya
 - 4. Swati

Question ID : 26433069665
Status : Answered
Chosen Option : 1

Q.12 Two different positions of the same dice are shown having alphabets P to U. Find the alphabet on the face opposite the face showing 'U'.



- Ans 1. Q
 2. S
 3. T
 4. R

Question ID : 26433085526
Status : Answered
Chosen Option : 4

Q.13 Six colleagues A, B, C, D, E and F are having lunch together on a circular table at equal distance, facing the centre of the circle. D is the immediate neighbour of E and B while C is the immediate neighbour of A and F. If A is to the immediate left of E, then who is on the immediate left of C?

- Ans 1. D
 2. F
 3. B
 4. E

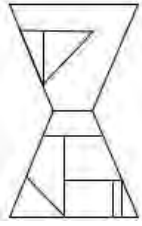
Question ID : 26433079052
Status : Answered
Chosen Option : 2

Q.14 Which of the following terms will replace the question mark (?) in the given series?
EZF, GXH, KTL, QNR, ?

- Ans 1. WEY
 2. YGY
 3. YFZ
 4. XFZ

Question ID : 26433068304
Status : Answered
Chosen Option : 2

Q.15 Select the option figure which is embedded in the given figure. (Rotation is NOT allowed)



Ans

- 1.
- 2.
- 3.
- 4.

Question ID : 26433069337
 Status : Answered
 Chosen Option : 4

Q.16 Which two signs should be interchanged to make the below equation mathematically correct?
 $42 + 16 \div 7 - 36 \times 16 = 76$

- Ans
- 1. + and -
 - 2. + and \times
 - 3. \times and +
 - 4. + and +

Question ID : 264330114197
 Status : Answered
 Chosen Option : 3

Q.17 Which letter-cluster will replace the question mark (?) to complete the given series?
 ZACF, WXZC, ?, QRTW, NOQT

- Ans
- 1. XUVZ
 - 2. XUYZ
 - 3. VWZC
 - 4. TUWZ

Question ID : 26433067712
 Status : Answered
 Chosen Option : 4

Q.18 In this question, three statements are given, followed by two conclusions numbered I and II. Assuming the statements to be true, even if they seem to be at variance with commonly known facts, decide which of the conclusions logically follows/follow from the statements.

Statements:

All bottles are bags.

Some bags are pencils.

Some pencils are sharpeners.

Conclusions:

I. Some sharpeners are bottles.

II. Some bottles are pencils.

- Ans**
- 1. Both conclusions I and II follow.
 - 2. Neither conclusion I nor II follows.
 - 3. Only conclusion II follows.
 - 4. Only conclusion I follows.

Question ID : 26433070393

Status : Answered

Chosen Option : 2

Q.19 Which option represents the correct order of the given words as they would appear in the English dictionary?

1 manner

2 manage

3 masculine

4 magic

5 matter

- Ans**
- 1. 1,2,4,3,5
 - 2. 1,4,3,2,5
 - 3. 4,2,1,3,5
 - 4. 4,1,2,5,3

Question ID : 26433069285

Status : Answered

Chosen Option : 3

Q.20 'A + B' means 'B is the father of A'
'A # B' means 'B is the sister of A'
'A @ B' means 'B is the brother of A'
If A @ B # C + D + E, then how is E related to A?

- Ans**
- 1. Son
 - 2. Father
 - 3. Father's father
 - 4. Father's brother

Question ID : 26433068535

Status : Answered

Chosen Option : 3

Q.1 Jagoi is a major style of which of the following forms of Indian classical dance?

- Ans 1. Sattriya
 2. Kathak
 3. Manipuri
 4. Odissi

Question ID : 26433070839
Status : Answered
Chosen Option : 1

Q.2 Identify a way to reduce the pollution caused due to burning of fossil fuels

- Ans 1. By lowering the temperature of burning
 2. By increasing the efficiency of the combustion process
 3. By increasing the number of carbon molecules
 4. By decreasing the latent heat

Question ID : 26433096234
Status : Answered
Chosen Option : 4

Q.3 Tapan Kumar Pattanayak won the Sangeet natak Akademi Award in which dance form?

- Ans 1. Kuchipudi
 2. Chhau
 3. Sattriya
 4. Odissi

Question ID : 264330115827
Status : Not Answered
Chosen Option : --

Q.4 Who was the first Indian to conquer the English Channel from Dover to Calais in 1958, and also the only man to swim the oceans of the five continents in one calendar year in 1966?

- Ans 1. Mihir Sen
 2. Ramanathan Krishnan
 3. Ajit Patel
 4. Khashaba Jadhav

Question ID : 26433089924
Status : Answered
Chosen Option : 2

Q.5 Rs. 2000 banknote of Mahatma Gandhi (New) Series has _____ motif on its back.

- Ans 1. Rani Ki Vav
 2. Mangalyaan
 3. Sun Temple, Konark
 4. Red Fort

Question ID : 264330115382
Status : Answered
Chosen Option : 2

Q.6 Who commissioned India's first indigenous aircraft carrier INS Vikrant in Kochi in September 2022?

- Ans 1. Rajnath Singh
 2. Amit Shah
 3. Jyotiraditya Scindia
 4. Narendra Modi

Question ID : 264330114916
Status : Answered
Chosen Option : 1

Q.7 Which latitude line passes through the middle of India influencing the climate of the country?

- Ans 1. Equator
 2. Tropic of Capricorn
 3. Tropic of Cancer
 4. Antarctic Circle

Question ID : 264330115984
Status : Answered
Chosen Option : 2

Q.8 During the reign of which of the following Mauryan kings, the Kalinga War was fought?

- Ans 1. Bindusara
 2. Ashoka
 3. Chandragupta
 4. Dasaratha

Question ID : 264330115454
Status : Answered
Chosen Option : 2

Q.9 When was the first complete Census conducted in India?

- Ans 1. 1882
 2. 1880
 3. 1887
 4. 1881

Question ID : 264330116036
Status : Answered
Chosen Option : 1

Q.10 Who has been appointed as the "State Brand Ambassador" of Uttarakhand government in August 2022?

- Ans 1. Dinesh Karthik
 2. Rishabh Pant
 3. Akshay Kumar
 4. Rohit Shetty

Question ID : 264330114985
Status : Answered
Chosen Option : 2

Q.11 The President of India is elected by _____.

- Ans 1. Only the Members of State Legislative Assemblies
 2. Only the elected members of both Houses of Parliament
 3. Only the members' of Council of States
 4. the Elected Members of both Houses of Parliament and State Legislative Assemblies.

Question ID : 264330115663
Status : Answered
Chosen Option : 4

Q.12 Which of the following is the thanksgiving festival of Maharashtra, where bulls are honoured as they are considered indispensable to farming?

- Ans 1. Makar Sankranti
 2. Pola Festival
 3. Gudi Padwa
 4. Kala Ghoda Arts Festival

Question ID : 264330106205
Status : Answered
Chosen Option : 3

Q.13 Original text of the Indian Constitution contained _____ articles.

- Ans 1. 376
 2. 395
 3. 386
 4. 440

Question ID : 264330115691
Status : Answered
Chosen Option : 3

Q.14 Which of the following was one of the main objectives of the Seventh Five-Year Plan?

- Ans 1. Increase in Infrastructure
 2. Increase in production of Food Grains
 3. Elimination of poverty
 4. Improve the standard of living

Question ID : 264330116126
Status : Answered
Chosen Option : 1

Q.15 Moss and Marchantia comes under which of the following?

- Ans 1. Algae
 2. Gymnosperms
 3. Pteridophytes
 4. Bryophytes

Question ID : 264330115210
Status : Not Answered
Chosen Option : --

Q.16 Revenue receipts are _____ as they do not lead to a claim on the government.

- Ans 1. capital receipts
 2. reinforceable
 3. redeemable
 4. non-redeemable

Question ID : 264330115282
Status : Answered
Chosen Option : 4

Q.17 During emergency which fundamental rights cannot be suspended?

- Ans 1. Article 14-15
 2. Article 20-21
 3. Article 18-19
 4. Article 16-17

Question ID : 264330115617
Status : Answered
Chosen Option : 1

Q.18 In which among the following states, Arabica coffee grown in India?

- Ans 1. Assam
 2. Uttarakhand
 3. West Bengal
 4. Karnataka

Question ID : 264330115529
Status : Answered
Chosen Option : 3

Q.19 _____ falls under the Ministry of textiles.

- Ans 1. Samarth Scheme
 2. Ambekar Social Innovation & Incubation Mission
 3. MPLADS (Members of Parliament Local Area Development Scheme)
 4. Merchandise Export From India Scheme

Question ID : 264330116173
Status : Answered
Chosen Option : 1

Q.20 Which State won the Vijay Hazare Trophy in 2017-18?

- Ans 1. Uttar Pradesh
 2. Kerala
 3. Maharashtra
 4. Karnataka

Question ID : 264330116255
Status : Not Answered
Chosen Option : --

Section : Part-C-Elementary Mathematics

Q.1 A shopkeeper allows a discount of 40% on his articles and still makes a profit of 20%.
How much cost price does shopkeeper pay for an article whose marked price is ₹ 2,400?

- Ans 1. ₹1,728
 2. ₹1,200
 3. ₹1,440
 4. ₹1,132

Question ID : 26433062686
Status : Answered
Chosen Option : 2

Q.2 A man covers a certain distance by scooter at 64 km/h and he returns to the starting place riding a bicycle at 16 km/h. Find the average speed for the whole journey.

- Ans 1. 25.6 km/h
 2. 26.5 km/h
 3. 40 km/h
 4. 51.2 km/h

Question ID : 26433076200
Status : Answered
Chosen Option : 1

Q.3 5 women can complete a work in 8 days, while 8 children take 10 days to complete the same work. How many days will 2 women and 4 children take to complete the work?

- Ans 1. 10
 2. 12
 3. 40
 4. 8

Question ID : 26433076384
Status : Answered
Chosen Option : 1

Q.4 The diameter of a right circular cylinder is 14 cm and height is 2 cm. The sum of its curved surface area and the total surface area is: (use $\pi = \frac{22}{7}$)

- Ans 1. 484 cm²
 2. 308 cm²
 3. 176 cm²
 4. 968 cm

Question ID : 26433087416
Status : Answered
Chosen Option : 1

Q.5 What is the fourth proportional to $\sqrt{6}$, $\sqrt{8}$ and $\sqrt{21}$?

- Ans 1. $3\sqrt{7}$
 2. $2\sqrt{7}$
 3. $8\sqrt{7}$
 4. $5\sqrt{7}$

Question ID : 26433079869
Status : Answered
Chosen Option : 2

Q.6 A can paint a painting in 12 days. B can paint the same in 8 days. C can paint the same in 10 days. Find the (approximate) number of days in which the painting can be painted by A if he is accompanied by both B and C together on alternate days and A starts painting on the first day alone.

- Ans
- 1. 4.4 days
 - 2. 5.4 days
 - 3. 7.2 days
 - 4. 8.5 days

Question ID : 264330116857
Status : Answered
Chosen Option : 2

Q.7 The population of bears in a city has been growing at 3% every year. If the present population of bears in the city is 21,218, what was the population of bears two years ago?

- Ans
- 1. 18000
 - 2. 19000
 - 3. 18500
 - 4. 20000

Question ID : 26433075412
Status : Answered
Chosen Option : 4

Q.8 The income of a person is ₹95,000 and his expenditure is ₹75,000. If his income is increased by 18% and the expenditure by 12%, then what will be the percentage increase in his saving?

- Ans
- 1. 40.6%
 - 2. 40.8%
 - 3. 40.4%
 - 4. 40.5%

Question ID : 26433080161
Status : Answered
Chosen Option : 4

Q.9 Mohan is selling a table at Rs.2,832. If his profit is 18%, then what is the cost price of the table?

- Ans
- 1. Rs.2,480
 - 2. Rs.2,500
 - 3. Rs.2,440
 - 4. Rs.2,400

Question ID : 26433075652
Status : Answered
Chosen Option : 4

Q.10 In how much time (in years) would ₹80,000 amount to ₹1,17,128 at 10% per annum rate of interest, compounded yearly?

- Ans 1. 4 years
 2. 2 years
 3. 2.5 years
 4. 3.5 years

Question ID : 26433076229
Status : Answered
Chosen Option : 1

Q.11 5 bells start commencing together at 9 AM. They ring at the intervals of 12 seconds, 18 seconds, 24 seconds, 36 seconds and 45 seconds. At what time do the bells ring together again?

- Ans 1. 9:10 AM
 2. 9:06 AM
 3. 9:08 AM
 4. 9:05 AM

Question ID : 264330116633
Status : Answered
Chosen Option : 2

Q.12 A spends 45% of his salary on food and donates 5 % of his salary on old age homes. If he spends Rs.28,500 on food and old age homes, then what will be the salary of A?

- Ans 1. Rs. 52,000
 2. Rs. 57,000
 3. Rs. 50,000
 4. Rs. 55,000

Question ID : 26433081016
Status : Answered
Chosen Option : 2

Q.13 A cone of radius 9 cm and height 15 cm is melted and made into a cylinder of height 45 cm. The diameter of the cylinder is:

- Ans 1. 3 cm
 2. 5 cm
 3. 10 cm
 4. 6 cm

Question ID : 26433075332
Status : Answered
Chosen Option : 4

Q.14 A person rides bicycle on four different ways to reach the destination. Determine the average speed during this whole journey.

Way	Speed (km/h)	Distance (km)
A	5	20
B	3	15
C	2	10
D	4	24

Ans

1. $4.5 \frac{\text{km}}{\text{hr}}$

2. $3.45 \frac{\text{km}}{\text{hr}}$

3. $5.5 \frac{\text{km}}{\text{hr}}$

4. $2.45 \frac{\text{km}}{\text{hr}}$

Question ID : 26433076001

Status : Answered

Chosen Option : 2

Q.15 Divya bought a car for ₹ 3,50,000 and sold it for ₹ 4,35,000. What is her percentage profit (correct up to one decimal place)?

Ans 1. 23.3%

2. 24.3%

3. 21.5%

4. 20.7%

Question ID : 26433075543

Status : Answered

Chosen Option : 2

Q.16 If $(5x - 2y) : (x - 2y) = 9 : 17$, then find the value of $\frac{9x}{13y}$.

- Ans
- 1. $\frac{72}{421}$
 - 2. $\frac{151}{1731}$
 - 3. $\frac{36}{247}$
 - 4. $\frac{144}{1001}$

Question ID : 26433080030
Status : Answered
Chosen Option : 3

Q.17 A car covered 240 km in 5 h. If it travels with half of its usual speed, then how much more time will be taken to cover the same distance?

- Ans
- 1. 3 h
 - 2. 5 h
 - 3. 10 h
 - 4. 4 h

Question ID : 26433076306
Status : Answered
Chosen Option : 2

Q.18 X bought 40 pencils for a total of Rs 180 and bought 2 dozens of pens for Rs 180. Find the difference between the price of one pen and one pencil.

- Ans
- 1. Rs 3.5
 - 2. Rs 3
 - 3. Rs 2
 - 4. Rs 2.5

Question ID : 264330116689
Status : Answered
Chosen Option : 2

Q.19 How many prime numbers are there between 40 and 50?

- Ans
- 1. 4
 - 2. 5
 - 3. 3
 - 4. 2

Question ID : 26433080282
Status : Answered
Chosen Option : 3

Q.20 A dealer allowed a discount of 20 percent on marked price of Rs. 72000 on an article and incurred a loss of 10 percent. What discount should he allow on the marked price, so that he gains Rs. 440 on the article?

- Ans** 1. 10.5 percent
 2. 8.5 percent
 3. 9.5 percent
 4. 11.5 percent

Question ID : 264330116742
Status : Answered
Chosen Option : 1

Section : Part-D-English

Q.1 Identify the correctly spelt sentence.

- Ans** 1. The events arranged or organised in order of time are known as chronoligal order.
 2. The events arranged or organised in order of time are known as chronological order.
 3. The events arranged or organised in order of time are known as chronologikal order.
 4. The events arranged or organised in order of time are known as chronoloigal order.

Question ID : 26433072826
Status : Answered
Chosen Option : 2

Q.2 Select the most appropriate ANTONYM of the given word.

Timid

- Ans** 1. Diffident
 2. Shy
 3. Bold
 4. Fearful

Question ID : 26433073571
Status : Answered
Chosen Option : 3

Q.3 Select the most appropriate synonym of the given word.

Blast

- Ans** 1. Blow up
 2. Recall
 3. Plead
 4. Share

Question ID : 26433089107
Status : Answered
Chosen Option : 1

Q.4 Select the most appropriate option that can substitute the underlined segment in the given sentence.

I regarded my brother on passing his graduation examination.

Ans 1. congratulated

2. disparaged

3. flattered

4. kowtowed

Question ID : 26433088163
Status : Answered
Chosen Option : 1

Q.5 Select the most appropriate ANTONYM of the given word.

Liability

Ans 1. Resource

2. Responsibility

3. Asset

4. Strike

Question ID : 26433072269
Status : Answered
Chosen Option : 4

Q.6 Select the most appropriate homophone to fill in the blank.

In many road accidents people break their bones mainly because their vehicle _____ fails.

Ans 1. brake

2. broke

3. brow

4. bleak

Question ID : 26433088794
Status : Answered
Chosen Option : 1

Q.7 Select the correct word for the blanks in the given sentence.

Sivakashi is famous for its _____ box industry, and I am unable to find a _____ for my purple dress.

Ans 1. sweat

2. match

3. chatter

4. bread

Question ID : 26433060538
Status : Answered
Chosen Option : 2

Q.8 Select the most appropriate option to fill in the blank.

Truthfully speaking, the victories of peace and harmony have a more _____ impact on human civilisation than the so-called victories of war.

- Ans 1. Superior
 2. Transient
 3. Lasting
 4. Greater

Question ID : 26433074420
Status : Answered
Chosen Option : 4

Q.9 Select the most appropriate option to substitute the underlined segment in the given sentence.

Purchasing furniture at a low cost could not involve abandoning design or quality.

- Ans 1. should not entail sacrificing
 2. did not provoke compromising
 3. have not done regretting
 4. cannot force forgetting

Question ID : 26433092914
Status : Answered
Chosen Option : 1

Q.10 Select the most appropriate synonym of the given word.

Colloquial

- Ans 1. Lexical
 2. Conversational
 3. Prosodic
 4. Linguistic

Question ID : 26433073635
Status : Answered
Chosen Option : 1

Q.11 Select the option that expresses the given sentence in future tense form.

There are multiple facilities available for reaching the island.

- Ans 1. There will be multiple facilities available for reaching the island.
 2. There have been multiple facilities available for reaching the island.
 3. There had been multiple facilities available for reaching the island.
 4. There were multiple facilities available for reaching the island.

Question ID : 26433089292
Status : Answered
Chosen Option : 1

Q.12 Select the INCORRECTLY spelt word.

- Ans 1. Maladjusted
 2. Stakeholder
 3. Permenent
 4. Longitude

Question ID : 26433073513
Status : Answered
Chosen Option : 3

Q.13 Select the most appropriate ANTONYM of the given word.

Rancid

- Ans 1. Rotten
 2. Urgent
 3. Fresh
 4. Rough

Question ID : 26433071977
Status : Answered
Chosen Option : 3

Q.14 Select the most appropriate meaning of the given idiom.

At your beck and call

- Ans 1. To have absolute control over someone
 2. To call someone respectfully
 3. To have no control over someone
 4. To call someone and then deny

Question ID : 26433072224
Status : Answered
Chosen Option : 1

Q.15 Select the most appropriate meaning of the given idiom.

A night owl

- Ans 1. Someone who has good eyesight
 2. Someone who works very hard
 3. Someone who never works
 4. A person who prefers to be awake late at night

Question ID : 26433072675
Status : Answered
Chosen Option : 4

Comprehension:

In the following passage, some words have been deleted. Read the passage carefully and select the most appropriate option to fill in each blank.

The companies in the present era (1) _____ priority, during recruitment, to the candidates who have Emotional Intelligence. EI is the ability to understand, analyse and control emotions. Possessing very high EI creates a (2) _____ impact on a person's life. People who have EI always maintain emotional stability even in difficult situations. They can be nice even in socially awkward situations. As they are very good at controlling emotions, they make others feel (3) _____. It is proven that it will make leaders more effective as they understand the feelings of teammates. It allows one (4) _____ impactfully with others. Stress and conflict can be handled so easily. As it allows great empathy towards others, they can be very good at interpersonal relationship. These people strengthen the relationship (5) _____ the people with their interaction and coordination both in personal and professional life. Companies are well aware of the benefits with the employees who have EI.

SubQuestion No : 16

Q.16 Select the most appropriate option to fill in blank number 1.

- Ans 1. has been giving
 2. have been given
 3. are giving
 4. is giving

Question ID : 26433072166

Status : Answered

Chosen Option : 3

Comprehension:

In the following passage, some words have been deleted. Read the passage carefully and select the most appropriate option to fill in each blank.

The companies in the present era (1) _____ priority, during recruitment, to the candidates who have Emotional Intelligence. EI is the ability to understand, analyse and control emotions. Possessing very high EI creates a (2) _____ impact on a person's life. People who have EI always maintain emotional stability even in difficult situations. They can be nice even in socially awkward situations. As they are very good at controlling emotions, they make others feel (3) _____. It is proven that it will make leaders more effective as they understand the feelings of teammates. It allows one (4) _____ impactfully with others. Stress and conflict can be handled so easily. As it allows great empathy towards others, they can be very good at interpersonal relationship. These people strengthen the relationship (5) _____ the people with their interaction and coordination both in personal and professional life. Companies are well aware of the benefits with the employees who have EI.

SubQuestion No : 17

Q.17 Select the most appropriate option to fill in blank number 2.

- Ans 1. creative
 2. positive
 3. colonial
 4. memorable

Question ID : 26433072167

Status : Answered

Chosen Option : 2

Comprehension:

In the following passage, some words have been deleted. Read the passage carefully and select the most appropriate option to fill in each blank.

The companies in the present era (1) _____ priority, during recruitment, to the candidates who have Emotional Intelligence. EI is the ability to understand, analyse and control emotions. Possessing very high EI creates a (2) _____ impact on a person's life. People who have EI always maintain emotional stability even in difficult situations. They can be nice even in socially awkward situations. As they are very good at controlling emotions, they make others feel (3) _____. It is proven that it will make leaders more effective as they understand the feelings of teammates. It allows one (4) _____ impactfully with others. Stress and conflict can be handled so easily. As it allows great empathy towards others, they can be very good at interpersonal relationship. These people strengthen the relationship (5) _____ the people with their interaction and coordination both in personal and professional life. Companies are well aware of the benefits with the employees who have EI.

SubQuestion No : 18

Q.18 Select the most appropriate option to fill in blank number 3.

- Ans 1. comfortable
 2. tolerable
 3. favourable
 4. manageable

Question ID : 26433072168
Status : Answered
Chosen Option : 1

Comprehension:

In the following passage, some words have been deleted. Read the passage carefully and select the most appropriate option to fill in each blank.

The companies in the present era (1) _____ priority, during recruitment, to the candidates who have Emotional Intelligence. EI is the ability to understand, analyse and control emotions. Possessing very high EI creates a (2) _____ impact on a person's life. People who have EI always maintain emotional stability even in difficult situations. They can be nice even in socially awkward situations. As they are very good at controlling emotions, they make others feel (3) _____. It is proven that it will make leaders more effective as they understand the feelings of teammates. It allows one (4) _____ impactfully with others. Stress and conflict can be handled so easily. As it allows great empathy towards others, they can be very good at interpersonal relationship. These people strengthen the relationship (5) _____ the people with their interaction and coordination both in personal and professional life. Companies are well aware of the benefits with the employees who have EI.

SubQuestion No : 19

Q.19 Select the most appropriate option to fill in blank number 4.

- Ans 1. communicate
 2. to communicating
 3. to be communicated
 4. to communicate

Question ID : 26433072169
Status : Answered
Chosen Option : 4

Comprehension:

In the following passage, some words have been deleted. Read the passage carefully and select the most appropriate option to fill in each blank.

The companies in the present era (1) _____ priority, during recruitment, to the candidates who have Emotional Intelligence. EI is the ability to understand, analyse and control emotions. Possessing very high EI creates a (2) _____ impact on a person's life. People who have EI always maintain emotional stability even in difficult situations. They can be nice even in socially awkward situations. As they are very good at controlling emotions, they make others feel (3) _____. It is proven that it will make leaders more effective as they understand the feelings of teammates. It allows one (4) _____ impactfully with others. Stress and conflict can be handled so easily. As it allows great empathy towards others, they can be very good at interpersonal relationship. These people strengthen the relationship (5) _____ the people with their interaction and coordination both in personal and professional life. Companies are well aware of the benefits with the employees who have EI.

SubQuestion No : 20

Q.20 Select the most appropriate option to fill in blank number 5.

- Ans 1. in reference with
 2. between
 3. along with
 4. among

Question ID : 26433072170
Status : Answered
Chosen Option : 4

Section : Part-D-Hindi

Q.1 इस वाक्य के रिक्त स्थान पर रेखांकित शब्द का उपयुक्त विलोम शब्द कौन-सा होगा?

भारत में कहीं अतिवृष्टि से बाढ़ आती है तो कहीं _____ से सूखा पड़ता है।

- Ans 1. लघुवृष्टि
 2. अनावृष्टि
 3. वृष्टि
 4. सुवरिष्टि

Question ID : 26433066909
Status : Not Answered
Chosen Option : --

Q.2 'करण खाने बीच मिठाई लाया'

उपरोक्त वाक्य में कारक सम्बन्धी त्रुटि पहचानकर निम्नलिखित में से शुद्ध वाक्य चुनिए।

- Ans 1. करण खाने बाद मिठाई लाया।
 2. करण खाने की मिठाई लाया।
 3. करण खाने के लिए मिठाई लाया।
 4. करण खाने साथ मिठाई लाया।

Question ID : 26433066967
Status : Not Answered
Chosen Option : --

Q.3 'सुनैना खाना खा रही है'
उपरोक्त वाक्य का भाववाच्य में रूपांतरण होगा-

- Ans 1. सुनैना खाना खा रही थी।
 2. सुनैना से खाना नहीं खाया जाता।
 3. सुनैना खाना खा रही होगी।
 4. सुनैना खाना नहीं खा रही है।

Question ID : 26433066980
Status : Not Answered
Chosen Option : --

Q.4 दिए गए शब्दों में से उचित शब्द से वाक्य पूर्ण करें --
वैद्य जी _____ देखकर इलाज करते हैं।

- Ans 1. नारी
 2. नीड़
 3. नीर
 4. नाड़ी

Question ID : 26433062909
Status : Not Answered
Chosen Option : --

Q.5 'टिप्पस भिड़ाना' मुहावरे का अर्थ होगा-

- Ans 1. सिफारिश करवाना
 2. अक्ल लगाना
 3. लोगों को आपस में लड़वाना
 4. नयी योजना बनाना

Question ID : 26433069947
Status : Not Answered
Chosen Option : --

Q.6 निम्नलिखित वाक्य के किस खंड में अशुद्धि है?
गौतम बुद्ध ने पाली भाषा में उपदेश दिया

- Ans 1. भाषा
 2. उपदेश
 3. दिया
 4. पाली

Question ID : 26433066753
Status : Not Answered
Chosen Option : --

Q.7 वाक्य में रेखांकित अंश के लिए उचित मुहावरा दिए गए विकल्पों में से चुनिए-
तुम किस काम के हो!

- Ans 1. कोढ़ में खाज
 2. किस मर्ज की दवा
 3. कोल्हू का बैल
 4. कूप मंडूक

Question ID : 26433062304
Status : Not Answered
Chosen Option : --

Q.8 'सरस्वती' के पर्यायवाची शब्द से वाक्य की पूर्ति कीजिए।

प्रातःकाल _____ का स्तोत्र पढ़िए।

- Ans 1. धात्री
 2. कान्ता
 3. शारदा
 4. उमा

Question ID : 26433079242
Status : Not Answered
Chosen Option : --

Q.9 निम्नलिखित वाक्य के किस खंड में त्रुटि है?
जीवन और साहित्य का घोर संबंध है।

- Ans 1. संबंध
 2. घोर
 3. साहित्य
 4. जीवन

Question ID : 26433066756
Status : Not Answered
Chosen Option : --

Q.10 'वह व्यक्ति जो विद्यार्थियों को पढ़ाने का कार्य करता है' वाक्यांश के लिए सार्थक शब्द है-

- Ans 1. शिक्षार्थी
 2. शिक्षक
 3. छात्र
 4. विद्यार्थी

Question ID : 26433062230
Status : Not Answered
Chosen Option : --

Q.11 लकड़ियों का समूह।
रेखांकित पद 'समूह' के बदले उपयुक्त शब्द का प्रयोग कीजिए।

- Ans
- 1. रेवड़
 - 2. ढेर
 - 3. टुकड़ा
 - 4. गट्टर

Question ID : 26433062691
Status : Not Answered
Chosen Option : --

Q.12 'शरीर का कोई भाग' वाक्यांश के लिए उचित शब्द बताइए -

- Ans
- 1. अवयव
 - 2. अभिन्न
 - 3. कृशांग
 - 4. दृष्टि

Question ID : 26433065908
Status : Not Answered
Chosen Option : --

Q.13 निम्न में से किस वाक्य में 'उत्कंठा' के सही पर्यायवाची शब्द का प्रयोग हुआ है?

- Ans
- 1. नव्या में अब कोई लालसा शेष नहीं थी।
 - 2. नेहा श्रेष्ठ गायिका है।
 - 3. रघु में उत्साह की कमी है।
 - 4. लता ने अपनी उदारता का परिचय दिया।

Question ID : 26433067015
Status : Not Answered
Chosen Option : --

Q.14 पेड़ बढ़ता गया।

इस वाक्य में प्रयुक्त संयुक्त क्रिया का नाम बताइए।

- Ans
- 1. नित्यताबोधक संयुक्त क्रिया
 - 2. अवकाशबोधक संयुक्त क्रिया
 - 3. अनुमतिबोधक संयुक्त क्रिया
 - 4. समाप्तिबोधक संयुक्त क्रिया

Question ID : 26433063048
Status : Not Answered
Chosen Option : --

Q.15 निम्नलिखित वाक्यांश के लिय उपयुक्त सार्थक शब्द है:
जो कहा न जा सके

- Ans 1. कहना
 2. कहानी
 3. अकथ्य
 4. कथन

Question ID : 26433065756
Status : Not Answered
Chosen Option : --

Comprehension:

निम्नलिखित गद्यांश में कुछ शब्दों को हटा दिया गया है। दिए गए विकल्पों की सहायता से रिक्त स्थानों की पूर्ति कीजिए। प्रत्येक संख्या के लिए सबसे उपयुक्त विकल्प का चयन करें।

मैत्री भाव सकारात्मक तथा 1. _____ वर्ग में गिना जाता है। मित्रता ऐसा उपहार है जो 2. _____ को प्राप्त होता है। सच्चा मित्र वही होता है जिसके कारण हमें कभी भी 3. _____ ना हो। जब भी हमारी ऐसी कोई आदत होती है जिससे दूसरे को परेशानी होती है तो ऐसी आदत 4. _____ में ही भलाई है। मनुष्य तो 5. _____ प्राणी है।

SubQuestion No : 16

Q.16 रिक्त स्थान 1 की पूर्ति के लिए सबसे उपयुक्त विकल्प का चयन कीजिए।

- Ans 1. नकारात्मक
 2. निम्न
 3. मध्यम
 4. उच्च

Question ID : 264330110993
Status : Not Answered
Chosen Option : --

Comprehension:

निम्नलिखित गद्यांश में कुछ शब्दों को हटा दिया गया है। दिए गए विकल्पों की सहायता से रिक्त स्थानों की पूर्ति कीजिए। प्रत्येक संख्या के लिए सबसे उपयुक्त विकल्प का चयन करें।

मैत्री भाव सकारात्मक तथा 1. _____ वर्ग में गिना जाता है। मित्रता ऐसा उपहार है जो 2. _____ को प्राप्त होता है। सच्चा मित्र वही होता है जिसके कारण हमें कभी भी 3. _____ ना हो। जब भी हमारी ऐसी कोई आदत होती है जिससे दूसरे को परेशानी होती है तो ऐसी आदत 4. _____ में ही भलाई है। मनुष्य तो 5. _____ प्राणी है।

SubQuestion No : 17

Q.17 रिक्त स्थान 2 की पूर्ति के लिए सबसे उपयुक्त विकल्प का चयन कीजिए।

- Ans 1. सबको
 2. अमीर
 3. भाग्यशाली
 4. गरीब

Question ID : 264330110994
Status : Not Answered
Chosen Option : --

Comprehension:

निम्नलिखित गद्यांश में कुछ शब्दों को हटा दिया गया है। दिए गए विकल्पों की सहायता से रिक्त स्थानों की पूर्ति कीजिए। प्रत्येक संख्या के लिए सबसे उपयुक्त विकल्प का चयन करें।

मैत्री भाव सकारात्मक तथा 1. _____ वर्ग में गिना जाता है। मित्रता ऐसा उपहार है जो 2. _____ को प्राप्त होता है। सच्चा मित्र वही होता है जिसके कारण हमें कभी भी 3. _____ ना हो। जब भी हमारी ऐसी कोई आदत होती है जिससे दूसरे को परेशानी होती है तो ऐसी आदत 4. _____ में ही भलाई है। मनुष्य तो 5. _____ प्राणी है।

SubQuestion No : 18

Q.18 रिक्त स्थान 3 की पूर्ति के लिए सबसे उपयुक्त विकल्प का चयन कीजिए।

Ans 1. पश्चाताप

2. उत्साह

3. खुशी

4. भलाई

Question ID : 264330110995

Status : Not Answered

Chosen Option : --

Comprehension:

निम्नलिखित गद्यांश में कुछ शब्दों को हटा दिया गया है। दिए गए विकल्पों की सहायता से रिक्त स्थानों की पूर्ति कीजिए। प्रत्येक संख्या के लिए सबसे उपयुक्त विकल्प का चयन करें।

मैत्री भाव सकारात्मक तथा 1. _____ वर्ग में गिना जाता है। मित्रता ऐसा उपहार है जो 2. _____ को प्राप्त होता है। सच्चा मित्र वही होता है जिसके कारण हमें कभी भी 3. _____ ना हो। जब भी हमारी ऐसी कोई आदत होती है जिससे दूसरे को परेशानी होती है तो ऐसी आदत 4. _____ में ही भलाई है। मनुष्य तो 5. _____ प्राणी है।

SubQuestion No : 19

Q.19 रिक्त स्थान 4 की पूर्ति के लिए सबसे उपयुक्त विकल्प का चयन कीजिए।

Ans 1. छोड़ने

2. गिाने

3. दिखाने

4. अपनाने

Question ID : 264330110996

Status : Not Answered

Chosen Option : --

Comprehension:

निम्नलिखित गद्यांश में कुछ शब्दों को हटा दिया गया है। दिए गए विकल्पों की सहायता से रिक्त स्थानों की पूर्ति कीजिए। प्रत्येक संख्या के लिए सबसे उपयुक्त विकल्प का चयन करें।

मैत्री भाव सकारात्मक तथा 1. _____ वर्ग में गिना जाता है। मित्रता ऐसा उपहार है जो 2. _____ को प्राप्त होता है। सच्चा मित्र वही होता है जिसके कारण हमें कभी भी 3. _____ ना हो। जब भी हमारी ऐसी कोई आदत होती है जिससे दूसरे को परेशानी होती है तो ऐसी आदत 4. _____ में ही भलाई है। मनुष्य तो 5. _____ प्राणी है।

SubQuestion No : 20

Q.20 रिक्त स्थान 5 की पूर्ति के लिए सबसे उपयुक्त विकल्प का चयन कीजिए।

Ans 1. सामाजिक

2. दिखावा

3. परेशान

4. भयानक

Question ID : 264330110997

Status : Not Answered

Chosen Option : --