

Multi Tasking Non Technical Staff Examination 2020

Participant ID	
Participant Name	
Test Center Name	
Test Date	05/10/2021
Test Time :	12:30 PM - 2:00 PM
Subject	MTS Non Technical 2020

Section : General English

Q.1 Select the most appropriate ANTONYM of the given word.

ZEALOUS

- Ans 1. Eager
 2. Indifferent
 3. Anxious
 4. Annoyed

Question ID : 65497814506
Chosen Option : 2

Q.2 Select the most appropriate option to fill in the blank.

We would be grateful if you _____ let us know what medicine we should take for this ailment.

- Ans 1. may
 2. could
 3. should
 4. shall

Question ID : 65497814495
Chosen Option : 2

Q.3 Identify the segment in the sentence that contains a grammatical error.

If there had not been such a long queue I could have returned back by 11 am.

- Ans 1. I could have returned back
 2. If there had not been
 3. such a long queue
 4. by 11 am

Question ID : 65497814492
Chosen Option : 1

Q.4 Select the most appropriate option to fill in the blank.

This is the ground which is _____ to be the highest cricket ground in the world.

- Ans 1. cleared
 2. considered
 3. concealed
 4. covered

Question ID : 65497814515
Chosen Option : 2

Q.5 Select the most appropriate option to substitute the underlined segment in the given sentence. If there is no need to substitute it, select 'No substitution required'.

The languages he can speak are English, Hindi, Marathi and Kannada.

- Ans 1. No substitution required
 2. is speaking are
 3. can speak is
 4. will speak are

Question ID : 65497814302
Chosen Option : 1

Q.6 Select the most appropriate one-word substitution for the given words.

A person who compiles dictionaries

- Ans 1. Cartographer
 2. Lexicographer
 3. Calligrapher
 4. Cryptographer

Question ID : 65497814512
Chosen Option : 2

Q.7 Select the most appropriate option to fill in the blank.

Aparna said she was sorry she had _____ to bring the book I had asked for.

- Ans 1. forgets
 2. forgotten
 3. forget
 4. forgot

Question ID : 65497814494
Chosen Option : 2

Q.8 Identify the segment in the sentence that contains a grammatical error.

Will you listen me when I tell you the details?

- Ans 1. Will you
 2. the details
 3. listen me
 4. when I tell you

Question ID : 65497814493
Chosen Option : 3

Q.9 Select the most appropriate meaning of the given idiom.

Keep someone in the loop

- Ans 1. Make them do exercises regularly
 2. Save all their numbers
 3. Give them all the information
 4. Take good care of them

Question ID : 65497814509
Chosen Option : 1

Q.10 Identify the segment in the sentence that contains a grammatical error.

I ordered an online gift for my friend at her birthday.

- Ans 1. for my friend
 2. at her birthday
 3. an online gift
 4. I ordered

Question ID : 65497814491
Chosen Option : 2

Q.11 Select the most appropriate meaning of the given idiom.

Of the old school

- Ans 1. School in an old age home
 2. School one attended long ago
 3. Old fashioned in thought
 4. Old dilapidated building

Question ID : 65497814510
Chosen Option : 3

Q.12 Select the most appropriate ANTONYM of the given word.

SLEEK

- Ans 1. Dull
 2. Easy
 3. Smooth
 4. Flat

Question ID : 65497814505
Chosen Option : --

Q.13 Select the MISPELT word.

- Ans 1. Territory
 2. Fascination
 3. Embroidary
 4. Interrogation

Question ID : 65497814514
Chosen Option : 3

Q.14 Select the MISPELT word.

- Ans 1. Clothes
 2. Trousers
 3. Germent
 4. Ironing

Question ID : 65497814513
Chosen Option : 3

Q.15 Select the most appropriate option to substitute the underlined segment in the given sentence. If there is no need to substitute it, select 'No substitution required'.

The club are organising a two-day yoga and meditation camp for beginners.

- Ans 1. is organising
 2. No substitution required
 3. can be organising
 4. will organised

Question ID : 65497814502
Chosen Option : 1

Q.16 Select the most appropriate option to fill in the blank.

Several peoples' homes were badly _____ during the floods.

- Ans 1. drowned
 2. damaged
 3. drained
 4. deluged

Question ID : 65497814516
Chosen Option : 2

Q.17 Select the most appropriate option to substitute the underlined segment. If no substitution is required, select 'No substitution required'.

Once Birbal was forbidden for attending the king's free lunch.

Ans 1. from attending

2. in attending

3. No substitution required

4. to be attending

Question ID : 65497816523

Chosen Option : 1

Q.18 Select the most appropriate one-word substitution for the given words.

Cinema show in the afternoon

Ans 1. Screening

2. Movie

3. Matinee

4. Film

Question ID : 65497814511

Chosen Option : 3

Q.19 Select the most appropriate synonym of the given word.

LAX

Ans 1. Needy

2. Negligent

3. Careful

4. Deprived

Question ID : 65497814507

Chosen Option : --

Q.20 Select the most appropriate synonym of the given word.

TENSILE

Ans 1. Anxious

2. Stretchable

3. Worried

4. Relaxed

Question ID : 65497814508

Chosen Option : 2

Comprehension:

In the following passage, some words have been deleted. Fill in the blanks with the help of the alternatives given. Select the most appropriate option for each blank.

A poet visited Tenali Raman hoping to impress him with some poems he had written. Raman asked (1)_____ to leave the poems with him and promised to read them (2)_____. The man, however, insisted on (3)_____ out the poems to him. As the poet droned (4)_____ Raman fell asleep. When he woke up, the poet asked: "Sir, shall I read the (5)_____ again?"

SubQuestion No : 21**Q.21 Select the most appropriate option to fill in blank no. 1.**

- Ans 1. them
 2. him
 3. her
 4. his

Question ID : 65497814497
Chosen Option : 2

Comprehension:

In the following passage, some words have been deleted. Fill in the blanks with the help of the alternatives given. Select the most appropriate option for each blank.

A poet visited Tenali Raman hoping to impress him with some poems he had written. Raman asked (1)_____ to leave the poems with him and promised to read them (2)_____. The man, however, insisted on (3)_____ out the poems to him. As the poet droned (4)_____ Raman fell asleep. When he woke up, the poet asked: "Sir, shall I read the (5)_____ again?"

SubQuestion No : 22**Q.22 Select the most appropriate option to fill in blank no. 2.**

- Ans 1. later
 2. lately
 3. after
 4. next

Question ID : 65497814498
Chosen Option : 1

Comprehension:

In the following passage, some words have been deleted. Fill in the blanks with the help of the alternatives given. Select the most appropriate option for each blank.

A poet visited Tenali Raman hoping to impress him with some poems he had written. Raman asked (1)_____ to leave the poems with him and promised to read them (2)_____. The man, however, insisted on (3)_____ out the poems to him. As the poet droned (4)_____ Raman fell asleep. When he woke up, the poet asked: "Sir, shall I read the (5)_____ again?"

SubQuestion No : 23**Q.23 Select the most appropriate option to fill in blank no. 3.**

- Ans 1. reading
 2. rehearsing
 3. recounting
 4. reciting

Question ID : 65497814499
Chosen Option : 1

Comprehension:

In the following passage, some words have been deleted. Fill in the blanks with the help of the alternatives given. Select the most appropriate option for each blank.

A poet visited Tenali Raman hoping to impress him with some poems he had written. Raman asked (1)_____ to leave the poems with him and promised to read them (2)_____. The man, however, insisted on (3)_____ out the poems to him. As the poet droned (4)_____ Raman fell asleep. When he woke up, the poet asked: "Sir, shall I read the (5)_____ again?"

SubQuestion No : 24

Q.24 Select the most appropriate option to fill in blank no. 4.

- Ans 1. in
 2. out
 3. on
 4. up

Question ID : 65497814500
Chosen Option : 3

Comprehension:

In the following passage, some words have been deleted. Fill in the blanks with the help of the alternatives given. Select the most appropriate option for each blank.

A poet visited Tenali Raman hoping to impress him with some poems he had written. Raman asked (1)_____ to leave the poems with him and promised to read them (2)_____. The man, however, insisted on (3)_____ out the poems to him. As the poet droned (4)_____ Raman fell asleep. When he woke up, the poet asked: "Sir, shall I read the (5)_____ again?"

SubQuestion No : 25

Q.25 Select the most appropriate option to fill in blank no. 5.

- Ans 1. pages
 2. rhymes
 3. poems
 4. verses

Question ID : 65497814501
Chosen Option : 3

Section : **General Intelligence and Reasoning**

Q.1 Select the number that can replace the question mark (?) in the following series.

117, 98, 80, ?, 47, 32

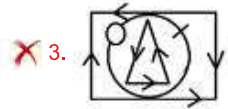
- Ans 1. 75
 2. 63
 3. 55
 4. 58

Question ID : 65497817349
Chosen Option : 2

Q.2 Select the figure which will come next in the following series.



Ans



Question ID : 65497817364
Chosen Option : 2

Q.3 Study the given pattern carefully and select the number that can replace the question mark (?) in it.

6 12 78
6 15 99
3 13 ?

Ans 1. 49

2. 45

3. 54

4. 50

Question ID : 65497817348
Chosen Option : 1

Q.4 In a certain code language, JET is written as TED and MAD is written as WAN. How will CARE be written in the same code language?

Ans 1. MADE

2. MALE

3. MABE

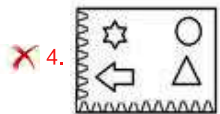
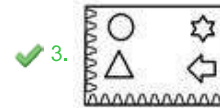
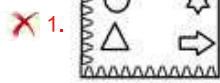
4. LKBE

Question ID : 65497817351
Chosen Option : 3

Q.5 Select the correct mirror image of the given figure when the mirror is placed to the right side of the figure.



Ans



Question ID : 65497817367

Chosen Option : 3

Q.6 In a certain code language, SEAT is written as TIJJ. How will TREE be written in the same code language?

Ans 1. UVNU

2. VUNU

3. UVNV

4. SVNN

Question ID : 65497817352

Chosen Option : 1

Q.7 Select the option which is related to third term in the same way as the second term is related to the first term.

Focus : Distract :: Precise : ?

Ans 1. Careless

2. Specific

3. Insufficient

4. Strict

Question ID : 65497817356

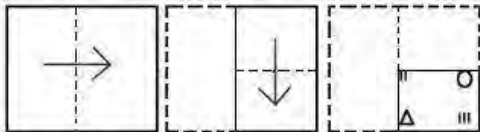
Chosen Option : 1

Q.8 Eight students A, B, C, D, E, F, G and H are sitting around a circular table, at equal distances from each other. If B is seated in the north-east direction, in which direction is H seated?

- Ans
- 1. South-west
 - 2. North-east
 - 3. North-west
 - 4. South-east

Question ID : 65497817361
Chosen Option : 3

Q.9 A paper is folded and cut as shown below. How will it appear when unfolded?



- Ans
- 1.
 - 2.
 - 3.
 - 4.

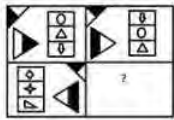
Question ID : 65497817368
Chosen Option : 4

Q.10 In a certain code language, C is coded as 3 and DAM is coded as 6. What will be the code for HENCE in the same language?

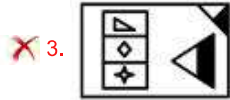
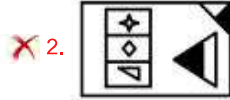

- Ans
- 1. 7
 - 2. 12
 - 3. 11
 - 4. 5

Question ID : 65497817354
Chosen Option : 1

Q.11 Given below is a pattern out of which a section has been cut. Select the option which when placed correctly will complete the pattern.



Ans



Question ID : 65497817365
Chosen Option : 4

Q.12 Select the option that represents the number which is related to the fourth number in the same way as the first number is related to the second number.

28 : 145 :: ? : 100

Ans 1. 19

2. 13

3. 17

4. 20

Question ID : 65497817347
Chosen Option : 1

Q.13 Select the number that can replace the question mark (?) in the following pattern.

5 6 7 8 9
115 206 ? 502 719

Ans 1. 337

2. 347

3. 343

4. 333

Question ID : 65497817350
Chosen Option : 4

Q.14 If the following mathematical signs are changed as given below, then select the option which represents the correct equation.

- ÷ is changed to +
- × is changed to -
- + is changed to -
- is changed to ÷

- Ans
- 1. $26 \times 18 \div 39 + 4 - 111 = 100$
 - 2. $26 + 18 - 39 \times 4 \div 111 = 119$
 - 3. $26 - 18 + 39 \times 4 \div 111 = 203$
 - 4. $26 - 18 + 39 \div 4 \times 111 = 40$

Question ID : 65497817346
Chosen Option : --

Q.15 In a certain code language, if the code for EXCEL is 44 and the code for WORD is 56, then what will be the code for HEAVEN in the same language?

- Ans
- 1. 49
 - 2. 61
 - 3. 55
 - 4. 58

Question ID : 65497817353
Chosen Option : 2

Q.16 Two statements are given followed by two conclusions numbered I and II. Assuming that the information given in the statements is true, even if it appears to be different from commonly known facts, decide which of the conclusions logically follow(s) from the statements.

Statements:

1. Some bags are covers.
2. All sheets are covers.

Conclusions:

- I. All covers are sheets.
- II. Some bags are sheets.

- Ans
- 1. Only conclusion I follows
 - 2. Only conclusion II follows
 - 3. Both conclusions I and II follow
 - 4. Neither conclusion I nor II follows.

Question ID : 65497817359
Chosen Option : 4

Q.17 If 'A' stands for 'subtraction', 'B' stands for 'addition', 'C' stands for 'multiplication' and 'D' stands for 'division', then what will be the value of the following equation?

96 D 12 A 6 B 3 C 5

- Ans
- 1. 1158
 - 2. 128
 - 3. 17
 - 4. 7

Question ID : 65497817345
Chosen Option : 3

Q.18 Select the correct option that indicates the arrangement of the followings items of a book in a logical and meaningful order.

1. Preface
2. Content list
3. Chapters
4. Bibliography
5. Cover Page

- Ans
- 1. 1, 2, 5, 3, 4
 - 2. 2, 1, 5, 3, 4
 - 3. 1, 5, 2, 3, 4
 - 4. 5, 1, 2, 3, 4

Question ID : 65497817363
Chosen Option : 4

Q.19 Three statements are given followed by three conclusions numbered I, II and III. Assuming that the information given in the statements is true, even if it appears to be different from commonly known facts, decide which of the conclusions logically follow(s) from the statements.

Statements:

1. No jungles are trees.
2. Some trees are long.
3. No plants are long.

Conclusions:

- I. Some plants are trees.
- II. All trees are long.
- III. Some jungles are long.

- Ans
- 1. None of the conclusions follows
 - 2. Both conclusions I and II follow
 - 3. Only conclusion II follows
 - 4. Both conclusions I and III follow

Question ID : 65497817360
Chosen Option : 1

Q.20 Eight friends P, Q, R, S, T, U, V and W are sitting around a rectangular table. R is sitting at the north-west, R and P are placed diagonally opposite each other, whereas V and U are placed diagonally opposite each other. W faces the west direction, Q faces the east direction, and S is sitting between R and V. In which direction does T sit?

- Ans
- 1. South
 - 2. East
 - 3. West
 - 4. North

Question ID : 65497817362
Chosen Option : 1

Q.21 Four letter clusters have been given out of which three are alike in same manner while one is different. Select the odd one.

- Ans 1. DGL
 2. FJN
 3. ADI
 4. EHM

Question ID : 65497817358
Chosen Option : 2

Q.22 Select the option in which the given figure is embedded (ROTATION IS NOT ALLOWED).



Ans



Question ID : 65497817366
Chosen Option : 1

Q.23 Select the option which is related to third term in the same way as the second term is related to the first term.

Miniature : Giant :: Particle : ?

- Ans 1. Sub-atomic
 2. Whole
 3. Reluctance
 4. Dust

Question ID : 65497817357
Chosen Option : 2

Q.24 Select the option that is related to third term in the same way as the second term is related to the first term.

BOARD : VSELX :: ENJOY : ?

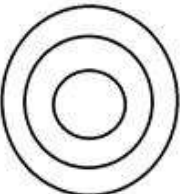
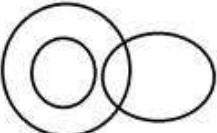

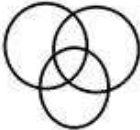
- Ans** 1. IHSC
 2. FEDSE
 3. HICSD
 4. IHEAC

Question ID : 65497817355
Chosen Option : 1

Q.25 Select the Venn diagram that best illustrates the relationship between the following classes.

Male, Skaters, Brown-Haired People

Ans

1. 
2. 
3. 
4. 

Question ID : 65497817369
Chosen Option : 4

Section : Quantitative Aptitude

Q.1 The average of ten numbers is 18.2. The average of the first four numbers is 16.6 and that of the last seven numbers is 20.8. If the 4th number is excluded, then the average of the remaining numbers is (correct to one decimal place):

- Ans** 1. 16.9
 2. 15.8
 3. 17.2
 4. 16.7

Question ID : 65497814343
Chosen Option : 1

Q.2 The total surface area of a solid right circular cylinder of height 13 cm, is 880 cm^2 . Its volume (in cm^3) is $11k$. The value of k is: (Take $\pi = \frac{22}{7}$)

- Ans**
- 1. 208
 - 2. 182
 - 3. 104
 - 4. 91

Question ID : 65497814260
Chosen Option : 2

Q.3 The average of the 2-digit numbers 37, 45, $6x$ and $x6$ is 48. What is the average of $(4x + 3)$ and $(x + 7)$?

- Ans**
- 1. 12.5
 - 2. 15
 - 3. 17.5
 - 4. 20

Question ID : 65497814344
Chosen Option : 2

Q.4 The ratio of the speeds of A and B is 2 : 5. To cover a certain distance, if A takes 15 minutes more than B, then how much time (in minutes) will B take to cover the same distance?

- Ans**
- 1. 12
 - 2. 8
 - 3. 10
 - 4. 9

Question ID : 65497814358
Chosen Option : 3

Q.5 A person saves 28% of his income. If his income increases by 20% and the expenditure reduces by 5%, then his savings increase by $x\%$. The value of x is closest to:

- Ans**
- 1. 72.5
 - 2. 84.3
 - 3. 45.8
 - 4. 54.4

Question ID : 65497814347
Chosen Option : 2

Q.6 When x is subtracted from each of 24, 30, 36 and 46, the numbers so obtained in this order, are in proportion. What is the mean proportional between $(2x + 3)$ and $(3x + 2)$?

- Ans**
- 1. 10
 - 2. 12
 - 3. $10\sqrt{3}$
 - 4. $12\sqrt{3}$

Question ID : 65497814350
Chosen Option : 3

Q.7 A sold an article to B at a loss of 20%, and B sold it to C at a profit of 32%. C sold it to D at a loss of 20%. If A's loss is ₹35 less than that of C, then B bought the article for:

- Ans**
- 1. ₹2,800
 - 2. ₹2,500
 - 3. ₹2,940
 - 4. ₹2,750

Question ID : 65497814349
Chosen Option : 2

Q.8 There is a rectangular plot, 120 m long and 98 m wide, with semi-circular flower beds along the breadth on both sides of the plot. The cost of putting a fence all around the plot at ₹16.50 per m is: (Take $\pi = \frac{22}{7}$)

- Ans**
- 1. ₹8,910
 - 2. ₹9,042
 - 3. ₹9,009
 - 4. ₹8,943

Question ID : 65497814359
Chosen Option : 2

Q.9 By selling an article for ₹820, Abhi loses 18%. To gain 25.5%, he should sell it for:

- Ans**
- 1. ₹1,260
 - 2. ₹1,275
 - 3. ₹1,255
 - 4. ₹1,250

Question ID : 65497814348
Chosen Option : 3

Q.10 What least number must be subtracted from 2963 so that the resulting number when divided by 9, 10 and 15, the remainder in each case is 5?

- Ans
- 1. 41
 - 2. 78
 - 3. 82
 - 4. 39

Question ID : 65497814340
Chosen Option : 2

Q.11 The value of $\frac{3}{8} + \frac{1}{7} \times 1\frac{3}{4} + \left(\frac{2}{3} \div \frac{3}{10} \text{ of } \frac{4}{9}\right) - \left(3\frac{1}{5} \div 4\frac{1}{2} \text{ of } 5\frac{1}{3}\right) \times \frac{15}{8}$ is:

- Ans
- 1. $5\frac{1}{2}$
 - 2. $10\frac{1}{2}$
 - 3. $10\frac{1}{4}$
 - 4. $5\frac{3}{8}$

Question ID : 65497814342
Chosen Option : 4

Q.12 The compound interest on a certain sum for 2 years at 15% per annum is ₹3,641, when the interest is compounded 8 monthly. The sum is:

- Ans
- 1. ₹9,000
 - 2. ₹9,600
 - 3. ₹11,000
 - 4. ₹10,000

Question ID : 65497814354
Chosen Option : 3

Q.13 What is the mean of the median and the mode of the data:

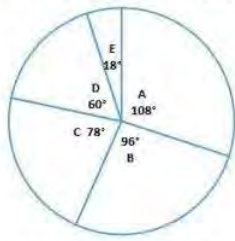
19, 20, 14, 15, 19, 16, 17, 15, 14, 13, 18, 19, 17, 13?

- Ans
- 1. 17
 - 2. 18
 - 3. 17.75
 - 4. 17.25

Question ID : 65497814346
Chosen Option : --

Q.14 Study the given pie chart and answer the question that follows.

Distribution (degree wise) of employees working
in offices A, B, C, D and E of a company in 2019



Total Number of Employees = 300

The total number of employees in offices C and E is what percentage less than the number of employees in office A?

Ans

✓ 1. $11\frac{1}{9}$

✗ 2. $12\frac{1}{2}$

✗ 3. $16\frac{2}{3}$

✗ 4. $15\frac{1}{4}$

Question ID : 65497814363

Chosen Option : 1

Q.15 A can do a certain work in 30 days. B is 25% more efficient than A, and C is 20% more efficient than B. A and B work together for 10 days. C alone completes the remaining work in x days. The value of x is:

Ans

✗ 1. 4

✗ 2. 8

✗ 3. 6

✓ 4. 5

Question ID : 65497814356

Chosen Option : 4

Q.16 The value of $6 \times 2 \div 3$ of $12 - 3 \div 2 \times (2 - 3) \times 2 + 3 \div 2$ of 3 is:

Ans

✗ 1. $\frac{17}{6}$

✓ 2. $\frac{23}{6}$

✗ 3. $\frac{19}{6}$

✗ 4. $\frac{13}{6}$

Question ID : 65497816481

Chosen Option : 2

Q.17 The simple interest on a sum of ₹4,800 for $4\frac{1}{2}$ years at a certain rate per annum is ₹1,684.80. What will be the amount of the same sum at the same rate for $6\frac{2}{3}$ years at simple interest?

- Ans**
- 1. ₹7,096
 - 2. ₹7,084
 - 3. ₹7,296
 - 4. ₹7,298

Question ID : 65497814353
Chosen Option : 3

Q.18 A can do $33\frac{1}{3}\%$ of a work in 10 days, and B can do 20% of the same work in 9 days. They worked together for 8 days. C alone completed 30% of the remaining work in 10 days. A and C together can do the same work in:

- Ans**
- 1. 18 days
 - 2. 12 days
 - 3. 15 days
 - 4. 20 days

Question ID : 65497814355
Chosen Option : 4

Q.19 Suman divided a certain sum between her three daughters in the ratio 2 : 3 : 4. Had she divided the sum in the ratio $\frac{1}{2} : \frac{1}{3} : \frac{1}{4}$, the daughter who got the least share earlier, would have got ₹3,500 more. The sum was:

- Ans**
- 1. ₹14,000
 - 2. ₹14,500
 - 3. ₹13,750
 - 4. ₹14,625

Question ID : 65497814351
Chosen Option : 4

Q.20 The marked price of an article is ₹2,560. During a sale, two successive discounts of 20% and x% are offered on it. If the selling price of the article is ₹1,679.36, then the value of x is:

- Ans**
- 1. 16.5
 - 2. 12.5
 - 3. 15
 - 4. 18

Question ID : 65497814345
Chosen Option : 4

Q.21 A person can row 5 m/sec in still water. The speed of the stream is 6 km/h. The time (in hours) taken by him to row a distance of 76.8 km downstream is:

- Ans**
- 1. 3.5
 - 2. 2.8
 - 3. 3.2
 - 4. 2.4

Question ID : 65497814357
Chosen Option : 3

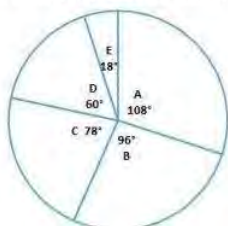
Q.22 The value of $48 \div [5 + \{19 - (16 - 16 \div 4 \times 3 \text{ of } 2)\}]$ is:

- Ans**
- 1. $\frac{3}{4}$
 - 2. $\frac{3}{2}$
 - 3. $\frac{2}{3}$
 - 4. $\frac{1}{2}$

Question ID : 65497814341
Chosen Option : 2

Q.23 Study the given pie chart and answer the question that follows.

Distribution (degree wise) of employees working in offices A, B, C, D and E of a company in 2019



Total Number of Employees = 300

In which office is the number of employees approximately 18% more than the average number of employees working in offices A, C, D and E?

- Ans**
- 1. D
 - 2. A
 - 3. B
 - 4. C

Question ID : 65497814362
Chosen Option : 4

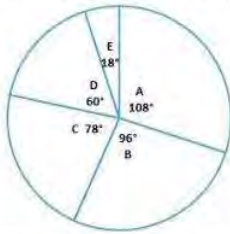
Q.24 The monthly incomes of A and B are in the ratio 2 : 3, and the ratio of their savings is 3 : 4. If the income of A equals the savings of B, then the ratio of the expenditures of A and B is:

- Ans**
- 1. 1 : 2
 - 2. 4 : 5
 - 3. 2 : 3
 - 4. 3 : 4

Question ID : 65497814352
Chosen Option : 1

Q.25 Study the given pie chart and answer the question that follows.

Distribution (degree wise) of employees working
in offices A, B, C, D and E of a company in 2019



Total Number of Employees = 300

In office A, 40% employees are females and 60% employees in office C are males. What is the ratio of the number of male employees in A to that of female employees in C?

- Ans**
- 1. 15 : 8
 - 2. 9 : 4
 - 3. 27 : 13
 - 4. 18 : 13

Question ID : 65497814364
Chosen Option : 3

Section : General Awareness

Q.1 The _____ plateau is sub-divided into the Garo Hills, the Khasi Hills, and the Jaintia Hills, named after the tribal groups inhabiting the region.

- Ans**
- 1. Chota Nagpur
 - 2. Baghe khand
 - 3. Malwa
 - 4. Meghalaya

Question ID : 65497814587
Chosen Option : --

Q.2 Which of the following is the closest layer to the Earth's surface in which all weather occurs?

- Ans 1. Mesosphere
 2. Troposphere
 3. Ionosphere
 4. Stratosphere

Question ID : 65497814588
Chosen Option : 2

Q.3 What does Ichthyology deal with?

- Ans 1. Study of reptiles and amphibians
 2. Study of fish
 3. Study of birds
 4. Study of insects

Question ID : 65497814581
Chosen Option : 1

Q.4 On 22 July 2020, who was nominated as the Vice-Chairman of the International Union of Railways' security platform?

- Ans 1. Margaret Chan
 2. François Davenne
 3. Soumya Swaminathan
 4. Arun Kumar

Question ID : 65497814573
Chosen Option : --

Q.5 Who emerged victorious in 'The Siege of Arcot' in 1751 AD?

- Ans 1. French
 2. Dutch
 3. Portuguese
 4. British

Question ID : 65497814591
Chosen Option : --

Q.6 As of July 2021 who is the Chief Economist of the International Monetary Fund?

- Ans 1. Krishna Bhardwaj
 2. Montek Singh Ahluwalia
 3. Gita Gopinath
 4. Raghuram Rajan

Question ID : 65497814374
Chosen Option : --

Q.7 As per the Budget 2019-20, which among the following is the single largest source of income of the Government of India, contributing 21 paise to each rupee earned?

- Ans
- 1. Custom duties
 - 2. Service tax
 - 3. Non-tax revenue
 - 4. Corporation tax

Question ID : 65497814577
Chosen Option : --

Q.8 Which part of the Constitution of India deals with the duties of citizens?

- Ans
- 1. Part IVA
 - 2. Part II
 - 3. Part X
 - 4. Part III

Question ID : 65497814578
Chosen Option : 1

Q.9 'Thalinoomics' was introduced in the Economic Survey for _____.

- Ans
- 1. 2017-18
 - 2. 2019-20
 - 3. 2016-17
 - 4. 2018-19

Question ID : 65497816595
Chosen Option : --

Q.10 Pooja Dhanda won the 2019 Arjuna Award for which sport?

- Ans
- 1. Wrestling
 - 2. Boxing
 - 3. Athletics
 - 4. Tennis

Question ID : 65497814570
Chosen Option : --

Q.11 Which team clinched the 2019-20 the Vijay Hazare Trophy for the 4th time by defeating Tamil Nadu in the final?

- Ans
- 1. Jharkhand
 - 2. Mumbai
 - 3. Karnataka
 - 4. Bihar

Question ID : 65497814571
Chosen Option : --

Q.12 Cheraw Dance is a traditional dance form of which state?

- Ans 1. Assam
 2. Mizoram
 3. Sikkim
 4. Arunachal Pradesh

Question ID : 65497814569
Chosen Option : --

Q.13 Which is the smallest bone in the human body?

- Ans 1. Stapes
 2. Phalanges
 3. Humerus
 4. Pelvis

Question ID : 65497814582
Chosen Option : 1

Q.14 In which year was the partition of Bengal carried out by the British Viceroy Lord Curzon?

- Ans 1. 1905
 2. 1901
 3. 1907
 4. 1911

Question ID : 65497814590
Chosen Option : 1

Q.15 In which year was the National Archives of India established?

- Ans 1. 1840
 2. 1830
 3. 1891
 4. 1835

Question ID : 65497814589
Chosen Option : --

Q.16 Which of the following is the third highest mountain in the world?

- Ans 1. Everest
 2. Kanchenjunga
 3. K2
 4. Annapurna

Question ID : 65497814586
Chosen Option : 2

Q.17 Which of the following is NOT a type of blood cell made by the bone marrow?

- Ans 1. Osteoclasts
 2. Red blood cells
 3. Platelets
 4. White blood cells

Question ID : 65497814583
Chosen Option : --

Q.18 Which among the following instruments is used to measure either direct or alternating electric current?

- Ans 1. Wattmeter
 2. Hygrometer
 3. Ammeter
 4. Pyrometer

Question ID : 65497814580
Chosen Option : 3

Q.19 What is the loss of bone density and strength known as?

- Ans 1. Osteoporosis
 2. Acromegaly
 3. Fibrous dysplasia
 4. Fracture

Question ID : 65497814585
Chosen Option : --

Q.20 On 22 July 2020, actor Sonu Sood launched the _____ app to find jobs and offer specific job training programmes.

- Ans 1. Pravasi Rojgar
 2. Sabka Rojgar
 3. Grahmin Rojgar
 4. Pravasi Atmanirbhar

Question ID : 65497814572
Chosen Option : --

Q.21 What does Article 32 of the Indian Constitution deal with?

- Ans 1. Right to Life
 2. Right to Property
 3. Right to Constitutional Remedies
 4. Financial Emergency

Question ID : 65497814579
Chosen Option : 3

Q.22 Litti Chokha is a famous cuisine of which of the following states?

Ans 1. Maharashtra

2. Bihar

3. Gujarat

4. Odisha

Question ID : 65497814568

Chosen Option : 2

Q.23 Who is the author of the book 'Shame'?

Ans 1. Salman Rushdie

2. Charles Dickens

3. Rudyard Kipling

4. Eric Segal

Question ID : 65497814574

Chosen Option : --

Q.24 _____ is caused when a child's growing bones fail to develop due to a lack of vitamin D.

Ans 1. Night blindness

2. Rickets

3. Goitre

4. Scurvy

Question ID : 65497814584

Chosen Option : 2

Q.25 Owi, a typical folk song which is made up of couplets describing women's maternal and marital homes and is sung by village womenfolk while performing routine chores throughout the day, belongs to which state?

Ans 1. Mizoram

2. Goa

3. Assam

4. Maharashtra

Question ID : 65497814567

Chosen Option : --