

## Multi Tasking Non Technical Staff and Havaladar CBIC and CBN Examination 2023

Roll Number	
Candidate Name	
Venue Name	iON Digital Zone iDZ Chandigarh
Exam Date	04/09/2023
Exam Time	9:00 AM - 11:00 AM
Subject	MTS Non Tech Havaladar CBIC and CBN Examination 2023

Section : Numerical and Mathematical Ability

Q.1 Find the area of an equilateral triangle, each of whose sides measures 12 cm.

- Ans
- 1.  $36\sqrt{3} \text{ cm}^2$
  - 2.  $3\sqrt{3} \text{ cm}^2$
  - 3.  $\frac{36}{\sqrt{3}} \text{ cm}^2$
  - 4.  $\frac{72}{\sqrt{3}} \text{ cm}^2$

Question ID : 264330153893

Option 1 ID : 264330603037

Option 2 ID : 264330603035

Option 3 ID : 264330603038

Option 4 ID : 264330603036

Status : Answered

Chosen Option : 1

Q.2 The radius and the height of a right circular cone are in the ratio 3 : 4. If its volume is  $301.44 \text{ m}^3$ , find the slant height (use  $\pi = 3.14$ ).

- Ans
- 1. 5 cm
  - 2. 20 cm
  - 3. 10 cm
  - 4. 15 cm

Question ID : 264330156370

Option 1 ID : 264330612882

Option 2 ID : 264330612879

Option 3 ID : 264330612881

Option 4 ID : 264330612880

Status : Answered

Chosen Option : 3

Q.3 At what rate of interest per annum, compounded annually, will an amount of ₹8,000 yield a compound interest of ₹904.2 in 2 years?

- Ans
- 1. 6%
  - 2. 8%
  - 3. 10%
  - 4. 5.5%

Question ID : 264330156346  
Option 1 ID : 264330612783  
Option 2 ID : 264330612784  
Option 3 ID : 264330612786  
Option 4 ID : 264330612785  
Status : Answered  
Chosen Option : 4

Q.4 The average of the first 10 prime number is:

- Ans
- 1. 12.9
  - 2. 9.7
  - 3. 11.9
  - 4. 13.4

Question ID : 264330154075  
Option 1 ID : 264330603765  
Option 2 ID : 264330603764  
Option 3 ID : 264330603763  
Option 4 ID : 264330603766  
Status : Answered  
Chosen Option : 1

Q.5 A manufacturer earns a profit of 10% on selling his products to a wholesale dealer. The wholesale dealer earns a profit of 15% by selling it to a retailer. The retailer, in turn, earns a profit of 25% from the customer. What is the actual cost of production of an article for which the customer pays ₹12,650?

- Ans
- 1. ₹8,000
  - 2. ₹8,500
  - 3. ₹9,000
  - 4. ₹7,000

Question ID : 264330154123  
Option 1 ID : 264330603956  
Option 2 ID : 264330603957  
Option 3 ID : 264330603958  
Option 4 ID : 264330603955  
Status : Answered  
Chosen Option : 1

Q.6 Number of eggs produced by five farms:

Year	Farm				
	L	M	N	O	P
2019	825	925	670	740	480
2020	928	768	781	530	864
2021	765	635	922	515	940
2022	832	526	623	618	745

What is the respective ratio of the dozens of eggs produced by farm M to farm P in the year 2020?

- Ans
- 1. 8 : 9
  - 2. 9 : 8
  - 3. 7 : 8
  - 4. 4 : 3

Question ID : 264330155761  
Option 1 ID : 264330610447  
Option 2 ID : 264330610450  
Option 3 ID : 264330610448  
Option 4 ID : 264330610449  
Status : Answered  
Chosen Option : 1

Q.7 The average of the first 69 natural numbers is:

- Ans
- 1. 34
  - 2. 35
  - 3. 33
  - 4. 36

Question ID : 264330156209  
Option 1 ID : 264330612236  
Option 2 ID : 264330612237  
Option 3 ID : 264330612235  
Option 4 ID : 264330612238  
Status : Answered  
Chosen Option : 2

Q.8 By selling a TV set for ₹16,800, a salesman gains a profit of 20%. If the production cost is increased by 20%, find the new selling price of the set so as to gain 20%.

- Ans
- 1. ₹18,160
  - 2. ₹18,480
  - 3. ₹20,160
  - 4. ₹20,480

Question ID : 264330155999  
Option 1 ID : 264330611395  
Option 2 ID : 264330611397  
Option 3 ID : 264330611398  
Option 4 ID : 264330611396  
Status : Answered  
Chosen Option : 3

Q.9 A mixture contains milk and water in the ratio 9 : 7. If it contains 4 litres more milk than water, then find the quantity of milk (in litres) in the mixture.

Ans  1. 18

2. 15

3. 21

4. 14

Question ID : 264330156051

Option 1 ID : 264330611603

Option 2 ID : 264330611605

Option 3 ID : 264330611606

Option 4 ID : 264330611604

Status : Answered

Chosen Option : 1

Q.10 Juli and Rahul can simultaneously finish the work of painting a room in 12 days. If Juli alone can paint the room in 20 days, in how many days can Rahul alone complete the same work of painting the room?

Ans  1. 30

2. 25

3. 40

4. 35

Question ID : 264330155719

Option 1 ID : 264330610280

Option 2 ID : 264330610279

Option 3 ID : 264330610282

Option 4 ID : 264330610281

Status : Answered

Chosen Option : 1

Q.11 The mean proportion of  $(3+2\sqrt{2})^2$  and  $(3-2\sqrt{2})^2$  is:

Ans  1.  $3 + 2\sqrt{2}$

2. 5

3.  $2\sqrt{2}$

4. 1

Question ID : 264330154052

Option 1 ID : 264330603674

Option 2 ID : 264330603671

Option 3 ID : 264330603672

Option 4 ID : 264330603673

Status : Answered

Chosen Option : 4

Q.12 Three measuring tapes are 64 cm, 72 cm and 96 cm, respectively. What is the least length that can be measured by any of the tapes exactly (in cm)?

- Ans
- 1. 575
  - 2. 570
  - 3. 576
  - 4. 525

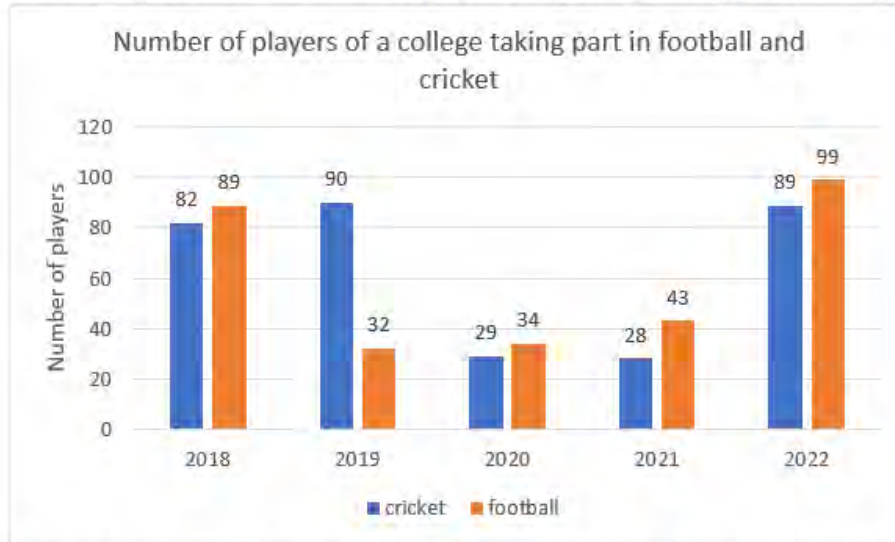
Question ID : 264330155984  
Option 1 ID : 264330611337  
Option 2 ID : 264330611335  
Option 3 ID : 264330611336  
Option 4 ID : 264330611338  
Status : Answered  
Chosen Option : 3

Q.13 A work can be completed by P and Q working separately in 12 and 18 days, respectively. But they work on alternate days beginning with P. How many days will it take to complete the work?

- Ans
- 1.  $14\frac{1}{12}$
  - 2. 15
  - 3.  $14\frac{1}{3}$
  - 4.  $14\frac{1}{4}$

Question ID : 264330154059  
Option 1 ID : 264330603702  
Option 2 ID : 264330603700  
Option 3 ID : 264330603701  
Option 4 ID : 264330603699  
Status : Answered  
Chosen Option : 3

Q.14 The bar graph shows the number of players of a college taking part in two games for five years:



What is the total number of players playing cricket and football in 2019 and 2020?

- Ans
- 1. 190
  - 2. 195
  - 3. 185
  - 4. 180

Question ID : 264330154100  
Option 1 ID : 264330603864  
Option 2 ID : 264330603865  
Option 3 ID : 264330603863  
Option 4 ID : 264330603866  
Status : Answered  
Chosen Option : 3

Q.15 P and Q start from point A to point B, at the same time at speeds of 32 km/h and 40 km/h, respectively. If in covering the journey P takes 15 minutes longer than Q, the total distance AB of the journey is:

- Ans
- 1. 36 km
  - 2. 32 km
  - 3. 40 km
  - 4. 44 km

Question ID : 264330156366  
Option 1 ID : 264330612865  
Option 2 ID : 264330612866  
Option 3 ID : 264330612864  
Option 4 ID : 264330612863  
Status : Answered  
Chosen Option : 3

Q.16 Simplify

$$108 \div 36 \times 4 + 2.5 \times 4 \div 0.5 - 10$$

- Ans  1. 10  
 2. 22  
 3. 21  
 4. 20

Question ID : 264330156049  
Option 1 ID : 264330611595  
Option 2 ID : 264330611598  
Option 3 ID : 264330611597  
Option 4 ID : 264330611596  
Status : Answered  
Chosen Option : 2

Q.17 A car dealer borrows ₹20,000 from a bank for a period of 2 years at a simple interest rate of 8% per annum. If he repays the loan in full at the end of the 2-year period, how much will he have to pay?

- Ans  1. ₹3,600  
 2. ₹23,600  
 3. ₹23,200  
 4. ₹3,200

Question ID : 264330156269  
Option 1 ID : 264330612478  
Option 2 ID : 264330612476  
Option 3 ID : 264330612475  
Option 4 ID : 264330612477  
Status : Answered  
Chosen Option : 3

Q.18 A lady invests ₹27,600 in three shares in the ratio 3 : 4 : 5 which pay dividends of 20%, 15% and 5% on her investment for that year, respectively. What is the total dividend?

- Ans  1. ₹3,852  
 2. ₹3,335  
 3. ₹3,125  
 4. ₹2,535

Question ID : 264330154087  
Option 1 ID : 264330603813  
Option 2 ID : 264330603814  
Option 3 ID : 264330603812  
Option 4 ID : 264330603811  
Status : Answered  
Chosen Option : 2

Q.19 Two trains of length 200 m and 325 m long are running on parallel rail tracks at speeds of 78 km/h and 60 km/h, respectively. In how much time (in seconds) the faster train cross the slower one if they are running in the same direction?

- Ans  1. 105  
 2. 100  
 3. 115  
 4. 110

Question ID : 264330156233  
Option 1 ID : 264330612332  
Option 2 ID : 264330612331  
Option 3 ID : 264330612334  
Option 4 ID : 264330612333  
Status : Answered  
Chosen Option : 1

Q.20 A college student spends 75% of his pocket money. When the pocket money increased by 20%, the expenditure also increased by 15%. What is the increase in the savings?

- Ans  1. 25%  
 2. 55%  
 3. 35%  
 4. 45%

Question ID : 264330154044  
Option 1 ID : 264330603640  
Option 2 ID : 264330603642  
Option 3 ID : 264330603641  
Option 4 ID : 264330603639  
Status : Answered  
Chosen Option : 3

Section : Reasoning Ability and Problem Solving

Q.1 What should come in place of '?' in the given series?

4 22 112 562 2812 ?

- Ans  1. 13423  
 2. 13948  
 3. 14062  
 4. 13684

Question ID : 264330151464  
Option 1 ID : 264330593483  
Option 2 ID : 264330593485  
Option 3 ID : 264330593486  
Option 4 ID : 264330593484  
Status : Answered  
Chosen Option : 3



Q.2 What should come in place of '?' in the given series?

16 110 ? 5374 37616 263310 1843168

- Ans
- 1. 792
  - 2. 800
  - 3. 804
  - 4. 768

Question ID : 264330151481

Option 1 ID : 264330593552

Option 2 ID : 264330593553

Option 3 ID : 264330593554

Option 4 ID : 264330593551

Status : Answered

Chosen Option : 4

Q.3 Read the given statements and conclusions carefully. You have to take the given statements to be true even if they seem to be at variance from commonly known facts. You have to decide which conclusion/s logically follow/s from the given statements.

Statements: All ropes are forks. Some forks are spoons. Some spoons are chopsticks.

Conclusion I: Some ropes are spoons.

Conclusion II: All forks are chopsticks.

- Ans
- 1. Only conclusion (II) is follow.
  - 2. Only conclusion (I) is follow.
  - 3. Both conclusions (I) and (II) are follow.
  - 4. Neither conclusion (I) nor (II) is follow.

Question ID : 264330155927

Option 1 ID : 264330611112

Option 2 ID : 264330611111

Option 3 ID : 264330611114

Option 4 ID : 264330611113

Status : Answered

Chosen Option : 4

Q.4 In the following number-pairs, the second number is obtained by applying certain mathematical operations to the first number. Select the set in which the numbers are related in the same way as are the numbers of the following sets.  
(NOTE: Operations should be performed on the whole numbers, without breaking down the numbers into its constituent digits. E.g. 13 – Operations on 13 such as adding /deleting /multiplying etc. to 13 can be performed. Breaking down 13 into 1 and 3 and then performing mathematical operations on 1 and 3 is not allowed)

8 : 50

4 : 30

- Ans
- 1. 20 : 40
  - 2. 6 : 20
  - 3. 7 : 45
  - 4. 5 : 8

Question ID : 264330154646

Option 1 ID : 264330606050

Option 2 ID : 264330606048

Option 3 ID : 264330606047

Option 4 ID : 264330606049

Status : Marked For Review

Chosen Option : 2

Q.5 What will come in the place of '?' in the following equation, if '+' and '-' are interchanged and '×' and '÷' are interchanged?

$$729 \times 81 - 96 - 13 + 8 = ?$$

- Ans
- 1. 1
  - 2. 11
  - 3. 8
  - 4. 9

Question ID : 264330155680  
 Option 1 ID : 264330610124  
 Option 2 ID : 264330610123  
 Option 3 ID : 264330610126  
 Option 4 ID : 264330610125  
 Status : Answered  
 Chosen Option : 1

Q.6 Which figure should replace the question mark (?) if the following figure series were to be continued?



Ans

- 1. 

O	P	T
		△
- 2. 

□	P	△
		T
- 3. 

	T	O
P		
		△
- 4. 

□	P	T
		△

Question ID : 264330154758  
 Option 1 ID : 264330606497  
 Option 2 ID : 264330606495  
 Option 3 ID : 264330606496  
 Option 4 ID : 264330606498  
 Status : Answered  
 Chosen Option : 4

Q.7 In a certain code language, 'COIN' is coded as '9735' and 'ONCE' is coded as '3459'. What is the code for 'E' in the given code language?

- Ans
- 1. 5
  - 2. 3
  - 3. 4
  - 4. 9

Question ID : 264330151693  
Option 1 ID : 264330594402  
Option 2 ID : 264330594400  
Option 3 ID : 264330594399  
Option 4 ID : 264330594401  
Status : Answered  
Chosen Option : 3

Q.8 Read the given statements and conclusions carefully. You have to take the given statements to be true even if they seem to be at variance from commonly known facts. You have to decide which conclusion/s logically follow/s from the given statements.

Statements: All computers are laptops. Some laptops are heavy. All heavy is wood.

Conclusion I: All laptops are computers.

Conclusion II: Some heavy are laptops.

- Ans
- 1. Neither conclusion (I) nor (II) is follow.
  - 2. Only conclusion (I) is follow.
  - 3. Both conclusions (I) and (II) are follow.
  - 4. Only conclusion (II) is follow.

Question ID : 264330155908  
Option 1 ID : 264330611037  
Option 2 ID : 264330611035  
Option 3 ID : 264330611038  
Option 4 ID : 264330611036  
Status : Answered  
Chosen Option : 4

Q.9 Six people, Karan, Dilip, Rahul, Prabhat, Alok and Sandeep are sitting in a straight line, facing north. Karan sits 2nd from the left end. Dilip sits 3rd to the right of Karan. Rahul sits 2nd to the left of Dilip. Prabhat sits 3rd to the right of Rahul. Sandeep sits 2nd to the left of Prabhat. Who sits 2nd to the right of Karan?

- Ans
- 1. Rahul
  - 2. Sandeep
  - 3. Prabhat
  - 4. Alok

Question ID : 264330161848  
Option 1 ID : 264330634720  
Option 2 ID : 264330634721  
Option 3 ID : 264330634722  
Option 4 ID : 264330634719  
Status : Answered  
Chosen Option : 2

Q.10 What should come in place of ? in the given series based on the English alphabetical order?

MAG, QXE, UUC, YRA, ?

- Ans
- 1. CNX
  - 2. COY
  - 3. DNY
  - 4. DMX

Question ID : 264330155806  
Option 1 ID : 264330610630  
Option 2 ID : 264330610627  
Option 3 ID : 264330610629  
Option 4 ID : 264330610628  
Status : Answered  
Chosen Option : 2

Q.11 In the following number-pairs, the second number is obtained by applying certain mathematical operations to the first number. Select the set in which the numbers are related in the same way as are the numbers of the following sets.

(NOTE: Operations should be performed on the whole numbers, without breaking down the numbers into its constituent digits. E.g. 13 – Operations on 13 such as adding / subtracting / multiplying etc. to 13 can be performed. Breaking down 13 into 1 and 3 and then performing mathematical operations on 1 and 3 is not allowed)

5, 128

9, 732

- Ans
- 1. 5, 50
  - 2. 3, 30
  - 3. 4, 46
  - 4. 2, 13

Question ID : 264330151620  
Option 1 ID : 264330594110  
Option 2 ID : 264330594108  
Option 3 ID : 264330594109  
Option 4 ID : 264330594107  
Status : Answered  
Chosen Option : 2

Q.12 What should come in place of '?' in the given series?

5 15 35 75 155 ?

- Ans
- 1. 315
  - 2. 305
  - 3. 325
  - 4. 335

Question ID : 264330151456  
Option 1 ID : 264330593452  
Option 2 ID : 264330593451  
Option 3 ID : 264330593453  
Option 4 ID : 264330593454  
Status : Answered  
Chosen Option : 1

Q.13 Select the correct mirror image of the given figure when the mirror is placed at MN as shown below.



- Ans
- 1.
  - 2.
  - 3.
  - 4.

Question ID : 264330151528

Option 1 ID : 264330593739

Option 2 ID : 264330593741

Option 3 ID : 264330593740

Option 4 ID : 264330593742

Status : Answered

Chosen Option : 3

Q.14 What will come in the place of the question mark (?) in the following equation, if '+' and '-' are interchanged and 'x' and '/' are interchanged?

$$39 \div 5 + 8 - 99 \times 9 = ?$$

- Ans
- 1. 168
  - 2. 198
  - 3. 158
  - 4. 178

Question ID : 264330154614

Option 1 ID : 264330605920

Option 2 ID : 264330605922

Option 3 ID : 264330605919

Option 4 ID : 264330605921

Status : Answered

Chosen Option : 2

Q.15 What should come in place of the question mark (?) in the given series based on the English alphabetical order?

EMT, ILX, MKB, QJF, ?

- Ans
- 1. UHL
  - 2. VJL
  - 3. UIJ
  - 4. VHK

Question ID : 264330156300

Option 1 ID : 264330612599

Option 2 ID : 264330612600

Option 3 ID : 264330612602

Option 4 ID : 264330612601

Status : Answered

Chosen Option : 3

**Q.16** What should come in place of ? in the given series based on the English alphabetical order?

NBE, JXA, FTW, BPS, ?

- Ans**
- 1. XMP
  - 2. YMN
  - 3. XLO
  - 4. YNP

Question ID : 264330155771

Option 1 ID : 264330610490

Option 2 ID : 264330610488

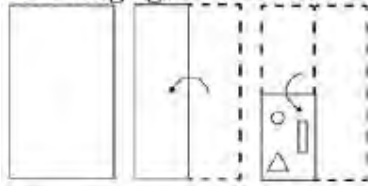
Option 3 ID : 264330610489

Option 4 ID : 264330610487

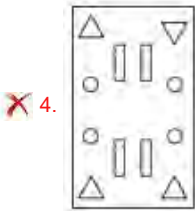
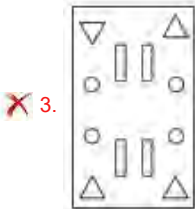
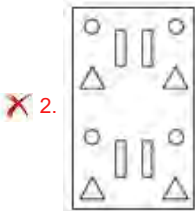
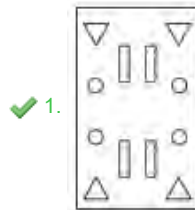
Status : Answered

Chosen Option : 3

**Q.17** The sequence of folding a piece of paper and the manner in which the folded paper is cut is shown in the following figures. How would this paper look when unfolded?



**Ans**



Question ID : 264330155607

Option 1 ID : 264330609831

Option 2 ID : 264330609834

Option 3 ID : 264330609832

Option 4 ID : 264330609833

Status : Answered

Chosen Option : 1

Q.18 In a certain code language, 'BLANCH' is coded as '36' and 'ARAB' is coded as '24'. What is the code for 'CORRECT' in the given code language?

- Ans  1. 41  
 2. 39  
 3. 42  
 4. 40

Question ID : 264330155825  
Option 1 ID : 264330610704  
Option 2 ID : 264330610706  
Option 3 ID : 264330610703  
Option 4 ID : 264330610705  
Status : Answered  
Chosen Option : 3

Q.19 DKJE is related to IPOJ in a certain way based on the English alphabetical order. In the same way, GTSM is related to LYXR. To which of the following is RBNF related to, following the same logic?

- Ans  1. WGSK  
 2. XERJ  
 3. WEQK  
 4. VGQI

Question ID : 264330151656  
Option 1 ID : 264330594253  
Option 2 ID : 264330594254  
Option 3 ID : 264330594251  
Option 4 ID : 264330594252  
Status : Answered  
Chosen Option : 1

Q.20 The position of how many letters will remain unchanged if each of the letter in the word 'BACHELOR' is arranged in alphabetical order?

- Ans  1. One  
 2. Five  
 3. Four  
 4. Two

Question ID : 264330154324  
Option 1 ID : 264330604759  
Option 2 ID : 264330604761  
Option 3 ID : 264330604760  
Option 4 ID : 264330604762  
Status : Answered  
Chosen Option : 3

Q.1 The Padma Shri awardee Guru K Kalyanasundaram Pillai, the man who is keeping an ancient tradition alive, was awarded the Padma Shri 2023 for his contribution to the field of \_\_\_\_\_.

- Ans
- 1. Kuchipudi
  - 2. Kathakali
  - 3. Bharatanatyam
  - 4. Mohiniyattam

Question ID : 264330160805  
Option 1 ID : 264330630551  
Option 2 ID : 264330630554  
Option 3 ID : 264330630553  
Option 4 ID : 264330630552  
Status : Answered  
Chosen Option : 3

Q.2 Who appoints the State Election Commissioner?

- Ans
- 1. Governor
  - 2. Speaker
  - 3. Chief Minister
  - 4. Advocate General

Question ID : 264330159924  
Option 1 ID : 264330627043  
Option 2 ID : 264330627045  
Option 3 ID : 264330627044  
Option 4 ID : 264330627046  
Status : Answered  
Chosen Option : 1

Q.3 In which river has the National Waterways-2 (NW-2) been developed in India?

- Ans
- 1. Brahmaputra
  - 2. Krishna
  - 3. Ganga
  - 4. Narmada

Question ID : 264330161512  
Option 1 ID : 264330633377  
Option 2 ID : 264330633376  
Option 3 ID : 264330633378  
Option 4 ID : 264330633375  
Status : Answered  
Chosen Option : 1

Q.4 In India, Micro Finance Institutions primarily target which segment of the population?

- Ans
- 1. Non-resident Indians (NRIs)
  - 2. Large corporations
  - 3. Low-income individuals and small businesses
  - 4. High-income individuals

Question ID : 264330157287  
Option 1 ID : 264330616514  
Option 2 ID : 264330616512  
Option 3 ID : 264330616513  
Option 4 ID : 264330616511  
Status : Answered  
Chosen Option : 3



**Q.5** What is the name of the scheme launched by Himachal Pradesh government for dairy farmers?

- Ans**
- 1. Dhugdh Dhan
  - 2. Pashu Poshan
  - 3. Dhoodh aur Dhan
  - 4. Sanjeevani

Question ID : 264330158327  
Option 1 ID : 264330620669  
Option 2 ID : 264330620667  
Option 3 ID : 264330620670  
Option 4 ID : 264330620668  
Status : Answered  
Chosen Option : 3

**Q.6** Which of the following States will host the 37th National Games?

- Ans**
- 1. Odisha
  - 2. Andhra Pradesh
  - 3. Goa
  - 4. Karnataka

Question ID : 264330161150  
Option 1 ID : 264330631934  
Option 2 ID : 264330631932  
Option 3 ID : 264330631933  
Option 4 ID : 264330631931  
Status : Answered  
Chosen Option : 2

**Q.7** Kalidas Samman is a prestigious arts award presented annually by the government of \_\_\_\_\_.

- Ans**
- 1. Madhya Pradesh
  - 2. Rajasthan
  - 3. Kerala
  - 4. Karnataka

Question ID : 264330161911  
Option 1 ID : 264330634973  
Option 2 ID : 264330634974  
Option 3 ID : 264330634971  
Option 4 ID : 264330634972  
Status : Answered  
Chosen Option : 1

Q.8 How many countries will participate in ICC 2023 ODI Cricket World Cup?

- Ans  1. 12  
 2. 10  
 3. 6  
 4. 8

Question ID : 264330158226  
Option 1 ID : 264330620266  
Option 2 ID : 264330620265  
Option 3 ID : 264330620263  
Option 4 ID : 264330620264  
Status : Answered  
Chosen Option : 2

Q.9 Whose autobiography is titled 'Born Again on the Mountain: a story of losing everything and finding it back'?

- Ans  1. Bachendri Pal  
 2. Dicky Dolma  
 3. Santosh Yadav  
 4. Arunima Sinha

Question ID : 264330155451  
Option 1 ID : 264330609207  
Option 2 ID : 264330609209  
Option 3 ID : 264330609210  
Option 4 ID : 264330609208  
Status : Answered  
Chosen Option : 4

Q.10 Which of the following is NOT a characteristic of money?

- Ans  1. Portability  
 2. Perishability  
 3. Divisibility  
 4. Durability

Question ID : 264330157303  
Option 1 ID : 264330616576  
Option 2 ID : 264330616578  
Option 3 ID : 264330616577  
Option 4 ID : 264330616575  
Status : Answered  
Chosen Option : 2

Q.11 Among the given options, which one causes an echo?

- Ans  1. When sound is reflected  
 2. When sound waves travel through a solid medium  
 3. When sound waves travel through a liquid medium  
 4. When sound waves travel through a vacuum

Question ID : 264330157786  
Option 1 ID : 264330618506  
Option 2 ID : 264330618505  
Option 3 ID : 264330618504  
Option 4 ID : 264330618503  
Status : Answered  
Chosen Option : 1

Q.12 \_\_\_\_\_ has two traditions: one is the sankeertana (which is the devotional aspect) and the other is the raasa.

- Ans
- 1. Odissi
  - 2. Sattriya
  - 3. Manipuri dance
  - 4. Chhau

Question ID : 264330160791  
Option 1 ID : 264330630495  
Option 2 ID : 264330630496  
Option 3 ID : 264330630498  
Option 4 ID : 264330630497  
Status : Not Answered  
Chosen Option : --

Q.13 Which of the following lakes is a saltwater lake ?

- Ans
- 1. Superior
  - 2. Chilika
  - 3. Malawi
  - 4. Titicaca

Question ID : 264330161325  
Option 1 ID : 264330632628  
Option 2 ID : 264330632627  
Option 3 ID : 264330632629  
Option 4 ID : 264330632630  
Status : Answered  
Chosen Option : 2

Q.14 'Wings of Fire' is an autobiography of whom?

- Ans
- 1. Ratan Tata
  - 2. Indira Gandhi
  - 3. Subhash Chandra Bose
  - 4. APJ Abdul Kalam

Question ID : 264330155491  
Option 1 ID : 264330609370  
Option 2 ID : 264330609369  
Option 3 ID : 264330609368  
Option 4 ID : 264330609367  
Status : Answered  
Chosen Option : 4

Q.15 The \_\_\_\_\_ of the Indian Constitution defines the Fundamental Duties of Indian Citizens.

- Ans
- 1. Article 51A
  - 2. Article 41B
  - 3. Article 49C
  - 4. Article 21A

Question ID : 264330162245  
Option 1 ID : 264330636310  
Option 2 ID : 264330636308  
Option 3 ID : 264330636309  
Option 4 ID : 264330636307  
Status : Answered  
Chosen Option : 1

Q.16 Dr. Bhupendra Kumar Hazarika won the Bharat Ratna award in the field of \_\_\_\_\_ in 2019.

Ans  1. Literature

2. Music

3. Games

4. Science

Question ID : 264330155506

Option 1 ID : 264330609428

Option 2 ID : 264330609429

Option 3 ID : 264330609430

Option 4 ID : 264330609427

Status : Answered

Chosen Option : 1

Q.17 What type of vegetation is represented by Sundarbans, the world's largest delta located in the Bay of Bengal?

Ans  1. Tropical Thorn Forests

2. Montane Forests

3. Mangrove Forests

4. Semi Evergreen Forests

Question ID : 264330160994

Option 1 ID : 264330631310

Option 2 ID : 264330631309

Option 3 ID : 264330631308

Option 4 ID : 264330631307

Status : Answered

Chosen Option : 3

Q.18 The Mumbai High region in Arabian Sea is known for mining \_\_\_\_\_.

Ans  1. uranium

2. coal

3. copper

4. mineral oil

Question ID : 264330161526

Option 1 ID : 264330633431

Option 2 ID : 264330633434

Option 3 ID : 264330633432

Option 4 ID : 264330633433

Status : Answered

Chosen Option : 2

Q.19 In which of the following years was the Child Marriage Restraint Act passed?

Ans  1. 1949

2. 1939

3. 1950

4. 1929

Question ID : 264330161751

Option 1 ID : 264330634333

Option 2 ID : 264330634332

Option 3 ID : 264330634334

Option 4 ID : 264330634331

Status : Answered

Chosen Option : 3

**Q.20** According to the Census of India 2011, identify the correct pair of State and Union Territories which recorded the highest literacy rate.

- Ans  1. Mizoram and Lakshadweep  
 2. Kerala and Chandigarh  
 3. Goa and Puducherry  
 4. Kerala and Lakshadweep

Question ID : 264330161558  
Option 1 ID : 264330633559  
Option 2 ID : 264330633561  
Option 3 ID : 264330633562  
Option 4 ID : 264330633560  
Status : Answered  
Chosen Option : 4

**Q.21** The sal tree assumes great significance in a number of tribal communities scattered across eastern India. For instance, \_\_\_\_\_ festival is celebrated in honour of the tree in Jharkhand.

- Ans  1. Karma  
 2. Tusu Parab  
 3. Sarhul  
 4. Sohrai

Question ID : 264330160836  
Option 1 ID : 264330630677  
Option 2 ID : 264330630678  
Option 3 ID : 264330630676  
Option 4 ID : 264330630675  
Status : Answered  
Chosen Option : 3

**Q.22** Geto Sora won the Arena Junior (Boys) International Badminton Championship. He belongs to which state?

- Ans  1. Arunachal Pradesh  
 2. Mizoram  
 3. Sikkim  
 4. Meghalaya

Question ID : 264330158369  
Option 1 ID : 264330620836  
Option 2 ID : 264330620837  
Option 3 ID : 264330620838  
Option 4 ID : 264330620835  
Status : Answered  
Chosen Option : 4

Q.23 Identify the Chhau dancer from the following, who received the Sangeet Natak Akademi Award-2021 (given in February 2023)?

- Ans
- 1. Bharathi Vithal
  - 2. Kumkum Dhar
  - 3. Bhuvan Kumar
  - 4. Rabindra Atibudhi

Question ID : 264330155519  
Option 1 ID : 264330609481  
Option 2 ID : 264330609480  
Option 3 ID : 264330609479  
Option 4 ID : 264330609482  
Status : Answered  
Chosen Option : 2

Q.24 Which of the following Indian musicians was referred to as 'Ghazal King'?

- Ans
- 1. Ghulam Ali
  - 2. Jagjit Singh
  - 3. Pankaj Udhas
  - 4. Mehdi Hassan

Question ID : 264330161774  
Option 1 ID : 264330634424  
Option 2 ID : 264330634426  
Option 3 ID : 264330634425  
Option 4 ID : 264330634423  
Status : Answered  
Chosen Option : 1

Q.25 On 8th April 1929, who among the following two revolutionists threw a bomb in the Central Legislative Assembly?

- Ans
- 1. Bhagat Singh and Rajguru
  - 2. Bhagat Singh and Ram Prasad Bismil
  - 3. Bhagat Singh and Batukeshwar Dutt
  - 4. Bhagat Singh and Sukhdev

Question ID : 264330161746  
Option 1 ID : 264330634313  
Option 2 ID : 264330634312  
Option 3 ID : 264330634311  
Option 4 ID : 264330634314  
Status : Answered  
Chosen Option : 1

Section : English Language and Comprehension

**Q.1** Select the option that can be used as a one-word substitute for the given group of words.

To go away suddenly and secretly in order to escape from somewhere

Ans  1. Abscond

2. Vanish

3. Excavate

4. Extradite

Question ID : 264330151871

Option 1 ID : 264330595106

Option 2 ID : 264330595104

Option 3 ID : 264330595103

Option 4 ID : 264330595105

Status : Answered

Chosen Option : 1

**Q.2** Select the most appropriate meaning of the underlined idiom.  
My friend's business has grown by leaps and bounds.

Ans  1. rapidly

2. aimlessly

3. perfectly

4. slowly

Question ID : 264330152751

Option 1 ID : 264330598603

Option 2 ID : 264330598606

Option 3 ID : 264330598605

Option 4 ID : 264330598604

Status : Answered

Chosen Option : 1

**Q.3** Select the most appropriate option that can substitute the underlined segment in the given sentence.

Peer pressure is bound to effect most of us both positively and negatively.

Ans  1. to invoke most of us

2. to affect most of us

3. to impede most of us

4. to prompt most of us

Question ID : 264330151809

Option 1 ID : 264330594865

Option 2 ID : 264330594863

Option 3 ID : 264330594866

Option 4 ID : 264330594864

Status : Answered

Chosen Option : 2

**Q.4 Select the most appropriate synonym of the given word.  
Peculiar**

- Ans  1. Neat  
 2. Normal  
 3. Strange  
 4. Jovial

Question ID : 264330151923  
Option 1 ID : 264330595309  
Option 2 ID : 264330595308  
Option 3 ID : 264330595307  
Option 4 ID : 264330595310  
Status : Answered  
Chosen Option : 3

**Q.5 Select the sentence that has NO spelling errors.**

- Ans  1. The teacher was impressed with the student's insightfull analysis of the novel, which demonstrated a deep understanding of the complex theames and motifs.  
 2. The teacher was impressed with the student's insightful analysis of the novel, which demonstrated a deep understanding of the complex themes and motifs.  
 3. The teacher was impressed with the student's insightul analysis of the novel, which demonstrated a deep understanding of the complex themes and motifs.  
 4. The teacher was impressed with the student's insightful analysis of the novel, which demonstredted a deep understanding of the complex themes and motifs.

Question ID : 264330152650  
Option 1 ID : 264330598205  
Option 2 ID : 264330598206  
Option 3 ID : 264330598204  
Option 4 ID : 264330598203  
Status : Answered  
Chosen Option : 2

**Q.6 Select the INCORRECTLY spelt word.**

- Ans  1. Beginning  
 2. Writting  
 3. Argument  
 4. Amateur

Question ID : 264330152646  
Option 1 ID : 264330598189  
Option 2 ID : 264330598187  
Option 3 ID : 264330598190  
Option 4 ID : 264330598188  
Status : Answered  
Chosen Option : 4



**Q.7** Select the most appropriate meaning of the underlined idiom in the following sentence.

Tim joined the family business as he failed in his final degree examination. Seeing the growth of the family business now, it seems like Tim's earlier failure was a blessing in disguise.

- Ans
- 1. A difficult time
  - 2. A mistake
  - 3. Something good that isn't recognised at first
  - 4. A good decision

Question ID : 264330153047  
Option 1 ID : 264330599756  
Option 2 ID : 264330599755  
Option 3 ID : 264330599757  
Option 4 ID : 264330599758  
Status : Answered  
Chosen Option : 3

**Q.8** The following sentence has been split into four segments. Identify the segment that contains a grammatical error and select the option which rectifies that error.

AI fiction is a constantly / evolving genre that gives us an peek / into the potential upsides and downsides / of intelligent machines.

- Ans
- 1. AI fiction is an constantly
  - 2. into a potential upside and downside
  - 3. evolving genre that gives us a peek
  - 4. of intelligent machine.

Question ID : 264330141341  
Option 1 ID : 264330553701  
Option 2 ID : 264330553702  
Option 3 ID : 264330553699  
Option 4 ID : 264330553700  
Status : Answered  
Chosen Option : 3

**Q.9** Parts of the following sentence have been underlined and given as options. Select the option that contains an error.

If he will come early, we will leave on time.

- Ans
- 1. will come
  - 2. If he
  - 3. on time
  - 4. we will

Question ID : 264330144888  
Option 1 ID : 264330567808  
Option 2 ID : 264330567807  
Option 3 ID : 264330567810  
Option 4 ID : 264330567809  
Status : Answered  
Chosen Option : 1

**Q.10** Select the most appropriate meaning of the underlined idiom in the following sentence.

I ordered a dozen doughnuts, but the kind baker gave me a baker's dozen.

- Ans
- 1. A group of 12 bakery items
  - 2. A group of 12 bakers
  - 3. A group of 13
  - 4. A group of 12

Question ID : 264330153076  
Option 1 ID : 264330599869  
Option 2 ID : 264330599870  
Option 3 ID : 264330599867  
Option 4 ID : 264330599868  
Status : Answered  
Chosen Option : 3

**Q.11** Parts of the following sentence have been underlined and given as options. Select the option that contains an error.

They had two bedrooms among them, one for the girls and one for the boys.

- Ans
- 1. girls and one
  - 2. them, one for
  - 3. bedrooms among
  - 4. had two

Question ID : 264330153210  
Option 1 ID : 264330600401  
Option 2 ID : 264330600399  
Option 3 ID : 264330600402  
Option 4 ID : 264330600400  
Status : Answered  
Chosen Option : 1

**Q.12** Select the INCORRECTLY spelt word.

- Ans
- 1. Adopt
  - 2. Advertisement
  - 3. Contantment
  - 4. Container

Question ID : 264330152945  
Option 1 ID : 264330599360  
Option 2 ID : 264330599359  
Option 3 ID : 264330599361  
Option 4 ID : 264330599362  
Status : Answered  
Chosen Option : 3

**Q.13** Select the most appropriate ANTONYM of the given word.  
Wisdom

- Ans  1. Stupidity  
 2. Experience  
 3. Modesty  
 4. Intelligence

Question ID : 264330152657  
Option 1 ID : 264330598232  
Option 2 ID : 264330598233  
Option 3 ID : 264330598234  
Option 4 ID : 264330598231  
Status : Answered  
Chosen Option : 1

**Q.14** Select the option that will improve the underlined part of the given sentence. In case no improvement is needed, select 'No improvement required'.  
Jack being the wiser and bolder among the two of us, took the lead, carrying the axe on his shoulder.

- Ans  1. bolder between  
 2. boldest among  
 3. No improvement required  
 4. boldest between

Question ID : 264330153199  
Option 1 ID : 264330600356  
Option 2 ID : 264330600355  
Option 3 ID : 264330600358  
Option 4 ID : 264330600357  
Status : Answered  
Chosen Option : 1

**Q.15** Select the option that can be used as a one-word substitute for the underlined group of words.  
Many people fought to put an end to slavery during the civil war.

- Ans  1. abolish  
 2. absorb  
 3. abide  
 4. abduct

Question ID : 264330152705  
Option 1 ID : 264330598421  
Option 2 ID : 264330598419  
Option 3 ID : 264330598422  
Option 4 ID : 264330598420  
Status : Answered  
Chosen Option : 1

**Q.16** Select the most appropriate ANTONYM of the word given in brackets to fill in the blank.

The doctor said that the patient named Rumi is in the \_\_\_\_\_ (initial) stage of lung cancer.

- Ans  1. terminal  
 2. innermost  
 3. early  
 4. outermost

Question ID : 264330152695  
Option 1 ID : 264330598386  
Option 2 ID : 264330598383  
Option 3 ID : 264330598384  
Option 4 ID : 264330598385  
Status : Answered  
Chosen Option : 4

**Q.17** Select the most appropriate option to fill in the blank.  
He generally avoids arguments as he is \_\_\_\_\_ by nature.

- Ans  1. questionable  
 2. reliable  
 3. quick-minded  
 4. peaceful

Question ID : 264330153549  
Option 1 ID : 264330601697  
Option 2 ID : 264330601698  
Option 3 ID : 264330601695  
Option 4 ID : 264330601696  
Status : Answered  
Chosen Option : 4

**Q.18** Select the most appropriate option that can substitute the underlined segment in the given sentence. If there is no need to substitute it, select 'No substitution required'.  
The pandemic has challenged education systems to ensure learning continuity, substantially increasing the demands placed on teachers.

- Ans  1. education systems to ensuring learning  
 2. education systems for ensure learning  
 3. education systems in ensure learning  
 4. No substitution required

Question ID : 264330151901  
Option 1 ID : 264330595219  
Option 2 ID : 264330595221  
Option 3 ID : 264330595220  
Option 4 ID : 264330595222  
Status : Answered  
Chosen Option : 4

**Q.19** Select the most appropriate idiom from the given options to fill in the blank.  
We broke the traffic rules unknowingly while coming back from the party, now we have to \_\_\_\_\_ sooner or later.

Ans  1. face the music

2. look sharp

3. cry for the moon

4. bid defiance

Question ID : 264330152687

Option 1 ID : 264330598354

Option 2 ID : 264330598353

Option 3 ID : 264330598351

Option 4 ID : 264330598352

Status : Answered

Chosen Option : 1

**Q.20** The following sentence has been split into four segments. Identify the segment that contains a grammatical error.

Guard over / making mistakes / by carefully checking / the assigned task.

Ans  1. Guard over

2. by carefully checking

3. the assigned task

4. making mistakes

Question ID : 264330155428

Option 1 ID : 264330609119

Option 2 ID : 264330609121

Option 3 ID : 264330609122

Option 4 ID : 264330609120

Status : Answered

Chosen Option : 2

### Comprehension:

In the following passage some words have been deleted. Read the passage carefully and select the most appropriate option to fill in each blank.

\_\_\_\_\_ (1) university or college degree has long been the traditional hallmark of a  
\_\_\_\_\_ (2) candidate in the professional arena. While it historically provided the most  
widely accepted standard of qualification and skill for professionals, many companies today  
\_\_\_\_\_ (3) their hiring process and considering a broader list of criteria to judge a  
candidate's ability. Organisations are reducing their reliance on college degrees as a sole  
marker of competence and instead placing greater emphasis \_\_\_\_\_ (4) the practical skills  
candidates have acquired through work experience. This shift in hiring is of particular  
relevance to India, which has the \_\_\_\_\_ (5) youth population in the world.

SubQuestion No : 21

**Q.21** Select the most appropriate option to fill in blank number 1.

Ans  1. The

2. That

3. A

4. An

Question ID : 264330152766

Option 1 ID : 264330598657

Option 2 ID : 264330598658

Option 3 ID : 264330598655

Option 4 ID : 264330598656

Status : Answered

Chosen Option : 1

**Comprehension:**

In the following passage some words have been deleted. Read the passage carefully and select the most appropriate option to fill in each blank.

\_\_\_\_\_ (1) university or college degree has long been the traditional hallmark of a  
\_\_\_\_\_ (2) candidate in the professional arena. While it historically provided the most  
widely accepted standard of qualification and skill for professionals, many companies today  
\_\_\_\_\_ (3) their hiring process and considering a broader list of criteria to judge a  
candidate's ability. Organisations are reducing their reliance on college degrees as a sole  
marker of competence and instead placing greater emphasis \_\_\_\_\_ (4) the practical skills  
candidates have acquired through work experience. This shift in hiring is of particular  
relevance to India, which has the \_\_\_\_\_ (5) youth population in the world.

**SubQuestion No : 22**

**Q.22** Select the most appropriate option to fill in blank number 2.

- Ans  1. was qualify  
 2. qualify  
 3. qualification  
 4. qualified

Question ID : 264330152767

Option 1 ID : 264330598662

Option 2 ID : 264330598660

Option 3 ID : 264330598661

Option 4 ID : 264330598659

Status : Answered

Chosen Option : 4

**Comprehension:**

In the following passage some words have been deleted. Read the passage carefully and select the most appropriate option to fill in each blank.

\_\_\_\_\_ (1) university or college degree has long been the traditional hallmark of a  
\_\_\_\_\_ (2) candidate in the professional arena. While it historically provided the most  
widely accepted standard of qualification and skill for professionals, many companies today  
\_\_\_\_\_ (3) their hiring process and considering a broader list of criteria to judge a  
candidate's ability. Organisations are reducing their reliance on college degrees as a sole  
marker of competence and instead placing greater emphasis \_\_\_\_\_ (4) the practical skills  
candidates have acquired through work experience. This shift in hiring is of particular  
relevance to India, which has the \_\_\_\_\_ (5) youth population in the world.

**SubQuestion No : 23**

**Q.23** Select the most appropriate option to fill in blank number 3.

- Ans  1. was changed  
 2. was changing  
 3. changing  
 4. are changing

Question ID : 264330152768

Option 1 ID : 264330598663

Option 2 ID : 264330598664

Option 3 ID : 264330598666

Option 4 ID : 264330598665

Status : Answered

Chosen Option : 4

**Comprehension:**

In the following passage some words have been deleted. Read the passage carefully and select the most appropriate option to fill in each blank.

\_\_\_\_\_ (1) university or college degree has long been the traditional hallmark of a  
\_\_\_\_\_ (2) candidate in the professional arena. While it historically provided the most  
widely accepted standard of qualification and skill for professionals, many companies today  
\_\_\_\_\_ (3) their hiring process and considering a broader list of criteria to judge a  
candidate's ability. Organisations are reducing their reliance on college degrees as a sole  
marker of competence and instead placing greater emphasis \_\_\_\_\_ (4) the practical skills  
candidates have acquired through work experience. This shift in hiring is of particular  
relevance to India, which has the \_\_\_\_\_ (5) youth population in the world.

**SubQuestion No : 24**

**Q.24** Select the most appropriate option to fill in blank number 4.

- Ans  1. about  
 2. for  
 3. with  
 4. on

Question ID : 264330152769

Option 1 ID : 264330598669

Option 2 ID : 264330598670

Option 3 ID : 264330598668

Option 4 ID : 264330598667

Status : Answered

Chosen Option : 4

**Comprehension:**

In the following passage some words have been deleted. Read the passage carefully and select the most appropriate option to fill in each blank.

\_\_\_\_\_ (1) university or college degree has long been the traditional hallmark of a  
\_\_\_\_\_ (2) candidate in the professional arena. While it historically provided the most  
widely accepted standard of qualification and skill for professionals, many companies today  
\_\_\_\_\_ (3) their hiring process and considering a broader list of criteria to judge a  
candidate's ability. Organisations are reducing their reliance on college degrees as a sole  
marker of competence and instead placing greater emphasis \_\_\_\_\_ (4) the practical skills  
candidates have acquired through work experience. This shift in hiring is of particular  
relevance to India, which has the \_\_\_\_\_ (5) youth population in the world.

**SubQuestion No : 25**

**Q.25** Select the most appropriate option to fill in blank number 5.

- Ans  1. largest  
 2. longest  
 3. biggest  
 4. most highest

Question ID : 264330152770

Option 1 ID : 264330598673

Option 2 ID : 264330598674

Option 3 ID : 264330598672

Option 4 ID : 264330598671

Status : Answered

Chosen Option : 1