

Multi Tasking Non Technical Staff Havaladar CBIC and CBN Examination 2021

Roll Number	
Candidate Name	
Venue Name	
Exam Date	22/07/2022
Exam Time	1:00 PM - 2:30 PM
Subject	MTS Non technical and Havaladar Examination 2021

Section : General English

Q.1 The following sentence has been split into four segments. Identify the segment that contains a grammatical error.

Scholars have / studied the lives of / present-day farmer's / who practice agriculture.

- Ans
- 1. who practice agriculture
 - 2. present-day farmer's
 - 3. studied the lives of
 - 4. Scholars have

Question ID : 26433051315
Status : Answered
Chosen Option : 3

Q.2 The following sentence has been divided into parts. One of them may contain an error. Select the part that contains the error from the given options. If you don't find any error, mark 'No error' as your answer.

Her comfort was in her children; / her second son, Rupert, / was especially dear to her.

- Ans
- 1. No error
 - 2. was especially dear to her
 - 3. her second son, Rupert
 - 4. Her comfort was in her children

Question ID : 26433051261
Status : Answered
Chosen Option : 2

Q.3 Select the option that will improve the underlined part of the given sentence. In case no improvement is needed, select 'No improvement required'.

I didn't wanted her to go out with her friends.

- Ans
- 1. doesn't wanted
 - 2. No improvement required
 - 3. didn't want
 - 4. didn't wants

Question ID : 26433050561
Status : Answered
Chosen Option : 3

Q.4 Select the most appropriate meaning of the given idiom.

All Greek to me

- Ans
- 1. obvious
 - 2. Invisible
 - 3. incomprehensible
 - 4. familiar

Question ID : 26433050724
Status : Answered
Chosen Option : 3

Q.5 Select the most appropriate meaning of the given idiom.

An arm and a leg

- Ans
- 1. Willing to do something immediately
 - 2. A large amount of money
 - 3. At the service
 - 4. In a backward and forward motion

Question ID : 26433051585
Status : Answered
Chosen Option : 2

Q.6 Select the most appropriate option to fill in the blank.

You don't seem to be _____ happy with this proposal.

- Ans
- 1. few
 - 2. many
 - 3. very
 - 4. some

Question ID : 26433050502
Status : Answered
Chosen Option : 3

Q.7 Select the correctly spelt word.

- Ans
- 1. Harness
 - 2. Harnass
 - 3. Harnes
 - 4. Harnnes

Question ID : 26433050815
Status : Answered
Chosen Option : 1

Q.8 Select the most appropriate **ANTONYM** of the given word.

Malleable

- Ans** 1. Stiff
 2. Flexible
 3. Variable
 4. Resilient

Question ID : **26433050807**
Status : **Answered**
Chosen Option : 1

Q.9 Select the option that will improve the underlined part of the given sentence. In case no improvement is needed, select 'No improvement required'.

He indicated that a vigorous recovery programme was being carried out; 90,000 reminders had been issued and thousands of summons sent.

- Ans** 1. has been issued and thousands of summons sent
 2. No improvement required
 3. has been issued and thousands of summonses sent
 4. had been issued and thousands of summonses were sent

Question ID : **26433051673**
Status : **Answered**
Chosen Option : 2

Q.10 Select the option that can be used as a one-word substitute for the given group of words.

Occurring after the death of the said person

- Ans** 1. Effusive
 2. Gregarious
 3. Fugitive
 4. Posthumous

Question ID : **26433051249**
Status : **Answered**
Chosen Option : 4

Q.11 Select the most appropriate **ANTONYM** of the underlined word.

My husband has committed a very heinous crime.

- Ans** 1. Gruesome
 2. Appalling
 3. Delightful
 4. Cynical

Question ID : **26433050912**
Status : **Answered**
Chosen Option : 3

Q.12 Select the most appropriate synonym of the underlined word in the given sentence.

I am not going to scold you anymore.

- Ans 1. Laud
 2. Chide
 3. Placate
 4. Startle

Question ID : 26433050567
Status : Answered
Chosen Option : 1

Q.13 Select the INCORRECTLY spelt word.

- Ans 1. Beguile
 2. Blandishment
 3. Bereft
 4. Assiduous

Question ID : 26433051336
Status : Answered
Chosen Option : 3

Q.14 The following sentence has been divided into parts. One of them may contain an error.
Select the part that contains the error from the given options. If you don't find any error, mark 'No error' as your answer.

I liked talking to / you when you was / a small boy.

- Ans 1. you when you was
 2. No error
 3. a small boy
 4. I liked talking to

Question ID : 26433050951
Status : Answered
Chosen Option : 1

Q.15 Select the most appropriate synonym of the given word.

Voracious

- Ans 1. Greedy
 2. Restrained
 3. Moderate
 4. Truthful

Question ID : 26433051278
Status : Answered
Chosen Option : 2

Q.16 Select the most appropriate ANTONYM of the given word.

Preserve

- Ans 1. Neglect
 2. Safeguard
 3. Treasure
 4. Descend

Question ID : 26433051383
Status : Answered
Chosen Option : 1

Q.17 Select the most appropriate option to fill in the blank.

I prefer to have lunch with my family _____ Sundays.

- Ans 1. over
 2. on
 3. at
 4. in

Question ID : 26433050553
Status : Answered
Chosen Option : 2

Q.18 Select the option that will improve the underlined part of the given sentence. In case no improvement is needed, select 'No improvement required'.

Shirley have had all her children with the help of a fertility drug.

- Ans 1. Shirley had all her children through
 2. No improvement required
 3. Shirley have had all her children by
 4. Shirley has had all her children with

Question ID : 26433051698
Status : Answered
Chosen Option : 2

Q.19 Select the option that can be used as a one-word substitute for the given group of words.

A place where dead bodies are kept for identification

- Ans 1. Hutch
 2. Morgue
 3. Crematorium
 4. Tannery

Question ID : 26433051021
Status : Answered
Chosen Option : 2

Q.20 Select the option that can be used as a one-word substitute for the given group of words.

Feelings of great happiness and excitement

- Ans 1. Contentment
 2. Decadence
 3. Euphoria
 4. Desolation

Question ID : 26433051022
Status : Answered
Chosen Option : 1

Comprehension:

In the following passage, some words have been deleted. Read the passage carefully and select the most appropriate option to fill in each blank.

The role of the school and teachers (1) _____ always been vital in the all-round personality (2) _____ of students. In fact, a teacher is a role (3) _____ influencing every facet of the student's growth and developing (4) _____ innate potential, in addition to (5) _____ a motivator, guide and friend.

SubQuestion No : 21

Q.21 Select the most appropriate option to fill in blank number 1.

- Ans 1. were
 2. has
 3. having
 4. have

Question ID : 26433050556
Status : Answered
Chosen Option : 2

Comprehension:

In the following passage, some words have been deleted. Read the passage carefully and select the most appropriate option to fill in each blank.

The role of the school and teachers (1) _____ always been vital in the all-round personality (2) _____ of students. In fact, a teacher is a role (3) _____ influencing every facet of the student's growth and developing (4) _____ innate potential, in addition to (5) _____ a motivator, guide and friend.

SubQuestion No : 22

Q.22 Select the most appropriate option to fill in blank number 2.

- Ans 1. development
 2. turbulence
 3. occupation
 4. validation

Question ID : 26433050557
Status : Answered
Chosen Option : 1

Comprehension:

In the following passage, some words have been deleted. Read the passage carefully and select the most appropriate option to fill in each blank.

The role of the school and teachers (1) _____ always been vital in the all-round personality (2) _____ of students. In fact, a teacher is a role (3) _____ influencing every facet of the student's growth and developing (4) _____ innate potential, in addition to (5) _____ a motivator, guide and friend.

SubQuestion No : 23

Q.23 Select the most appropriate option to fill in blank number 3.

- Ans 1. replica
 2. template
 3. model
 4. double

Question ID : 26433050558
Status : Answered
Chosen Option : 3

Comprehension:

In the following passage, some words have been deleted. Read the passage carefully and select the most appropriate option to fill in each blank.

The role of the school and teachers (1) _____ always been vital in the all-round personality (2) _____ of students. In fact, a teacher is a role (3) _____ influencing every facet of the student's growth and developing (4) _____ innate potential, in addition to (5) _____ a motivator, guide and friend.

SubQuestion No : 24

Q.24 Select the most appropriate option to fill in blank number 4.

- Ans 1. its
 2. there
 3. their
 4. our

Question ID : 26433050559
Status : Answered
Chosen Option : 3

Comprehension:

In the following passage, some words have been deleted. Read the passage carefully and select the most appropriate option to fill in each blank.

The role of the school and teachers (1) _____ always been vital in the all-round personality (2) _____ of students. In fact, a teacher is a role (3) _____ influencing every facet of the student's growth and developing (4) _____ innate potential, in addition to (5) _____ a motivator, guide and friend.

SubQuestion No : 25

Q.25 Select the most appropriate option to fill in blank number 5.

- Ans 1. been
 2. having
 3. being
 4. seeing

Question ID : 26433050560
Status : Answered
Chosen Option : 3

Section : **General Intelligence and Reasoning**

Q.1 Select the option that will replace the question mark (?) in the given series.

45, 46, 42, 51, 35, ?

- Ans 1. 60
 2. 55
 3. 50
 4. 62

Question ID : 26433048331
Status : Answered
Chosen Option : 1

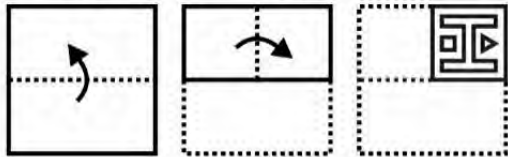
Q.2 Select the option that is related to the fifth number in the same way as the second number is related to the first number and the fourth number is related to the third number.

7 : 42 :: 9 : 72 :: 12 : ?

- Ans 1. 128
 2. 98
 3. 132
 4. 144

Question ID : 26433048183
Status : Answered
Chosen Option : 3

Q.3 The sequence of folding a piece of paper and the manner in which the folded paper has been cut is shown in the following figures. How would this paper look when unfolded?



Ans

1.



2.



3.



4.



Question ID : 26433048987

Status : Answered

Chosen Option : 2

Q.4 Select the letter-cluster from among the given options that can replace the question mark (?) in the following series.

KRA, IQZ, ?, EOX, CNW

- Ans 1. GQY
 2. GPY
 3. HQX
 4. HPY

Question ID : 26433048652
Status : Answered
Chosen Option : 2

Q.5 Which of the numbers (not digits) should be interchanged in the given equation to make it mathematically correct?

$$104 \div 4 - 6 + 13 \times 5 = 22$$

- Ans 1. 13 and 4
 2. 6 and 4
 3. 6 and 5
 4. 13 and 6

Question ID : 26433048335
Status : Answered
Chosen Option : 1

Q.6 In a certain code language, 'Milk are exhausting' is coded as '# tg 5', and 'Are water super milk' is coded as 'pa 5 6 #'. What is the code for 'super' in that language?

- Ans 1. tg
 2. 5 or 6
 3. pa or 6
 4. # or 5

Question ID : 26433048546
Status : Answered
Chosen Option : 3

Q.7 In a certain code language, 'shoes are shining' is coded as '235', 'shining stars rotate' is coded as '458', and 'stars are round' is coded as '829'. How will 'are' be coded in that language?

- Ans 1. 3
 2. 8
 3. 9
 4. 2

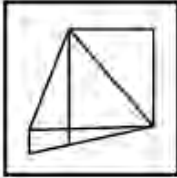
Question ID : 26433048023
Status : Answered
Chosen Option : 4

Q.8 Select the option in which the given figure is embedded (rotation is NOT allowed).




Ans

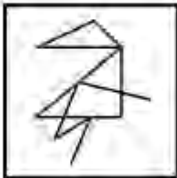
✗ 1.



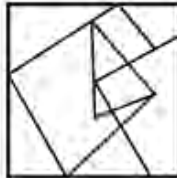
✗ 2.



✗ 3.



✓ 4.

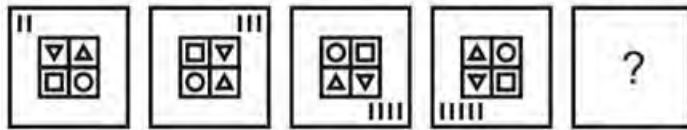


Question ID : 26433047964

Status : Answered

Chosen Option : 4

Q.9 Select the figure from among the given options that can replace the question mark (?) in the following series.




Ans


✗ 1.




✓ 2.



✗ 3.



✗ 4.



Question ID : 26433048709

Status : Answered

Chosen Option : 2

Q.10 By interchanging the given two numbers (not digits), which of the following equations will NOT be correct?

11 and 17

I. $400 + 17 - 71 \times 85 \div 11 = 58$

II. $1331 \div 17 - 50 + 6 \times 11 = 173$

Ans ✓ 1. Only I

✗ 2. Both I and II

✗ 3. Only II

✗ 4. Neither I nor II

Question ID : 26433048640

Status : Answered

Chosen Option : 1

Q.11 Read the given statements and conclusions carefully. Assuming that the information given in the statements is true, even if it appears to be at variance with commonly known facts, decide which of the given conclusions logically follow(s) from the statements.

Statement I: All criminals are thieves.
Statement II: Rakesh is a thief.

Conclusion I: Rakesh is a criminal.
Conclusion II: Some thieves may not be criminals.

- Ans 1. Only conclusion II follows.
 2. Both conclusions I and II follow.
 3. Neither conclusion I nor II follows.
 4. Only conclusion I follows.

Question ID : 26433048180
Status : Answered
Chosen Option : 4

Q.12 In a certain code language, 'POEM' is written as 'ODQO', 'HARD' is written as 'FQCG'. How will 'RNGC' be written in that language?

- Ans 1. FEPQ
 2. EEPQ
 3. FFPQ
 4. EFPQ

Question ID : 26433048922
Status : Answered
Chosen Option : 4

Q.13 A, B, R, D, I, S, and T are sitting around a circular table facing away from the circle. A does not sit adjacent to I and T. B does not sit adjacent to A. R sits fourth to the left of A. D and B sit adjacent to each other. S sits third to the left of I. Who is the immediate neighbour of both T and A?

- Ans 1. S
 2. T
 3. B
 4. R

Question ID : 26433048327
Status : Not Answered
Chosen Option : --

Q.14 In a certain code language, 'LUNCH' is written as 'NWPEJ', and 'FAITH' is written as 'HCKVJ'. How will 'SPACE' be written in that language?

- Ans 1. USCEG
 2. URBEG
 3. URCFG
 4. URCEG

Question ID : 26433048247
Status : Answered
Chosen Option : 4

Q.15 Select the set in which the numbers are related in the same way as are the numbers of the following sets.

(NOTE : Operations should be performed on the whole numbers, without breaking down the numbers into its constituent digits. E.g 13 – Operations on 13 such as adding /deleting /multiplying etc. to 13 can be performed. Breaking down 13 into 1 and 3 and then performing mathematical operations on 1 and 3 is NOT allowed)

(4, 5, 20)
(7, 8, 56)

- Ans 1. (9, 12, 98)
 2. (8, 11, 89)
 3. (7, 12, 84)
 4. (9, 11, 89)

Question ID : 26433047959

Status : Answered

Chosen Option : 3

Q.16 Among seven persons A, B, C, D, E, F and G, who are of different ages, D is younger than only A and E. E is younger to A and older than B. C is third youngest. F and G are second youngest and youngest respectively. Who is the fourth eldest?


- Ans 1. D
 2. C
 3. B
 4. E

Question ID : 26433048328

Status : Answered

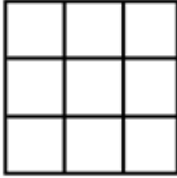
Chosen Option : 1

Q.17 Select the figure from the options that can replace the question mark (?) and complete the pattern.

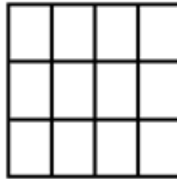


Ans

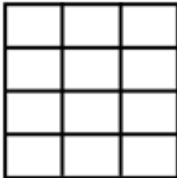
1.



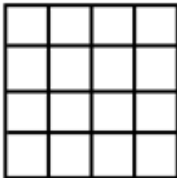
2.



3.



4.



Question ID : 26433048142
 Status : Answered
 Chosen Option : 2

Q.18 Read the given statements and conclusions carefully. Assuming that the information given in the statements is true, even if it appears to be at variance with commonly known facts, decide which of the given conclusions logically follow(s) from the statements.

Statements:
 Some Parrots are Birds.
 All Birds are Mammals.

Conclusions:

- I. All Mammals are Birds.
- II. Some Mammals are Parrots.

Ans 1. Neither conclusion I nor II follow.

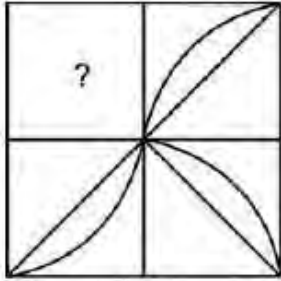
2. Only conclusion II follows.

3. Both conclusions I and II follow.

4. Only conclusion I follows.

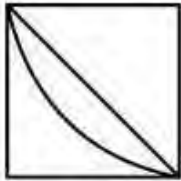
Question ID : 26433047954
 Status : Answered
 Chosen Option : 2

Q.19 Select the figure from the options that can replace the question mark (?) and complete the given pattern (rotation is not allowed).

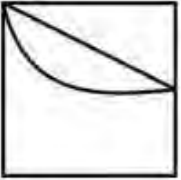


Ans

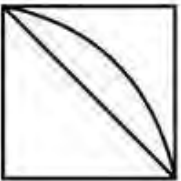
✓ 1.



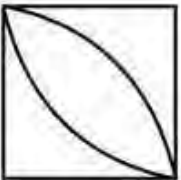
✗ 2.



✗ 3.



✗ 4.



Question ID : 26433048463
Status : Answered
Chosen Option : 1

Q.20 Select the option that is related to the third letter-cluster in the same way as the second letter-cluster is related to the first letter-cluster.

RL : OQ :: GO : ?

Ans ✓ 1. DT

✗ 2. CT

✗ 3. DS

✗ 4. ES

Question ID : 26433048550
Status : Answered
Chosen Option : 1

Q.21 C 1 is related to F 4 in a certain way. In the same way, J 6 is related to M 9. To which of the following is P 4 related, following the same logic?

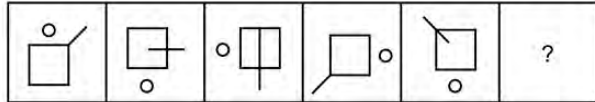
- Ans
- 1. S 6
 - 2. T 7
 - 3. S 7
 - 4. R 7

Question ID : 26433048244

Status : Answered

Chosen Option : 3

Q.22 Select the figure from among the given options that can replace the question mark (?) in the following series.



Ans

- 1.
- 2.
- 3.
- 4.

Question ID : 26433048187

Status : Answered

Chosen Option : 3

Q.23 Select the number from among the given options that can replace the question mark (?) in the following series.

94, 95, 100, 109, 122, ?

- Ans
- 1. 133
 - 2. 137
 - 3. 139
 - 4. 141

Question ID : 26433048693
Status : Answered
Chosen Option : 3

Q.24 Select the option that is related to the fifth letter-cluster in the same way as the second letter-cluster is related to the first letter-cluster and the fourth letter-cluster is related to the third letter-cluster.

SIPL : AQXT :: ADGJ : ILOR :: UMEB : ?

- Ans
- 1. CUMJ
 - 2. MCUF
 - 3. CUFM
 - 4. JCUM

Question ID : 26433048170
Status : Answered
Chosen Option : 1

Q.25 Five men Z, X, H, I and J are sitting around a circular table, facing towards the centre (but not necessarily in the same order). Z is sitting second to the left of I. H is sitting second to the right of X. J is not the immediate neighbour of Z. Who is sitting third to the right of X?

- Ans
- 1. I
 - 2. Z
 - 3. H
 - 4. J

Question ID : 26433048705
Status : Answered
Chosen Option : 1

Section : Numerical Aptitude

Q.1 The LCM of two numbers is 450. If the product of the two numbers is 20250, then find their HCF.

- Ans
- 1. 90
 - 2. 15
 - 3. 150
 - 4. 45

Question ID : 26433049295
Status : Answered
Chosen Option : 4

Q.2 If the ratio of an external angle and an internal angle of a regular polygon is 1 : 5 , then what is the number of sides in the polygon?

- Ans
- 1. 24
 - 2. 22
 - 3. 12
 - 4. 30

Question ID : 26433050091
Status : Not Answered
Chosen Option : --

Q.3 The average marks of a group of 16 students in a test are reduced by 4 when the topper, who scored 92 marks, is replaced by a new student. What are the marks scored by the new student?

- Ans
- 1. 18
 - 2. 28
 - 3. 32
 - 4. 22

Question ID : 26433050071
Status : Answered
Chosen Option : 2

Q.4 The selling price of an item is 20% less than its marked price. The marked price of the item is 30% more than the cost price. What is the profit percentage?

- Ans
- 1. 10%
 - 2. 4%
 - 3. 6%
 - 4. 8%

Question ID : 26433049974
Status : Answered
Chosen Option : 2

Q.5 If 45% of $(x - y) = 30\%$ of $(x + y)$, then what percent of x is y ?

- Ans
- 1. 23%
 - 2. 15%
 - 3. 18%
 - 4. 20%

Question ID : 26433050224
Status : Answered
Chosen Option : 4

Q.6 The average of 12 consecutive odd numbers is 32. What is the difference between the largest number and the smallest number that are part of the set of 12 consecutive odd numbers mentioned above?

- Ans 1. 22
 2. 25
 3. 21
 4. 18

Question ID : 26433049979
Status : Answered
Chosen Option : 1

Q.7 The ratio of P and Q in an alloy is 3 : 7. If the alloy is made of only P and Q, how much amount of Q will be there in 1800 kg of that alloy?

- Ans 1. 1150 kg
 2. 1320 kg
 3. 1210 kg
 4. 1260 kg

Question ID : 26433050030
Status : Answered
Chosen Option : 4

Q.8 Sneha bought a fridge for ₹10,000. She spent ₹5,000 on its repairs, and then sold it for ₹16,000. Find the gain percentage.

- Ans 1. 20%
 2. 6.67%
 3. 55.48%
 4. 30%

Question ID : 26433049301
Status : Answered
Chosen Option : 2

Q.9 The average of seven numbers is 9. If each number is multiplied by a number P, then the average becomes 36. What is the value of P?

- Ans 1. 4
 2. 18
 3. 27
 4. 5

Question ID : 26433049627
Status : Answered
Chosen Option : 1

Q.10 What will come in place of the question mark (?) in the following equation?

$$62\% \text{ of } 2200 - 24\% \text{ of } (?) = 932$$

- Ans
- 1. 4320
 - 2. 2200
 - 3. 1364
 - 4. 1800

Question ID : 26433049449
Status : Answered
Chosen Option : 4

Q.11 What is the value of $56 - [36 - \{2 + 10 \times (6 - 3)\}]$?

- Ans
- 1. 26
 - 2. 44
 - 3. 50
 - 4. 52

Question ID : 26433049519
Status : Answered
Chosen Option : 4

Q.12

What is the value of $\frac{\frac{5}{6} - \frac{5}{11}}{\frac{3}{12} \times \frac{6}{5}}$ of $\left[\frac{3}{7} + \frac{8}{12} \div \frac{6}{24} + \frac{5}{7} \right]$?

- Ans
- 1. $\frac{-1891}{691}$
 - 2. $\frac{2075}{693}$
 - 3. $\frac{-1894}{891}$
 - 4. $\frac{-2075}{693}$

Question ID : 26433050039
Status : Answered
Chosen Option : 4

Q.13 The following table shows the number of trains that originate in the five different zones of the railway network of a country.

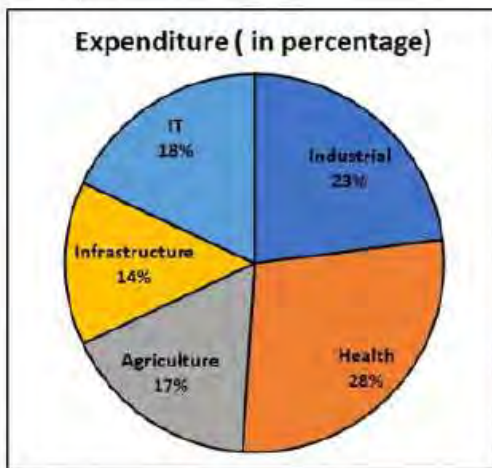
Zone	Trains
Z1	690
Z2	710
Z3	830
Z4	670
Z5	900

The total number of trains that originate in Z3 and Z4 taken together is what percentage of the total number of trains that originate in all the 5 zones taken together? [Give your answer correct to 2 decimal places.]

- Ans
- 1. 43.49%
 - 2. 31.23%
 - 3. 39.47%
 - 4. 45.61%

Question ID : 26433049690
Status : Answered
Chosen Option : 3

Q.14 The following pie chart shows the expenditure of a village in a given year in the different sectors of its economy.



If the amount spent on agriculture was ₹8.5 crore, then find the amount spent in the IT sector.

- Ans
- 1. ₹7.5 crore
 - 2. ₹10.5 crore
 - 3. ₹8 crore
 - 4. ₹9 crore

Question ID : 26433049539
Status : Answered
Chosen Option : 4

Q.15 A sum of ₹3,400 is divided among P and Q in such a way that $\frac{3}{4}$ of P's share is equal to $\frac{2}{3}$ of Q's share. What is the positive difference between the shares of P and Q?

- Ans
- 1. ₹500
 - 2. ₹400
 - 3. ₹200
 - 4. ₹300

Question ID : 26433049681
Status : Answered
Chosen Option : 3

Q.16 Profit earned on selling a book for ₹450 is the same as the loss incurred on selling it for ₹390. Find the cost price of the book.

- Ans
- 1. ₹380
 - 2. ₹460
 - 3. ₹360
 - 4. ₹420

Question ID : 26433049527
Status : Answered
Chosen Option : 4

Q.17 The length, the breadth, and the height of a closed cardboard box are in the ratio of 5 : 3 : 7, respectively. Find the length of this box, if its total surface area is 1278 cm².

- Ans
- 1. 20 cm
 - 2. 15 cm
 - 3. 25 cm
 - 4. 10 cm

Question ID : 26433049540
Status : Answered
Chosen Option : 2

Q.18 If a sum of money amounts to 6 times of itself in 25 years at simple interest, then what is the rate of interest per annum?

- Ans
- 1. 20%
 - 2. 22.5%
 - 3. 15%
 - 4. 25%

Question ID : 26433049982
Status : Answered
Chosen Option : 1

Q.19 Train A crosses train B completely in 90 seconds, with the trains running in opposite directions. The lengths of the trains A and B are 900 metres and 1800 metres, respectively. If the speed of train A is 45 km/h, then in how much time can train B cross a stationary pole?

- Ans
- 1. $\frac{830}{7}$ seconds
 - 2. $\frac{810}{7}$ seconds
 - 3. $\frac{720}{7}$ seconds
 - 4. $\frac{650}{7}$ seconds

Question ID : 26433049671
Status : Answered
Chosen Option : 3

Q.20 Find the ratio of the simple interest and the compound interest on ₹100 at 10% per annum for 2 years, if, when compounded, interest is compounded annually.

- Ans
- 1. 13 : 32
 - 2. 20 : 21
 - 3. 21 : 20
 - 4. 32 : 13

Question ID : 26433049307
Status : Answered
Chosen Option : 2

Q.21 If A and B together can do a piece of work in 5 days, and A alone can do the same work in 10 days, then in how many days can B alone do the piece of work?

- Ans
- 1. 10 days
 - 2. 11 days
 - 3. 12 days
 - 4. 13 days

Question ID : 26433049261
Status : Answered
Chosen Option : 1

Q.22 12 women can make 15 toys in 6 days if they work for 8 hours a day. If 20 toys are to be made by 10 women, working 12 hours a day, then how many days will be required?

- Ans
- 1. 6.8 days
 - 2. 7.8 days
 - 3. 6.4 days
 - 4. 5.4 days

Question ID : 26433049993
Status : Answered
Chosen Option : 3

Q.23 The volume of a cube is 3375 cm^3 . What is the length of the longest rod that can be placed in this cube?

- Ans
- 1. 15 cm
 - 2. $15\sqrt{3}$ cm
 - 3. 45 cm
 - 4. $12\sqrt{3}$ cm

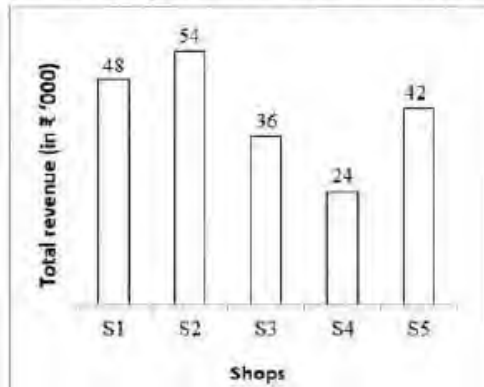
Question ID : 26433049635
Status : Answered
Chosen Option : 2

Q.24 A 600-metre-long train is running at a speed of 48 km/h. It crosses a platform completely in 4 minutes and 30 seconds. What is the length of the platform?

- Ans
- 1. 1800 m
 - 2. 3600 m
 - 3. 2400 m
 - 4. 3000 m

Question ID : 26433050020
Status : Answered
Chosen Option : 4

Q.25 The bar chart given below shows the total revenue (in ₹ '000) earned by 5 shops by selling steel bottles.



The price of each bottle is ₹ 600 in all the shops. How many bottles have been sold by S2 and S3 taken together?

- Ans
- 1. 120
 - 2. 135
 - 3. 150
 - 4. 165

Question ID : 26433050041
Status : Answered
Chosen Option : 3

Q.1 Which of the following is the fifth state of matter?

- Ans 1. Gas
 2. Liquid
 3. Plasma
 4. Bose-Einstein condensates

Question ID : 26433047073
Status : Answered
Chosen Option : 4

Q.2 Who has been appointed the first deputy managing director of the International Monetary Fund?

- Ans 1. Urjit Patel
 2. Gita Gopinath
 3. V Anantha Nageswaran
 4. Raghuram Rajan

Question ID : 26433047369
Status : Answered
Chosen Option : 1

Q.3 Which famous Kathak dancer was called to perform for Queen Elizabeth II coronation festivities, in 1953 and was awarded with Padma Bhushan in 1970?

- Ans 1. Sridevi
 2. Kumari Kamala
 3. Kanaka Raju
 4. Mallika Sarabhai

Question ID : 26433046937
Status : Answered
Chosen Option : 4

Q.4 Who is the author of the book 'Slumdog Millionaire'?

- Ans 1. APJ Abdul Kalam
 2. Vikas Swarup
 3. Kiran Desai
 4. R K Narayan

Question ID : 26433047385
Status : Answered
Chosen Option : 3

Q.5 Who was India's first Olympian who went on to star in Hollywood and Broadway?

- Ans 1. Milkha Singh
 2. Norman Pritchard
 3. Virat Kohli
 4. PT Usha

Question ID : **26433046865**
Status : **Answered**
Chosen Option : **2**

Q.6 The tax imposed on goods imported into and exported out of India is called _____.

- Ans 1. corporation tax
 2. excise tax
 3. capital gain tax
 4. custom duty

Question ID : **26433047392**
Status : **Answered**
Chosen Option : **4**

Q.7 Which of the following is the largest moon of Saturn?

- Ans 1. Europa
 2. Atlas
 3. Titan
 4. Carme

Question ID : **26433046701**
Status : **Answered**
Chosen Option : **3**

Q.8 Chennai Super Kings defeated which team to win IPL 2021?

- Ans 1. Mumbai Indians
 2. Sunrisers Hyderabad
 3. Kolkata Night Riders
 4. Delhi Capitals

Question ID : **26433047640**
Status : **Answered**
Chosen Option : **4**

Q.9 As of April 2022, who is the Chairman of Rajya Sabha?

- Ans 1. Shri Om Birla
 2. Shri M Venkaiah Naidu
 3. Shri Narendra Modi
 4. Shri Amit Shah

Question ID : **26433046939**
Status : **Answered**
Chosen Option : **1**

Q.10 The Rajya Sabha passed the National Institute of Pharmaceutical Education and Research (NIPER) Amendment Bill, 2021. The institutes mentioned in the bill are of national importance and fall under the aegis of the Department of Pharmaceutical, Ministry of _____.

- Ans**
- 1. Chemicals and Fertilisers
 - 2. Health and Family Welfare
 - 3. Consumer Affairs, Food and Public Distribution
 - 4. AYUSH

Question ID : 26433046693
Status : Not Answered
Chosen Option : --

Q.11 Which state has the highest reserves of manganese in India, as of April 2022?

- Ans**
- 1. Odisha
 - 2. Chhattisgarh
 - 3. Bihar
 - 4. Maharashtra

Question ID : 26433046928
Status : Answered
Chosen Option : 2

Q.12 Which of the following architectural styles had an entrance gateway called 'gopuram'?

- Ans**
- 1. Buddhist architecture
 - 2. Nagara architecture
 - 3. Dravidian architecture
 - 4. Indo-Islamic architecture

Question ID : 26433046697
Status : Not Answered
Chosen Option : --

Q.13 Citric acid is commonly found in _____.

- Ans**
- 1. onions
 - 2. apples
 - 3. oranges
 - 4. bananas

Question ID : 26433046925
Status : Answered
Chosen Option : 3

Q.14 Which of the following statements is correct?
I. Tipu Sultan is also known as the Tiger of Mysore.
II. Tipu Sultan ruled over Mysore from 1782 to 1799.

- Ans 1. Neither I nor II
 2. Only I
 3. Only II
 4. Both I and II

Question ID : 26433047434
Status : Not Answered
Chosen Option : --

Q.15 Which Indian musician was conferred with the Lifetime achievement Grammy Award?

- Ans 1. Sonu Nigam
 2. Pandit Ravi Shankar
 3. Zubin Mehta
 4. AR Rahman

Question ID : 26433047386
Status : Answered
Chosen Option : 4

Q.16 ग्रामीण क्षेत्रों में एक प्रकार की बेरोज़गारी को क्या कहा जाता है, जिसमें लोग रोज़गार वाले प्रतीत होते हैं लेकिन वास्तव में उनके पास रोज़गार नहीं होता?

- Ans 1. प्रच्छन्न बेरोज़गारी
 2. स्वेच्छिक बेरोज़गारी
 3. शिक्षित बेरोज़गारी
 4. मौसमी बेरोज़गारी

Question ID : 26433047479
Status : Answered
Chosen Option : 1

Q.17 Which freedom fighter of India composed the song, 'Saare Jahan Se Achha'?

- Ans 1. Jawaharlal Nehru
 2. Jyotiba Phule
 3. Mahatma Gandhi
 4. Muhammad Iqbal

Question ID : 26433046933
Status : Not Answered
Chosen Option : --

Q.18 Which of the following is an employment generation programme in India?

Ans 1. Swarna Jayanti Shahari Rozgar Yojana (SJSRY)

2. Pradhan Mantri Jan Dhan Yojana

3. Stand Up India Scheme

4. Pradhan Mantri Suraksha Bima Yojana

Question ID : 26433047029

Status : Answered

Chosen Option : 1

Q.19 The green plants in a terrestrial ecosystem capture about _____ of the energy of sunlight that falls on their leaves and convert it into food energy.

Ans 1. 5%

2. 14%

3. 8%

4. 1%

Question ID : 26433047425

Status : Answered

Chosen Option : 3

Q.20 Pulakeshin II was a ruler of which dynasty?

Ans 1. Chera

2. Chola

3. Chalukya

4. Pallava

Question ID : 26433047381

Status : Not Answered

Chosen Option : --

Q.21 Who among the following rulers of Mewar was defeated by Babur in the Battle of Khanwa (1527 AD)?

Ans 1. Rana Sanga

2. Ahmed Shah I

3. Rana Kumbha Karan

4. Alauddin Khalji

Question ID : 26433046707

Status : Answered

Chosen Option : 1

Q.22 Ugadi is an important festival of which state?

Ans 1. Karnataka

2. Haryana

3. Bihar

4. Goa

Question ID : **26433047071**
Status : **Answered**
Chosen Option : 1

Q.23 Which of the following was formed to maintain and develop road networks in Indian border areas for easy accessibility and connectivity?

Ans 1. Border Roadways Authority

2. Border Roads Organisation

3. Indian Border Roadways

4. Border Authority of India

Question ID : **26433046702**
Status : **Answered**
Chosen Option : 2

Q.24 Kalbelia is a tribal dance form of which Indian state?

Ans 1. Rajasthan

2. Kerala

3. Meghalaya

4. Goa

Question ID : **26433047420**
Status : **Answered**
Chosen Option : 1

Q.25 Which Article of the Constitution of India states the 'Right to freedom of speech and expression'?

Ans 1. Article 370

2. Article 200

3. Article 19

4. Article 377

Question ID : **26433046713**
Status : **Answered**
Chosen Option : 3