

Multi Tasking Non Technical Staff Havaladar CBIC and CBN Examination 2021

Roll Number	
Candidate Name	
Venue Name	
Exam Date	20/07/2022
Exam Time	1:00 PM - 2:30 PM
Subject	MTS Non technical and Havaladar Examination 2021

Section : General English

Q.1 Select the most appropriate meaning of the given idiom.

Give someone a taste of their own medicine

- Ans 1. Sell something back to someone
2. Mistreat someone in the same way they have treated others
3. Show someone their faults
4. Make fun of someone

Question ID : 26433051437
Status : Answered
Chosen Option : 2

Q.2 The following sentence has been split into four segments. Identify the segment that contains a grammatical error.

Uttar Pradesh / accounts for about 16 per cent / of the / country population.

- Ans 1. of the
2. country population
3. Uttar Pradesh
4. accounts for about 16 per cent

Question ID : 26433051444
Status : Answered
Chosen Option : 2

Q.3 Select the most appropriate option to fill in the blank.

We are _____ to the true legacy of humanism, and we must never forget this.

- Ans 1. Heirs
2. Hair
3. Hares
4. Here

Question ID : 26433051668
Status : Answered
Chosen Option : 1

Q.4 Parts of the following sentence have been given as options. One of them may contain an error. Select the part that contains the error from the given options. If you don't find any error, mark 'No error' as your answer.

You have to understand what normal political rhetoric looks like.

- Ans 1. understood what normal
 2. political rhetoric looks like
 3. No error
 4. You have to

Question ID : 26433051053
Status : Answered
Chosen Option : 1

Q.5 Select the most appropriate ANTONYM of the underlined word in the given sentence.

Community leaders were baffled by the sudden arrival of the President.

- Ans 1. flustered
 2. composed
 3. thwarted
 4. confused

Question ID : 26433050721
Status : Not Attempted and Marked For Review
Chosen Option : --

Q.6 Select the option that rectifies the incorrectly spelt words in the given sentence.

Our webcite is no longer avaiabale to the users.

- Ans 1. Our webcite is no longer available to the users.
 2. Our websight is no longer availbale to the users.
 3. Our website no longer available to the users.
 4. Our website is no longer availbale to the users.

Question ID : 26433050972
Status : Answered
Chosen Option : 3

Q.7 Select the option that will improve the underlined part of the given sentence. In case no improvement is needed, select 'No improvement required'.

I has no doubts that there is a lesson which stands to be learnt from Alice's misfortune.

- Ans 1. have no doubt that there is a lesson
 2. have had no doubts that their is a lesson
 3. am having no doubts that there are a lesson
 4. No improvement required

Question ID : 26433051646
Status : Answered
Chosen Option : 1

Q.8 Select the most appropriate meaning of the underlined idiom.

He was on cloud nine after passing the test.

- Ans 1. Very depressed
 2. Very happy
 3. Not educated
 4. Busy at work

Question ID : 26433050968
Status : Answered
Chosen Option : 2

Q.9 The following sentence has been divided into parts. One of them may contain an error. Select the part that contains the error from the given options. If you don't find any error, mark 'No error' as your answer.

Discrimination at the basis / of gender is not / acceptable in this office.

- Ans 1. of gender is not
 2. acceptable in this office
 3. No error
 4. Discrimination at the basis

Question ID : 26433050950
Status : Answered
Chosen Option : 4

Q.10 Select the option that will improve the underlined part of the sentence. In case no improvement is needed, select 'No improvement required'.

Viren examined careful all the possibilities of data theft.

- Ans 1. carefully examined
 2. No improvement required
 3. examine careful
 4. careful examined

Question ID : 26433050934
Status : Answered
Chosen Option : 1

Q.11 Select the most appropriate option to fill in the blank.

The RTE Act bears many similarities to the US's No Child Left Behind Act, _____ school accountability, assessment standards and teacher training.

- Ans 1. startling
 2. responding
 3. including
 4. concluding

Question ID : 26433051233
Status : Answered
Chosen Option : 3

Q.12 Select the most appropriate option to fill in the blank.

I think it is quite _____ that your parents still hold hands.

- Ans 1. adorable
 2. adorably
 3. adore
 4. adores

Question ID : 26433051372
Status : Answered
Chosen Option : 1

Q.13 Select the most appropriate synonym of the given word.

Slim

- Ans 1. Flashy
 2. Rosy
 3. Skinny
 4. Moody

Question ID : 26433051069
Status : Answered
Chosen Option : 3

Q.14 Select the option that will improve the underlined part of the sentence. In case no improvement is needed, select 'No improvement required'.

You are not supposed to touch these books.

- Ans 1. off touching these
 2. No improvement required
 3. on touched that
 4. to touch this

Question ID : 26433050536
Status : Answered
Chosen Option : 2

Q.15 Select the most appropriate synonym of the given word.

Sporadic

- Ans 1. Infrequent
 2. Ample
 3. Methodical
 4. Regular

Question ID : 26433051225
Status : Not Answered
Chosen Option : --

Q.16 Select the option that can be used as a one-word substitute for the given group of words.

A game in which no one wins

- Ans 1. Hung
 2. Lapse
 3. Null
 4. Draw

Question ID : 26433050996
Status : Answered
Chosen Option : 4

Q.17 Select the most appropriate ANTONYM of the given word.

Evident

- Ans 1. Obvious
 2. Distinct
 3. Hidden
 4. Apparent

Question ID : 26433050720
Status : Answered
Chosen Option : 3

Q.18 Select the option that will improve the underlined part of the given sentence. In case no improvement is needed, select 'No improvement required'.

The district woken up to a thick blanket of snow this morning as the winter entered its most bitter phase.

- Ans 1. wake up to a
 2. No improvement required
 3. awaken up to an
 4. woke up to a

Question ID : 26433051499
Status : Answered
Chosen Option : 4

Q.19 Select the correctly spelt word.

- Ans 1. Beneficial
 2. Benifical
 3. Beneifical
 4. Benificail

Question ID : 26433050728
Status : Answered
Chosen Option : 1

Q.20 Select the option that will improve the underlined part of the given sentence. In case no improvement is needed, select 'No improvement required'.

The community members as well as teachers are presently into the bus station.

- Ans
- 1. are presently on
 - 2. are present at
 - 3. No improvement required
 - 4. is present at

Question ID : 26433050719

Status : Answered

Chosen Option : 2

Comprehension:

In the following passage, some words have been deleted. Read the passage carefully and select the most appropriate option to fill in each blank.

The Crosses, the village (1) _____ Vasili Andreevich lived, consisted of six houses. As soon as they had passed the blacksmith's hut, (2) _____ last in the village, they realised that the wind was much stronger than they had thought. The road could hardly be seen. The tracks left by the sledge-runners were immediately (3) _____ by snow and the road was only (4) _____ by the fact that it was higher than the rest of the ground. There was a swirl of snow over the fields and the line where sky and earth met could not be (5) _____.

SubQuestion No : 21

Q.21 Select the most appropriate option to fill in blank number 1.

- Ans
- 1. when
 - 2. we're
 - 3. where
 - 4. what

Question ID : 26433051218

Status : Answered

Chosen Option : 3

Comprehension:

In the following passage, some words have been deleted. Read the passage carefully and select the most appropriate option to fill in each blank.

The Crosses, the village (1) _____ Vasili Andreevich lived, consisted of six houses. As soon as they had passed the blacksmith's hut, (2) _____ last in the village, they realised that the wind was much stronger than they had thought. The road could hardly be seen. The tracks left by the sledge-runners were immediately (3) _____ by snow and the road was only (4) _____ by the fact that it was higher than the rest of the ground. There was a swirl of snow over the fields and the line where sky and earth met could not be (5) _____.

SubQuestion No : 22

Q.22 Select the most appropriate option to fill in blank number 2.

- Ans
- 1. an
 - 2. the
 - 3. one
 - 4. a

Question ID : 26433051219

Status : Answered

Chosen Option : 2

Comprehension:

In the following passage, some words have been deleted. Read the passage carefully and select the most appropriate option to fill in each blank.

The Crosses, the village (1) _____ Vasili Andreevich lived, consisted of six houses. As soon as they had passed the blacksmith's hut, (2) _____ last in the village, they realised that the wind was much stronger than they had thought. The road could hardly be seen. The tracks left by the sledge-runners were immediately (3) _____ by snow and the road was only (4) _____ by the fact that it was higher than the rest of the ground. There was a swirl of snow over the fields and the line where sky and earth met could not be (5) _____.

SubQuestion No : 23

Q.23 Select the most appropriate option to fill in blank number 3.

- Ans 1. exposed
 2. highlighted
 3. covered
 4. made

Question ID : 26433051220

Status : Answered

Chosen Option : 3

Comprehension:

In the following passage, some words have been deleted. Read the passage carefully and select the most appropriate option to fill in each blank.

The Crosses, the village (1) _____ Vasili Andreevich lived, consisted of six houses. As soon as they had passed the blacksmith's hut, (2) _____ last in the village, they realised that the wind was much stronger than they had thought. The road could hardly be seen. The tracks left by the sledge-runners were immediately (3) _____ by snow and the road was only (4) _____ by the fact that it was higher than the rest of the ground. There was a swirl of snow over the fields and the line where sky and earth met could not be (5) _____.

SubQuestion No : 24

Q.24 Select the most appropriate option to fill in blank number 4.

- Ans 1. anguished
 2. distinguished
 3. crushed
 4. extinguished

Question ID : 26433051221

Status : Answered

Chosen Option : 2

Comprehension:

In the following passage, some words have been deleted. Read the passage carefully and select the most appropriate option to fill in each blank.

The Crosses, the village (1) _____ Vasili Andreevich lived, consisted of six houses. As soon as they had passed the blacksmith's hut, (2) _____ last in the village, they realised that the wind was much stronger than they had thought. The road could hardly be seen. The tracks left by the sledge-runners were immediately (3) _____ by snow and the road was only (4) _____ by the fact that it was higher than the rest of the ground. There was a swirl of snow over the fields and the line where sky and earth met could not be (5) _____.

SubQuestion No : 25

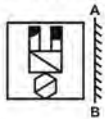
Q.25 Select the most appropriate option to fill in blank number 5.

- Ans 1. seen
 2. seeing
 3. saw
 4. see

Question ID : 26433051222
Status : Answered
Chosen Option : 1

Section : **General Intelligence and Reasoning**

Q.1 Select the correct mirror image of the given figure when the mirror is placed at the right side.

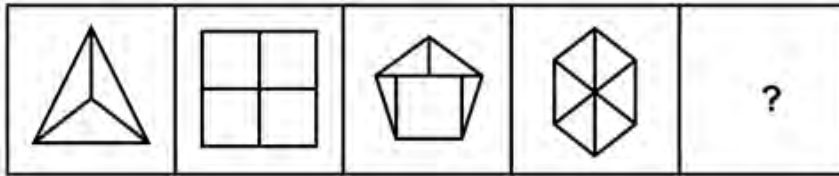


Ans

- 1.
- 2.
- 3.
- 4.

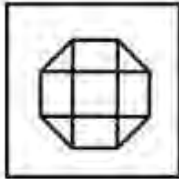
Question ID : 26433048636
Status : Answered
Chosen Option : 4

Q.2 Select the figure that will come next in the following figure series.

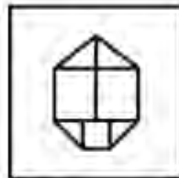


Ans

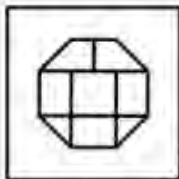
1.



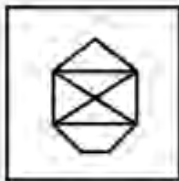
2.



3.



4.



Question ID : 26433048112

Status : Answered

Chosen Option : 2

Q.3 The scores of seven batsman B1, B2, B3, B4, B5, B6 and B7 are compared. The score of B1 is greater than B7 and B3. The score of B6 is neither more nor less than the score of B4 but more than B1. B5 scored less than only one batsman. The score of B7 is not the least score.

How many batsman scored more than B4?

Ans 1.3

2.1

3.2

4.4

Question ID : 26433048832

Status : Answered

Chosen Option : 3

Q.4 Read the given statements and conclusions carefully. Assuming that the information given in the statements is true, even if it appears to be at variance with commonly known facts, decide which of the given conclusions logically follow(s) from the statements.

Statements:

I. All M are Q.

II. No L is Q.

Conclusions:

I. No M is L.

II. Some L are not M.

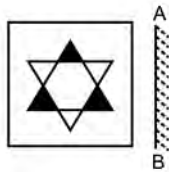
- Ans**
- 1. Neither conclusion I nor II follows
 - 2. Both conclusions I and II follow
 - 3. Only conclusion II follows
 - 4. Only conclusion I follows

Question ID : 26433048603

Status : Answered

Chosen Option : 4

Q.5 Select the correct mirror image of the given figure when the mirror is placed at the right side.



Ans

- 1.
- 2.
- 3.
- 4.

Question ID : 26433048040

Status : Answered

Chosen Option : 3

Q.6 Select the option that will replace the question mark (?) in the given series.

45, 35, 27, 21, 17, ?

- Ans 1. 14
 2. 13
 3. 15
 4. 16

Question ID : 26433048332
Status : Answered
Chosen Option : 3

Q.7 In a certain code language, 'Ashok is big' is written as 'pr 6 8', 'Huge people are strong' is written as 'lm pt 7 @' and 'Is big are' is written as 'pr pt 8'. What can be the possible code for 'Ashok people' in that code language?

- Ans 1. 6 pt
 2. 8 7
 3. 6 lm
 4. lm @

Question ID : 26433048747
Status : Answered
Chosen Option : 3

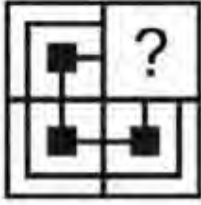
Q.8 Select the option that is related to the fifth word in the same way as the second word is related to the first word and the fourth word is related to the third word.

Cricket : Bat :: Hockey : Stick :: Rugby : ?

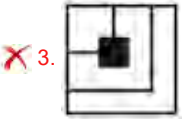
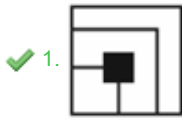
- Ans 1. Ball
 2. Goal
 3. Field
 4. Player

Question ID : 26433048144
Status : Answered
Chosen Option : 1

Q.9 Select the figure from the options that can replace the question mark (?) and complete the pattern (rotation is NOT allowed).



Ans



Question ID : 26433048913
Status : Answered
Chosen Option : 1

Q.10 Select the option that is related to the fifth number in the same way as the second number is related to the first number and fourth number is related to third number.

7 : 2401 :: 3 : 441 :: 5 : ?

- Ans
- ✗ 1. 685
 - ✗ 2. 880
 - ✗ 3. 1805
 - ✓ 4. 1225

Question ID : 26433048108
Status : Answered
Chosen Option : 4

Q.11 In a certain code language, 'nu vu du' is written as 'Please ask Hamza', 'hu du ru' is written as 'Give water please', and 'tu vu ru' is written as 'Give Hamza Book'. What is the code for the word 'Book' in that language?

- Ans
- ✗ 1. ru
 - ✗ 2. vu
 - ✓ 3. tu
 - ✗ 4. nu

Question ID : 26433048147
Status : Answered
Chosen Option : 3

Q.12 Select the option that is related to the third letter-cluster in the same way as the second letter-cluster is related to the first letter-cluster.

RBS : OXN :: OXA : ?

- Ans
- 1. LTW
 - 2. LUW
 - 3. LTV
 - 4. LUV

Question ID : 26433048874
Status : Answered
Chosen Option : 3

Q.13 Select the option in which the given figure is embedded.

(Rotation of figure not allowed.)



Ans

- 1.
- 2.
- 3.
- 4.

Question ID : 26433048610
Status : Answered
Chosen Option : 1

Q.14 Select the option in which the numbers are related in the same way as are the numbers in the given set.

(131, 142, 153)

- Ans
- 1. (161, 172, 195)
 - 2. (119, 130, 141)
 - 3. (149, 160, 193)
 - 4. (127, 149, 160)

Question ID : 26433048592
Status : Answered
Chosen Option : 2

Q.15 After interchanging the given two signs, what will be the value of the given expression?

÷ and ×
 $5 + 10 \div 8 \times 2 - 20$

Ans 1. 25

2. 30

3. 20

4. 35

Question ID : 26433048814

Status : Answered

Chosen Option : 1

Q.16 Select the letter-cluster from among the given options that can replace the question mark (?) in the following series.

ACL, DFO, GIR, JLU, MOX, ?

Ans 1. PRA

2. NPZ

3. OQZ

4. ARP

Question ID : 26433048439

Status : Answered

Chosen Option : 1

Q.17 In a certain code language, 'ADULT' is coded as '53' and 'LACK' is coded as '23'. How will 'HEAVEN' be coded in that language?

Ans 1. 58

2. 55

3. 49

4. 61

Question ID : 26433047974

Status : Not Attempted and
Marked For Review

Chosen Option : --

Q.18 Read the given statements and conclusions carefully. Assuming that the information given in the statements is true, even if it appears to be at variance with commonly known facts, decide which of the given conclusions logically follow(s) from the statements.

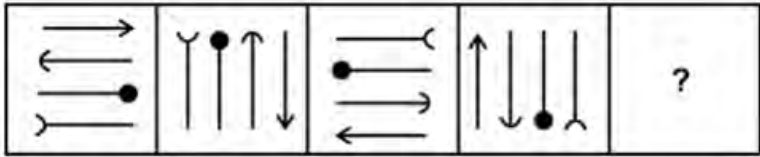
Statements:
 All scales are pencils.
 Some pencils are erasers.

Conclusions:
 I: Some scales are erasers.
 II: Some pencils are scales.

- Ans**
- 1. Both I and II follow
 - 2. Only II follows
 - 3. Only I follows
 - 4. Neither I nor II follows

Question ID : 26433048105
 Status : Answered
 Chosen Option : 2

Q.19 Select the figure from among the given options that can replace the question mark (?) in the following series.



Ans

- 1.
- 2.
- 3.
- 4.

Question ID : 26433048338
 Status : Answered
 Chosen Option : 3

Q.20 Which two numbers should be interchanged to make the given equation correct?

$$81 + 31 \div 9 - 7 = 33$$

- Ans
- 1. 9 and 7
 - 2. 31 and 9
 - 3. 31 and 81
 - 4. 81 and 7

Question ID : 26433048457
Status : Answered
Chosen Option : 3

Q.21 Select the option that is related to the fifth term in the same way as the second term is related to the first term and the fourth term is related to the third term.

SIDE22 : UKFG19 :: SETS15 : UGVU12 :: MINE11 : ?

- Ans
- 1. NJOF12
 - 2. OKPG8
 - 3. NJOF9
 - 4. OKPG14

Question ID : 26433048095
Status : Answered
Chosen Option : 2

Q.22 In a certain code language, 'sand is hot' is written as '6 8 9' and 'grains are white sand' is written as '4 3 9 2'. What is the code for 'hot' in that code language?

- Ans
- 1. 4
 - 2. 6 or 8
 - 3. 9
 - 4. 3

Question ID : 26433048870
Status : Answered
Chosen Option : 2

Q.23 Seven girls V, K, L, P, A, C and N are sitting in a row facing the South (not necessarily in the same order). L is to the immediate left of P. K is at one of the ends. A is the immediate neighbour of K. Only N is between A and C. Only P is between L and C. Which of the following statements is/are correct?
I. P is third to the left of A.
II. N is to the immediate right of C.

- Ans
- 1. Neither I nor II
 - 2. Only I
 - 3. Both I and II
 - 4. Only II

Question ID : 26433048831
Status : Answered
Chosen Option : 3

Q.24 Select the number from the given options that can replace the question mark (?) in the following series.

482, 239, 158, 131, 122, ?

- Ans 1. 121
 2. 119
 3. 117
 4. 113

Question ID : 26433048819
Status : Answered
Chosen Option : 2

Q.25 Six friends Amit, Bhuvan, Chand, David, Emily and Fedrick are sitting around a circular table facing towards the centre (not necessarily in the same order). Amit sits third to the left of David. David sits to the immediate right of Bhuvan. Bhuvan sits second to the left of Emily. Chand sits second to the right of Fedrick. Who sits second to the right of Amit?

- Ans 1. Chand
 2. Bhuvan
 3. Emily
 4. Fedrick

Question ID : 26433048326
Status : Answered
Chosen Option : 2

Section : Numerical Aptitude

Q.1 The selling price of a plate is 140% of its cost price. What will be the profit percentage?

- Ans 1. 35%
 2. 28.57%
 3. 40%
 4. 25%

Question ID : 26433049922
Status : Answered
Chosen Option : 3

Q.2 A work can be completed by N men in 15 days. 5 men leave the work after 3 days. The remaining work was completed in 18 days. What is the value of N?

- Ans 1. 18
 2. 21
 3. 15
 4. 12

Question ID : 26433049944
Status : Answered
Chosen Option : 3

Q.3 The following table shows the marks obtained by Anoop in his final examination of class X in five different subjects.

Subject	Maximum marks	Marks obtained
Hindi	100	74
English	100	84
Math	150	124
Science	50	36.4
Social Science	50	47

What is the percentage of marks obtained by Anoop in all the five subjects put together?

- Ans
- 1. 75.8%
 - 2. 72.6%
 - 3. 81.2%
 - 4. 82.1%

Question ID : 26433050162
Status : Answered
Chosen Option : 3

Q.4 On a certain sum, the interest is compounded annually. If the compound interest for the second year is ₹400 and the compound interest for the fourth year is 576, then what is the rate of interest per annum?

- Ans
- 1. 20%
 - 2. 25%
 - 3. 15%
 - 4. 44%

Question ID : 26433049933
Status : Answered
Chosen Option : 4

Q.5 What is the value of $(1 \div 2)$ of $10 + (1 \div 4)$ of 12 ?

- Ans
- 1. -11
 - 2. 11
 - 3. -3
 - 4. 8


Question ID : 26433049444
Status : Answered
Chosen Option : 4

Q.6 Out of a total of 9 books arranged in a particular order, the mean of the number of pages in the first 5 books is 430, the mean of the number of pages in the last 5 books is 380 and the mean of the number of pages in all the 9 books is 400. Find the number of pages in the fifth book.

- Ans 1. 450
 2. 420
 3. 430
 4. 440

Question ID : 26433050298
Status : Answered
Chosen Option : 1

Q.7 The following bar chart shows the marks obtained (out of 100) by a student in 6 different subjects in an examination.



The total marks obtained by the student in S2 and S4 taken together is what percentage more than the marks obtained by the student in S5? [Give your answer correct to 2 decimal places.]

- Ans 1. 73.34%
 2. 71.11%
 3. 76.47%
 4. 79.32%

Question ID : 26433049691
Status : Answered
Chosen Option : 3

Q.8 The speed of a boat going downstream is 22 km/h. The speed of the stream is 1 km/h. How much distance in total will the boat cover going 3 hours downstream and 2 hours upstream?

- Ans 1. 112 km
 2. 94 km
 3. 106 km
 4. 102 km

Question ID : 26433049670
Status : Answered
Chosen Option : 3

Q.9 S alone can do a piece of work in 14 days. T alone can do the same work in 21 days. U alone can do the same work in 28 days. Working together, in how many days will they complete the work?

- Ans**
- 1. $\frac{84}{13}$ days
 - 2. $\frac{77}{13}$ days
 - 3. $\frac{71}{13}$ days
 - 4. $\frac{87}{13}$ days

Question ID : 26433049568

Status : Answered

Chosen Option : 1

Q.10 If $A = \frac{2}{3} \div \frac{4}{9}$, $B = \frac{6}{11} \times \frac{33}{12}$ and $C = \frac{1}{3} \times \frac{9}{2}$, then what is the value of $A \times B - C$?

- Ans**
- 1. $\frac{3}{8}$
 - 2. $\frac{3}{2}$
 - 3. $\frac{3}{4}$
 - 4. $\frac{3}{16}$

Question ID : 26433049689

Status : Answered

Chosen Option : 3

Q.11 The marked price of a pen is 25% more than its cost price. The pen is sold for ₹220 after a discount of ₹30. What is the profit percentage?

- Ans**
- 1. 10%
 - 2. 15%
 - 3. 20%
 - 4. 17.5%

Question ID : 26433049774

Status : Answered

Chosen Option : 1

Q.12 The monthly income of a person is ₹15,000. He saves 20% of his income. If his income increases by 10% and his nominal savings remains the same, then what will be his new expenditure?

- Ans
- 1. ₹13,000
 - 2. ₹14,500
 - 3. ₹13,500
 - 4. ₹14,000

Question ID : 26433049676
Status : Answered
Chosen Option : 3

Q.13 The curved surface area of a cylinder, whose height is 10 cm, is 1320 cm^2 . What is the volume of this cylinder? [Use $\pi = \frac{22}{7}$]

- Ans
- 1. 1388 m^3
 - 2. 0.001368 m^3
 - 3. 0.1386 m^3
 - 4. 0.01386 m^3

Question ID : 26433049466
Status : Answered
Chosen Option : 4

Q.14 The average age of 5 children is 10 years. If two more children of ages 11 years and 16 years join, then what will be the new average age?

- Ans
- 1. 11 years
 - 2. 10 years
 - 3. 13 years
 - 4. 12 years

Question ID : 26433049446
Status : Answered
Chosen Option : 1

Q.15 If K_1 and K_2 are two distinct prime numbers, then what is the product of the highest common factor and the least common multiple of K_1 and K_2 ?

- Ans
- 1. 1
 - 2. $\frac{K_1}{K_2}$
 - 3. $K_1 + K_2$
 - 4. $K_1 \times K_2$

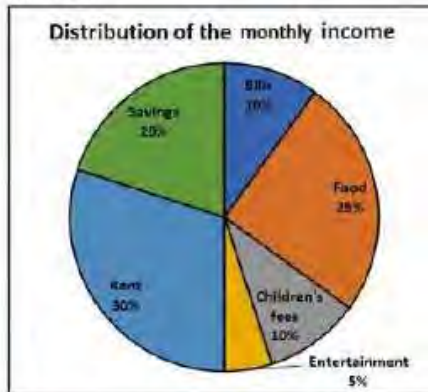
Question ID : 26433049937
Status : Answered
Chosen Option : 4

Q.16 On a tree, there are some parrots and some pigeons in the ratio of 7 : 9, respectively. After an hour, 8 parrots fly away, and 6 pigeons and 10 sparrows come and sit on the tree. The ratio of the parrots and the pigeons on the tree now is 1 : 4. What is the ratio of the parrots and the sparrows that are now on the tree?

- Ans
- 1. 1 : 1
 - 2. 1 : 2
 - 3. 3 : 5
 - 4. 4 : 5

Question ID : 26433050155
Status : Answered
Chosen Option : 3

Q.17 The following pie-chart shows the distribution of the monthly income of a man. The monthly income of the man is ₹84,000.



How much does he spend on children's fees in a year?

- Ans
- 1. ₹80,500
 - 2. ₹98,000
 - 3. ₹1,01,800
 - 4. ₹1,00,800

Question ID : 26433049464
Status : Answered
Chosen Option : 4

Q.18 A boat takes a total of 2 hours to cover 9 km downstream and return, given that the speed of the stream is 6 km/h. What is the speed of the boat in still water?

- Ans
- 1. 15 km/h
 - 2. 8 km/h
 - 3. 16 km/h
 - 4. 12 km/h

Question ID : 26433050159
Status : Answered
Chosen Option : 4

Q.19 If the area of a parallelogram is 508 m^2 and its base is 40 m, then what is the corresponding height of the parallelogram?

- Ans
- 1. 10.8 m
 - 2. 18.4 m
 - 3. 12.7 m
 - 4. 22.2 m

Question ID : 26433049465
Status : Answered
Chosen Option : 3

Q.20 Mr. Stark gave 30% of the money he had to Bruce. He also gave 30% of the remaining amount to each of Natasha, Captain and Vision. Half of the remaining amount he spent on miscellaneous items, and the remaining amount of ₹14,000 he deposited in Marvel's Fund. How much money did Mr. Stark initially have?

- Ans
- 1. ₹3,90,000
 - 2. ₹4,00,000
 - 3. ₹3,70,000
 - 4. ₹3,00,000

Question ID : 26433050124
Status : Answered
Chosen Option : 2

Q.21 The average of 8 consecutive integers is $\frac{27}{2}$. What is the average of the largest four of these integers?

- Ans
- 1. 16.5
 - 2. 15
 - 3. 14.5
 - 4. 15.5

Question ID : 26433049779
Status : Answered
Chosen Option : 4

Q.22 A sum, when invested for 2 years at the rate of 10% per annum at simple interest, amounts to ₹4,800 on maturity. What is the sum invested?

- Ans
- 1. ₹3,600
 - 2. ₹4,000
 - 3. ₹3,500
 - 4. ₹4,200

Question ID : 26433049782
Status : Answered
Chosen Option : 2

Q.23 If $A : B = 3 : 4$ and $B : C = 1 : 5$, then what is $A : C$?

- Ans 1. $3 : 20$
 2. $3 : 4$
 3. $1 : 4$
 4. $3 : 5$

Question ID : 26433049680
Status : Answered
Chosen Option : 1

Q.24 Kisna buys a cow for ₹15,000. After one year, he sells it for ₹18,500. After one year, again he buys the same cow at ₹19,000 and sells it for ₹22,300. What is the overall profit percentage of Kisna?

- Ans 1. 18%
 2. 10%
 3. 20%
 4. 15%

Question ID : 26433049452
Status : Answered
Chosen Option : 3

Q.25 A large solid cube is melted and cast into 'N' small solid spheres, each of radius 3 cm, and 'N + 2' small solid cuboids, each of dimensions 4 cm × 4 cm × 6.5 cm. If the length of each side of the large solid cube is 12 cm, then find the value of 'N'. [Use $\pi = \frac{22}{7}$]

- Ans 1. 8
 2. 5
 3. 7
 4. 6

Question ID : 26433050317
Status : Answered
Chosen Option : 3

Section : General Awareness

Q.1 Which of the following is an example of Phylum Mammalia of Animal Kingdom?

- Ans 1. Hen
 2. Crocodile
 3. Pigeon
 4. Rat

Question ID : 26433046850
Status : Answered
Chosen Option : 4

Q.2 As per the 2011 Census, arrange the following languages in descending order of Speakers strength: Marathi, Hindi, Maithili.

- Ans 1. Marathi, Hindi, Maithili
 2. Marathi, Maithili, Hindi
 3. Hindi, Maithili, Marathi
 4. Hindi, Marathi, Maithili

Question ID : 26433046854
Status : Answered
Chosen Option : 4

Q.3 Which Indian actress was also one of the dancer to be honoured with the 'Padma Shri' award in 1968?

- Ans 1. Hema Malini
 2. Sridevi
 3. Vyjayanthimala
 4. Madhubala

Question ID : 26433046862
Status : Not Answered
Chosen Option : --

Q.4 In the northern and north-western part of India, _____ is the main food crop.

- Ans 1. Wheat
 2. Rice
 3. Maize
 4. millet

Question ID : 26433047327
Status : Answered
Chosen Option : 1

Q.5 Lavani is the dance form of which state?

- Ans 1. Gujarat
 2. Maharashtra
 3. Rajasthan
 4. Karnataka

Question ID : 26433047070
Status : Answered
Chosen Option : 2

Q.6 Which team won the Indian Super League 2021-22?

- Ans 1. Jamshedpur FC
 2. ATK Mohun Bagan
 3. Hyderabad FC
 4. Kerala Blasters FC

Question ID : 26433047540
Status : Answered
Chosen Option : 4

Q.7 The terminology 'direct free kick' is associated with which sport?

- Ans 1. Cricket
 2. Badminton
 3. Football
 4. Hockey

Question ID : 26433047091
Status : Answered
Chosen Option : 3

Q.8 Who among the following was conferred the Dadasaheb Phalke Award at the 67th National Film Awards ceremony?

- Ans 1. Sanjay Dutt
 2. S Shankar
 3. Rajinikanth
 4. Amitabh Bachchan

Question ID : 26433047169
Status : Answered
Chosen Option : 3

Q.9 In which of the following states of India is Gangaur festival celebrated?

- Ans 1. Manipur
 2. Rajasthan
 3. Karnataka
 4. Kerala

Question ID : 26433047546
Status : Answered
Chosen Option : 2

Q.10 In November 2021, 'the Duare Ration' scheme was launched in _____.

- Ans 1. Kerala
 2. Gujarat
 3. West Bengal
 4. Uttarakhand

Question ID : 26433047318
Status : Not Answered
Chosen Option : --

Q.11 The Mahabodhi Temple is an ancient Buddhist temple. It is situated in which state of India?

- Ans**
- 1. Rajasthan
 - 2. Uttar Pradesh
 - 3. Kerala
 - 4. Bihar

Question ID : **26433047322**
Status : **Answered**
Chosen Option : **4**

Q.12 Genghis Khan died in which year?

- Ans**
- 1. 1227
 - 2. 1234
 - 3. 1222
 - 4. 1220

Question ID : **26433047332**
Status : **Not Answered**
Chosen Option : **--**

Q.13 Who among the following is the author of the book 'Selection Day'?

- Ans**
- 1. Kiran Desai
 - 2. Vikram Seth
 - 3. Chetan Bhagat
 - 4. Aravind Adiga

Question ID : **26433047185**
Status : **Not Answered**
Chosen Option : **--**

Q.14 Who among the following freedom fighters was the first woman to become the Governor of Uttar Pradesh State?

- Ans**
- 1. Sarojini Naidu
 - 2. Raikumari Amrit Kaur
 - 3. Sheila Dikshit
 - 4. Kasturba Gandhi

Question ID : **26433046858**
Status : **Answered**
Chosen Option : **1**

Q.15 The rhythmic rise and fall of ocean water twice in a day is called a _____.

- Ans
- 1. fall
 - 2. tide
 - 3. wave
 - 4. current

Question ID : 26433047326
Status : Answered
Chosen Option : 2

Q.16 What is the draft of legislative proposal that needs to be passed in both houses of Parliament of India to become an Act called?

- Ans
- 1. Article
 - 2. Amendment
 - 3. Bill
 - 4. Form

Question ID : 26433046864
Status : Answered
Chosen Option : 3

Q.17 _____ is the market value of all final goods and services produced within a domestic territory of a country measured in a year.

- Ans
- 1. Gross margin
 - 2. Gross Domestic Product (GDP)
 - 3. Net National Product (NNP)
 - 4. Gross National Product (GNP)

Question ID : 26433047192
Status : Not Answered
Chosen Option : --

Q.18 Which of the following is a biotic component of ecology?

- Ans
- 1. Sunlight
 - 2. Carbonic substance
 - 3. Humidity
 - 4. Fungi

Question ID : 26433047074
Status : Answered
Chosen Option : 4

Q.19

With which of the following musical instruments was Ustad Alla Rakha primarily associated?

- Ans
- 1. Sitar
 - 2. Sarod
 - 3. Tabla
 - 4. Flute

Question ID : 26433047186
Status : Answered
Chosen Option : 3

Q.20 What is Brahmaputra River called in Arunachal Pradesh?

- Ans
- 1. Tsangpo
 - 2. Purab Ganga
 - 3. Dihang
 - 4. Mandakini

Question ID : 26433046853
Status : Answered
Chosen Option : 3

Q.21 Which feature of the Indian Constitution refers to the existence of more than one level of government in the country?

- Ans
- 1. Radicalism
 - 2. Federalism
 - 3. Liberalism
 - 4. Secularism

Question ID : 26433047338
Status : Answered
Chosen Option : 2

Q.22 Which of the following rulers did NOT belong to Maurya dynasty?

- Ans
- 1. Bindusara
 - 2. Ashoka
 - 3. Chandragupta
 - 4. Bimbisara

Question ID : 26433047181
Status : Answered
Chosen Option : 4

Q.23 Who among the following led of the famous Indigo Revolt in Bengal?

- Ans 1. Mahatma Gandhi
 2. Bishnu Charan Biswas and Digambar Biswas
 3. Vasudev Balwant Phadke
 4. Madari Pasi

Question ID : **26433047084**
Status : **Not Answered**
Chosen Option : --

Q.24 With respect to occupation, secondary activities include _____.

- Ans 1. mining
 2. administration
 3. construction work
 4. fishing

Question ID : **26433047705**
Status : **Answered**
Chosen Option : 3

Q.25 Which of the following is an example of metalloid?

- Ans 1. Indium
 2. Gallium
 3. Boron
 4. Aluminium

Question ID : **26433047548**
Status : **Answered**
Chosen Option : 2