

SSC MTS 2023 Tier 1 Sept 14 Shift 3 Question Paper with Answers

Roll Number	
Candidate Name	
Exam Date	14/09/2023
Exam Time	4:00 PM - 6:00 PM
Subject	MTS Non Tech Havaladar CBIC and CBN Examination 2023

Section : Numerical and Mathematical Ability

Q.1 A square and a rhombus have the same base and the rhombus is inclined at 45° , then what will be the ratio of the area of the square to the area of the rhombus?

- Ans
- 1. $\sqrt{3}:1$
 - 2. $1:\sqrt{3}$
 - 3. $\sqrt{2}:\sqrt{3}$
 - 4. $\sqrt{2}:1$

Question ID : 264330154105

Option 1 ID : 264330603883

Option 2 ID : 264330603884

Option 3 ID : 264330603885

Option 4 ID : 264330603886

Status : Not Answered

Chosen Option : --

Q.2 If $A : B : C = 3 : 4 : 5$, then $\sqrt{A^2 + B^2} : \sqrt{C^2 - B^2}$ is:

- Ans
- 1. 3 : 2
 - 2. 4 : 5
 - 3. 5 : 3
 - 4. 3 : 5

Question ID : 264330154084

Option 1 ID : 264330603800

Option 2 ID : 264330603802

Option 3 ID : 264330603801

Option 4 ID : 264330603799

Status : Answered

Chosen Option : 3

Q.3 The ratio of two numbers is 3 : 4. If the sum of these two numbers is 70, then what is their LCM?

- Ans 1. 120
 2. 96
 3. 108
 4. 84

Question ID : 264330155689
Option 1 ID : 264330610162
Option 2 ID : 264330610160
Option 3 ID : 264330610161
Option 4 ID : 264330610159
Status : Answered
Chosen Option : 1

Q.4 What is the amount (in ₹) due on a sum of money ₹12,500 after one year if the compound interest is payable half-yearly at 12% per annum?

- Ans 1. 14,450
 2. 14,540
 3. 15,440
 4. 14,045

Question ID : 264330153774
Option 1 ID : 264330602559
Option 2 ID : 264330602562
Option 3 ID : 264330602560
Option 4 ID : 264330602561
Status : Answered
Chosen Option : 4

Q.5 A sum at simple interest of 5.5% per annum amounts to ₹7,503 in 4 years. Find the sum (in ₹).

- Ans 1. 5,350
 2. 6,150
 3. 5,980
 4. 5,520

Question ID : 264330155745
Option 1 ID : 264330610383
Option 2 ID : 264330610386
Option 3 ID : 264330610385
Option 4 ID : 264330610384
Status : Not Answered
Chosen Option : --

Q.6 In what ratio should rice worth ₹140 per kg and ₹90 per kg be mixed so that a mixture of two qualities of rice may become worth ₹110 per kg?

- Ans 1. 2 : 3
 2. 1 : 3
 3. 3 : 2
 4. 1 : 2

Question ID : 264330154120
Option 1 ID : 264330603944
Option 2 ID : 264330603946
Option 3 ID : 264330603943
Option 4 ID : 264330603945
Status : Answered
Chosen Option : 1

Q.7 30 men can complete a work in 10 days. They started working and after six days, 10 more men joined them. In how many days will the total work be completed?

- Ans 1. 8
 2. 9
 3. 6
 4. 7

Question ID : 264330156240
Option 1 ID : 264330612361
Option 2 ID : 264330612362
Option 3 ID : 264330612359
Option 4 ID : 264330612360
Status : Answered
Chosen Option : 2

Q.8 What is the value of the following expression?

$$\frac{[27 - (6 - 3) \times 4] + 18}{84 - 8 \div 4 \times 8 - 2}$$

- Ans 1. $\frac{37}{66}$
 2. $\frac{33}{7}$
 3. $\frac{29}{20}$
 4. $\frac{8}{9}$

Question ID : 264330156176
Option 1 ID : 264330612106
Option 2 ID : 264330612105
Option 3 ID : 264330612104
Option 4 ID : 264330612103
Status : Answered
Chosen Option : 1

Q.9 In what ratio should coffee powder costing ₹500 per kg be mixed with coffee powder costing ₹750 per kg so that the cost of the mixture is ₹600 per kg?

- Ans 1. 5 : 2
 2. 4 : 3
 3. 3 : 2
 4. 3 : 1

Question ID : 264330155955
Option 1 ID : 264330611221
Option 2 ID : 264330611220
Option 3 ID : 264330611219
Option 4 ID : 264330611222
Status : Answered
Chosen Option : 3

Q.10 The salaries of P and Q together amount to ₹6,40,000. P and Q save 60% and 40%, respectively, of their individual salaries. If their expenditures are the same, then what is the ratio of P's salary to Q's salary?

- Ans 1. 4 : 3
 2. 2 : 3
 3. 3 : 2
 4. 3 : 4

Question ID : 264330153762
Option 1 ID : 264330602514
Option 2 ID : 264330602512
Option 3 ID : 264330602511
Option 4 ID : 264330602513
Status : Not Answered
Chosen Option : --

Q.11 A 228 m long train is running at 125 km/h. In what time (in seconds), will it pass a man running at 17 km/h in the same direction in which the train is going?

- Ans 1. 9.2
 2. 7.6
 3. 6.2
 4. 8.5

Question ID : 264330155754
Option 1 ID : 264330610419
Option 2 ID : 264330610421
Option 3 ID : 264330610422
Option 4 ID : 264330610420
Status : Answered
Chosen Option : 2

Q.12 Find the fourth proportional of 12^{35} , 3^{12} and 4^{12} .

- Ans
- 1. 12^{-23}
 - 2. 3^{24}
 - 3. 12^{-11}
 - 4. 4^{24}

Question ID : 264330154053
Option 1 ID : 264330603676
Option 2 ID : 264330603678
Option 3 ID : 264330603675
Option 4 ID : 264330603677
Status : Not Answered
Chosen Option : --

Q.13 Smita is faster than Pihu. Smita and Pihu each walk 48 km. The sum of their speeds is 14 km/hr, and the sum of times taken by them is 28 hours. What is Smita's speed?

- Ans
- 1. 12.5 km/hr
 - 2. 12 km/hr
 - 3. 8 km/hr
 - 4. 10 km/hr

Question ID : 264330156192
Option 1 ID : 264330612169
Option 2 ID : 264330612170
Option 3 ID : 264330612167
Option 4 ID : 264330612168
Status : Not Answered
Chosen Option : --

Q.14 Arin alone can do a piece of work in 6 days and Selvi alone can do the same in 8 days. Arin and Selvi undertook to do it for ₹7,200. With the help of Kevin, they completed the work in 3 days. How much is to be paid to Kevin?

- Ans
- 1. ₹900
 - 2. ₹700
 - 3. ₹800
 - 4. ₹600

Question ID : 264330156118
Option 1 ID : 264330611873
Option 2 ID : 264330611871
Option 3 ID : 264330611874
Option 4 ID : 264330611872
Status : Answered
Chosen Option : 1

Q.15 A man goes from his house to a vegetable market at the speed of 15 km/h and walked back at the speed of 10 km/h. If the whole journey took 2 hours 30 minutes, find the distance from his house to the vegetable market (in km).

- Ans 1. 15
 2. 20
 3. 12
 4. 18

Question ID : 264330155992
Option 1 ID : 264330611367
Option 2 ID : 264330611370
Option 3 ID : 264330611368
Option 4 ID : 264330611369
Status : Not Answered
Chosen Option : --

Q.16 A closed wooden box measures externally 10 cm long, 8 cm broad and 6 cm high. If the thickness of the wood is 0.5 cm, then the volume of wood required is:

- Ans 1. 165 cm^3
 2. 300 cm^3
 3. 230 cm^3
 4. 150 cm^3

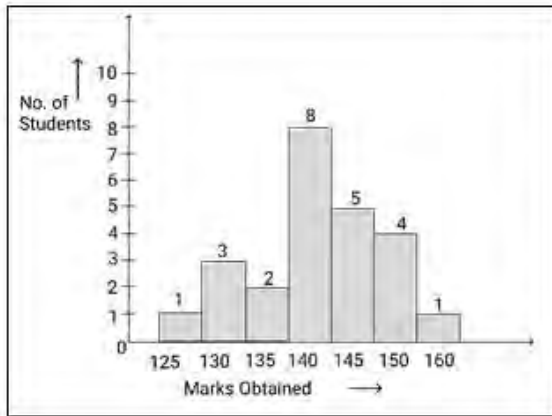
Question ID : 264330154107
Option 1 ID : 264330603893
Option 2 ID : 264330603892
Option 3 ID : 264330603894
Option 4 ID : 264330603891
Status : Not Answered
Chosen Option : --

Q.17 A factory owner earns 12% on the product manufactured by him. The shopkeeper earns 10% profit on the same item. If shopkeeper sells the product for ₹ 98.56, then the cost price of the product for the factory owner is ₹ ____.

- Ans 1. 88
 2. 90
 3. 84
 4. 80

Question ID : 264330153804
Option 1 ID : 264330602679
Option 2 ID : 264330602680
Option 3 ID : 264330602681
Option 4 ID : 264330602682
Status : Answered
Chosen Option : 4

Q.18 Study the given graph and answer the question that follows.



How many students obtained more than 125 marks?

- Ans
- 1. 19
 - 2. 17
 - 3. 15
 - 4. 23

Question ID : 264330156242

Option 1 ID : 264330612369

Option 2 ID : 264330612368

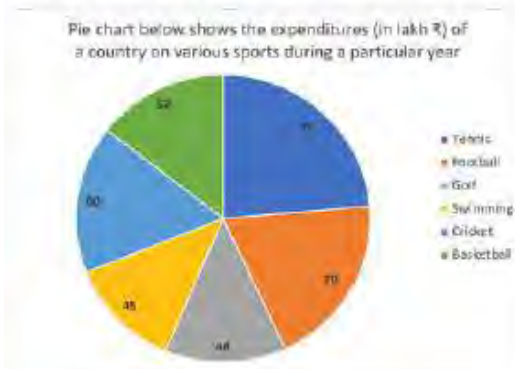
Option 3 ID : 264330612367

Option 4 ID : 264330612370

Status : Answered

Chosen Option : 4

Q.19 The Pie chart below shows the expenditures (in lakh ₹) of a country on various sports during a particular year. Study the graph carefully and answer the questions given below it.



The total expenditure on tennis, football and cricket taken together is what per cent (rounded off to 1 decimal place) more or less than the total expenditure on golf, swimming and basketball taken together?

- Ans
- 1. More, 29.6%
 - 2. less, 48.3%
 - 3. Less, 29.6%
 - 4. More, 48.3%

Question ID : 264330153785

Option 1 ID : 264330602605

Option 2 ID : 264330602604

Option 3 ID : 264330602606

Option 4 ID : 264330602603

Status : Not Answered

Chosen Option : --

Q.20

If a loss is $\frac{1}{8}$ th of the selling price, then the loss percentage is:

Ans

1. $11\frac{1}{9}\%$

2. $7\frac{4}{9}\%$

3. $10\frac{1}{9}\%$

4. $8\frac{5}{9}\%$

Question ID : 264330162069

Option 1 ID : 264330635605

Option 2 ID : 264330635606

Option 3 ID : 264330635603

Option 4 ID : 264330635604

Status : Not Answered

Chosen Option : --

Section : Reasoning Ability and Problem Solving

Q.1 Which figure should replace the question mark (?) if the following figure series were to be continued?

B	Y	6	6	Y	△	△	6	=	=	6	B	?
△		↑	↑		B	B		↑	↑		△	

Ans

✗ 1.

△	C	↑
B		=

✗ 2.

B	=	6
△		↑

✓ 3.

B	=	C
△		↑

✗ 4.

C	=	6
△		↑

Question ID : 264330154746

Option 1 ID : 264330606447

Option 2 ID : 264330606449

Option 3 ID : 264330606450

Option 4 ID : 264330606448

Status : Answered

Chosen Option : 2

Q.2 Select the combination of letters that when sequentially placed in the blanks of the given series, will complete the series.

W _ X _ XXW _ X _ _ X

Ans ✗ 1. XWXXW

✗ 2. WWXXW

✓ 3. XWXWX

✗ 4. WXXXW

Question ID : 264330151655

Option 1 ID : 264330594247

Option 2 ID : 264330594248

Option 3 ID : 264330594249

Option 4 ID : 264330594250

Status : Answered

Chosen Option : 3

Q.3 What should come in place of '?' in the given series?

19 40 103 292 859 ?

- Ans
- 1. 2536
 - 2. 2560
 - 3. 2490
 - 4. 2508

Question ID : 264330151454
Option 1 ID : 264330593445
Option 2 ID : 264330593446
Option 3 ID : 264330593443
Option 4 ID : 264330593444
Status : Answered
Chosen Option : 2

Q.4 What should come in place of '?' in the given series?

18 41 110 ? 938 2801 8390

- Ans
- 1. 291
 - 2. 317
 - 3. 325
 - 4. 339

Question ID : 264330151488
Option 1 ID : 264330593579
Option 2 ID : 264330593580
Option 3 ID : 264330593581
Option 4 ID : 264330593582
Status : Answered
Chosen Option : 2

Q.5 14 is related to 57 following a certain logic. Following the same logic, 22 is related to 89 .To which of the following is 52 related to, following the same logic?

- Ans
- 1. 209
 - 2. 208
 - 3. 206
 - 4. 204

Question ID : 264330151607
Option 1 ID : 264330594058
Option 2 ID : 264330594057
Option 3 ID : 264330594056
Option 4 ID : 264330594055
Status : Answered
Chosen Option : 1

Q.6 What should come in place of ? in the given series based on the English alphabetical order?

BSL, EUM, HWN, KYO, ?

- Ans
- 1. MBP
 - 2. MBQ
 - 3. NBR
 - 4. NAP

Question ID : 264330155775
Option 1 ID : 264330610506
Option 2 ID : 264330610503
Option 3 ID : 264330610505
Option 4 ID : 264330610504
Status : Answered
Chosen Option : 4

Q.7 BNFT is related to FRJX in a certain way based on the English alphabetical order. In the same way, JOEA is related to NSIE. To which of the following is HERK related to, following the same logic?

- Ans
- 1. LJVP
 - 2. JHVP
 - 3. LIVO
 - 4. KHUN

Question ID : 264330151679
Option 1 ID : 264330594343
Option 2 ID : 264330594345
Option 3 ID : 264330594346
Option 4 ID : 264330594344
Status : Answered
Chosen Option : 3

Q.8 Read the given statements and conclusions carefully. You have to take the given statements to be true even if they seem to be at variance from commonly known facts. You have to decide which conclusion/s logically follow/s from the given statements.

Statements: All buckets are plastic. Some plastic are spoons. All spoons are forks.

Conclusion I: Some plastic are buckets.

Conclusion II: Some plastics are forks.

- Ans
- 1. Only conclusion (II) is follow.
 - 2. Both conclusions (I) and (II) are follow.
 - 3. Only conclusion (I) is follow.
 - 4. Neither conclusion (I) nor (II) is follow.

Question ID : 264330155928
Option 1 ID : 264330611116
Option 2 ID : 264330611118
Option 3 ID : 264330611115
Option 4 ID : 264330611117
Status : Answered
Chosen Option : 2

Q.9 What should come in place of '?' in the given series?

20 104 524 2624 13124 ?

- Ans
- 1. 65282
 - 2. 64586
 - 3. 65624
 - 4. 63457

Question ID : 264330151461
Option 1 ID : 264330593473
Option 2 ID : 264330593472
Option 3 ID : 264330593474
Option 4 ID : 264330593471
Status : Answered
Chosen Option : 3

Q.10 What should come in place of ? in the given series based on the English alphabetical order?

ZHS, YER, XBQ, WYP, ?

- Ans
- 1. VWO
 - 2. WVN
 - 3. WWN
 - 4. VVO

Question ID : 264330155789
Option 1 ID : 264330610561
Option 2 ID : 264330610559
Option 3 ID : 264330610562
Option 4 ID : 264330610560
Status : Answered
Chosen Option : 4

Q.11 Meena, Saroj, Goldy, Priti, Poonam and Baby are sitting around a circular table facing the centre. Meena sits to the immediate left of Saroj. Goldy sits 3rd to the right of Saroj. Priti sits 2nd to the left of Goldy. Poonam sits to the immediate right of Goldy. Who sits 2nd to the left of Baby?

- Ans
- 1. Saroj
 - 2. Goldy
 - 3. Priti
 - 4. Poonam

Question ID : 264330155649
Option 1 ID : 264330609999
Option 2 ID : 264330610001
Option 3 ID : 264330610000
Option 4 ID : 264330610002
Status : Answered
Chosen Option : 1

Q.12 5 is related to 20 following a certain logic. Following the same logic, 7 is related to 26. To which of the following is 2 related to, following the same logic?

Ans 1. 11

2. 13

3. 10

4. 12

Question ID : 264330151581
Option 1 ID : 264330593952
Option 2 ID : 264330593954
Option 3 ID : 264330593951
Option 4 ID : 264330593953
Status : Not Answered
Chosen Option : --

Q.13 If 11th June 1987 is Thursday, then what will be the day of the week on 4th Dec 1989?

Ans 1. Tuesday

2. Monday

3. Saturday

4. Wednesday

Question ID : 264330154332
Option 1 ID : 264330604792
Option 2 ID : 264330604793
Option 3 ID : 264330604791
Option 4 ID : 264330604794
Status : Answered
Chosen Option : 2

Q.14 In a certain code language, 'how are you' is coded as 'aj ts el' and 'show them how' is coded as 'wn el pd'. How is 'how' coded in the given language?

Ans 1. pd

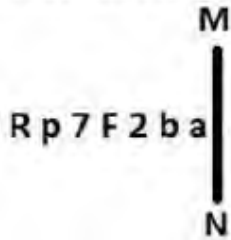
2. el

3. aj

4. wn

Question ID : 264330151711
Option 1 ID : 264330594471
Option 2 ID : 264330594473
Option 3 ID : 264330594472
Option 4 ID : 264330594474
Status : Answered
Chosen Option : 2

Q.15 Select the correct mirror image of the given figure when the mirror is placed at MN as shown below.



- Ans
- 1. a d 5 7 7 q R
 - 2. a d 5 7 7 q R
 - 3. a d 2 7 7 q R
 - 4. a d 5 7 7 d R

Question ID : 264330151520
 Option 1 ID : 264330593710
 Option 2 ID : 264330593708
 Option 3 ID : 264330593707
 Option 4 ID : 264330593709
 Status : Answered
 Chosen Option : 2

Q.16 What will come in the place of '?' in the following equation, if '+' and '→' are interchanged and '×' and '÷' are interchanged?

$$37 - 18 - 6 + 325 \times 25 = ?$$

- Ans
- 1. 132
 - 2. 152
 - 3. 142
 - 4. 122

Question ID : 264330155673
 Option 1 ID : 264330610098
 Option 2 ID : 264330610095
 Option 3 ID : 264330610097
 Option 4 ID : 264330610096
 Status : Answered
 Chosen Option : 1

Q.17 What will come in place of '?' in the following equation, if '-' and '×' are interchanged and '+' and '÷' are interchanged?

$$7 - 7 \times 3 - 4 \div 5 = ?$$

- Ans
- 1. -1
 - 2. -6
 - 3. -2
 - 4. -4

Question ID : 264330154659
 Option 1 ID : 264330606102
 Option 2 ID : 264330606100
 Option 3 ID : 264330606101
 Option 4 ID : 264330606099
 Status : Answered
 Chosen Option : 2

Q.18 Read the given statement(s) and conclusions carefully. Assuming that the information given in the statements is true, even if it appears to be at variance with commonly known facts, decide which of the given conclusions logically follow(s) from the statement(s).

Statements: All the trucks are flies. Some scooters are flies.

Conclusions:

- (I) All trucks are scooters.
- (II) Some scooters are trucks.

Ans 1. Neither conclusion (I) nor (II) is follows.

- 2. Only conclusion (I) is follows.
- 3. Both conclusions (I) and (II) are follows.
- 4. Only conclusion (II) is follows.

Question ID : 264330154429
Option 1 ID : 264330605181
Option 2 ID : 264330605179
Option 3 ID : 264330605182
Option 4 ID : 264330605180
Status : Answered
Chosen Option : 1

Q.19 In a certain code language, 'FLOWERY' is coded as 'FYREWOL' and 'LINGUIST' is coded as 'LTSIUGNI'. What is the code for 'MANIFEST' in the given code language?

Ans 1. MTSEFINA

- 2. TESFINAM
- 3. SEFINAMT
- 4. MSTEGJMA

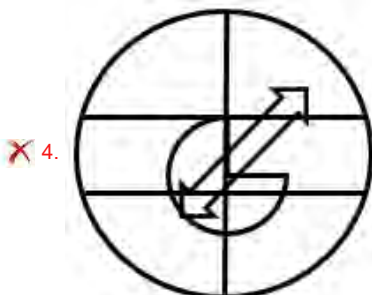
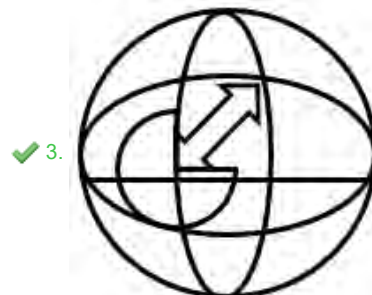
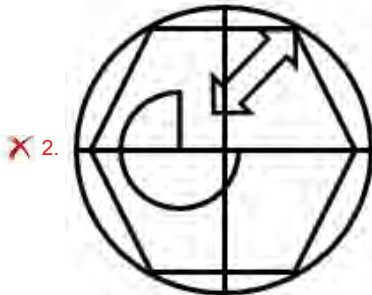
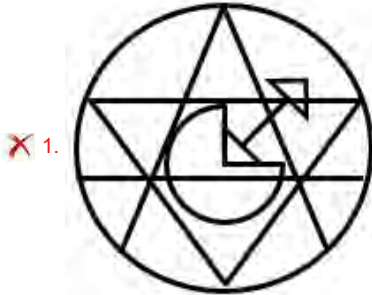
Question ID : 264330155814
Option 1 ID : 264330610661
Option 2 ID : 264330610659
Option 3 ID : 264330610660
Option 4 ID : 264330610662
Status : Answered
Chosen Option : 1

Q.20 Select the option figure in which the given figure (X) is embedded as its part (rotation is NOT allowed).



(X)

Ans



Question ID : 264330151729

Option 1 ID : 264330594546

Option 2 ID : 264330594545

Option 3 ID : 264330594544

Option 4 ID : 264330594543

Status : Answered

Chosen Option : 3

Section : General Awareness

Q.1 Which of the following Indian playback singers received the Bharat Ratna in 2001?

- Ans 1. KS Chithra
 2. Geeta Dutt
 3. Lata Mangeshkar
 4. Asha Bhosle

Question ID : 264330161773
Option 1 ID : 264330634422
Option 2 ID : 264330634421
Option 3 ID : 264330634420
Option 4 ID : 264330634419
Status : Answered
Chosen Option : 4

Q.2 Which of the following cricket players wrote the autobiography 'Playing It My Way'?

- Ans 1. Yuvraj Singh
 2. Sourav Ganguly
 3. Sachin Tendulkar
 4. Kiran More

Question ID : 264330160960
Option 1 ID : 264330631173
Option 2 ID : 264330631172
Option 3 ID : 264330631171
Option 4 ID : 264330631174
Status : Answered
Chosen Option : 1

Q.3 In which city is the India Gate situated?

- Ans 1. Delhi
 2. Ahmedabad
 3. Lucknow
 4. Mumbai

Question ID : 264330160775
Option 1 ID : 264330630431
Option 2 ID : 264330630433
Option 3 ID : 264330630434
Option 4 ID : 264330630432
Status : Answered
Chosen Option : 1

Q.4 Who authored the book 'Poverty and Un-British Rule in India' in 1901, which was highly critical of the economic impact of British Rule?

- Ans 1. Pheroza Shah Mehta
 2. Dadabhai Naoroji
 3. WC Bonnerji
 4. Badruddin Tyabji

Question ID : 264330161748
Option 1 ID : 264330634319
Option 2 ID : 264330634322
Option 3 ID : 264330634320
Option 4 ID : 264330634321
Status : Answered
Chosen Option : 2

Q.5 The efforts of Malayalam poet Vallathol Narayana Menon and dancer and guru Kalyanikutty Amma brought back and gave a new life to the dance form

- Ans**
- 1. Bharatanatyam
 - 2. Kuchipudi
 - 3. Mohiniyattam
 - 4. Kathakali

Question ID : 264330160790
Option 1 ID : 264330630492
Option 2 ID : 264330630493
Option 3 ID : 264330630494
Option 4 ID : 264330630491
Status : Not Answered
Chosen Option : --

Q.6 Where was All Indian Muslim League formed in 1906?

- Ans**
- 1. Agra
 - 2. Dhaka
 - 3. Lahore
 - 4. Delhi

Question ID : 264330162333
Option 1 ID : 264330636661
Option 2 ID : 264330636660
Option 3 ID : 264330636659
Option 4 ID : 264330636662
Status : Answered
Chosen Option : 3

Q.7 Which of the following writers wrote the autobiography 'Truth, Love and a Little Malice'?

- Ans**
- 1. Khushwant Singh
 - 2. Chetan Bhagat
 - 3. Pratibha Ray
 - 4. Amrita Pritam

Question ID : 264330160962
Option 1 ID : 264330631180
Option 2 ID : 264330631182
Option 3 ID : 264330631181
Option 4 ID : 264330631179
Status : Answered
Chosen Option : 2

Q.8 In 2023, a three-day All-India Taekwondo Championship was organized in _____ to mark 50 years of Korea-India diplomatic relations.

- Ans 1. Kolkata
 2. Bengaluru
 3. Mizoram
 4. New Delhi

Question ID : 264330161154
Option 1 ID : 264330631949
Option 2 ID : 264330631947
Option 3 ID : 264330631950
Option 4 ID : 264330631948
Status : Not Answered
Chosen Option : --

Q.9 The outward remittances under the Reserve Bank of India's _____ made a strong comeback in the first quarter of FY23 as Indians increased spending on international travel, maintenance of close relatives and gifts.

- Ans 1. Liberalised Remittance Scheme
 2. Regular Remittance Scheme
 3. Liquid Remittances Scheme
 4. Foreign Remittances Scheme

Question ID : 264330161403
Option 1 ID : 264330632939
Option 2 ID : 264330632940
Option 3 ID : 264330632941
Option 4 ID : 264330632942
Status : Not Answered
Chosen Option : --

Q.10 The Pradhan Mantri MUDRA Yojana (PMMY) scheme provide loans up to _____ to the non-corporate, non-farm small and micro entrepreneurs. (As of April 2023).

- Ans 1. 5 lakh
 2. 10 lakh
 3. 2.5 lakh
 4. 1 lakh

Question ID : 264330161578
Option 1 ID : 264330633641
Option 2 ID : 264330633642
Option 3 ID : 264330633640
Option 4 ID : 264330633639
Status : Answered
Chosen Option : 4

Q.11 What is the primary cause for the highest precipitation in India?

- Ans
- 1. West Garo Hills
 - 2. South-West Monsoon
 - 3. North-East Monsoon
 - 4. East Khasi Hills

Question ID : 264330157824
Option 1 ID : 264330618658
Option 2 ID : 264330618657
Option 3 ID : 264330618656
Option 4 ID : 264330618655
Status : Answered
Chosen Option : 2

Q.12 The _____ maestros who revived the art form in the late 1940s include Kelucharan Mohapatra and Raghunath Dutta.

- Ans
- 1. Sattriya
 - 2. Odissi
 - 3. Manipuri
 - 4. Chhau

Question ID : 264330160813
Option 1 ID : 264330630584
Option 2 ID : 264330630585
Option 3 ID : 264330630583
Option 4 ID : 264330630586
Status : Not Answered
Chosen Option : --

Q.13 The Guru Kelucharan Mohapatra Award 2022 was conferred upon Guru Niranjana Rout and Guru Ramahari Das for their contribution to the fields of _____ dance and music.

- Ans
- 1. Sattriya
 - 2. Kuchipudi
 - 3. Kathak
 - 4. Odissi

Question ID : 264330155484
Option 1 ID : 264330609339
Option 2 ID : 264330609341
Option 3 ID : 264330609342
Option 4 ID : 264330609340
Status : Not Answered
Chosen Option : --

Q.14 Which of the following is true about disposable income in relation to personal income?

- Ans 1. Disposable income is equal to personal income.
2. Disposable income is always less than personal income.
3. Disposable income is always greater than personal income.
4. Disposable income can be greater or less than personal income, depending on taxes and deductions.

Question ID : 264330161589
Option 1 ID : 264330633685
Option 2 ID : 264330633684
Option 3 ID : 264330633683
Option 4 ID : 264330633686
Status : Not Answered
Chosen Option : --

Q.15 Which of the following best describes the process of calorimetry?

- Ans 1. Measuring the amount of compressive strength
2. Measuring the amount of force
3. Measuring the amount of electricity
4. Measuring the amount of heat energy transferred

Question ID : 264330161330
Option 1 ID : 264330632649
Option 2 ID : 264330632647
Option 3 ID : 264330632648
Option 4 ID : 264330632650
Status : Not Answered
Chosen Option : --

Q.16 Which Article of the Constitution of India provides early childhood care and education for all children until they complete the age of six years?

- Ans 1. Article 38
2. Article 39
3. Article 45
4. Article 40

Question ID : 264330159906
Option 1 ID : 264330626974
Option 2 ID : 264330626973
Option 3 ID : 264330626971
Option 4 ID : 264330626972
Status : Not Answered
Chosen Option : --

Q.17 Which of the following is NOT a constitutional body?

- Ans 1. Election Commission
2. Finance Commission
3. Union Public Service Commission
4. NITI Aayog

Question ID : 264330160861
Option 1 ID : 264330630776
Option 2 ID : 264330630778
Option 3 ID : 264330630777
Option 4 ID : 264330630775
Status : Answered
Chosen Option : 3

Q.18 विटामिन B1 की कमी से कौन-सा पोषण संबंधी विकार होता है जिससे परिधीय तंत्रिकाओं (peripheral nerves) और क्षय (wasting) की समस्याएं उत्पन्न होती हैं?

- Ans
- 1. शुष्काक्षिपाक (Xerophthalmia)
 - 2. पर्निसियस एनीमिया (Pernicious anaemia)
 - 3. बेरीबेरी (Beriberi)
 - 4. सूखा रोग (Rickets)

Question ID : 264330161075
Option 1 ID : 264330631634
Option 2 ID : 264330631631
Option 3 ID : 264330631633
Option 4 ID : 264330631632
Status : Not Answered
Chosen Option : --

Q.19 According to the National Multidimensional Poverty Index of NITI Aayog 2021, which of the following states has less than 1% multidimensionally Poor of its total population?

- Ans
- 1. Maharashtra
 - 2. Punjab
 - 3. Telangana
 - 4. Kerala

Question ID : 264330161569
Option 1 ID : 264330633606
Option 2 ID : 264330633604
Option 3 ID : 264330633605
Option 4 ID : 264330633603
Status : Not Answered
Chosen Option : --

Q.20 According to the Hindu calendar, Holi is celebrated on _____.

- Ans
- 1. Chaitra Purnima
 - 2. Pausa Purnima
 - 3. Phalguna Purnima
 - 4. Magha Purnima

Question ID : 264330160827
Option 1 ID : 264330630641
Option 2 ID : 264330630642
Option 3 ID : 264330630639
Option 4 ID : 264330630640
Status : Answered
Chosen Option : 3

Q.21 Who was the music director of the famous song "Aye Mere Watan Ke Logon" sung by Lata Mangeshkar?

- Ans
- 1. Kishore Kumar
 - 2. Rajesh Roshan
 - 3. C Ramchandra
 - 4. Anand Raaj Anand

Question ID : 264330155514
Option 1 ID : 264330609462
Option 2 ID : 264330609459
Option 3 ID : 264330609461
Option 4 ID : 264330609460
Status : Answered
Chosen Option : 4

Q.22 भारत में जंगली गधे और ऊंट किस प्रकार के वनों में पाए जाते हैं?

- Ans
- 1. उष्णकटिबंधीय सदाबहार वन
 - 2. पर्वतीय वन
 - 3. कांटेदार वन और झाड़ियां
 - 4. मैंग्रोव वन

Question ID : 264330161499
Option 1 ID : 264330633325
Option 2 ID : 264330633326
Option 3 ID : 264330633324
Option 4 ID : 264330633323
Status : Answered
Chosen Option : 3

Q.23 Which Indian sprinter bagged two gold medals, one each in the men's 100 and 200-metre races at the Flanders Cup 2023 athletics meet?

- Ans
- 1. Mohammed Afsal P
 - 2. Amlan Borgohain
 - 3. Tejas Shirse
 - 4. ihson dhson

Question ID : 264330161132
Option 1 ID : 264330631859
Option 2 ID : 264330631860
Option 3 ID : 264330631862
Option 4 ID : 264330631861
Status : Not Answered
Chosen Option : --

Q.24 Who became the first Indian javelin ace to win the gold at the Zurich Diamond League?

- Ans
- 1. Sahil Silwal
 - 2. Shivpal Yadav
 - 3. Neeraj Chopra
 - 4. Rohit Yadav

Question ID : 264330158363
Option 1 ID : 264330620813
Option 2 ID : 264330620811
Option 3 ID : 264330620812
Option 4 ID : 264330620814
Status : Answered
Chosen Option : 3

Q.25 Which curve examines the relationship between the rate of unemployment and the rate of money wage changes?

- Ans** 1. Phillips curve
 2. Indifference curve
 3. Supply curve
 4. Demand curve

Question ID : 264330161456
Option 1 ID : 264330633152
Option 2 ID : 264330633151
Option 3 ID : 264330633154
Option 4 ID : 264330633153
Status : Answered
Chosen Option : 1

Section : English Language and Comprehension

Q.1 The following sentence has been split into four segments. Identify the segment that contains a grammatical error.
When I was in high school / I participated in several extracurricular activities / such as the debate team and the school newspaper / which help me developed my communication and writing skills.

- Ans** 1. When I was in high school
 2. which help me developed my communication and writing skills
 3. such as the debate team and the school newspaper
 4. I participated in several extracurricular activities

Question ID : 264330144180
Option 1 ID : 264330564983
Option 2 ID : 264330564986
Option 3 ID : 264330564985
Option 4 ID : 264330564984
Status : Answered
Chosen Option : 2

Q.2 Select the most appropriate option that can substitute the underlined segment in the given sentence.
The rise in temperature is playing havoc with India's rainfall which is pertinent for India's agriculture sector.

- Ans** 1. rainfall who is pertinent
 2. rainfall which is significant
 3. rainfall which is decant
 4. rainfall which was mendicant

Question ID : 264330151807
Option 1 ID : 264330594855
Option 2 ID : 264330594857
Option 3 ID : 264330594858
Option 4 ID : 264330594856
Status : Answered
Chosen Option : 2

Q.3 Select the most appropriate idiom to fill in the blank.
Sameera has been in _____ since she got selected for a highly paid job at a multinational company.

- Ans 1. seventh heaven
 2. all the rage
 3. the dark
 4. a cold day in uly

Question ID : 264330152780
Option 1 ID : 264330598714
Option 2 ID : 264330598713
Option 3 ID : 264330598712
Option 4 ID : 264330598711
Status : Answered
Chosen Option : 1

Q.4 Select the most appropriate meaning of the underlined segment in the given sentence.
I hope you break a leg at your performance tonight!

- Ans 1. Give up
 2. Make a mistake
 3. Perform well
 4. Hurt yourself

Question ID : 264330152925
Option 1 ID : 264330599281
Option 2 ID : 264330599282
Option 3 ID : 264330599280
Option 4 ID : 264330599279
Status : Answered
Chosen Option : 3

Q.5 Select the most appropriate option to fill in the blank.
Winning the championship was a dream come true for the team, but being awarded the MVP trophy was _____.

- Ans 1. the silver lining
 2. the bird in the bush
 3. a cold turkey
 4. the icing on the cake

Question ID : 264330151886
Option 1 ID : 264330595166
Option 2 ID : 264330595164
Option 3 ID : 264330595163
Option 4 ID : 264330595165
Status : Answered
Chosen Option : 4

Q.6 Select the most appropriate **ANTONYM** of the underlined word.
We requested grandmother to extend her visit.

- Ans 1. Imperil
 2. Curtail
 3. Assail
 4. Bewail

Question ID : 264330151820
Option 1 ID : 264330594910
Option 2 ID : 264330594907
Option 3 ID : 264330594909
Option 4 ID : 264330594908
Status : Answered
Chosen Option : 2

Q.7 Select the most appropriate option that can substitute the underlined segment in the given sentence.
Simon is afraid of closed space.

- Ans 1. has xenophobia
 2. has ecophobia
 3. has claustrophobia
 4. has hydrophobia

Question ID : 264330153512
Option 1 ID : 264330601560
Option 2 ID : 264330601559
Option 3 ID : 264330601561
Option 4 ID : 264330601562
Status : Answered
Chosen Option : 3

Q.8 Select the most appropriate synonym of the given word.
Magnificent

- Ans 1. Justify
 2. Glorious
 3. Highest
 4. Modest

Question ID : 264330152595
Option 1 ID : 264330597984
Option 2 ID : 264330597986
Option 3 ID : 264330597985
Option 4 ID : 264330597983
Status : Answered
Chosen Option : 2

Q.9 The sentence given below contains some spelling errors. Select the option that has the correct spellings.

Applications of subjects like Physiks and chemmistry in our dayly life also have higher visibilty than those of Biology.

- Ans
- 1. Applicasons of subjects like Physiks and Cemistry in our dayly life also have higher visibility than those of Biology.
 - 2. Applications of subjects like Physics and chemistry in our dayly life also have higher visibility than those of Biology.
 - 3. Applications of subjects like Physics and Chemistry in our daily life also have higher visibility than those of Biology.
 - 4. Applicacions of subjects like Physics and chemmistry in our daily life also have higher visibilty than those of Biology.

Question ID : 264330153542

Option 1 ID : 264330601674

Option 2 ID : 264330601672

Option 3 ID : 264330601671

Option 4 ID : 264330601673

Status : Answered

Chosen Option : 3

Q.10 Parts of the given sentence have been underlined. One of them contains an error. The underlined parts are given as options with some changes. Select the option that correctly rectifies the error.

The weather is cold tonight than it was yesterday.

- Ans
- 1. its
 - 2. are
 - 3. were
 - 4. colder

Question ID : 264330153175

Option 1 ID : 264330600261

Option 2 ID : 264330600259

Option 3 ID : 264330600262

Option 4 ID : 264330600260

Status : Answered

Chosen Option : 4

Q.11 Select the option that correctly rectifies the underlined spelling error in the given sentence.

Little children are afraid to go to school because of the agressive seniors who tend to bully them.

- Ans
- 1. Aggresive
 - 2. Aggressive
 - 3. Agrressive
 - 4. Agrressive

Question ID : 264330155315

Option 1 ID : 264330608699

Option 2 ID : 264330608700

Option 3 ID : 264330608702

Option 4 ID : 264330608701

Status : Answered

Chosen Option : 2

Q.12 Select the most appropriate option to fill in the blank.
The scratches on her hands were clear signs of domestic violence, _____ and said that she got scratched by barbed wire fencing.

- Ans
- 1. and poverty
 - 2. yet she lied
 - 3. which was enough evidence
 - 4. done a while ago

Question ID : 264330152640
Option 1 ID : 264330598165
Option 2 ID : 264330598164
Option 3 ID : 264330598166
Option 4 ID : 264330598163
Status : Answered
Chosen Option : 2

Q.13 Select the most appropriate option that can substitute the underlined segment in the given sentence.
Rahul's sister says that my brother is the best dancer in the city.

- Ans
- 1. her brother is the best dancer in the city
 - 2. my brother was the best dancer in the city
 - 3. her brother was the best dancer in the city
 - 4. his brother was the best dancer in the city

Question ID : 264330152709
Option 1 ID : 264330598437
Option 2 ID : 264330598435
Option 3 ID : 264330598436
Option 4 ID : 264330598438
Status : Answered
Chosen Option : 1

Q.14 Select the most appropriate option that can substitute the underlined segment in the given sentence. If there is no need to substitute it, select 'No improvement required'.
A wonder in the plant kingdom, the Great Banyan Tree of the AJC Bose Botanical Garden at Shibpur in Howrah, occupies a unique position in the world records.

- Ans
- 1. occupying a unique position in
 - 2. occupies an unique position in
 - 3. No improvement required
 - 4. being occupied a unique position of

Question ID : 264330152667
Option 1 ID : 264330598271
Option 2 ID : 264330598273
Option 3 ID : 264330598274
Option 4 ID : 264330598272
Status : Answered
Chosen Option : 3

Q.15 Parts of the following sentence have been given as options. Select the option that contains an error.
The cholera is a frightful disease.

- Ans 1. is
 2. The cholera
 3. frightful disease
 4. a

Question ID : 264330152791
Option 1 ID : 264330598756
Option 2 ID : 264330598755
Option 3 ID : 264330598758
Option 4 ID : 264330598757
Status : Answered
Chosen Option : 2

Q.16 The sentence given below has spelling errors. Select the sentence without spelling errors.
Knowledge and awareness about my own self has to preceede my knowledge of things other than me.

- Ans 1. Knowledge and awareness about my own self has to preceede my knowledge of things other then me.
 2. Knowledge and awareness about my own self has to precede my knowledge of things other than me.
 3. Knowlegde and awareness about my own self has to preceede my knowlegde of things other than me.
 4. Knowledge and awaresnes about my own self has to preceede my knowledge of things other than me.

Question ID : 264330151838
Option 1 ID : 264330594982
Option 2 ID : 264330594981
Option 3 ID : 264330594979
Option 4 ID : 264330594980
Status : Answered
Chosen Option : 2

Q.17 Select the most appropriate idiom to fill in the blank.
If Peter said he would get that book for you, he will do it. He always _____.

- Ans 1. keeps under his hat
 2. keeps him at arm's length
 3. keeps his word
 4. keeps his shirt on

Question ID : 264330153101
Option 1 ID : 264330599967
Option 2 ID : 264330599969
Option 3 ID : 264330599968
Option 4 ID : 264330599970
Status : Answered
Chosen Option : 3

Q.18 Select the most appropriate option that can substitute the underlined segment in the given sentence.

It has raining very hard and he has a very large umbrella to keep off the rain-drops.

- Ans 1. shall rain
 2. is raining
 3. will be rainy
 4. rained

Question ID : 264330153481
Option 1 ID : 264330601441
Option 2 ID : 264330601439
Option 3 ID : 264330601442
Option 4 ID : 264330601440
Status : Answered
Chosen Option : 2

Q.19 Select the most appropriate synonym of the underlined word in the given sentence.
Shiya had more grit than her other siblings.

- Ans 1. power
 2. level
 3. gap
 4. courage

Question ID : 264330152722
Option 1 ID : 264330598487
Option 2 ID : 264330598490
Option 3 ID : 264330598488
Option 4 ID : 264330598489
Status : Answered
Chosen Option : 4

Q.20 The following sentence has been divided into four parts. Identify the part that contains an error.

(A) The twins are / (B) often told that / (C) they are resembling / (D) each other.

- Ans 1. C
 2. A
 3. B
 4. D

Question ID : 264330152613
Option 1 ID : 264330598056
Option 2 ID : 264330598055
Option 3 ID : 264330598058
Option 4 ID : 264330598057
Status : Answered
Chosen Option : 3

Comprehension:

In the following passage some words have been deleted. Fill in the blanks with the help of the alternatives given. Select the most appropriate option for each number.

Each essay is set (1)_____ against its background and made simpler by providing (2)_____ summary and critical commentary, short notes on textual issues, and (3)_____ of important critical and theoretical issues under the heading essay topics. (4)_____ of the most commonly used terms in the literature is given at the end and meant to serve as ready reference. This book will cater the (5)_____ of students of literature and teachers teaching this course.

SubQuestion No : 21

Q.21 Select the most appropriate option to fill in blank number 1.

- Ans 1. in
 2. at
 3. on
 4. off

Question ID : 264330153584

Option 1 ID : 264330601830

Option 2 ID : 264330601828

Option 3 ID : 264330601827

Option 4 ID : 264330601829

Status : Answered

Chosen Option : 4

Comprehension:

In the following passage some words have been deleted. Fill in the blanks with the help of the alternatives given. Select the most appropriate option for each number.

Each essay is set (1)_____ against its background and made simpler by providing (2)_____ summary and critical commentary, short notes on textual issues, and (3)_____ of important critical and theoretical issues under the heading essay topics. (4)_____ of the most commonly used terms in the literature is given at the end and meant to serve as ready reference. This book will cater the (5)_____ of students of literature and teachers teaching this course.

SubQuestion No : 22

Q.22 Select the most appropriate option to fill in blank number 2.

- Ans 1. there
 2. its
 3. that
 4. this

Question ID : 264330153585

Option 1 ID : 264330601834

Option 2 ID : 264330601833

Option 3 ID : 264330601832

Option 4 ID : 264330601831

Status : Answered

Chosen Option : 2

Comprehension:

In the following passage some words have been deleted. Fill in the blanks with the help of the alternatives given. Select the most appropriate option for each number.

Each essay is set (1)_____ against its background and made simpler by providing (2)_____ summary and critical commentary, short notes on textual issues, and (3)_____ of important critical and theoretical issues under the heading essay topics. (4)_____ of the most commonly used terms in the literature is given at the end and meant to serve as ready reference. This book will cater the (5)_____ of students of literature and teachers teaching this course.

SubQuestion No : 23

Q.23 Select the most appropriate option to fill in blank number 3.

- Ans 1. mindset
 2. chats
 3. discussions
 4. thinking

Question ID : 264330153586

Option 1 ID : 264330601838

Option 2 ID : 264330601835

Option 3 ID : 264330601836

Option 4 ID : 264330601837

Status : Answered

Chosen Option : 3

Comprehension:

In the following passage some words have been deleted. Fill in the blanks with the help of the alternatives given. Select the most appropriate option for each number.

Each essay is set (1)_____ against its background and made simpler by providing (2)_____ summary and critical commentary, short notes on textual issues, and (3)_____ of important critical and theoretical issues under the heading essay topics. (4)_____ of the most commonly used terms in the literature is given at the end and meant to serve as ready reference. This book will cater the (5)_____ of students of literature and teachers teaching this course.

SubQuestion No : 24

Q.24 Select the most appropriate option to fill in blank number 4.

- Ans 1. figures
 2. glossary
 3. grammar
 4. data

Question ID : 264330153587

Option 1 ID : 264330601841

Option 2 ID : 264330601839

Option 3 ID : 264330601840

Option 4 ID : 264330601842

Status : Answered

Chosen Option : 2

Comprehension:

In the following passage some words have been deleted. Fill in the blanks with the help of the alternatives given. Select the most appropriate option for each number.

Each essay is set (1)_____ against its background and made simpler by providing (2)_____ summary and critical commentary, short notes on textual issues, and (3)_____ of important critical and theoretical issues under the heading essay topics. (4)_____ of the most commonly used terms in the literature is given at the end and meant to serve as ready reference. This book will cater the (5)_____ of students of literature and teachers teaching this course.

SubQuestion No : 25

Q.25 Select the most appropriate option to fill in blank number 5.

- Ans 1. desires
 2. whims
 3. feelings
 4. needs

Question ID : **264330153588**

Option 1 ID : **264330601846**

Option 2 ID : **264330601845**

Option 3 ID : **264330601843**

Option 4 ID : **264330601844**

Status : **Answered**

Chosen Option : **4**