

# Multi Tasking Non Technical Staff Havaladar CBIC and CBN Examination 2021

Roll Number	
Candidate Name	
Venue Name	
Exam Date	14/07/2022
Exam Time	5:00 PM - 6:30 PM
Subject	MTS Non technical and Havaladar Examination 2021

Section : **General English**

**Q.1** Select the option that can be used as a one-word substitute for the given group of words.

An imaginary name assumed by an author

- Ans  1. Nomenclature  
 2. Almanac  
 3. Pseudonym  
 4. Platonic

Question ID : 26433050814  
Status : Answered  
Chosen Option : 3

**Q.2** Select the most appropriate ANTONYM of the given word.

Hideous

- Ans  1. Disgusting  
 2. Shocking  
 3. Attractive  
 4. Ghastly

Question ID : 26433051766  
Status : Answered  
Chosen Option : 3

**Q.3** The following sentence has been divided into parts. One of them may contain an error. Select the part that contains the error from the given options. If you don't find any error, mark 'No error' as your answer.

If he had not dropped out, / he will most certainly have completed / his education by 2023.

- Ans  1. his education by 2023  
 2. No error  
 3. If he had not dropped out  
 4. he will most certainly have completed

Question ID : 26433051619  
Status : Answered  
Chosen Option : 4

**Q.4 Select the most appropriate meaning of the given idiom.**

**In the heat of the moment**

- Ans  1. Saying or doing something without thinking due to anger
2. Keep something away from everyone
3. To share information that was previously concealed
4. In a confused or befuddled state of mind

Question ID : 26433051742  
Status : Answered  
Chosen Option : 4

**Q.5 Select the sentence in which all words are correctly spelt.**

- Ans  1. With him he had one of his cheif councillors.
2. Work is due to comence in the coming year.
3. Melt the white and dark chocolate in separate bowls.
4. We did it becuase we felt it our duty to encorage him.

Question ID : 26433051640  
Status : Answered  
Chosen Option : 3

**Q.6 Select the most appropriate option to fill in the blank.**

We \_\_\_\_\_ learn to meet adversity gracefully.

- Ans  1. have
2. ought
3. had
4. must

Question ID : 26433051190  
Status : Answered  
Chosen Option : 4

**Q.7 Select the most appropriate meaning of the underlined idiom in the given sentence.**

I accidentally let the cat out of the bag about your promotion.

- Ans  1. To state the wrong facts
2. To reveal a secret
3. To say something unrealistic
4. To discourage someone

Question ID : 26433050595  
Status : Answered  
Chosen Option : 1

**Q.8** Select the option that will improve the underlined part of the given sentence. In case no improvement is needed, select 'No improvement required'.

He went to bed early to get up on time to attend his morning lecture.

- Ans
- 1. get up over time
  - 2. No improvement required
  - 3. get up for time
  - 4. get up at time

Question ID : 26433051317  
Status : Answered  
Chosen Option : 2

**Q.9** Select the option that will improve the underlined part of the sentence. In case no improvement is needed, select 'No improvement required'.

He sounded like he were to going cry.

- Ans
- 1. No improvement required
  - 2. were going to
  - 3. going to
  - 4. was going to

Question ID : 26433051090  
Status : Answered  
Chosen Option : 2

**Q.10** Parts of the following sentence have been given as options. One of them may contain an error. Select the part that contains the error from the given options. If you don't find any error, mark 'No error' as your answer.

Educators must roll up their sleeves and do a more best job of teaching critical thinking.

- Ans
- 1. Educators must roll up their sleeves
  - 2. No error
  - 3. and do a more best job
  - 4. of teaching critical thinking

Question ID : 26433050708  
Status : Answered  
Chosen Option : 3

**Q.11** Select the correctly spelt word.

- Ans
- 1. Rudimentry
  - 2. Concious
  - 3. Coalece
  - 4. Reliant

Question ID : 26433051769  
Status : Answered  
Chosen Option : 4

**Q.12** Select the option that will improve the underlined part of the given sentence. In case no improvement is needed, select 'No improvement required'.

Grammar is just a natural function of children's brains, and they apply it to whatever they find.

**Ans**  1. No improvement required

2. they applied them to

3. they apply them for

4. they apply that in

Question ID : 26433051751

Status : Answered

Chosen Option : 4

**Q.13** Select the most appropriate option to fill in the blank.

Can you please \_\_\_\_\_ this sauce over the pasta?

**Ans**  1. pore

2. power

3. pour

4. purr

Question ID : 26433050791

Status : Answered

Chosen Option : 3

**Q.14** Select the most appropriate option to fill in the blank.

We deplore the use of \_\_\_\_\_ against innocent people.

**Ans**  1. reduction

2. violence

3. gentleness

4. humour

Question ID : 26433051260

Status : Answered

Chosen Option : 2

**Q.15** Select the most appropriate synonym of the given word.

August

**Ans**  1. Imminent

2. Eminent

3. Permanent

4. Illicit

Question ID : 26433051485

Status : Answered

Chosen Option : 2

**Q.16** The following sentence has been divided into parts. One of them may contain an error. Select the part that contains the error from the given options. If you don't find any error, mark 'No error' as your answer.

The panel will / investigate the allegations / owing to the concerned officials.

- Ans  1. investigate the allegations  
 2. owing to the concerned officials  
 3. The panel will  
 4. No error

Question ID : 26433051643  
Status : Answered  
Chosen Option : 2

**Q.17** Select the most appropriate option to fill in the blank.

A \_\_\_\_\_ body will fight off the illness naturally without any medicine.

- Ans  1. happy  
 2. healthy  
 3. flabby  
 4. fresh

Question ID : 26433051780  
Status : Answered  
Chosen Option : 2

**Q.18** Select the most appropriate synonym of the given word.

**Mandate**

- Ans  1. Question  
 2. Request  
 3. Enquire  
 4. Command

Question ID : 26433051659  
Status : Answered  
Chosen Option : 4

**Q.19** Select the most appropriate ANTONYM of the underlined word in the given sentence.

I do not feel it is a laudable plan.

- Ans  1. noticeable  
 2. precious  
 3. commendable  
 4. disrespected

Question ID : 26433051042  
Status : Answered  
Chosen Option : 4

**Q.20** Select the most appropriate option to fill in the blank.

India continues to \_\_\_\_\_ the highest amount of e-waste, more than China, the US, Japan and Germany.

Ans  1. generate

2. remake

3. stake

4. select

Question ID : 26433051493

Status : Answered

Chosen Option : 1

**Comprehension:**

In the following passage, some words have been deleted. Read the passage carefully and select the most appropriate option to fill in each blank.

Words convey meaning, because they are used in human activities in different forms. Different words may (1) \_\_\_\_\_ the same thing in different languages and this is what is referred to as 'family resemblance.' In other words, languages help us (2) \_\_\_\_\_ reality and then communicate it to others. There are tens and thousands of languages in the world and all of them help us (3) \_\_\_\_\_ express ourselves, which in turn, gives meaning to our life. One's mother tongue is (4) \_\_\_\_\_ for one's literary growth, but if you want to communicate to a wider audience, then you will (5) \_\_\_\_\_ to reach out to the target audience in a language they understand.

**SubQuestion No : 21**

**Q.21** Select the most appropriate option to fill in blank number 1.

Ans  1. meaningful

2. meaning

3. mean

4. meant

Question ID : 26433051478

Status : Answered

Chosen Option : 3

**Comprehension:**

In the following passage, some words have been deleted. Read the passage carefully and select the most appropriate option to fill in each blank.

Words convey meaning, because they are used in human activities in different forms. Different words may (1) \_\_\_\_\_ the same thing in different languages and this is what is referred to as 'family resemblance.' In other words, languages help us (2) \_\_\_\_\_ reality and then communicate it to others. There are tens and thousands of languages in the world and all of them help us (3) \_\_\_\_\_ express ourselves, which in turn, gives meaning to our life. One's mother tongue is (4) \_\_\_\_\_ for one's literary growth, but if you want to communicate to a wider audience, then you will (5) \_\_\_\_\_ to reach out to the target audience in a language they understand.

**SubQuestion No : 22**

**Q.22** Select the most appropriate option to fill in blank number 2.

- Ans  1. commend  
 2. depend  
 3. comprehend  
 4. amend

Question ID : 26433051479

Status : Answered

Chosen Option : 3

**Comprehension:**

In the following passage, some words have been deleted. Read the passage carefully and select the most appropriate option to fill in each blank.

Words convey meaning, because they are used in human activities in different forms. Different words may (1) \_\_\_\_\_ the same thing in different languages and this is what is referred to as 'family resemblance.' In other words, languages help us (2) \_\_\_\_\_ reality and then communicate it to others. There are tens and thousands of languages in the world and all of them help us (3) \_\_\_\_\_ express ourselves, which in turn, gives meaning to our life. One's mother tongue is (4) \_\_\_\_\_ for one's literary growth, but if you want to communicate to a wider audience, then you will (5) \_\_\_\_\_ to reach out to the target audience in a language they understand.

**SubQuestion No : 23**

**Q.23** Select the most appropriate option to fill in blank number 3.

- Ans  1. retrospectively  
 2. secretly  
 3. effectively  
 4. lately

Question ID : 26433051480

Status : Answered

Chosen Option : 3

**Comprehension:**

In the following passage, some words have been deleted. Read the passage carefully and select the most appropriate option to fill in each blank.

Words convey meaning, because they are used in human activities in different forms. Different words may (1) \_\_\_\_\_ the same thing in different languages and this is what is referred to as 'family resemblance.' In other words, languages help us (2) \_\_\_\_\_ reality and then communicate it to others. There are tens and thousands of languages in the world and all of them help us (3) \_\_\_\_\_ express ourselves, which in turn, gives meaning to our life. One's mother tongue is (4) \_\_\_\_\_ for one's literary growth, but if you want to communicate to a wider audience, then you will (5) \_\_\_\_\_ to reach out to the target audience in a language they understand.

**SubQuestion No : 24**

**Q.24** Select the most appropriate option to fill in blank number 4.

- Ans  1. essential  
 2. unimportant  
 3. auspicious  
 4. silent

Question ID : 26433051481

Status : Answered

Chosen Option : 1

**Comprehension:**

In the following passage, some words have been deleted. Read the passage carefully and select the most appropriate option to fill in each blank.

Words convey meaning, because they are used in human activities in different forms. Different words may (1) \_\_\_\_\_ the same thing in different languages and this is what is referred to as 'family resemblance.' In other words, languages help us (2) \_\_\_\_\_ reality and then communicate it to others. There are tens and thousands of languages in the world and all of them help us (3) \_\_\_\_\_ express ourselves, which in turn, gives meaning to our life. One's mother tongue is (4) \_\_\_\_\_ for one's literary growth, but if you want to communicate to a wider audience, then you will (5) \_\_\_\_\_ to reach out to the target audience in a language they understand.

**SubQuestion No : 25**

**Q.25** Select the most appropriate option to fill in blank number 5.

- Ans  1. have  
 2. should  
 3. has  
 4. had

Question ID : 26433051482

Status : Answered

Chosen Option : 1

Section : General Intelligence and Reasoning



Q.1 Select the option that is related to the third letter-cluster in the same way as the second letter-cluster is related to the first letter-cluster.

GRV : IUE :: XCB : ?

Ans  1. ZFY

2. YFX

3. ZEY

4. YEX

Question ID : 26433049076

Status : Answered

Chosen Option : 1

Q.2 Select the option that is related to the fifth number in the same way as the second number is related to the first number and the fourth number is related to the third number.

339 : 1022 :: 58 : 179 :: 25 : ?

Ans  1. 80

2. 70

3. 75

4. 125

Question ID : 26433048106

Status : Answered

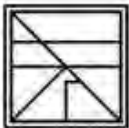
Chosen Option : 1

Q.3 Select the option figure in which the given figure is embedded (rotation is not allowed).



Ans

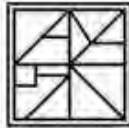
1.



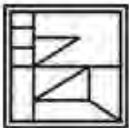
2.



3.



4.



Question ID : 26433048860

Status : Answered

Chosen Option : 3

**Q.4** Select the option in which the two numbers are related in the same way as are the numbers in the given number pairs.

23 : 529  
26 : 676

Ans  1. 24 : 576

2. 16 : 196

3. 18 : 400

4. 22 : 444

Question ID : 26433048842

Status : Answered

Chosen Option : 1

**Q.5** Select the option that is related to the third letter-cluster in the same way as the second letter-cluster is related to the first letter-cluster.

GRM : MGR :: PAR : ?

Ans  1. RPA

2. PRA

3. ARP


4. RAP

Question ID : 26433048999

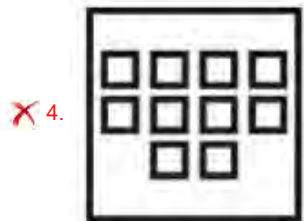
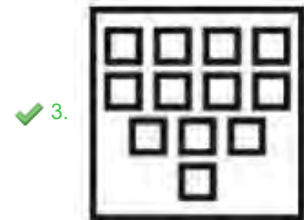
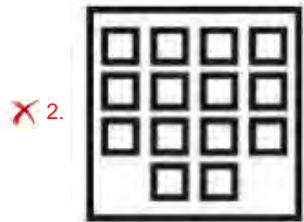

Status : Answered

Chosen Option : 1

Q.6 Select the figure among from the given options that can replace the question mark (?) in the following series.



Ans



Question ID : 26433049083  
 Status : Answered  
 Chosen Option : 3

Q.7 In a certain code language, 'HOPE' is written as 'KRSH', and 'RAGF' is written as 'UDJI'. How will 'MNCK' be written in that language?

- Ans
- ✗ 1. PQEM
  - ✓ 2. PQFN
  - ✗ 3. PQEN
  - ✗ 4. PQFM

Question ID : 26433048995  
 Status : Answered  
 Chosen Option : 2

**Q.8** Which two numbers (NOT digits) and two signs need to be interchanged to make the given equation correct?

$$35 \div 4 \times 48 + 70 - 10 = 40$$

- Ans
- 1. 35 and 48, - and +
  - 2. 70 and 10, + and -
  - 3. 4 and 48,  $\times$  and +
  - 4. 70 and 48,  $\div$  and  $\times$

Question ID : 26433048965

Status : Answered

Chosen Option : 4

**Q.9** Which two numbers should be interchanged to make the given equation correct?

$$9 + 6 \div 4 - 5 + 3 = 10$$

- Ans
- 1. 6 and 10
  - 2. 10 and 5
  - 3. 9 and 3
  - 4. 4 and 3

Question ID : 26433048110

Status : Answered

Chosen Option : 4

**Q.10** Select the option that is related to the fifth number in the same way as the second number is related to the first number and the fourth number is related to the third number.

$$29 : 31 :: 19 : 23 :: 31 : ?$$

- Ans
- 1. 37
  - 2. 43
  - 3. 47
  - 4. 41

Question ID : 26433049066

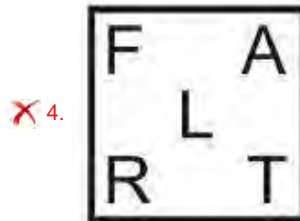
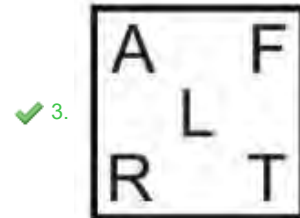
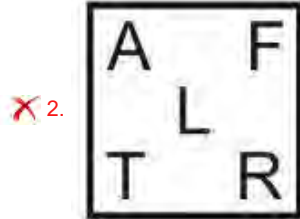
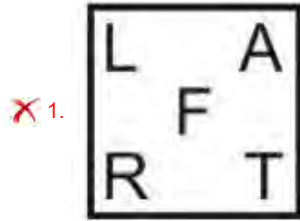
Status : Answered

Chosen Option : 1

Q.11 Select the figure from among the given options that can replace the question mark (?) in the following series.



Ans



Question ID : 26433048959  
Status : Answered  
Chosen Option : 3

Q.12 In a certain code language, 'PAINTS' is written as 'HGMRZK' and 'ROCKY' is written as 'BPXLI'. How will 'HUNTER' be written in that language?

- Ans
- 1. IUGMSF
  - 2. IVGMFS
  - 3. IVGMES
  - 4. IUGMFS

Question ID : 26433049047  
Status : Answered  
Chosen Option : 2

Q.13 Seven students Pawan, Aman, Raman, Sanam, Tanmay, Umang and Vikram took a series of tests. No two students got similar marks. Vikram scored just more than Pawan and Pawan scored just more than Aman. Raman and Tanmay scored the highest and the least marks but not necessarily in the same order. Umang's score was less than only Raman's score. Sanam's score was higher than only one person. Whose score was in between the scores of Pawan and Sanam?

- Ans
- 1. Vikram
  - 2. Umang
  - 3. Raman
  - 4. Aman

Question ID : 26433048103  
Status : Answered  
Chosen Option : 4

Q.14 Six boys G1, G2, G3, G4, G5 and G6 are sitting in a row facing towards the north (not necessarily in the same order). G4 is second to the right of G5. G2 is second to the left of G5. G3 is to the immediate left of G2. G6 is second to the right of G3. How many boys are sitting to the left of G6?

- Ans
- 1. 2
  - 2. 3
  - 3. 0
  - 4. 1

Question ID : 26433048955  
Status : Answered  
Chosen Option : 1

Q.15 Select the option that is related to the fifth alphanumeric-cluster in the same way as the second alphanumeric-cluster is related to the first alphanumeric-cluster and the fourth alphanumeric-cluster is related to the third alphanumeric-cluster.

STV20 : WXZ24 :: ABD2 : EFH6 :: IJL10 : ?

- Ans
- 1. MNP14
  - 2. MNO14
  - 3. NOP15
  - 4. NOQ15

Question ID : 26433048417  
Status : Answered  
Chosen Option : 1

**Q.16** Read the given statements and conclusions carefully. Assuming that the information given in the statements is true, even if it appears to be at variance with commonly known facts, decide which of the given conclusions logically follow(s) from the statements.

**Statements:**

- I. Some red are mouse.
- II. No grey is mouse.

**Conclusions:**

- I. All red are grey.
- II. No mouse is grey.

- Ans**
- 1. Only conclusion I follows
  - 2. None of the conclusions follow
  - 3. Both conclusions I and II follow
  - 4. Only conclusion II follows

Question ID : 26433048853

Status : Answered

Chosen Option : 4

**Q.17** Select the number from among the given options that can replace the question mark (?) in the following series.

48, 54, 45, 51, 42, 48, ?

- Ans**
- 1. 37
  - 2. 33
  - 3. 39
  - 4. 35

Question ID : 26433048943

Status : Answered

Chosen Option : 3

**Q.18** Read the given statements and conclusions carefully. Assuming that the information given in the statements is true, even if it appears to be at variance with commonly known facts, decide which of the given conclusions logically follow(s) from the statements.

**Statements:**

- I. Some cars are white.
- II. Some locks are white.

**Conclusions:**

- I. All white are locks.
- II. No car is a lock.
- III. All locks are cars.

- Ans**
- 1. All the conclusions follow
  - 2. Only conclusion III follows
  - 3. Only conclusion II follows
  - 4. None of the conclusions follow

Question ID : 26433049079

Status : Answered

Chosen Option : 3


Q.19 Select the letter-cluster from among the given options that can replace the question mark (?) in the following series.

TRO, RQM, PPK, NOI, ?

- Ans
- 1. LNH
  - 2. LMG
  - 3. LMH
  - 4. LNG

Question ID : 26433048977  
Status : Answered  
Chosen Option : 4

Q.20 Select the correct mirror image of the given figure when the mirror is placed at line AB as shown.



Ans

- 1.
- 2.
- 3.
- 4.

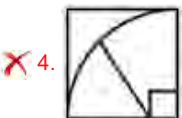
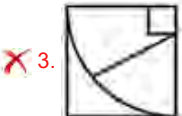
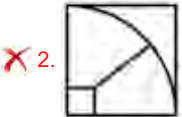
Question ID : 26433048240  
Status : Answered  
Chosen Option : 1



Q.21 Select the figure from the options that can replace the question mark (?) and complete the pattern. (rotation is not allowed)



Ans



Question ID : 26433049088

Status : Answered

Chosen Option : 1

Q.22 Six people Akshay, Anurag, Amit, Anubhav, Aryan and Ashish are sitting in a straight row facing North. Neither Akshay nor Amit are sitting at the corners. Amit and Anubhav are immediate neighbour of each other. Aryan is sitting second from the right corner. Only Akshay is sitting in between Anubhav and Ashish. Amit is sitting second to the left of Anurag. Who is sitting in between Anurag and Amit?

Ans ✗ 1. Ashish

✗ 2. Anubhav

✗ 3. Akshay

✓ 4. Aryan

Question ID : 26433048102

Status : Not Attempted and Marked For Review

Chosen Option : --

Q.23 In a certain code language, 'BAG' is coded as '71', and 'VICE' is coded as '69'. How will 'LIKE' be coded in that code language?

Ans ✓ 1. 71

✗ 2. 76

✗ 3. 68

✗ 4. 65

Question ID : 26433048421

Status : Answered

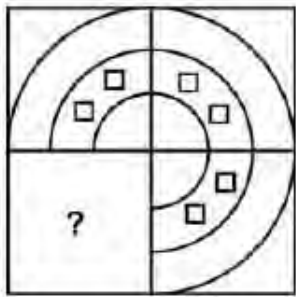
Chosen Option : 1

**Q.24** In a certain code language, if 'owl' is known as 'peacock', 'peacock' is known as 'cuckoo', 'cuckoo' is known as 'pigeon', and 'pigeon' is known as 'sparrow', then what would be the name of the bird that sings well?

- Ans**
- 1. Pigeon
  - 2. peacock
  - 3. sparrow
  - 4. Cuckoo

Question ID : **26433048470**  
 Status : **Answered**  
 Chosen Option : 1

**Q.25** Select the option that can replace the question mark (?) in the given figure and complete the pattern (rotation is not allowed).



**Ans**

- 1.
- 2.
- 3.
- 4.

Question ID : **26433048367**  
 Status : **Answered**  
 Chosen Option : 2

Q.1 Ram invested 45% of his salary in a scheme for 3 years which offers 10% per annum compound interest, compounded annually. If he receives ₹5,958 as total interest, then find Ram's salary?

- Ans
- 1. ₹45,000
  - 2. ₹50,000
  - 3. ₹36,000
  - 4. ₹40,000

Question ID : 26433050306  
Status : Answered  
Chosen Option : 4

Q.2 The length of the longest diagonal that can be placed in a closed cube is  $50\sqrt{3}$  cm. What is the total surface area of this cube?

- Ans
- 1. 15000 cm<sup>2</sup>
  - 2. 10000 cm<sup>2</sup>
  - 3. 12000 cm<sup>2</sup>
  - 4. 6000 cm<sup>2</sup>

Question ID : 26433049760  
Status : Not Attempted and Marked For Review  
Chosen Option : --

Q.3 Kanti and Jiya together can finish a work in 3 days. If Jiya alone can finish the work in 6 days, then in how many days can Kanti alone finish the work?

- Ans
- 1. 4 days
  - 2. 6 days
  - 3. 10 days
  - 4. 8 days

Question ID : 26433050436  
Status : Answered  
Chosen Option : 2

Q.4 A train P travelling at a speed of 15 m/s is able to cross a platform of 200 meter length completely in 30 seconds. Approximately how long will it take train P to cross a man who is coming towards the train on his bike at a speed of 27 km/h? [Note: Ignore the length of the bike.]

- Ans
- 1. 15 sec
  - 2. 11.1 sec
  - 3. 16.7 sec
  - 4. 18.3 sec

Question ID : 26433050283  
Status : Answered  
Chosen Option : 2

Q.5 Arpit completes a journey in 10 hours. He covers half of the distance at 30 km/h, and the remaining half of the distance at 70 km/h. What is the length of the journey?

- Ans
- 1. 500 km
  - 2. 210 km
  - 3. 320 km
  - 4. 420 km

Question ID : 26433049459  
Status : Answered  
Chosen Option : 4

Q.6 A man divides a certain sum among his wife, his son and his daughter. His wife gets 45% of the sum, his son gets 30% of the sum, and his daughter gets the remaining ₹6,25,000. What amount did the wife get?

- Ans
- 1. ₹5,00,000
  - 2. ₹11,25,000
  - 3. ₹7,50,000
  - 4. ₹6,25,000

Question ID : 26433049325  
Status : Answered  
Chosen Option : 2

Q.7 What should come in place of the question mark (?) in the following equation?

$$(?)^2 + ? + 12^3 = 13^2 + 22^2 + 2715$$

- Ans
- 1. 38
  - 2. 40
  - 3. 34
  - 4. 50

Question ID : 26433050393  
Status : Answered  
Chosen Option : 2

Q.8 The average weight of nine persons is 25 kg. If a new person joins this group, then the average weight becomes 26 kg. What is the weight of the new person?

- Ans
- 1. 35 kg
  - 2. 28 kg
  - 3. 34 kg
  - 4. 30 kg

Question ID : 26433049752  
Status : Answered  
Chosen Option : 1

Q.9 Venus marked an article at 60% above its cost price. She sold it at a profit of 20%. Find the discount percentage offered on the article.

- Ans
- 1. 40%
  - 2. 15%
  - 3. 25%
  - 4. 75%

Question ID : 26433050303  
Status : Answered  
Chosen Option : 3

Q.10 The number of adults who come only to walk in a park every day is 140. 18% of the adults come only to accompany their children in the park. 54% of the adults come only to run in the park. What is the total number of adults who come to the park every day (if the adults come for no other activity other than for the given reasons)?

- Ans
- 1. 400
  - 2. 700
  - 3. 500
  - 4. 560

Question ID : 26433050375  
Status : Not Attempted and Marked For Review  
Chosen Option : --

Q.11 Ramesh incurred a loss of 10% after selling a phone. If he had sold the phone for ₹1,260 more, then he would have made a profit of 5%. What is the cost price of the phone?

- Ans
- 1. ₹8,600
  - 2. ₹8,000
  - 3. ₹9,000
  - 4. ₹8,400

Question ID : 26433050402  
Status : Answered  
Chosen Option : 4

Q.12 The sum of the lengths of the radius and the diameter of a circle is 84 cm. What is the difference between the lengths of the circumference and the radius of this circle? [Use  $\pi = \frac{22}{7}$ ]

- Ans
- 1. 156 cm
  - 2. 172 cm
  - 3. 148 cm
  - 4. 128 cm

Question ID : 26433049961  
Status : Answered  
Chosen Option : 3

- Q.13 The following table shows a survey conducted in the schools of a city. This survey shows the type of activities teenagers (age 13 to 19 years) are involved in during their leisure time.

Activities	Distribution of leisure time
Cell phone	25%
Friends	30%
Net surfing	20%
Watching TV	20%
Playing sports	5%

If a teenager has 6 hours of leisure time in a day, then how much time does he/she spend daily on net surfing?

- Ans
- 1. 2 hours 30 minutes
  - 2. 2 hours 12 minutes
  - 3. 1 hour 15 minutes
  - 4. 1 hour 12 minutes

Question ID : 26433049462  
Status : Answered  
Chosen Option : 4

- Q.14 470 liters of a mixture of milk and water contains 5% of water. A mischievous boy added some water in the mixture and now there is 6% water in the new mixture. Find the quantity of water added by the boy in the mixture.

- Ans
- 1. 6 litres
  - 2. 8 litres
  - 3. 5 litres
  - 4. 10 litres

Question ID : 26433050297  
Status : Answered  
Chosen Option : 3

- Q.15 The value of  $30\%$  of  $680 + 2\frac{3}{11}$  of  $1331$  is:

- Ans
- 1. 3230
  - 2. 3229
  - 3. 3231
  - 4. 3225

Question ID : 26433050269  
Status : Answered  
Chosen Option : 2

Q.16 Three numbers, a, b, and c are said to be in continued proportion if  $a : b :: b : c$ . What number must be added to each of the numbers 1, 7 and 25 so that the resulting sums, in that order, may be in continued proportion?

- Ans
- 1. 2
  - 2. 4
  - 3. 6
  - 4. 5

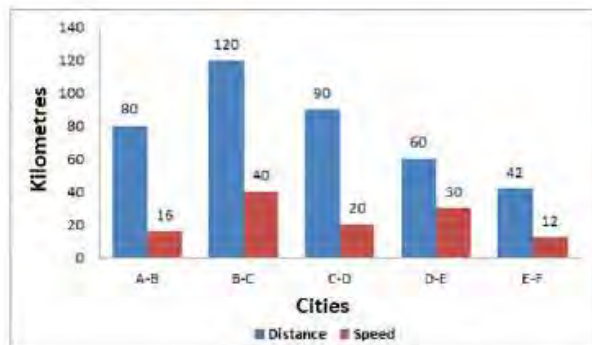
Question ID : 26433049454

Status : Answered

Chosen Option : 1

Q.17 Study the given bar-graph and answer the question the follows.

The bar-graph shows the distance (in km) between two cities and speeds (in km/h) of a person to cover the respective distances.



What is the approximate average speed of the person while travelling from city A to city F?

- Ans
- 1. 28.55 km/h
  - 2. 23.91 km/h
  - 3. 21.78 km/h
  - 4. 19.47 km/h

Question ID : 26433050288

Status : Answered

Chosen Option : 2

Q.18 Anusha purchased a television and a camera for ₹12,000 and ₹8,000, respectively. She sold the television at a loss of 10 per cent, and the camera at a profit of 12 per cent. What was her overall loss/profit?

- Ans
- 1. ₹240 profit
  - 2. ₹450 loss
  - 3. ₹240 loss
  - 4. ₹450 profit

Question ID : 26433050176

Status : Answered

Chosen Option : 3

Q.19 The larger diagonal of a rhombus is 150% of its smaller diagonal, and its area is  $432 \text{ cm}^2$ . Find the length (in cm) of the side of the rhombus?

- Ans
- 1.  $8\sqrt{13}$
  - 2.  $4\sqrt{13}$
  - 3.  $6\sqrt{13}$
  - 4.  $2\sqrt{13}$

Question ID : 26433050415

Status : Not Attempted and Marked For Review

Chosen Option : --

Q.20 There are two numbers such that the first number is 5 times of the second number. If the difference between the first and the second numbers is 120, then what is the average of these two numbers?

- Ans
- 1. 90
  - 2. 80
  - 3. 95
  - 4. 85

Question ID : 26433049953

Status : Answered

Chosen Option : 1

Q.21 A alone can do a piece of work in 10 days. B alone can do the same work in 12 days. They work on alternate days starting with A. In how many days will they complete  $\frac{3}{4}$  of the total work?

- Ans
- 1.  $\frac{47}{3}$  days
  - 2.  $\frac{50}{3}$  days
  - 3.  $\frac{53}{6}$  days
  - 4.  $\frac{49}{6}$  days

Question ID : 26433049693

Status : Answered

Chosen Option : 4

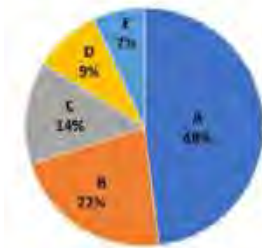


**Q.22** Raja borrowed ₹15,000 on simple interest at the rate of 13% per annum and lent it on compound interest at the rate of 15% per annum, compounded annually. What is Raja's gain in two years?

- Ans
- 1. ₹1,080.00
  - 2. ₹1,125.00
  - 3. ₹937.50
  - 4. ₹865.50

Question ID : 26433050182  
Status : Answered  
Chosen Option : 3

**Q.23** The given pie chart represents the distribution of the percentage of sales of a particular brand of bike from five showrooms, A, B, C, D and E, during 2021. The total number of bikes sold during that year from the five showrooms is 6000.



What is the total number of bikes sold from showrooms C and D?

- Ans
- 1. 1550
  - 2. 1280
  - 3. 1380
  - 4. 1640

Question ID : 26433050414  
Status : Answered  
Chosen Option : 3

**Q.24** A household of three humans has cats and dogs in the ratio 1:2. If the total number of legs in the household is 42, what is the total number of cats in the household?

- Ans
- 1. 12
  - 2. 6
  - 3. 9
  - 4. 3

Question ID : 26433050279  
Status : Answered  
Chosen Option : 4

Q.25 What is the least number which, when divided by 60, 84, and 96, leaves remainders of 28, 52, and 64, respectively?

- Ans
- 1. 3318
  - 2. 3360
  - 3. 3392
  - 4. 3328

Question ID : 26433050170  
Status : Answered  
Chosen Option : 3

Section : General Awareness

Q.1 Sangrai is a folk dance of which state of India?

- Ans
- 1. Bihar
  - 2. Tripura
  - 3. Karnataka
  - 4. Goa

Question ID : 26433047670  
Status : Answered  
Chosen Option : 2

Q.2 India's southern neighbours across the sea consist of \_\_\_\_ island countries.

- Ans
- 1. three
  - 2. four
  - 3. five
  - 4. two

Question ID : 26433047355  
Status : Not Answered  
Chosen Option : --

Q.3 Tipu Sultan became the ruler of Mysore in \_\_\_\_\_.

- Ans
- 1. 1765
  - 2. 1782
  - 3. 1775
  - 4. 1762

Question ID : 26433047684  
Status : Answered  
Chosen Option : 3

**Q.4 'Courage and Conviction : An Autobiography' is the autobiography of which of the following persons?**

- Ans**  1. Yogesh Kumar Joshi  
 2. Dalbir Singh Suhag  
 3. Manoj Mukund Naravane  
 4. VK Singh

Question ID : **26433047710**  
Status : **Answered**  
Chosen Option : **2**

**Q.5 Which of the following festivals is associated with the Kamakhya temple of Guwahati?**

- Ans**  1. Ambubachi Festival  
 2. Mando Festival  
 3. Majuli Festival  
 4. Sunburn festival

Question ID : **26433046846**  
Status : **Answered**  
Chosen Option : **4**

**Q.6 Which of the following states has bi-cameral Legislature as of March 2022?**

- Ans**  1. Odisha  
 2. Gujarat  
 3. Karnataka  
 4. Kerala

Question ID : **26433047717**  
Status : **Answered**  
Chosen Option : **1**

**Q.7 Which of the following states launched the 'Mukhyamantri Ration Aapke Dwar Yojana' in October 2021?**

- Ans**  1. Punjab  
 2. Uttarakhand  
 3. Jharkhand  
 4. Madhya Pradesh

Question ID : **26433047568**  
Status : **Answered**  
Chosen Option : **1**

**Q.8** What is a measure of the moisture present in air called?

- Ans
- 1. Opacity
  - 2. Abrasion
  - 3. Precipitation
  - 4. Humidity

Question ID : **26433047576**  
Status : **Answered**  
Chosen Option : **4**

**Q.9** Which Article of the Constitution of India under the Directive Principles of State Policy talks about organisation of village panchayats?

- Ans
- 1. Article 40
  - 2. Article 48
  - 3. Article 43
  - 4. Article 39A

Question ID : **26433047588**  
Status : **Answered**  
Chosen Option : **3**

**Q.10** The first census of Independent India was conducted in \_\_\_\_\_.

- Ans
- 1. 1956
  - 2. 1953
  - 3. 1951
  - 4. 1948

Question ID : **26433047154**  
Status : **Not Answered**  
Chosen Option : **--**

**Q.11** Articles \_\_\_\_\_ in Part VI of the Constitution deal with the components of state legislature.

- Ans
- 1. 168 to 212
  - 2. 198 to 220
  - 3. 112 to 175
  - 4. 134 to 198

Question ID : **26433047814**  
Status : **Answered**  
Chosen Option : **1**

Q.12 In which language did Banabhatta compose Harshacharita?

Ans  1. Sanskrit

2. Pali

3. Tamil

4. Prakrit

Question ID : 26433047706

Status : Answered

Chosen Option : 2

Q.13 Which of the following statements is correct?

I. Converting plant and animal waste including that from kitchen into manure is called composting.

II. The method of making compost from kitchen garbage using redworms is called vermicomposting.

Ans  1. Only I is correct.

2. Neither I nor II is correct.

3. Both I and II are correct.

4. Only II is correct.

Question ID : 26433047675

Status : Answered

Chosen Option : 4

Q.14 TH Vinayakram is associated with which musical instrument?

Ans  1. Dholak

2. Sarod

3. Tabla

4. Ghatam

Question ID : 26433047711

Status : Not Answered

Chosen Option : --

Q.15 Which of the following is NOT a tributary of the Indus river?

Ans  1. Son

2. Kabul

3. Gilgit

4. Shyok

Question ID : 26433047803

Status : Answered

Chosen Option : 1

Q.16 \_\_\_\_\_ won the ICC Women's Cricket World Cup 2022.

- Ans  1. New Zealand  
 2. Australia  
 3. India  
 4. England

Question ID : 26433046741  
Status : Answered  
Chosen Option : 2

Q.17 Who said, 'One caste, one religion, one God for humankind'?

- Ans  1. Jyotirao Phule  
 2. Mahatma Gandhi  
 3. Shree Narayana Guru  
 4. Dr. Rajendra Prasad

Question ID : 26433047808  
Status : Not Answered  
Chosen Option : --

Q.18 The North-South corridor of the Golden Quadrilateral Super Highways links Srinagar and \_\_\_\_\_.

- Ans  1. Kanchipuram  
 2. Kozhikode  
 3. Kannur  
 4. Kanyakumari

Question ID : 26433047577  
Status : Answered  
Chosen Option : 4

Q.19 Which of the following is the correct chronological order of early Turkish rulers who ruled over Delhi from the year 1206 to 1290?

- Ans  1. Qutubuddin Aybak, Shamsuddin Illutmish, Raziya  
 2. Raziya, Shamsuddin Illutmish, Qutubuddin Aybak  
 3. Qutubuddin Aybak, Raziya, Shamsuddin Illutmish  
 4. Shamsuddin Illutmish, Raziya, Qutubuddin Aybak

Question ID : 26433047582  
Status : Answered  
Chosen Option : 1

**Q.20 Which cell organelle performs the principal function of packaging materials?**

- Ans  1. Endoplasmic reticulum  
 2. Golgi apparatus  
 3. Lysosome  
 4. Vacuoles

Question ID : 26433047799  
Status : Answered  
Chosen Option : 2

**Q.21 Pushkar lake is situated in which district of Rajasthan?**

- Ans  1. Jaipur  
 2. Ajmer  
 3. Bikaner  
 4. Alwar

Question ID : 26433047572  
Status : Answered  
Chosen Option : 2

**Q.22 Who among the following won the first ever individual Olympic medal for India?**

- Ans  1. Rajyavardhan Rathore  
 2. PT Usha  
 3. Khashaba Jadhav  
 4. Abhinav Bindra

Question ID : 26433047791  
Status : Answered  
Chosen Option : 2

**Q.23 In February 2022, beverage maker Coca-Cola signed \_\_\_\_\_ as the brand ambassador for Thums Up.**

- Ans  1. Mahendra Singh Dhoni  
 2. Ranveer Singh  
 3. Akshay Kumar  
 4. Shah Rukh Khan

Question ID : 26433047694  
Status : Answered  
Chosen Option : 2

**Q.24 'Padma Vibhushan' winner Pandit Birju Maharaj was a famous \_\_\_\_\_ dancer.**

- Ans  1. Odissi  
 2. Kathak  
 3. Bharatanatyam  
 4. Manipuri

Question ID : 26433047812  
Status : Answered  
Chosen Option : 2

**Q.25** What chemical element does 'H' stand for in the science periodic table?

- Ans  1. Helium  
 2. Hydrogen  
 3. Holmium  
 4. Mercury

Question ID : **26433046848**  
Status : **Answered**  
Chosen Option : **2**