

## SSC MTS 2023 Tier 1 Sept 11 Shift 1 Question Paper with Answers

Roll Number	
Candidate Name	
Exam Date	11/09/2023
Exam Time	9:00 AM - 11:00 AM
Subject	MTS Non Tech Havaladar CBIC and CBN Examination 2023

Section : Numerical and Mathematical Ability

**Q.1** If the selling price of 16 bulbs is equal to the cost price of 24 bulbs, what is the profit percentage?

- Ans  1. 40%
2. 50%
3. 25%
4. 20%

Question ID : 264330161014

Option 1 ID : 264330631388

Option 2 ID : 264330631390

Option 3 ID : 264330631389

Option 4 ID : 264330631387

Status : Answered

Chosen Option : 2

**Q.2** If the manufacturer gains 10%, the wholesale dealer gains 12% and the retailer gains 15%, then find the cost production of a table, the retail price of which is ₹1,771.

- Ans  1. ₹1,150
2. ₹1,050
3. ₹1,250
4. ₹1,350

Question ID : 264330155998

Option 1 ID : 264330611393

Option 2 ID : 264330611391

Option 3 ID : 264330611392

Option 4 ID : 264330611394

Status : Answered

Chosen Option : 3

**Q.3** If the average of two numbers is 12 and the product of the same two numbers is 119, then the difference of those two numbers is:

- Ans
- 1. 7
  - 2. 6
  - 3. 10
  - 4. 8

Question ID : 264330156508  
Option 1 ID : 264330613420  
Option 2 ID : 264330613422  
Option 3 ID : 264330613421  
Option 4 ID : 264330613419  
Status : Answered  
Chosen Option : 3

**Q.4** Two cyclists start at the same time from opposite ends of a 200 km long straight road. One cyclist travels at a speed of 20 km/h and the other at a speed of 30 km/h. How long will it take them to meet?

- Ans
- 1. 5 hours
  - 2. 4 hours
  - 3. 5.5 hours
  - 4. 4.5 hours

Question ID : 264330156274  
Option 1 ID : 264330612497  
Option 2 ID : 264330612495  
Option 3 ID : 264330612498  
Option 4 ID : 264330612496  
Status : Answered  
Chosen Option : 2

**Q.5** A hollow metal sphere of internal and external radii 5 cm and 6 cm, respectively, is melted into a solid cone of base radius 5.2 cm. What is the height (in cm, rounded off to 1 decimal place) of the cone?

- Ans
- 1. 11.8
  - 2. 12.8
  - 3. 13.5
  - 4. 14.5

Question ID : 264330153794  
Option 1 ID : 264330602641  
Option 2 ID : 264330602639  
Option 3 ID : 264330602642  
Option 4 ID : 264330602640  
Status : Answered  
Chosen Option : 3

Q.6 If Rima's salary increases by 5% in the first year and by 2% in the next year, then what is the net percentage increase in her salary after two years?

- Ans
- 1. 6.1%
  - 2. 5.1%
  - 3. 8.1%
  - 4. 7.1%

Question ID : 264330156218

Option 1 ID : 264330612272

Option 2 ID : 264330612271

Option 3 ID : 264330612274

Option 4 ID : 264330612273

Status : Answered

Chosen Option : 4

Q.7 Mohan can complete a piece of work in 24 days. He worked for 6 days and left the work. Thereafter, Sohan finished the remaining work in 21 days. In how many days, can Mohan and Sohan together complete it?

- Ans
- 1.  $12\frac{12}{13}$  days
  - 2.  $12\frac{9}{13}$  days
  - 3.  $12\frac{11}{13}$  days
  - 4.  $12\frac{10}{13}$  days

Question ID : 264330156238

Option 1 ID : 264330612354

Option 2 ID : 264330612351

Option 3 ID : 264330612353

Option 4 ID : 264330612352

Status : Answered

Chosen Option : 1

Q.8 The volume (in  $\text{cm}^3$ ) of a sphere with diameter 7 cm is:

Take  $\pi = \frac{22}{7}$

- Ans
- 1. 179.66
  - 2. 168.44
  - 3. 197.66
  - 4. 186.44

Question ID : 264330156368

Option 1 ID : 264330612873

Option 2 ID : 264330612874

Option 3 ID : 264330612871

Option 4 ID : 264330612872

Status : Answered

Chosen Option : 1

Q.9 In a fort, 160 men had food for 94 days. After 10 days, 20 men left the fort. How long (in days) would the food last at the same rate?

- Ans
- 1. 84
  - 2. 90
  - 3. 96
  - 4. 100

Question ID : 264330156495  
Option 1 ID : 264330613368  
Option 2 ID : 264330613370  
Option 3 ID : 264330613369  
Option 4 ID : 264330613367  
Status : Answered  
Chosen Option : 3

Q.10 What sum of money (in ₹) will earn an interest of ₹1,800 at the rate of 6% per annum simple interest in five years?

- Ans
- 1. 18,000
  - 2. 6,000
  - 3. 8,000
  - 4. 5,000

Question ID : 264330156484  
Option 1 ID : 264330613326  
Option 2 ID : 264330613323  
Option 3 ID : 264330613325  
Option 4 ID : 264330613324  
Status : Answered  
Chosen Option : 2

Q.11 If the ratio among the time taken by three cars to travel a certain distance is 2 : 3 : 5, then the ratio of speeds of these cars will be.

- Ans
- 1. 10 : 6 : 15
  - 2. 15 : 9 : 8
  - 3. 10 : 15 : 8
  - 4. 15 : 10 : 6

Question ID : 264330156292  
Option 1 ID : 264330612567  
Option 2 ID : 264330612570  
Option 3 ID : 264330612568  
Option 4 ID : 264330612569  
Status : Answered  
Chosen Option : 4

Q.12 The fourth proportion of 2, a and 5a is \_\_\_\_\_.

Ans

1.  $\frac{2a^2}{5}$

2.  $\frac{5a^2}{2}$

3.  $\frac{2a^2}{3}$

4.  $\frac{5a^2}{3}$

Question ID : 264330153809

Option 1 ID : 264330602702

Option 2 ID : 264330602701

Option 3 ID : 264330602699

Option 4 ID : 264330602700

Status : Answered

Chosen Option : 2

Q.13 Find the LCM of 1288, 230, 276.

Ans

1. 19,320

2. 19,230

3. 9,660

4. 6,440

Question ID : 264330156092

Option 1 ID : 264330611768

Option 2 ID : 264330611767

Option 3 ID : 264330611769

Option 4 ID : 264330611770

Status : Answered

Chosen Option : 1

Q.14 Study the following table and answer the question given below it.  
Distribution of students according to professional courses.

S.No	Course	Faculty			
		Arts		Science	
		Girls	Boys	Girls	Boys
1.	Business Management	25	45	25	65
2.	Type-writing	23	186	20	32
3.	Costing	25	120	12	58
4.	Typewriting & Costing	12	100	3	5

The percentage of students of Arts faculty doing costing only is (round to the nearest integer):

Ans

1. 18

2. 15

3. 10

4. 27

Question ID : 264330156351

Option 1 ID : 264330612805

Option 2 ID : 264330612804

Option 3 ID : 264330612803

Option 4 ID : 264330612806

Status : Answered

Chosen Option : 4

Q.15 In some quantity of water, four times the quantity of milk is added and the quantity of the mixture is now 7.5 litres. How much more milk is to be added to the mixture to have 90% milk in the mixture ?

- Ans
- 1. 9 liters
  - 2. 9.5 liters
  - 3. 6 liters
  - 4. 7.5 liters

Question ID : 264330153800

Option 1 ID : 264330602665

Option 2 ID : 264330602666

Option 3 ID : 264330602663

Option 4 ID : 264330602664

Status : Answered

Chosen Option : 4

Q.16 Evaluate  $3\frac{1}{2} - [2\frac{1}{4} \div \{1\frac{1}{4} - \frac{3}{4}(1\frac{1}{2} - \frac{1}{2} - 2\frac{1}{2})\}] :$

- Ans
- 1.  $1\frac{21}{38}$
  - 2.  $2\frac{19}{18}$
  - 3.  $2\frac{21}{38}$
  - 4.  $\frac{47}{38}$

Question ID : 264330154038

Option 1 ID : 264330603618

Option 2 ID : 264330603615

Option 3 ID : 264330603616

Option 4 ID : 264330603617

Status : Answered

Chosen Option : 3

Q.17 Arvind, Bilal, Carmen invest ₹49,000 towards a business. Arvind invests ₹5,000 more than Bilal and Bilal invests ₹4,000 more than Carmen. Out of a total profit of ₹98,000, how much does Bilal receive?

- Ans
- 1. ₹34,400
  - 2. ₹33,200
  - 3. ₹30,500
  - 4. ₹32,000

Question ID : 264330156108

Option 1 ID : 264330611831

Option 2 ID : 264330611834


Option 3 ID : 264330611833

Option 4 ID : 264330611832

Status : Answered

Chosen Option : 4

Q.18 The bar graph shows the average marks scored in Mathematics examination (out of 100) by students of 6 divisions of XII<sup>th</sup> standard.



What is the ratio of the average marks scored by Division B to Division D?

- Ans
- 1. 9 : 13
  - 2. 1 : 3
  - 3. 13 : 9
  - 4. 1 : 9

Question ID : 264330154101  
Option 1 ID : 264330603867  
Option 2 ID : 264330603869  
Option 3 ID : 264330603868  
Option 4 ID : 264330603870  
Status : Answered  
Chosen Option : 1

Q.19 An amount of ₹2,000 amounts to ₹2,880 in 2 years. What will be the rate of interest if compounded annually?

- Ans
- 1. 12%
  - 2. 28%
  - 3. 10%
  - 4. 20%

Question ID : 264330154054  
Option 1 ID : 264330603682  
Option 2 ID : 264330603680  
Option 3 ID : 264330603679  
Option 4 ID : 264330603681  
Status : Answered  
Chosen Option : 4

Q.20 The average weight of some students in class 12th was 56 kg. When seven students whose average weight was 58 kg joined the class, the average weight of all the students increased by 200 gm. Find the number of students in the class in the beginning?

- Ans
- 1. 56
  - 2. 77
  - 3. 49
  - 4. 63

Question ID : 264330156548  
Option 1 ID : 264330613580  
Option 2 ID : 264330613582  
Option 3 ID : 264330613579  
Option 4 ID : 264330613581  
Status : Answered  
Chosen Option : 4



Q.1 What will come in the place of '?' in the following equation, if '+' and '-' are interchanged and '×' and '÷' are interchanged?

$$23 \div 2 + 41 - 84 \times 14 = ?$$

- Ans
- 1. 21
  - 2. 1
  - 3. 31
  - 4. 11

Question ID : 264330155668  
Option 1 ID : 264330610075  
Option 2 ID : 264330610078  
Option 3 ID : 264330610077  
Option 4 ID : 264330610076  
Status : Answered  
Chosen Option : 4

Q.2 In a certain code language, 'yes you can' is coded as 'an cf dt' and 'you are enough' is coded as 'sk dt hw'. How is 'you' coded in the given language?

- Ans
- 1. cf
  - 2. sk
  - 3. dt
  - 4. hw

Question ID : 264330151706  
Option 1 ID : 264330594451  
Option 2 ID : 264330594454  
Option 3 ID : 264330594452  
Option 4 ID : 264330594453  
Status : Answered  
Chosen Option : 3

Q.3 Read the given statements and conclusions carefully. You have to take the given statements to be true even if they seem to be at variance from commonly known facts. You have to decide which conclusion/s logically follow/s from the given statements.

Statements: All phones are flowers. Some flowers are bags. All bags are heavy.

Conclusion I: Some phones are flowers.

Conclusion II: All flowers are bags.

- Ans
- 1. Neither conclusion (I) nor (II) is follow.
  - 2. Both conclusions (I) and (II) are follow.
  - 3. Only conclusion (II) is follow.
  - 4. Only conclusion (I) is follow.

Question ID : 264330155907  
Option 1 ID : 264330611033  
Option 2 ID : 264330611034  
Option 3 ID : 264330611032  
Option 4 ID : 264330611031  
Status : Answered  
Chosen Option : 1



Q.4 The position of how many letters will remain unchanged if each of the letter in the word 'CHILDREN' is arranged in alphabetical order?

- Ans  1. One  
 2. Four  
 3. Three  
 4. Two

Question ID : 264330154328  
Option 1 ID : 264330604775  
Option 2 ID : 264330604776  
Option 3 ID : 264330604778  
Option 4 ID : 264330604777  
Status : Answered  
Chosen Option : 1

Q.5 Read the given statements and conclusions carefully. You have to take the given statements to be true even if they seem to be at variance from commonly known facts. You have to decide which conclusion/s logically follow/s from the given statements.

Statements: All torches are guitars. Some guitars are bulbs. No bulb is a stove.

Conclusion I: All bulbs are guitars.

Conclusion II: No guitar is a torch.

- Ans  1. Neither conclusion (I) nor (II) is follow.  
 2. Only conclusion (I) is follow.  
 3. Both conclusions (I) and (II) are follow.  
 4. Only conclusion (II) is follow.

Question ID : 264330155912  
Option 1 ID : 264330611053  
Option 2 ID : 264330611051  
Option 3 ID : 264330611054  
Option 4 ID : 264330611052  
Status : Answered  
Chosen Option : 1

Q.6 What will come in place of '?' in the following equation, if '+' and '-' are interchanged and '×' and '÷' are interchanged?

$$15 - 6 + 12 \times 3 \div 4 = ?$$

- Ans  1. 5  
 2. 10  
 3. 7  
 4. 9

Question ID : 264330154662  
Option 1 ID : 264330606112  
Option 2 ID : 264330606111  
Option 3 ID : 264330606114  
Option 4 ID : 264330606113  
Status : Answered  
Chosen Option : 1

Q.7 Select the combination of letters that when sequentially placed in the blanks of the given series, will complete the series.

NO \_ N \_ \_ NO \_ \_ ON

- Ans
- 1. NONNN
  - 2. OOONO
  - 3. ONOON
  - 4. NONON

Question ID : 264330151653  
Option 1 ID : 264330594241  
Option 2 ID : 264330594240  
Option 3 ID : 264330594242  
Option 4 ID : 264330594239  
Status : Answered  
Chosen Option : 1

Q.8 What should come in place of '?' in the given series?

4 19 79 319 1279 ?

- Ans
- 1. 4875
  - 2. 5299
  - 3. 4913
  - 4. 5119

Question ID : 264330151459  
Option 1 ID : 264330593463  
Option 2 ID : 264330593466  
Option 3 ID : 264330593464  
Option 4 ID : 264330593465  
Status : Answered  
Chosen Option : 4

Q.9 Six people, Deepak, Gauri, Babita, Ira, Farheen and Hema are sitting in a straight line, facing north. Deepak sits 2nd from the left end. Gauri sits 2nd to the right of Deepak. Ira sits 2nd to the right of Gauri. Farheen sits 3rd to the left of Ira. Babita sits 2nd to the left of Farheen. Who sits 3rd to the right of Deepak?

- Ans
- 1. Farheen
  - 2. Hema
  - 3. Babita
  - 4. Ira

Question ID : 264330155661  
Option 1 ID : 264330610050  
Option 2 ID : 264330610047  
Option 3 ID : 264330610049  
Option 4 ID : 264330610048  
Status : Answered  
Chosen Option : 2

Q.10 What should come in place of '?' in the given series?

5 23 95 ? 1535 6143 24575

- Ans  1. 383  
 2. 347  
 3. 312  
 4. 361

Question ID : 264330151493  
Option 1 ID : 264330593602  
Option 2 ID : 264330593600  
Option 3 ID : 264330593599  
Option 4 ID : 264330593601  
Status : Answered  
Chosen Option : 1

Q.11 Select the word-pair that best represents a similar relationship to the one expressed in the pair of words given below.

(The words must be considered as meaningful English words and must not be related to each other based on the number of letters/number of consonants/vowels in the word)

Legend : Map

- Ans  1. Volume : Guidebook  
 2. Glossary : Text  
 3. Column : Essay  
 4. Profession : Biography

Question ID : 264330154642  
Option 1 ID : 264330606031  
Option 2 ID : 264330606033  
Option 3 ID : 264330606034  
Option 4 ID : 264330606032  
Status : Answered  
Chosen Option : 1

Q.12 What should come in place of ? in the given series based on the English alphabetical order?

CSP, EUQ, GWR, IYS, ?

- Ans  1. JBS  
 2. LBT  
 3. KAT  
 4. JAR

Question ID : 264330155783  
Option 1 ID : 264330610536  
Option 2 ID : 264330610538  
Option 3 ID : 264330610535  
Option 4 ID : 264330610537  
Status : Answered  
Chosen Option : 3

Q.13 Find out the correct alternative that when filled in the blanks in the same sequence will make the series logically complete.

BK\_Y \_KUT R\_PO MKK\_ HK\_E

- Ans
- 1. WKBF
  - 2. WBHZP
  - 3. ZWKJF
  - 4. ZKWLF

Question ID : 264330154729  
Option 1 ID : 264330606379  
Option 2 ID : 264330606381  
Option 3 ID : 264330606382  
Option 4 ID : 264330606380  
Status : Answered  
Chosen Option : 3

Q.14 In a certain code language, 'BACK' is coded as '17' and 'DTDC' is coded as '31'. What is the code for 'JAAM' in the given code language?

- Ans
- 1. 35
  - 2. 20
  - 3. 40
  - 4. 25

Question ID : 264330155819  
Option 1 ID : 264330610680  
Option 2 ID : 264330610681  
Option 3 ID : 264330610682  
Option 4 ID : 264330610679  
Status : Answered  
Chosen Option : 4

Q.15 In the following number-pairs, the second number is obtained by applying certain mathematical operations to the first number. Select the set in which the numbers are related in the same way as are the numbers of the following sets.  
(NOTE: Operations should be performed on the whole numbers, without breaking down the numbers into its constituent digits. E.g. 13 – Operations on 13 such as adding / subtracting / multiplying etc. to 13 can be performed. Breaking down 13 into 1 and 3 and then performing mathematical operations on 1 and 3 is not allowed)

8, 128

9, 162

- Ans
- 1. 11, 124
  - 2. 14, 392
  - 3. 12, 149
  - 4. 13, 170

Question ID : 264330151619  
Option 1 ID : 264330594103  
Option 2 ID : 264330594106  
Option 3 ID : 264330594104  
Option 4 ID : 264330594105  
Status : Answered  
Chosen Option : 2

Q.16 Which figure should replace the question mark (?) if the following figure series were to be continued?

7	V	C	7	=	C	□	=					
=	↑	Z	Z	V	=	V	3	7	7	C	V	?
3	D	↑	3	Z	↑	3	Z					

Ans

✓ 1.

V	□	
C	Z	=
7	3	

✗ 2.

=	V	
C	Z	□
7	3	

✗ 3.

V	□	
3	7	=
Z	C	

✗ 4.

=	V	
3	7	□
Z	C	

Question ID : 264330154761

Option 1 ID : 264330606507

Option 2 ID : 264330606509

Option 3 ID : 264330606510

Option 4 ID : 264330606508

Status : Answered

Chosen Option : 1

Q.17 What should come in place of '?' in the given series?

11 59 299 1499 7499 ?

Ans ✗ 1. 38199

✗ 2. 37699

✓ 3. 37499

✗ 4. 38499

Question ID : 264330151469

Option 1 ID : 264330593505

Option 2 ID : 264330593504

Option 3 ID : 264330593503

Option 4 ID : 264330593506

Status : Answered

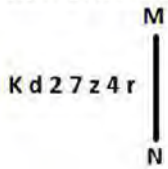
Chosen Option : 3

**Q.18** In the following number-pairs, the second number is obtained by applying certain mathematical operations to the first number. Select the set in which the numbers are related in the same way as are the numbers of the following sets.  
 (NOTE : Operations should be performed on the whole numbers, without breaking down the numbers into its constituent digits. E.g. 13 – Operations on 13 such as adding /deleting /multiplying etc. to 13 can be performed. Breaking down 13 into 1 and 3 and then performing mathematical operations on 1 and 3 is not allowed)  
 16 : 41  
 11 : 26

- Ans  1. 7 : 28  
 2. 5 : 15  
 3. 21 : 84  
 4. 12 : 29

Question ID : 264330154650  
 Option 1 ID : 264330606065  
 Option 2 ID : 264330606066  
 Option 3 ID : 264330606063  
 Option 4 ID : 264330606064  
 Status : Answered  
 Chosen Option : 4

**Q.19** Select the correct mirror image of the given figure when the mirror is placed at MN as shown below.



- Ans  1. K p 5 7 z 4 r  
 2. K q 5 7 z 4 r  
 3. K q 2 7 z 4 r  
 4. K q 5 7 z 4 r

Question ID : 264330151506  
 Option 1 ID : 264330593654  
 Option 2 ID : 264330593652  
 Option 3 ID : 264330593651  
 Option 4 ID : 264330593653  
 Status : Answered  
 Chosen Option : 2

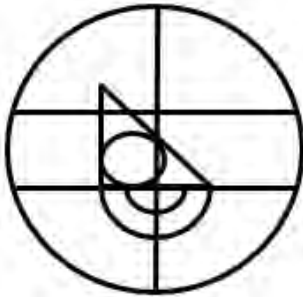
Q.20 Select the option figure in which the given figure (X) is embedded as its part (rotation is NOT allowed).



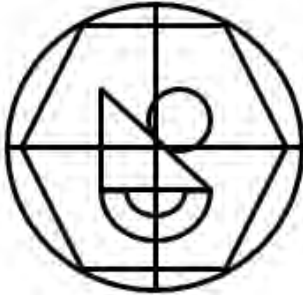
(X)

Ans

✗ 1.



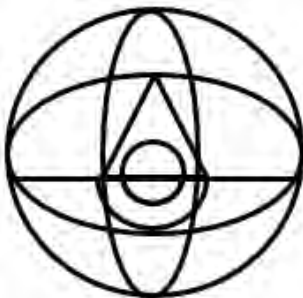
✗ 2.



✓ 3.



✗ 4.



Question ID : 264330151725

Option 1 ID : 264330594527

Option 2 ID : 264330594528

Option 3 ID : 264330594530

Option 4 ID : 264330594529

Status : Answered

Chosen Option : 3



**Q.1 What is the purpose of a savings account?**

- Ans  1. Obtaining a mortgage loan  
 2. Earning interest on deposits  
 3. Making day-to-day transactions  
 4. Paying bills online

Question ID : 264330157301  
Option 1 ID : 264330616569  
Option 2 ID : 264330616568  
Option 3 ID : 264330616567  
Option 4 ID : 264330616570  
Status : Answered  
Chosen Option : 3

**Q.2 According to the Census of India 2011, the female literacy rate was recorded as**

- Ans  1. 75.35%  
 2. 65.46%  
 3. 55.84%  
 4. 70.24%

Question ID : 264330161557  
Option 1 ID : 264330633557  
Option 2 ID : 264330633558  
Option 3 ID : 264330633555  
Option 4 ID : 264330633556  
Status : Answered  
Chosen Option : 2

**Q.3 Which of the following crops is most suitable for black soil?**

- Ans  1. Soybean  
 2. Maize  
 3. Cotton  
 4. Barley

Question ID : 264330161316  
Option 1 ID : 264330632591  
Option 2 ID : 264330632592  
Option 3 ID : 264330632594  
Option 4 ID : 264330632593  
Status : Answered  
Chosen Option : 3

**Q.4 In India, the 'Aus', 'Aman' and 'Boro' terms are associated with which crop from the following?**

- Ans  1. Wheat  
 2. Gram  
 3. Sugarcane  
 4. Paddy

Question ID : 264330161510  
Option 1 ID : 264330633367  
Option 2 ID : 264330633370  
Option 3 ID : 264330633369  
Option 4 ID : 264330633368  
Status : Answered  
Chosen Option : 4

Q.5 The President of India conferred the Padma Shri award to Gurcharan Singh for his distinguished service in the field of \_\_\_\_\_ in 2023.

- Ans  1. Tennis  
 2. Cricket  
 3. Football  
 4. Badminton

Question ID : 264330161443  
Option 1 ID : 264330633102  
Option 2 ID : 264330633099  
Option 3 ID : 264330633100  
Option 4 ID : 264330633101  
Status : Not Answered  
Chosen Option : --

Q.6 Who moved the resolution proposing that the National Flag of India be a 'horizontal tricolour of saffron, white and dark green in equal proportion'?

- Ans  1. Sardar Vallabhbhai Patel  
 2. Jawaharlal Nehru  
 3. Mahatma Gandhi  
 4. Dr Rajendra Prasad

Question ID : 264330161747  
Option 1 ID : 264330634317  
Option 2 ID : 264330634316  
Option 3 ID : 264330634315  
Option 4 ID : 264330634318  
Status : Answered  
Chosen Option : 2

Q.7 In which of the following States was the first Janjatiya Khel Mahotsav held?

- Ans  1. Odisha  
 2. Chhattisgarh  
 3. Jharkhand  
 4. Andhra Pradesh

Question ID : 264330161127  
Option 1 ID : 264330631839  
Option 2 ID : 264330631841  
Option 3 ID : 264330631840  
Option 4 ID : 264330631842  
Status : Answered  
Chosen Option : 3

Q.8 Identify the Indian singer who sang the song 'Ae mere watan ke logon jara akhon mein bharlo paani...' before the first Prime Minister of India, Pandit Jawaharlal Nehru.

- Ans  1. Lata Mangeshkar  
 2. Mohammad Rafi  
 3. Mukesh  
 4. Asha Bhosle

Question ID : 264330160980  
Option 1 ID : 264330631251  
Option 2 ID : 264330631254  
Option 3 ID : 264330631253  
Option 4 ID : 264330631252  
Status : Answered  
Chosen Option : 1

**Q.9 Which regulatory body in India is responsible for overseeing and regulating Micro Finance Institutions?**

- Ans
- 1. Securities and Exchange Board of India (SEBI)
  - 2. Small Industries Development Bank of India (SIDBI)
  - 3. Reserve Bank of India (RBI)
  - 4. National Bank for Agriculture and Rural Development (NABARD)

Question ID : 264330157285  
Option 1 ID : 264330616504  
Option 2 ID : 264330616505  
Option 3 ID : 264330616503  
Option 4 ID : 264330616506  
Status : Answered  
Chosen Option : 2

**Q.10 Who among the following was the viceroy of India at the time of India's independence from colonial rule on 15 August 1947?**

- Ans
- 1. Lord Wavell
  - 2. Lord Willingdon
  - 3. Lord Mountbatten
  - 4. Lord Linlithgow

Question ID : 264330160824  
Option 1 ID : 264330630628  
Option 2 ID : 264330630630  
Option 3 ID : 264330630627  
Option 4 ID : 264330630629  
Status : Answered  
Chosen Option : 3

**Q.11 Which of the following is the legislative organ of the Union Government?**

- Ans
- 1. Cabinet
  - 2. Supreme Court
  - 3. Executive
  - 4. Parliament

Question ID : 264330159920  
Option 1 ID : 264330627030  
Option 2 ID : 264330627029  
Option 3 ID : 264330627027  
Option 4 ID : 264330627028  
Status : Answered  
Chosen Option : 4

**Q.12 Due to rapid urbanisation, the human lifestyle has changed severely; obesity is a major health issue in such condition. Which of the following is a reason for obesity?**

- Ans
- 1. Excessive consumption of water
  - 2. Excessive intake of high calorie foods
  - 3. Lack of protein
  - 4. Lack of vitamins in regular diet

Question ID : 264330156610  
Option 1 ID : 264330613828  
Option 2 ID : 264330613827  
Option 3 ID : 264330613830  
Option 4 ID : 264330613829  
Status : Answered  
Chosen Option : 2

Q.13 Who won the Best Playback Singer (Male) award in the 68th Filmfare Awards 2023?

- Ans
- 1. Mohit Chauhan
  - 2. Shaan
  - 3. Arijit Singh
  - 4. Amit Mishra

Question ID : 264330155516  
Option 1 ID : 264330609467  
Option 2 ID : 264330609469  
Option 3 ID : 264330609468  
Option 4 ID : 264330609470  
Status : Answered  
Chosen Option : 3

Q.14 Where was Shree Narayana Dharma Paripalana Yogam founded?

- Ans
- 1. Tamil Nādu
  - 2. Kerala
  - 3. Karnataka
  - 4. Telangana

Question ID : 264330160890  
Option 1 ID : 264330630892  
Option 2 ID : 264330630891  
Option 3 ID : 264330630894  
Option 4 ID : 264330630893  
Status : Not Answered  
Chosen Option : --

Q.15 Who is the renowned kathak dancer, student of 'Pandit Birju Maharaj' and also served as an officer with Indian Audit and Accounts Services?

- Ans
- 1. Sonal Mansingh
  - 2. Guru Bipin Singh
  - 3. Shovana Narayan
  - 4. Padma Subrahmanayam

Question ID : 264330159063  
Option 1 ID : 264330623613  
Option 2 ID : 264330623611  
Option 3 ID : 264330623612  
Option 4 ID : 264330623614  
Status : Answered  
Chosen Option : 3

Q.16 Shama Bate received the Sangeet Natak Akademi Award-2021 (given in February 2023) for her contribution to which dance form of the following?

- Ans  1. Manipuri  
 2. Kathak  
 3. Bharatanatyam  
 4. Mohiniyattam

Question ID : 264330155518  
Option 1 ID : 264330609477  
Option 2 ID : 264330609476  
Option 3 ID : 264330609475  
Option 4 ID : 264330609478  
Status : Answered  
Chosen Option : 1

Q.17 Which of the following Indus Valley sites is now located in Pakistan?

- Ans  1. Harappa  
 2. Lothal  
 3. Alamgirpur  
 4. Kalibangan

Question ID : 264330162697  
Option 1 ID : 264330638108  
Option 2 ID : 264330638110  
Option 3 ID : 264330638107  
Option 4 ID : 264330638109  
Status : Answered  
Chosen Option : 1

Q.18 In April 2023, Satwiksairaj Rankireddy and Chirag Shetty made history, becoming the first Indian men's doubles pair to win a gold medal at the Badminton Asia Championships. Where was this championship held?

- Ans  1. Singapore  
 2. Dubai  
 3. Qatar  
 4. Malaysia

Question ID : 264330161153  
Option 1 ID : 264330631946  
Option 2 ID : 264330631944  
Option 3 ID : 264330631943  
Option 4 ID : 264330631945  
Status : Not Answered  
Chosen Option : --

Q.19 Which of the following states has introduced a dedicated Semiconductor Policy 2022-27 with a view to generate at least 2,00,000 new employment opportunities in the state?

- Ans  1. Andhra Pradesh  
 2. Maharashtra  
 3. Gujarat  
 4. Kerala

Question ID : 264330161409  
Option 1 ID : 264330632965  
Option 2 ID : 264330632963  
Option 3 ID : 264330632964  
Option 4 ID : 264330632966  
Status : Answered  
Chosen Option : 1

Q.20 The classical dance style of Bharatanatyam belongs to the state of \_\_\_\_\_.

- Ans  1. Karnataka  
 2. Tamil Nadu  
 3. Assam  
 4. Rajasthan

Question ID : 264330159049  
Option 1 ID : 264330623555  
Option 2 ID : 264330623556  
Option 3 ID : 264330623557  
Option 4 ID : 264330623558  
Status : Answered  
Chosen Option : 2

Q.21 Which of the following peninsular rivers of India is a west flowing river?

- Ans  1. Kaveri  
 2. Narmada  
 3. Godavari  
 4. Krishna

Question ID : 264330161496  
Option 1 ID : 264330633312  
Option 2 ID : 264330633314  
Option 3 ID : 264330633311  
Option 4 ID : 264330633313  
Status : Answered  
Chosen Option : 1

Q.22 Which Articles of the Constitution of India deal with the Union and its territory?

- Ans  1. Articles 5-11  
 2. Articles 1-4  
 3. Articles 12-35  
 4. Article 36-51

Question ID : 264330159894  
Option 1 ID : 264330626924  
Option 2 ID : 264330626923  
Option 3 ID : 264330626925  
Option 4 ID : 264330626926  
Status : Answered  
Chosen Option : 2

Q.23 'The Great Indian Novel' is a satirical novel by \_\_\_\_\_.

- Ans  1. Suryakant Tripathi  
 2. KR Narayan  
 3. Munshi Prem Chand  
 4. Shashi Tharoor

Question ID : 264330155496  
Option 1 ID : 264330609387  
Option 2 ID : 264330609388  
Option 3 ID : 264330609389  
Option 4 ID : 264330609390  
Status : Not Answered  
Chosen Option : --

Q.24 What is the systematic name of a colourless gas with a faint, ethereal odour called acetylene, widely used for welding?

- Ans  1. Ethyne  
 2. Ethanoic anhydride  
 3. Azoethane  
 4. Ethyl acetate

Question ID : 264330161050  
Option 1 ID : 264330631532  
Option 2 ID : 264330631533  
Option 3 ID : 264330631534  
Option 4 ID : 264330631531  
Status : Not Answered  
Chosen Option : --

Q.25 Identify the correct pair of novel and its writer from the following.

- Ans  1. Seven Summers - Mulk Raj Anand  
 2. The White Tiger - Kiran Desai  
 3. A Suitable Boy- Amitav Ghosh  
 4. The Inheritance of Loss -Aravind Adiga

Question ID : 264330155501  
Option 1 ID : 264330609409  
Option 2 ID : 264330609410  
Option 3 ID : 264330609407  
Option 4 ID : 264330609408  
Status : Not Answered  
Chosen Option : --

Section : English Language and Comprehension



**Q.1** The following sentence has been divided into four parts. Identify the part that contains an error.

(A) Taylor, Richard, and / (B) Francis plays for / (C) the state / (D) basketball team.

- Ans  1. D  
 2. A  
 3. C  
 4. B

Question ID : 264330152616  
Option 1 ID : 264330598067  
Option 2 ID : 264330598070  
Option 3 ID : 264330598068  
Option 4 ID : 264330598069  
Status : Answered  
Chosen Option : 4

**Q.2** Select the most appropriate meaning of the given idiom.  
Pay an arm and a leg for something

- Ans  1. Be devoted to unwanted things  
 2. Pay a lot of money for something  
 3. Give a lot of love and care to someone  
 4. Pay a lot of attention to an incident

Question ID : 264330153438  
Option 1 ID : 264330601277  
Option 2 ID : 264330601275  
Option 3 ID : 264330601278  
Option 4 ID : 264330601276  
Status : Answered  
Chosen Option : 2

**Q.3** The following sentence has been divided into parts. One of them may contain an error.  
Select the part that contains the error from the given options. If you don't find any error, mark 'No error' as your answer.

As they driven through the dark, twisting lane / down which they had walked earlier,  
Lucius heard / the whistling of the night air in his ears.

- Ans  1. down which they had walked earlier, Lucius heard  
 2. No error  
 3. the whistling of the night air in his ears.  
 4. As they driven through the dark, twisting lane

Question ID : 264330153212  
Option 1 ID : 264330600409  
Option 2 ID : 264330600410  
Option 3 ID : 264330600407  
Option 4 ID : 264330600408  
Status : Answered  
Chosen Option : 3

**Q.4** Select the most appropriate synonym of the given word.  
Trivial

- Ans  1. Minor  
 2. Fatal  
 3. Decisive  
 4. Formal

Question ID : 264330152683  
Option 1 ID : 264330598338  
Option 2 ID : 264330598335  
Option 3 ID : 264330598337  
Option 4 ID : 264330598336  
Status : Answered  
Chosen Option : 1

**Q.5** Select the most appropriate word to fill in the blank.  
Ministry of education has announced that students can \_\_\_\_\_ the Board Examinations twice.

- Ans  1. take  
 2. participate  
 3. give  
 4. get

Question ID : 264330153506  
Option 1 ID : 264330601537  
Option 2 ID : 264330601538  
Option 3 ID : 264330601536  
Option 4 ID : 264330601535  
Status : Answered  
Chosen Option : 1

**Q.6** Select the most appropriate meaning of the underlined idiom in the given sentence.

A man of character, he stuck to his guns even in the most difficult situations.

- Ans  1. To do things that would please people  
 2. To behave disrespectfully  
 3. To find a treasure  
 4. To stand firm against all difficulties and challenges

Question ID : 264330152880  
Option 1 ID : 264330599113  
Option 2 ID : 264330599111  
Option 3 ID : 264330599112  
Option 4 ID : 264330599114  
Status : Answered  
Chosen Option : 4

**Q.7** Select the most appropriate meaning of the underlined segment in the given sentence.  
After her husband passed away, Jane had to learn to bite the bullet and take care of the household on her own.

- Ans
- 1. Create a difficult situation
  - 2. Accept a difficult situation bravely
  - 3. Criticise someone harshly
  - 4. Run away from a difficult situation

Question ID : 264330152922  
Option 1 ID : 264330599269  
Option 2 ID : 264330599268  
Option 3 ID : 264330599270  
Option 4 ID : 264330599267  
Status : Answered  
Chosen Option : 2

**Q.8** Select the option that can be used as a one-word substitute for the given phrase.  
One who lends money to others at a very high rate of interest.

- Ans
- 1. Curator
  - 2. Bankrupt
  - 3. Usurer
  - 4. Numismatist

Question ID : 264330152674  
Option 1 ID : 264330598301  
Option 2 ID : 264330598302  
Option 3 ID : 264330598299  
Option 4 ID : 264330598300  
Status : Answered  
Chosen Option : 4

**Q.9** Parts of the following sentence have been given as options. Select the option that contains an error.  
The platinum is a precious metal.

- Ans
- 1. is
  - 2. The platinum
  - 3. a
  - 4. precious metal

Question ID : 264330155201  
Option 1 ID : 264330608264  
Option 2 ID : 264330608263  
Option 3 ID : 264330608265  
Option 4 ID : 264330608266  
Status : Answered  
Chosen Option : 2

**Q.10** Select the most appropriate option to fill in the blank.  
All praised him when he soared in the business world, but the same people \_\_\_\_\_ him when he failed in business.

- Ans  1. nourished  
 2. criticised  
 3. supported  
 4. dramatised

Question ID : 264330153576  
Option 1 ID : 264330601799  
Option 2 ID : 264330601800  
Option 3 ID : 264330601802  
Option 4 ID : 264330601801  
Status : Answered  
Chosen Option : 2

**Q.11** Parts of the following sentence have been underlined and given as options. Select the option that contains an error.  
What most off us want most is to move forward.

- Ans  1. most off  
 2. is to  
 3. want most  
 4. move forward

Question ID : 264330153209  
Option 1 ID : 264330600395  
Option 2 ID : 264330600397  
Option 3 ID : 264330600396  
Option 4 ID : 264330600398  
Status : Answered  
Chosen Option : 1

**Q.12** Select the word which means the same as the group of words given.  
That which can't be read.

- Ans  1. Inaccessible  
 2. Incurable  
 3. Illegible  
 4. Irrelevant

Question ID : 264330152570  
Option 1 ID : 264330597883  
Option 2 ID : 264330597884  
Option 3 ID : 264330597885  
Option 4 ID : 264330597886  
Status : Answered  
Chosen Option : 3

**Q.13** Select the **INCORRECTLY** spelt word.

**Ans** ✓ 1. Acknowledge

✗ 2. Territory

✗ 3. Excellence

✗ 4. Business

Question ID : 264330152688

Option 1 ID : 264330598356

Option 2 ID : 264330598358

Option 3 ID : 264330598357

Option 4 ID : 264330598355

Status : Answered

Chosen Option : 1

**Q.14** Select the most appropriate **ANTONYM** of the given word.  
**Authentic**

**Ans** ✗ 1. Moderate

✗ 2. Actual

✓ 3. False

✗ 4. Wise

Question ID : 264330152675

Option 1 ID : 264330598306

Option 2 ID : 264330598303

Option 3 ID : 264330598304

Option 4 ID : 264330598305

Status : Answered

Chosen Option : 3

**Q.15** Select the most appropriate idiom to fill in the blank.  
Please tell me about the meeting \_\_\_\_\_.

**Ans** ✓ 1. in a nutshell

✗ 2. in a stew

✗ 3. in a huff

✗ 4. in a spin

Question ID : 264330152597

Option 1 ID : 264330597992

Option 2 ID : 264330597993

Option 3 ID : 264330597994

Option 4 ID : 264330597991

Status : Answered

Chosen Option : 1

**Q.16** Select the most appropriate option to fill in the blank.  
Augmented Reality (AR) continues to develop and become more \_\_\_\_\_ among a wide range of applications.

- Ans  1. rare  
 2. amicable  
 3. idealistic  
 4. pervasive

Question ID : 264330151905  
Option 1 ID : 264330595235  
Option 2 ID : 264330595237  
Option 3 ID : 264330595238  
Option 4 ID : 264330595236  
Status : Answered  
Chosen Option : 3

**Q.17** Select the INCORRECTLY spelt word.

- Ans  1. Grammar  
 2. Pleasant  
 3. Familiar  
 4. Aweful

Question ID : 264330152828  
Option 1 ID : 264330598905  
Option 2 ID : 264330598906  
Option 3 ID : 264330598903  
Option 4 ID : 264330598904  
Status : Answered  
Chosen Option : 4

**Q.18** Select the INCORRECTLY spelt word in the given sentence.  
The handloom shop at the Ring Road has many kinds of bags, such as paper, leather, cloth and cannabis.

- Ans  1. Paper  
 2. Cannabis  
 3. Leather  
 4. Cloth

Question ID : 264330153302  
Option 1 ID : 264330600763  
Option 2 ID : 264330600766  
Option 3 ID : 264330600764  
Option 4 ID : 264330600765  
Status : Answered  
Chosen Option : 2

**Q.19** Select the most appropriate option to fill in the blank.  
A/An \_\_\_\_\_ fellow cannot become an ideal teacher.

- Ans  1. idle  
 2. bright  
 3. intelligent  
 4. honest

Question ID : 264330153355  
Option 1 ID : 264330600971  
Option 2 ID : 264330600974  
Option 3 ID : 264330600972  
Option 4 ID : 264330600973  
Status : Answered  
Chosen Option : 1

**Q.20** Select the most appropriate option that can substitute the underlined segment in the given sentence.

I considered Geography as an easier subject.

- Ans  1. the easy  
 2. the easier  
 3. an easiest  
 4. an easy

Question ID : 264330155423  
Option 1 ID : 264330609100  
Option 2 ID : 264330609101  
Option 3 ID : 264330609102  
Option 4 ID : 264330609099  
Status : Answered  
Chosen Option : 4

**Comprehension:**

In the following passage some words have been deleted. Read the passage carefully and select the most appropriate option to fill in each blank.

The most common hazard in forests is forest fire. Forest fires are as old as the forests themselves. They pose a 1. \_\_\_\_\_ not only to the forest wealth but also to the entire regime to fauna and flora seriously disturbing the biodiversity and the ecology and environment of a region. During summer, when there is no rain for months, the forests 2. \_\_\_\_\_ littered with dry senescent leaves and twinges, which could burst into flames ignited by the slightest spark. The Himalayan forests, particularly, Garhwal Himalayas have been burning 3. \_\_\_\_\_ during the last few summers, with colossal loss of vegetation cover of that region. The youngest mountain ranges of the Himalayas are the most 4. \_\_\_\_\_ stretches of the world susceptible to forest fires. The forests of the Western are more 5. \_\_\_\_\_ vulnerable to forest fires as compared to those in the Eastern Himalayas. This is because forests of the Eastern Himalayas grow in high rain density.

**SubQuestion No : 21**

**Q.21** Select the most appropriate option to fill in blank no.1.

- Ans  1. mercy  
 2. trend  
 3. failure  
 4. threat

Question ID : 264330151933  
Option 1 ID : 264330595344  
Option 2 ID : 264330595346  
Option 3 ID : 264330595343  
Option 4 ID : 264330595345  
Status : Answered  
Chosen Option : 4



**Comprehension:**

In the following passage some words have been deleted. Read the passage carefully and select the most appropriate option to fill in each blank.

The most common hazard in forests is forest fire. Forest fires are as old as the forests themselves. They pose a 1. \_\_\_\_\_ not only to the forest wealth but also to the entire regime to fauna and flora seriously disturbing the biodiversity and the ecology and environment of a region. During summer, when there is no rain for months, the forests 2. \_\_\_\_\_ littered with dry senescent leaves and twinges, which could burst into flames ignited by the slightest spark. The Himalayan forests, particularly, Garhwal Himalayas have been burning 3. \_\_\_\_\_ during the last few summers, with colossal loss of vegetation cover of that region. The youngest mountain ranges of the Himalayas are the most 4. \_\_\_\_\_ stretches of the world susceptible to forest fires. The forests of the Western are more 5. \_\_\_\_\_ vulnerable to forest fires as compared to those in the Eastern Himalayas. This is because forests of the Eastern Himalayas grow in high rain density.

**SubQuestion No : 22**

**Q.22** Select the most appropriate option to fill in blank no.2.

- Ans  1. keep  
 2. build  
 3. become  
 4. drive

Question ID : 264330151934  
Option 1 ID : 264330595349  
Option 2 ID : 264330595350  
Option 3 ID : 264330595348  
Option 4 ID : 264330595347  
Status : Answered  
Chosen Option : 3

**Comprehension:**

In the following passage some words have been deleted. Read the passage carefully and select the most appropriate option to fill in each blank.

The most common hazard in forests is forest fire. Forest fires are as old as the forests themselves. They pose a 1. \_\_\_\_\_ not only to the forest wealth but also to the entire regime to fauna and flora seriously disturbing the biodiversity and the ecology and environment of a region. During summer, when there is no rain for months, the forests 2. \_\_\_\_\_ littered with dry senescent leaves and twinges, which could burst into flames ignited by the slightest spark. The Himalayan forests, particularly, Garhwal Himalayas have been burning 3. \_\_\_\_\_ during the last few summers, with colossal loss of vegetation cover of that region. The youngest mountain ranges of the Himalayas are the most 4. \_\_\_\_\_ stretches of the world susceptible to forest fires. The forests of the Western are more 5. \_\_\_\_\_ vulnerable to forest fires as compared to those in the Eastern Himalayas. This is because forests of the Eastern Himalayas grow in high rain density.

**SubQuestion No : 23**

**Q.23** Select the most appropriate option to fill in blank no.3.

- Ans  1. rarely  
 2. regularly  
 3. badly  
 4. enough

Question ID : 264330151935  
Option 1 ID : 264330595354  
Option 2 ID : 264330595351  
Option 3 ID : 264330595353  
Option 4 ID : 264330595352  
Status : Answered  
Chosen Option : 2

**Comprehension:**

In the following passage some words have been deleted. Read the passage carefully and select the most appropriate option to fill in each blank.

The most common hazard in forests is forest fire. Forest fires are as old as the forests themselves. They pose a 1. \_\_\_\_\_ not only to the forest wealth but also to the entire regime to fauna and flora seriously disturbing the biodiversity and the ecology and environment of a region. During summer, when there is no rain for months, the forests 2. \_\_\_\_\_ littered with dry senescent leaves and twinges, which could burst into flames ignited by the slightest spark. The Himalayan forests, particularly, Garhwal Himalayas have been burning 3. \_\_\_\_\_ during the last few summers, with colossal loss of vegetation cover of that region. The youngest mountain ranges of the Himalayas are the most 4. \_\_\_\_\_ stretches of the world susceptible to forest fires. The forests of the Western are more 5. \_\_\_\_\_ vulnerable to forest fires as compared to those in the Eastern Himalayas. This is because forests of the Eastern Himalayas grow in high rain density.

**SubQuestion No : 24**

**Q.24** Select the most appropriate option to fill in blank no.4.

- Ans  1. outrageous  
 2. vulnerable  
 3. greasy  
 4. mysterious

Question ID : 264330151936

Option 1 ID : 264330595356

Option 2 ID : 264330595358

Option 3 ID : 264330595357

Option 4 ID : 264330595355

Status : Answered

Chosen Option : 2

**Comprehension:**

In the following passage some words have been deleted. Read the passage carefully and select the most appropriate option to fill in each blank.

The most common hazard in forests is forest fire. Forest fires are as old as the forests themselves. They pose a 1. \_\_\_\_\_ not only to the forest wealth but also to the entire regime to fauna and flora seriously disturbing the biodiversity and the ecology and environment of a region. During summer, when there is no rain for months, the forests 2. \_\_\_\_\_ littered with dry senescent leaves and twinges, which could burst into flames ignited by the slightest spark. The Himalayan forests, particularly, Garhwal Himalayas have been burning 3. \_\_\_\_\_ during the last few summers, with colossal loss of vegetation cover of that region. The youngest mountain ranges of the Himalayas are the most 4. \_\_\_\_\_ stretches of the world susceptible to forest fires. The forests of the Western are more 5. \_\_\_\_\_ vulnerable to forest fires as compared to those in the Eastern Himalayas. This is because forests of the Eastern Himalayas grow in high rain density.

**SubQuestion No : 25**

**Q.25** Select the most appropriate option to fill in blank no.5.

- Ans  1. closely  
 2. frequently  
 3. deeply  
 4. barely

Question ID : 264330151937

Option 1 ID : 264330595362

Option 2 ID : 264330595360

Option 3 ID : 264330595361

Option 4 ID : 264330595359

Status : Answered

Chosen Option : 3