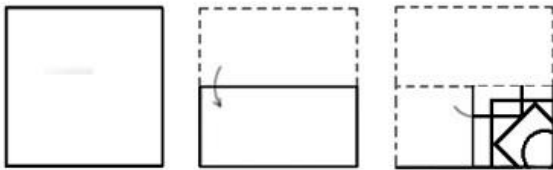


SSC CPO Oct 05, 2023 Shift 3 Question Paper

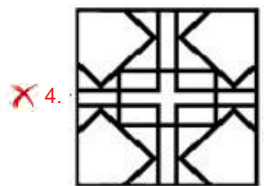
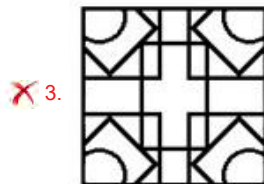

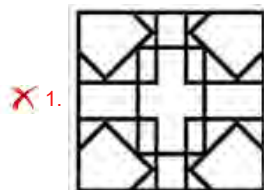
Roll Number	
Candidate Name	
Venue Name	
Exam Date	05/10/2023
Exam Time	4:00 PM - 6:00 PM
Subject	SICPO Paper I 2023

Section : General Intelligence and Reasoning

Q.1 A paper is folded and cut as shown. How will it appear when unfolded?



Ans



Question ID : 26433040798
 Option 1 ID : 264330159669
 Option 2 ID : 264330159667
 Option 3 ID : 264330159668
 Option 4 ID : 264330159670

Status : Answered

Chosen Option : 2

Q.2 Select the set in which the numbers are related in the same way as are the numbers of the following sets.

(NOTE : Operations should be performed on the whole numbers, without breaking down the numbers into its constituent digits. E.g. 13- Operations on 13 such as adding/subtracting/multiplying etc. to 13 can be performed. Breaking down 13 into 1 and 3 and then performing mathematical operations on 1 and 3 is not allowed.)
(53, 36, 25)
(71, 54, 43)

Ans 1. (41, 23, 18)

2. (99, 82, 71)

3. (66, 53, 41)

4. (32, 14, 7)

Question ID : 26433057459

Option 1 ID : 264330224821

Option 2 ID : 264330224822

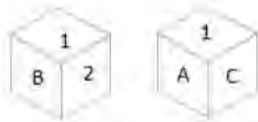
Option 3 ID : 264330224820

Option 4 ID : 264330224823

Status : Not Answered

Chosen Option : --

Q.3 Six characters A, B, C, 1, 2 and 3 are written on different faces of a dice. Two positions of this dice are shown in the figure. Find the character on the face opposite to C.



Ans 1. A

2. 2

3. 3

4. B

Question ID : 264330109198

Option 1 ID : 264330429072

Option 2 ID : 264330429071

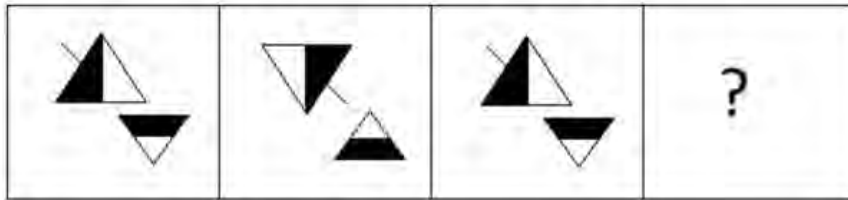
Option 3 ID : 264330429069

Option 4 ID : 264330429070

Status : Answered


Chosen Option : 2

Q.4 Select the figure that will come next in the following figure series.




Ans

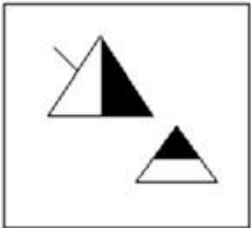
✗ 1.



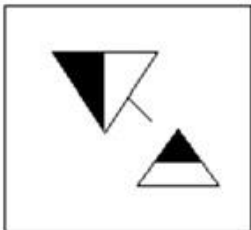
✓ 2.



✗ 3.



✗ 4.



Question ID : 26433087083

Option 1 ID : 264330341973

Option 2 ID : 264330341974

Option 3 ID : 264330341976

Option 4 ID : 264330341975

Status : Answered

Chosen Option : 2

Q.5 Select the option that represents the letters that, when sequentially placed in the blanks below, will complete the letter-series.

a, b, a, b, b, _, a, b, a, b, _, a, a, b, a, b, b, _

- Ans 1. b, a, b
 2. a, b, a
 3. b, b, b
 4. a, a, a

Question ID : 264330106617
Option 1 ID : 264330418772
Option 2 ID : 264330418769
Option 3 ID : 264330418770
Option 4 ID : 264330418771
Status : Answered
Chosen Option : 2

Q.6 Select the number from among the given options that can replace the question mark (?) in the following series.

144, 171, 200, ?, 264

- Ans 1. 240
 2. 256
 3. 225
 4. 231

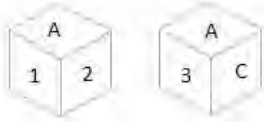
Question ID : 26433074540
Option 1 ID : 264330292251
Option 2 ID : 264330292249
Option 3 ID : 264330292248
Option 4 ID : 264330292250
Status : Answered
Chosen Option : 4

Q.7 Which letter-cluster will replace the question mark (?) to complete the given series?
FOHV, CKER, ?, WCYJ, TYVF

- Ans 1. XHBM
 2. ZGBN
 3. AFCP
 4. AHCO

Question ID : 26433086264
Option 1 ID : 264330338749
Option 2 ID : 264330338751
Option 3 ID : 264330338750
Option 4 ID : 264330338752
Status : Answered
Chosen Option : 2

Q.8 Six characters A, B, C, 1, 2 and 3 are written on different faces of a dice. Two positions of this dice are shown in the figure. Find the character on the face opposite to 3.



- Ans
- 1. B
 - 2. 1
 - 3. 2
 - 4. C

Question ID : 264330109199
Option 1 ID : 264330429075
Option 2 ID : 264330429073
Option 3 ID : 264330429074
Option 4 ID : 264330429076
Status : Answered
Chosen Option : 2

Q.9 In a certain code language, 'BLOCK' is coded as LBCON and 'CABIN' is coded as ACIBQ. How will 'SUITE' be coded in the same language?

- Ans
- 1. USTIH
 - 2. UTSEH
 - 3. ETHUS
 - 4. USHTI

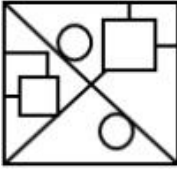
Question ID : 264330132205
Option 1 ID : 264330517916
Option 2 ID : 264330517918
Option 3 ID : 264330517915
Option 4 ID : 264330517917
Status : Answered
Chosen Option : 1

Q.10 Select the option in which the given figure is embedded (rotation is NOT allowed).

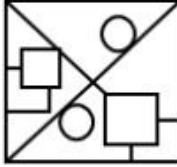


Ans

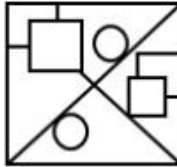
1.



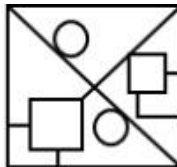
2.



3.



4.



Question ID : 264330126080

Option 1 ID : 264330493992

Option 2 ID : 264330493994

Option 3 ID : 264330493993

Option 4 ID : 264330493995

Status : Answered

Chosen Option : 3

Q.11 In a certain code language, 'MOBILE' is written as 'NQEMQK' and 'BISHOP' is written as 'CKVLTV'. How will 'CHARGE' be written in that language?

Ans 1. DJEVLJ

2. DJDWLK

3. DJDVLK

4. DJDVKL

Question ID : 26433070269

Option 1 ID : 264330275553

Option 2 ID : 264330275555

Option 3 ID : 264330275554

Option 4 ID : 264330275552

Status : Answered

Chosen Option : 3

Q.12 Select the correct option that indicates the arrangement of the given words in the order in which they appear in an English dictionary.

1. Warehouse
2. Warden
3. Warship
4. Wardrobe
5. Warrant
6. Warfare

- Ans
- 1. 4, 2, 1, 6, 5, 3
 - 2. 2, 4, 1, 6, 5, 3
 - 3. 2, 4, 6, 5, 1, 3
 - 4. 2, 4, 1, 5, 6, 3

Question ID : 264330145381

Option 1 ID : 264330569781

Option 2 ID : 264330569780

Option 3 ID : 264330569779

Option 4 ID : 264330569782

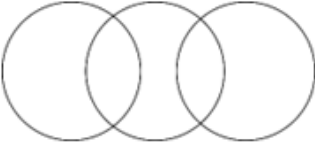

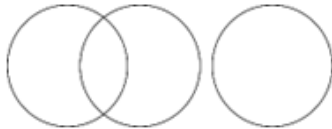
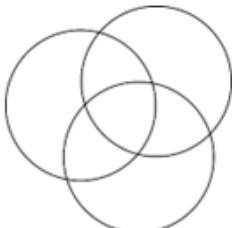
Status : Answered

Chosen Option : 2

Q.13 Select the Venn diagram that best illustrates the relationship between the following classes.

Clothes, Shoes, Shirts

Ans

- 1. 
- 2. 
- 3. 
- 4. 

Question ID : 264330132029

Option 1 ID : 264330517212

Option 2 ID : 264330517214

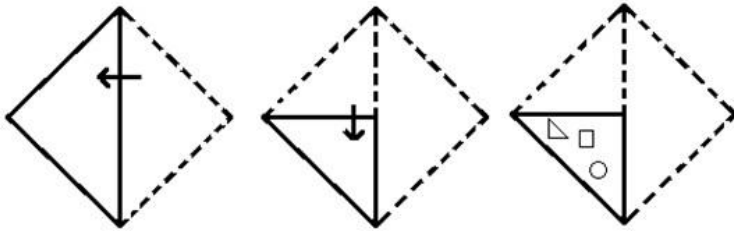
Option 3 ID : 264330517211

Option 4 ID : 264330517213

Status : Answered

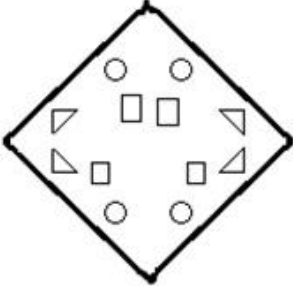
Chosen Option : 2

Q.14 The sequence of folding a piece of paper and the manner in which the folded paper is cut is shown in the following figures. How would this paper look when unfolded?

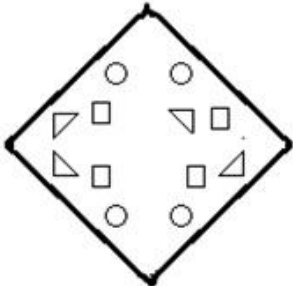


Ans

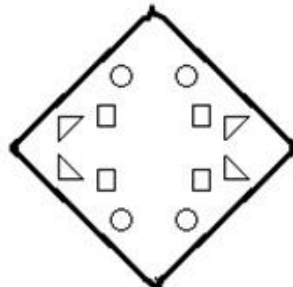
✗ 1.



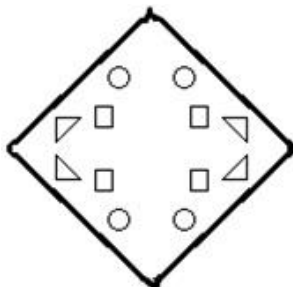
✗ 2.



✗ 3.



✓ 4.



Question ID : 26433074791

Option 1 ID : 264330293252

Option 2 ID : 264330293255

Option 3 ID : 264330293254

Option 4 ID : 264330293253

Status : Answered

Chosen Option : 4

Q.15 If A denotes '+', B denotes 'x', C denotes '-', and D denotes '÷', then what will be the value of the following equation?
11 B 12 C 144 D 24 A 57 = ?

- Ans 1. 180
 2. 183
 3. 186
 4. 160

Question ID : 264330129780
Option 1 ID : 264330508351
Option 2 ID : 264330508352
Option 3 ID : 264330508354
Option 4 ID : 264330508353
Status : Answered
Chosen Option : 2

Q.16 Q + J means "Q is the Husband of J"
Q - J means "Q is the Father of J"
Q x J means "Q is the Mother of J"
Q * J means "Q is the Daughter of J"

If D * V + B x U, how is D related to U?

- Ans 1. Sister
 2. Mother
 3. Brother
 4. Daughter

Question ID : 264330130334
Option 1 ID : 264330510448
Option 2 ID : 264330510450
Option 3 ID : 264330510447
Option 4 ID : 264330510449
Status : Answered
Chosen Option : 1

Q.17 Q is to the east of S. E is to the south of S. P is to the north-east of Q and north of T. If T is to the south-east of Q, what is the position of S with respect to T? (All positions are arranged in GRID pattern)

- Ans 1. South-east
 2. South-west
 3. West
 4. North-west

Question ID : 26433089523
Option 1 ID : 264330351596
Option 2 ID : 264330351595
Option 3 ID : 264330351594
Option 4 ID : 264330351593
Status : Answered
Chosen Option : 4

Q.18 In a certain code language, 'SPAM' is coded as '36' and 'JUG' is coded as '27'. How will 'FROCK' be coded in that language?

- Ans
- 1. 72
 - 2. 45
 - 3. 90
 - 4. 48

Question ID : 26433079046
Option 1 ID : 264330310189
Option 2 ID : 264330310191
Option 3 ID : 264330310188
Option 4 ID : 264330310190
Status : Answered
Chosen Option : 2

Q.19 Select the option figure in which the given figure is embedded as its part (rotation is NOT allowed).



Ans

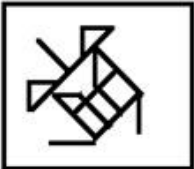
1.



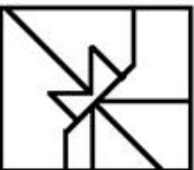
2.



3.



4.



Question ID : 264330117424
Option 1 ID : 264330461739
Option 2 ID : 264330461738
Option 3 ID : 264330461740
Option 4 ID : 264330461737
Status : Answered
Chosen Option : 1

Q.20 Four letter-clusters have been given, out of which three are alike in some manner and one is different. Select the odd letter-cluster.

- Ans 1. SRWX
 2. HGLM
 3. POTU
 4. DBGH

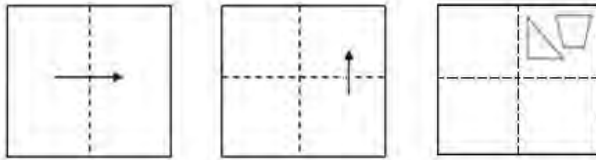
Question ID : 264330180751
Option 1 ID : 264330708974
Option 2 ID : 264330708972
Option 3 ID : 264330708973
Option 4 ID : 264330708971
Status : Answered
Chosen Option : 4

Q.21 'T + U' means 'T is the mother of U'.
'T - U' means 'T is the father of U'.
'T \$ U' means 'T is the husband of U'.
'T # U' means 'T is the daughter of U'.
If A # C \$ V + X, then how is A related to X?

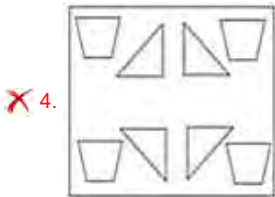
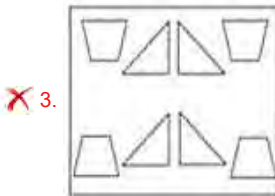
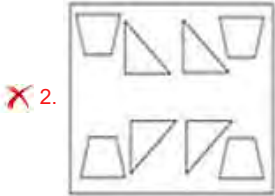
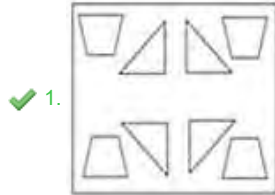
- Ans 1. Brother
 2. Sister
 3. Father
 4. Daughter

Question ID : 264330145387
Option 1 ID : 264330569803
Option 2 ID : 264330569804
Option 3 ID : 264330569806
Option 4 ID : 264330569805
Status : Answered
Chosen Option : 2

Q.22 A paper is folded and cut as shown below. How will it appear when unfolded?



Ans



Question ID : 26433091688

Option 1 ID : 264330360118

Option 2 ID : 264330360119

Option 3 ID : 264330360117

Option 4 ID : 264330360120

Status : Answered

Chosen Option : 1

Q.23 Select the set in which the numbers are related in the same way as are the numbers of the following sets.

(NOTE : Operations should be performed on the whole numbers, without breaking down the numbers into its constituent digits. E.g. 13 – Operations on 13 such as adding /subtracting /multiplying etc. to 13 can be performed. Breaking down 13 into 1 and 3 and then performing mathematical operations on 1 and 3 is not allowed)

(112, 327, 215), (98, 254, 156)

- Ans 1. (108, 209, 184)
 2. (105, 347, 322)
 3. (126, 268, 142)
 4. (281, 490,309)

Question ID : 264330145298

Option 1 ID : 264330569448

Option 2 ID : 264330569447

Option 3 ID : 264330569450

Option 4 ID : 264330569449

Status : Answered

Chosen Option : 3

Q.24 Select the set in which the numbers are related in the same way as are the numbers of the following set.

(NOTE : Operations should be performed on the whole numbers, without breaking down the numbers into its constituent digits. E.g. 13 – Operations on 13 such as adding/ subtracting/ multiplying etc. to 13 can be performed. Breaking down 13 into 1 and 3 and then performing mathematical operations on 1 and 3 is NOT allowed)

(5, 4, 2)
(9, 9, 3)

- Ans 1. (21,39,1)
 2. (5,2,6)
 3. (24,43,34)
 4. (17,6,5)

Question ID : 264330145333

Option 1 ID : 264330569590

Option 2 ID : 264330569588

Option 3 ID : 264330569589

Option 4 ID : 264330569587

Status : Not Answered

Chosen Option : --

Q.25 Seven people, A, B, C, D, E, F and G, are sitting in a straight row, facing north. Only 2 people sit to the right of D. G is an immediate neighbour of D. Only 3 people sit between A and G. Only 2 people sit between B and C. E is not an immediate neighbour of C. F sits to the immediate right of G. Who sits to the immediate left of A?

- Ans 1. E
 2. C
 3. D
 4. B

Question ID : 264330145410

Option 1 ID : 264330569897

Option 2 ID : 264330569896

Option 3 ID : 264330569898

Option 4 ID : 264330569895

Status : Answered

Chosen Option : 2

Q.26 Select the option that represents the correct order of the given words as they would appear in an English dictionary?

1. Brochure
2. Brine
3. Bright
4. Brief
5. Brocade

- Ans
- 1. 1, 2, 3, 4, 5
 - 2. 1, 2, 3, 5, 4
 - 3. 4, 3, 2, 5, 1
 - 4. 3, 2, 5, 4, 1

Question ID : 26433067247
Option 1 ID : 264330263500
Option 2 ID : 264330263502
Option 3 ID : 264330263503
Option 4 ID : 264330263501
Status : Answered
Chosen Option : 3

Q.27 If '+' means '-', '-' means 'x', 'x' means '÷' and '÷' means '+', what will come in place of '?' in the following equation?

$$79 \div 64 \times 8 - 7 + 12 = ?$$

- Ans
- 1. 123
 - 2. 117
 - 3. 138
 - 4. 147

Question ID : 264330101147
Option 1 ID : 264330397135
Option 2 ID : 264330397136
Option 3 ID : 264330397134
Option 4 ID : 264330397133
Status : Answered
Chosen Option : 1

Q.28 Two statements are given followed by three conclusions numbered I, II and III. Assuming the statements to be true, even if they seem to be at variance with commonly known facts, decide which of the conclusions logically follow(s) from the statements.

Statements:

- All keys are locks.
- No door is a lock.

Conclusions:

- I. Some locks are doors.
- II. Some locks are keys.
- III. No key is a door.

- Ans
- 1. Both conclusions I and II follow.
 - 2. Conclusions I, II and III follow.
 - 3. Both conclusions II and III follow.
 - 4. Both conclusions I and III follow.

Question ID : 26433056067
Option 1 ID : 264330219252
Option 2 ID : 264330219255
Option 3 ID : 264330219254
Option 4 ID : 264330219253
Status : Answered
Chosen Option : 3

Q.29 In a certain code language, 'Live long' is coded as 'mu ae', 'Road is long' is coded as 'ae si du' and 'Game is live' is coded as 'si mu zt'. What is the code for the word 'Game'?

- Ans
- 1. si
 - 2. mu
 - 3. zt
 - 4. ae

Question ID : 26433074769
Option 1 ID : 264330293164
Option 2 ID : 264330293167
Option 3 ID : 264330293165
Option 4 ID : 264330293166
Status : Answered
Chosen Option : 3

Q.30 Which two signs should be interchanged to make the given equation correct?
 $42 \div 7 + 11 \times 87 - 12 = 141$

- Ans
- 1. ÷ and -
 - 2. ÷ and +
 - 3. x and +
 - 4. - and ×

Question ID : 264330129526
Option 1 ID : 264330507470
Option 2 ID : 264330507471
Option 3 ID : 264330507472
Option 4 ID : 264330507473
Status : Answered
Chosen Option : 3

Q.31 Select the option that is related to the third word in the same way as the second word is related to the first word.

(The words must be considered as meaningful words and must not be related to each other based on the number of letters/number of consonants/vowels in the word.)

Pressure : Barometer :: Electricity : ?

- Ans
- 1. Cyclotron
 - 2. Bolometer
 - 3. Audiometer
 - 4. Multimeter

Question ID : 26433087296
Option 1 ID : 264330342821
Option 2 ID : 264330342823
Option 3 ID : 264330342822
Option 4 ID : 264330342824
Status : Answered
Chosen Option : 4

Q.32 Which of the following numbers will replace the question mark (?) in the given series?
270, 241, 212, ?, 154, 125

- Ans 1. 198
 2. 186
 3. 183
 4. 192

Question ID : 26433067626
Option 1 ID : 264330265016
Option 2 ID : 264330265018
Option 3 ID : 264330265019
Option 4 ID : 264330265017
Status : Answered
Chosen Option : 3

Q.33 Select the option that is related to the third term in the same way as the second term is related to the first term and the sixth term is related to the fifth term.
25 : 18 :: 37 : ? :: 49 : 36

- Ans 1. 29
 2. 32
 3. 30
 4. 27

Question ID : 26433079159
Option 1 ID : 264330310643
Option 2 ID : 264330310640
Option 3 ID : 264330310642
Option 4 ID : 264330310641
Status : Answered
Chosen Option : 4

Q.34 Six students Meera, Jigyasa, Tarun, Naina, Shambhavi and Avni are sitting around a circular table facing the centre (not necessarily in the same order). Shambhavi is an immediate neighbour of both Jigyasa and Avni. Tarun is sitting third to the left of Jigyasa. Meera is sitting second to the right of Avni. Who is sitting second to the left of Jigyasa?

- Ans 1. Meera
 2. Naina
 3. Avni
 4. Tarun

Question ID : 26433082277
Option 1 ID : 264330322943
Option 2 ID : 264330322944
Option 3 ID : 264330322941
Option 4 ID : 264330322942
Status : Answered
Chosen Option : 2

Q.35 Which letter-cluster will replace the question mark (?) to complete the given series?
BRCQ, EPFO, ?, KLLK, NJOI





- Ans
- 1. HINO
 - 2. GNMI
 - 3. HNIM
 - 4. GINO

Question ID : 264330180761
Option 1 ID : 264330709011
Option 2 ID : 264330709014
Option 3 ID : 264330709012
Option 4 ID : 264330709013
Status : Answered
Chosen Option : 3

Q.36 Select the Venn diagram that best illustrates the relationship between the following classes.

Animal, Jungle, Wild Animal

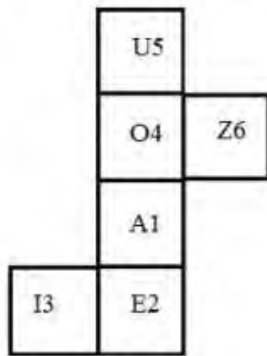
Ans

- 1. 
- 2. 
- 3. 
- 4. 

Question ID : 264330145359
Option 1 ID : 264330569692
Option 2 ID : 264330569693
Option 3 ID : 264330569694
Option 4 ID : 264330569691
Status : Answered
Chosen Option : 4

Q.37 When the following figure is folded to form a cube, which letter-number will be on the face opposite to the face showing the letter-number 'A1'?

(The elements are shown to indicate the sides only.)



Ans 1. U5

2. O4

3. I3

4. E2

Question ID : 26433065674

Option 1 ID : 264330257257

Option 2 ID : 264330257256

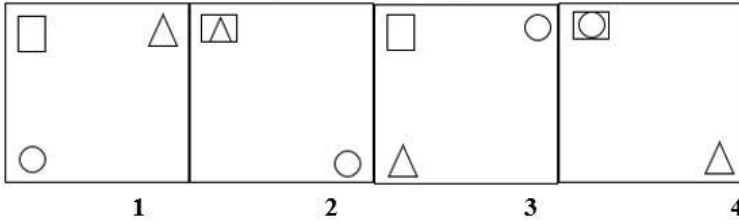
Option 3 ID : 264330257259

Option 4 ID : 264330257258

Status : Answered

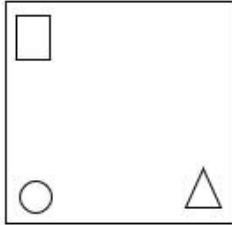
Chosen Option : 1

Q.38 Which of the given figures when placed in the 5th position would continue the series that is established by the first four figures?

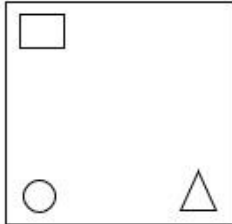


Ans

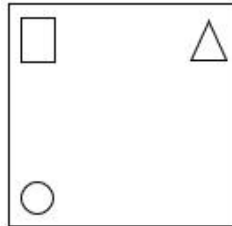
1.



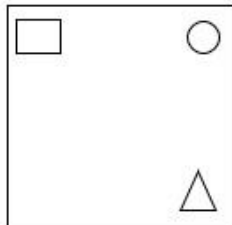
2.



3.



4.



Question ID : 26433087304

Option 1 ID : 264330342854

Option 2 ID : 264330342853

Option 3 ID : 264330342856

Option 4 ID : 264330342855

Status : Answered

Chosen Option : 3

Q.39 Select the option that is related to the third word in the same way as the second word is related to the first word.

(The words must be considered as meaningful words and must not be related to each other based on the number of letters/number of consonants/vowels in the word.)

Centre : Focus :: Vicar : ?

- Ans 1. Life
 2. Priest
 3. Building
 4. Riddle

Question ID : 264330145397
Option 1 ID : 264330569846
Option 2 ID : 264330569845
Option 3 ID : 264330569844
Option 4 ID : 264330569843
Status : Answered
Chosen Option : 4

Q.40 Three of the following four letter-clusters are alike in a certain way and one is different. Pick the odd one out.

- Ans 1. MOKN
 2. SQUH
 3. GIET
 4. CEAX

Question ID : 26433068791
Option 1 ID : 264330269679
Option 2 ID : 264330269677
Option 3 ID : 264330269678
Option 4 ID : 264330269676
Status : Answered
Chosen Option : 2

Q.41 Which two signs should be interchanged to make the given equation correct?

$$39 \div 3 - 11 + 57 \times 29 = 171$$

- Ans 1. - and ×
 2. - and +
 3. + and +
 4. + and -

Question ID : 264330129524
Option 1 ID : 264330507465
Option 2 ID : 264330507464
Option 3 ID : 264330507463
Option 4 ID : 264330507462
Status : Answered
Chosen Option : 1

Q.42 Stanley starts cycling from Point A. He cycles X km towards the west and then turns right and cycles 3 km. He again turns right and cycles for $X+1$ km. He again turns right and cycles for $2X+1$ km. He takes a final right turn and cycles for 1 km to stop at Point B. Point B is 6 km south of Point A. What is the value of X ?

- Ans 1. 9
 2. 3
 3. 4
 4. 5

Question ID : 26433097236
Option 1 ID : 264330381644
Option 2 ID : 264330381641
Option 3 ID : 264330381643
Option 4 ID : 264330381642
Status : Answered
Chosen Option : 3

Q.43 In a certain code language, 'PIN' is coded as 9 and 'CHARGER' is coded as 49. How will 'CABLE' be coded in the same language?

- Ans 1. 27
 2. 25
 3. 18
 4. 36

Question ID : 264330132204
Option 1 ID : 264330517912
Option 2 ID : 264330517911
Option 3 ID : 264330517913
Option 4 ID : 264330517914
Status : Answered
Chosen Option : 2

Q.44 Which of the following numbers will replace the question mark (?) in the given series?
5, 20, 60, 240, 720, ?

- Ans 1. 2580
 2. 2880
 3. 2160
 4. 2675

Question ID : 26433057344
Option 1 ID : 264330224361
Option 2 ID : 264330224362
Option 3 ID : 264330224363
Option 4 ID : 264330224360
Status : Answered
Chosen Option : 2

Q.45 Two statements are given, followed by two conclusions numbered I and II. Assuming the statements to be true, even if they seem to be at variance with commonly known facts, decide which of the conclusions logically follow(s) from the statements.

Statements:

All rivers are lakes.

Some seas are rivers.

Conclusion:

I)Some seas are lakes.

II)All lakes are rivers.

- Ans
- 1. Neither Conclusion I nor II follows.
 - 2. Only Conclusion II follows.
 - 3. Only Conclusion I follows
 - 4. Both Conclusions I and II follow.

Question ID : 26433067708

Option 1 ID : 264330265347

Option 2 ID : 264330265345

Option 3 ID : 264330265344

Option 4 ID : 264330265346

Status : Answered

Chosen Option : 3

Q.46 If '+' means '-', '-' means 'x', 'x' means '+', '+' means '+', then what will come in place of the question mark (?) in the following equation?
 $39 \times 3 - 11 \div 57 + 29 = ?$

- Ans
- 1. 163
 - 2. 190
 - 3. 185
 - 4. 171

Question ID : 264330126060

Option 1 ID : 264330493912

Option 2 ID : 264330493915

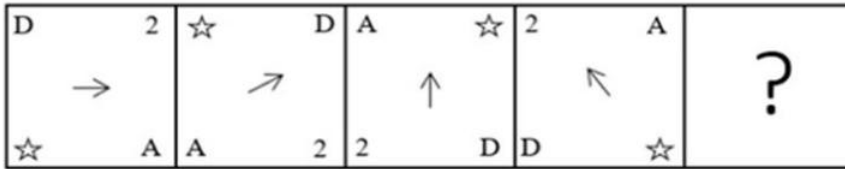
Option 3 ID : 264330493914

Option 4 ID : 264330493913

Status : Answered

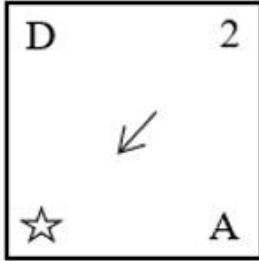
Chosen Option : 4

Q.47 Which figure from the given options would replace the question mark (?) if the following figure series were to be continued?

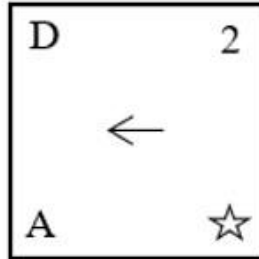


Ans

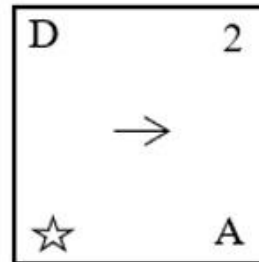
✗ 1.



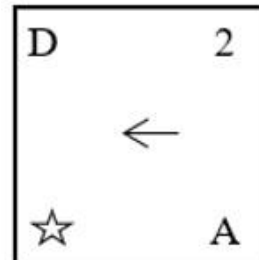
✗ 2.



✗ 3.



✓ 4.



Question ID : 264330145483

Option 1 ID : 264330570188

Option 2 ID : 264330570189

Option 3 ID : 264330570190

Option 4 ID : 264330570187

Status : Answered

Chosen Option : 4

Q.48 If M denotes '+', N denotes '=', O denotes '*', and P denotes '÷', then what will come in place of '?' in the following equation?

$$21 \text{ O } 5 \text{ P } 69 \text{ N } 3 \text{ P } \sqrt{225} \text{ M } 88 = ?$$

Ans 1. 61

2. 65

3. 55

4. 50

Question ID : 26433057620

Option 1 ID : 264330225467

Option 2 ID : 264330225464

Option 3 ID : 264330225466

Option 4 ID : 264330225465

Status : Answered

Chosen Option : 3

Q.49 Which of the following numbers will replace the question mark (?) in the given series?

69, 65, 67, 63, ?, 61

Ans 1. 65

2. 60

3. 62

4. 64

Question ID : 26433091008

Option 1 ID : 264330357444

Option 2 ID : 264330357442

Option 3 ID : 264330357441

Option 4 ID : 264330357443

Status : Answered

Chosen Option : 1

Q.50 Which two mathematical signs should be interchanged to make the given equation correct?

$$(45 \times 2) \div 15 - (6 \times 3) + 10 - (63 \div 21) = 17$$

Ans 1. + and +

2. × and −

3. − and +

4. + and ×

Question ID : 264330145313

Option 1 ID : 264330569507

Option 2 ID : 264330569509

Option 3 ID : 264330569510

Option 4 ID : 264330569508

Status : Answered

Chosen Option : 3

Section : General Knowledge and General Awareness

Q.1 Lavani is a traditional dance of which of the following states?

- Ans** 1. Uttar Pradesh
 2. Maharashtra
 3. Himachal Pradesh
 4. Madhya Pradesh

Question ID : 264330164796
Option 1 ID : 264330646311
Option 2 ID : 264330646312
Option 3 ID : 264330646314
Option 4 ID : 264330646313
Status : Answered
Chosen Option : 2

Q.2 Which of the following scientists provided the Law of Octaves?

- Ans** 1. Galileo Galilei
 2. John Newlands
 3. Michael Faraday
 4. Marie Curie

Question ID : 264330131108
Option 1 ID : 264330513544
Option 2 ID : 264330513543
Option 3 ID : 264330513545
Option 4 ID : 264330513546
Status : Answered
Chosen Option : 2

Q.3 Who among the following Bahmani sultan was noted for cruelty and hence got the title as 'Zalim'?

- Ans** 1. Humayun
 2. Firuz Shah
 3. Mujahid Shah
 4. Ahmad Shah

Question ID : 264330109014
Option 1 ID : 264330428334
Option 2 ID : 264330428335
Option 3 ID : 264330428336
Option 4 ID : 264330428333
Status : Answered
Chosen Option : 4

Q.4 According to the Koppen classification, Which regions experience cold humid winter with short summers?

- Ans** 1. Western Rajasthan
 2. Northern Madhya Pradesh
 3. South of Goa
 4. Arunachal Pradesh

Question ID : 264330145192
Option 1 ID : 264330569023
Option 2 ID : 264330569026
Option 3 ID : 264330569025
Option 4 ID : 264330569024
Status : Answered
Chosen Option : 4

Q.5 The Rajpath was decided to be a permanent venue for the Republic Day parade from which of the following year onwards?

- Ans 1. 1959
 2. 1951
 3. 1955
 4. 1958

Question ID : 264330145139
Option 1 ID : 264330568814
Option 2 ID : 264330568813
Option 3 ID : 264330568811
Option 4 ID : 264330568812
Status : Not Answered
Chosen Option : --

Q.6 Which disease is caused by NOT having enough vitamin C in the diet for at least 3 months leading to weakness, anaemia, gum disease and skin problems?

- Ans 1. Pellagra
 2. Rickets
 3. Beriberi
 4. Scurvy

Question ID : 264330145200
Option 1 ID : 264330569056
Option 2 ID : 264330569058
Option 3 ID : 264330569057
Option 4 ID : 264330569055
Status : Answered
Chosen Option : 4

Q.7 What do you call a Glycocalyx that is a loose sheath type?

- Ans 1. Mesosomes
 2. Capsule
 3. Tubules
 4. Slime layer

Question ID : 264330145212
Option 1 ID : 264330569105
Option 2 ID : 264330569104
Option 3 ID : 264330569106
Option 4 ID : 264330569103
Status : Not Answered
Chosen Option : --

Q.8 Assessment of the country's GDP growth, external balance and fiscal balance are presented in which part of the budget document?

- Ans 1. Medium-term Fiscal Policy Statement
 2. Appropriation bill
 3. Fiscal Policy Strategy Statement
 4. Macroeconomic Framework Statement

Question ID : 264330141436
Option 1 ID : 264330554079
Option 2 ID : 264330554082
Option 3 ID : 264330554080
Option 4 ID : 264330554081
Status : Answered
Chosen Option : 3

Q.9 The seven years of war in the 18th century was fought between Britain and _____.

- Ans 1. Spain
 2. France
 3. Germany
 4. Portugal

Question ID : 264330165387
Option 1 ID : 264330648630
Option 2 ID : 264330648628
Option 3 ID : 264330648627
Option 4 ID : 264330648629
Status : Answered
Chosen Option : 2

Q.10 At the time of launch of the Smart Cities Mission, how many cities were proposed to be covered under this scheme?

- Ans 1. 100
 2. 50
 3. 75
 4. 25

Question ID : 26433064565
Option 1 ID : 264330252855
Option 2 ID : 264330252853
Option 3 ID : 264330252854
Option 4 ID : 264330252852
Status : Not Answered
Chosen Option : --

Q.11 What is the standard weight of a hockey ball?

- Ans 1. 161 gm - 156 gm
 2. 162 gm - 156 gm
 3. 160 gm - 156 gm
 4. 163 gm - 156 gm

Question ID : 264330118470
Option 1 ID : 264330465282
Option 2 ID : 264330465283
Option 3 ID : 264330465281
Option 4 ID : 264330465284
Status : Not Answered
Chosen Option : --

Q.12 Choose the correct statement(s) related to 'continentality'.

- a. The sea exerts a moderating influence on climate.
- b. As the distance from the sea increases, the people experience extreme weather conditions.
- c. As one goes from the surface of the earth to higher altitudes, the atmosphere becomes less dense and temperature decreases.

- Ans
- 1. a and c
 - 2. Only c
 - 3. b and c
 - 4. a and b

Question ID : 264330169314
Option 1 ID : 264330664038
Option 2 ID : 264330664035
Option 3 ID : 264330664037
Option 4 ID : 264330664036
Status : Not Answered
Chosen Option : --

Q.13 The Arms Act was passed in _____ that prevented Indians from keeping arms without an appropriate license.

- Ans
- 1. 1909
 - 2. 1897
 - 3. 1878
 - 4. 1912

Question ID : 264330112335
Option 1 ID : 264330441428
Option 2 ID : 264330441427
Option 3 ID : 264330441425
Option 4 ID : 264330441426
Status : Answered
Chosen Option : 3

Q.14 Who takes the salute during the Republic Day parade at New Delhi?

- Ans
- 1. Governor
 - 2. President
 - 3. Chief Justice
 - 4. Prime Minister

Question ID : 264330164810
Option 1 ID : 264330646369
Option 2 ID : 264330646368
Option 3 ID : 264330646370
Option 4 ID : 264330646367
Status : Answered
Chosen Option : 2

Q.15 According to the Census of India 2011, which of the following states has the highest Hindu population percentage of total population?

- Ans 1. Madhya Pradesh
 2. Haryana
 3. Himachal Pradesh
 4. Uttar Pradesh

Question ID : 264330166808
Option 1 ID : 264330654270
Option 2 ID : 264330654269
Option 3 ID : 264330654267
Option 4 ID : 264330654268
Status : Answered
Chosen Option : 3

Q.16 Which Article of the Indian Constitution mentions that all the authorities— civil and judicial— in the territory of India shall act in aid of the Supreme Court?

- Ans 1. Article 143
 2. Article 144
 3. Article 142
 4. Article 141

Question ID : 264330164950
Option 1 ID : 264330646929
Option 2 ID : 264330646930
Option 3 ID : 264330646928
Option 4 ID : 264330646927
Status : Not Answered
Chosen Option : --

Q.17 _____ river has the least storage capacity of usable water.

- Ans 1. Godavari
 2. Ganges
 3. Brahmaputra
 4. Krishna

Question ID : 264330163238
Option 1 ID : 264330640263
Option 2 ID : 264330640264
Option 3 ID : 264330640266
Option 4 ID : 264330640265
Status : Not Answered
Chosen Option : --

Q.18 Dihang and Lohit are rivers in which of the following regions?

- Ans 1. Sikkim and Manipur
 2. Punjab and Himachal
 3. Arunachal Pradesh and Assam
 4. Jammu and Kashmir

Question ID : 264330119796
Option 1 ID : 264330469462
Option 2 ID : 264330469459
Option 3 ID : 264330469461
Option 4 ID : 264330469460
Status : Answered
Chosen Option : 3

Q.19 With which of the following dance forms is Thumri music associated?

- Ans 1. Sattriya
 2. Kathakali
 3. Kathak
 4. Bharatanatyam

Question ID : 26433064645
Option 1 ID : 264330253174
Option 2 ID : 264330253173
Option 3 ID : 264330253175
Option 4 ID : 264330253172
Status : Not Answered
Chosen Option : --

Q.20 Who among the following Mauryan king fasted to death and died at Shravanabelagola?

- Ans 1. Bindusara
 2. Dasharatha
 3. Chandragupta Maurya
 4. Ashoka

Question ID : 264330165560
Option 1 ID : 264330649320
Option 2 ID : 264330649322
Option 3 ID : 264330649319
Option 4 ID : 264330649321
Status : Answered
Chosen Option : 3

Q.21 Shifting agriculture is known as _____ in the Western Ghats.

- Ans 1. kumari
 2. dahiya
 3. koman
 4. waltre

Question ID : 264330113261
Option 1 ID : 264330445130
Option 2 ID : 264330445131
Option 3 ID : 264330445129
Option 4 ID : 264330445132
Status : Not Answered
Chosen Option : --

Q.22 In which of the following states are Aus, Boro and Aman paddy crops grown in a year?

- Ans 1. Punjab
 2. Odisha
 3. Haryana
 4. Uttarakhand

Question ID : 264330163196
Option 1 ID : 264330640096
Option 2 ID : 264330640095
Option 3 ID : 264330640097
Option 4 ID : 264330640098
Status : Not Answered
Chosen Option : --

Q.23 The measure of the force that can cause an object to rotate about an axis is called:

- Ans 1. moment of inertia
 2. power
 3. torque
 4. centripetal force

Question ID : 264330111861
Option 1 ID : 264330439532
Option 2 ID : 264330439530
Option 3 ID : 264330439529
Option 4 ID : 264330439531
Status : Answered
Chosen Option : 3

Q.24 Who among the following classical poets of the Sultanate period in India popularised Qawwali, a form of music which derived its name from the Arabic word 'qaul', meaning 'to speak'?

- Ans 1. Nizam al-Din Awliya
 2. Jalal al-Din Muhammad Rumi
 3. Amir Khusrau
 4. Shams al-Din Muhammad Hafiz

Question ID : 26433074824
Option 1 ID : 264330293385
Option 2 ID : 264330293386
Option 3 ID : 264330293384
Option 4 ID : 264330293387
Status : Answered
Chosen Option : 3

Q.25 What is the name of the 1,3-isomer (or meta-isomer) of benzenediol with the chemical formula $C_6H_4(OH)_2$?

- Ans 1. m-Cresol
 2. Resorcinol
 3. Catechol
 4. Glycerol

Question ID : 264330110054
Option 1 ID : 264330432496
Option 2 ID : 264330432495
Option 3 ID : 264330432494
Option 4 ID : 264330432493
Status : Not Answered
Chosen Option : --

Q.26 Who was/were the founder(s) of the Theosophical Society?

- Ans 1. H P Blavatsky and Colonel Olcott
 2. Madam Bhikaji Cama
 3. Annie Besant
 4. Charles W Leadbeater and Emily Lutyens

Question ID : 26433099178
Option 1 ID : 264330389328
Option 2 ID : 264330389327
Option 3 ID : 264330389325
Option 4 ID : 264330389326
Status : Answered
Chosen Option : 2

Q.27 Which Articles of the Indian Constitution describe Fundamental Rights?

- Ans 1. Articles 5 to 11
 2. Articles 12 to 35
 3. Articles 36 to 51
 4. Articles 52 to 62

Question ID : 264330111520
Option 1 ID : 264330438165
Option 2 ID : 264330438166
Option 3 ID : 264330438167
Option 4 ID : 264330438168
Status : Answered
Chosen Option : 2

Q.28 Which of the following organisms belongs to phylum Apicomplexa?

- Ans 1. Sponge
 2. Physalia
 3. Hydra
 4. Plasmodium

Question ID : 26433082204
Option 1 ID : 264330322651
Option 2 ID : 264330322649
Option 3 ID : 264330322650
Option 4 ID : 264330322652
Status : Answered
Chosen Option : 2

Q.29 Select the INCORRECT pair of a famous minaret and its construction year in India.

- Ans 1. Shaheed Minar–1828 CE
 2. Chand Minar–1435 CE
 3. Char Minar–1664 CE
 4. Jhulta Minar–1452 CE

Question ID : 264330141821
Option 1 ID : 264330555606
Option 2 ID : 264330555603
Option 3 ID : 264330555604
Option 4 ID : 264330555605
Status : Not Answered
Chosen Option : --

Q.30 In 1932, who discovered the positron, a particle described as 'carrying a positive charge but having a mass of the same order of magnitude as that normally possessed by a free negative electron'?

- Ans 1. Niels Bohr
 2. Paul Dirac
 3. Ernest Rutherford
 4. Carl Anderson

Question ID : 26433055070
Option 1 ID : 264330215267
Option 2 ID : 264330215264
Option 3 ID : 264330215265
Option 4 ID : 264330215266
Status : Answered
Chosen Option : 3

Q.31 Which of the following rights forbids employment of children below the age of 14 years in dangerous jobs?

- Ans 1. Right to Equality
 2. Right to Constitutional Remedies
 3. Right against Exploitation
 4. Right to Freedom

Question ID : 264330116399
Option 1 ID : 264330457684
Option 2 ID : 264330457683
Option 3 ID : 264330457681
Option 4 ID : 264330457682
Status : Answered
Chosen Option : 3

Q.32 Which of the following is NOT the manifestation of Iron-deficiency anaemia (IDA)?

- Ans 1. Soft palate
 2. Blindness
 3. General pallor
 4. Paleness of conjunctiva of eyes

Question ID : 26433086903
Option 1 ID : 264330341255
Option 2 ID : 264330341256
Option 3 ID : 264330341253
Option 4 ID : 264330341254
Status : Answered
Chosen Option : 2

Q.33 Which of the following books is an autobiography of the Indian politician LK Advani?

- Ans 1. Wings of Fire: An Autobiography
 2. My Country My Life
 3. My Times: An Autobiography
 4. In Pursuit of Justice: An Autobiography

Question ID : 264330145179
Option 1 ID : 264330568974
Option 2 ID : 264330568972
Option 3 ID : 264330568971
Option 4 ID : 264330568973
Status : Answered
Chosen Option : 2

Q.34 From which five-year plan did India start its journey of industrialisation?

- Ans 1. Third Five-year Plan
 2. Second Five-year Plan
 3. Fifth Five-year Plan
 4. Fourth Five-year Plan

Question ID : 264330145231
Option 1 ID : 264330569180
Option 2 ID : 264330569182
Option 3 ID : 264330569179
Option 4 ID : 264330569181
Status : Answered
Chosen Option : 2

Q.35 Which of the following statements about green revolution is/are correct?

I. Green revolution began in the 1960s.

II. HYV of a seed made green revolution a success.

III. Extensive use of cattle was also one constituent of green revolution.

Ans 1. Only II and III

2. Only I and II

3. Only I

4. Only II

Question ID : 264330141499

Option 1 ID : 264330554333

Option 2 ID : 264330554334

Option 3 ID : 264330554331

Option 4 ID : 264330554332

Status : Answered

Chosen Option : 2

Q.36 Ghanakanta Bora Borbayan has been conferred the Padma Shri award for his contribution to which of the following fields?

Ans 1. Bhortal

2. Bagurumba

3. Satriya

4. Chhau

Question ID : 264330145161

Option 1 ID : 264330568900

Option 2 ID : 264330568899

Option 3 ID : 264330568901

Option 4 ID : 264330568902

Status : Answered

Chosen Option : 4

Q.37 The masculine aspect of the Manipuri classical dance is known as:

Ans 1. Ras

2. Choloms

3. Pareng

4. Maiba

Question ID : 26433092386

Option 1 ID : 264330362834

Option 2 ID : 264330362833

Option 3 ID : 264330362835

Option 4 ID : 264330362836

Status : Answered

Chosen Option : 2

Q.38 Which of the following Articles of the Constitution of India lays down the establishment of Public Service Commissions for the Union and for the States?

Ans 1. Article 315

2. Article 316

3. Article 317

4. Article 318

Question ID : 264330145262

Option 1 ID : 264330569303

Option 2 ID : 264330569304

Option 3 ID : 264330569305

Option 4 ID : 264330569306

Status : Answered

Chosen Option : 1

Q.39 Which of the following is an indirect tax?

Ans 1. Death duty

2. Interest tax

3. Goods and services tax

4. Capital gains tax

Question ID : 264330145244

Option 1 ID : 264330569233

Option 2 ID : 264330569232

Option 3 ID : 264330569234

Option 4 ID : 264330569231

Status : Answered

Chosen Option : 3

Q.40 The ball colour in the sport of Ball Badminton should be:

Ans 1. yellow

2. green

3. pink

4. red

Question ID : 26433059449

Option 1 ID : 264330232667

Option 2 ID : 264330232666

Option 3 ID : 264330232664

Option 4 ID : 264330232665

Status : Not Answered

Chosen Option : --

Q.41 What is the bicameral legislature of the Indian Constitution?

Ans 1. It is legislative body with three houses.

2. It is legislative body with two houses.

3. It is legislative body with one house.

4. It is legislative body with four houses.

Question ID : 264330118527

Option 1 ID : 264330465511

Option 2 ID : 264330465510

Option 3 ID : 264330465509

Option 4 ID : 264330465512

Status : Answered

Chosen Option : 2

Q.42 Neeruswamy Pillai and Rajaratanam Pillai are exponents of which musical instrument?

Ans 1. Nadaswaran

2. Mandolin

3. Mridangam

4. Sarangi

Question ID : 264330145152

Option 1 ID : 264330568863

Option 2 ID : 264330568865

Option 3 ID : 264330568864

Option 4 ID : 264330568866

Status : Not Answered

Chosen Option : --

Q.43 Living organisms have been on Earth for how much percent of Earth's history?

Ans 1. 80%

2. 20%

3. 60%

4. 40%

Question ID : 26433064467

Option 1 ID : 264330252460

Option 2 ID : 264330252463

Option 3 ID : 264330252461

Option 4 ID : 264330252462

Status : Not Answered

Chosen Option : --

Q.44 According to the 2011 Census, which state recorded the lowest literacy rate?

Ans 1. Arunachal Pradesh

2. Bihar

3. Andhra Pradesh

4. Jharkhand

Question ID : 264330110658

Option 1 ID : 264330434909

Option 2 ID : 264330434911

Option 3 ID : 264330434912

Option 4 ID : 264330434910

Status : Answered

Chosen Option : 2

Q.45 Which Article of the Indian Constitution refers to the Rights of Ministers with respect to the State Legislature?

Ans 1. Article 178

2. Article 177

3. Article 175

4. Article 176

Question ID : 264330114503

Option 1 ID : 264330450100

Option 2 ID : 264330450099

Option 3 ID : 264330450097

Option 4 ID : 264330450098

Status : Not Answered

Chosen Option : --

Q.46 In Ball Badminton, players change the ends in each game when a side first scores all of the following, EXCEPT:

- Ans 1. 18
 2. 9
 3. 27
 4. 11

Question ID : 26433059450
Option 1 ID : 264330232670
Option 2 ID : 264330232668
Option 3 ID : 264330232671
Option 4 ID : 264330232669
Status : Not Answered
Chosen Option : --

Q.47 In 1928, which equation was derived and combines quantum theory and special relativity to describe the behaviour of an electron moving at a relativistic speed?

- Ans 1. Bernoulli's equation
 2. Lorentz equation
 3. Helmholtz equation
 4. Dirac equation

Question ID : 264330141666
Option 1 ID : 264330554985
Option 2 ID : 264330554983
Option 3 ID : 264330554986
Option 4 ID : 264330554984
Status : Not Answered
Chosen Option : --

Q.48 The term 'Dribble' is generally associated with_____.

- Ans 1. cricket
 2. baseball
 3. basketball
 4. tennis

Question ID : 264330109729
Option 1 ID : 264330431195
Option 2 ID : 264330431193
Option 3 ID : 264330431194
Option 4 ID : 264330431196
Status : Answered
Chosen Option : 3

Q.49 Which of the following Sultans of Delhi was appointed as Amir-i-Tuzuk (Master of Ceremonies) before becoming the Sultan?

- Ans 1. Muhammad Bin Tughlaq
 2. Alauddin Khalji
 3. Balban
 4. Iltutmish

Question ID : 264330165362
Option 1 ID : 264330648527
Option 2 ID : 264330648529
Option 3 ID : 264330648528
Option 4 ID : 264330648530
Status : Answered
Chosen Option : 3

Q.50 Who is the author of the book 'The Soul of a Butterfly: Reflections on Life's Journey'?

- Ans 1. Jake LaMotta
 2. Eugene J Bullard
 3. Roberto Duran
 4. Muhammad Ali

Question ID : 26433071469
Option 1 ID : 264330280302
Option 2 ID : 264330280303
Option 3 ID : 264330280301
Option 4 ID : 264330280300
Status : Not Answered
Chosen Option : --

Section : Quantitative Aptitude

Q.1 Find the fourth proportional of 22, 66 and 11.

- Ans 1. 23
 2. 33
 3. 17
 4. 39

Question ID : 264330104221
Option 1 ID : 264330409186
Option 2 ID : 264330409188
Option 3 ID : 264330409187
Option 4 ID : 264330409185
Status : Answered
Chosen Option : 2

Q.2 An article is sold at a discount of 25% and an additional discount of 28% is allowed on cash payment. If Ramendra purchased the article by paying ₹10,800 in cash, then what was the marked price of the article?

- Ans 1. ₹19,800
 2. ₹20,800
 3. ₹20,000
 4. ₹18,000

Question ID : 264330165524
Option 1 ID : 264330649176
Option 2 ID : 264330649178
Option 3 ID : 264330649177
Option 4 ID : 264330649175
Status : Answered
Chosen Option : 3

Q.3 A shopkeeper marked the price as ₹15,000 on an article, and a successive discount of 5%, 10% and 20% was allowed on it. What is the selling price?

- Ans 1. ₹10,260
 2. ₹13,520
 3. ₹11,520
 4. ₹9,850

Question ID : 264330104400
Option 1 ID : 264330409902
Option 2 ID : 264330409904
Option 3 ID : 264330409901
Option 4 ID : 264330409903
Status : Answered
Chosen Option : 1

Q.4 The value of a washing machine depreciated from ₹40,960 to ₹21,970 in 3 years. Find the yearly rate of depreciation.

- Ans 1. 25%
 2. 16.25%
 3. 18.75%
 4. 20%

Question ID : 264330145063
Option 1 ID : 264330568507
Option 2 ID : 264330568508
Option 3 ID : 264330568509
Option 4 ID : 264330568510
Status : Answered
Chosen Option : 3

Q.5 A and B are equally efficient, and each can individually complete a piece of work in 36 days, if none takes any holiday. A and B started working together on this piece of work, but A took a day off after every five days of work, while B took a day off after every seven days of work. If the duo had started work on 1 July 2021, on which date was the work completed?

- Ans 1. 22 July 2021
 2. 19 July 2021
 3. 21 July 2021
 4. 20 July 2021

Question ID : 264330114532
Option 1 ID : 264330450216
Option 2 ID : 264330450215
Option 3 ID : 264330450214
Option 4 ID : 264330450213
Status : Answered
Chosen Option : 3

Q.6 The radius of a metallic spherical ball is 3 cm. If the metallic ball is melted and recast into x number of hemispheres of radius equal to half the radius of the metallic spherical ball, then find the value of x .

- Ans
- 1. 15
 - 2. 14
 - 3. 16
 - 4. 13

Question ID : 264330103636
Option 1 ID : 264330406851
Option 2 ID : 264330406850
Option 3 ID : 264330406852
Option 4 ID : 264330406849
Status : Answered
Chosen Option : 3

Q.7 Some ice pieces, spherical in shape, of diameter 6 cm are dropped in a cylindrical container containing some juice and are fully submerged. If the diameter of the container is 18 cm and level of juice rises by 40 cm, then how many ice pieces are dropped in the container?

- Ans
- 1. 95
 - 2. 85
 - 3. 80
 - 4. 90

Question ID : 264330145119
Option 1 ID : 264330568734
Option 2 ID : 264330568733
Option 3 ID : 264330568731
Option 4 ID : 264330568732
Status : Answered
Chosen Option : 4

Q.8 If the slant height of a cone is 29 cm and its height is 20 cm, find the ratio between the magnitudes of total surface area and the volume.

- Ans
- 1. 5 : 14
 - 2. 7 : 15
 - 3. 3 : 7
 - 4. 3 : 14

Question ID : 264330145106
Option 1 ID : 264330568682
Option 2 ID : 264330568680
Option 3 ID : 264330568681
Option 4 ID : 264330568679
Status : Answered
Chosen Option : 1

Q.9 In $\triangle ABC$ with sides 8 cm, 9 cm and 12 cm, the angle bisector of the largest angle divides the opposite sides into two segments. What is the length of the shorter segment?

Ans

- 1. $5\frac{11}{17}$ cm
- 2. $4\frac{11}{17}$ cm
- 3. $6\frac{13}{17}$ cm
- 4. $3\frac{9}{17}$ cm

Question ID : 264330170152

Option 1 ID : 264330667283

Option 2 ID : 264330667286

Option 3 ID : 264330667284

Option 4 ID : 264330667285

Status : Answered

Chosen Option : 1

Q.10 If $\cot^2\theta = 1 - e^2$, then the value of $\operatorname{cosec}\theta + \cot^3\theta \sec\theta$ is:

Ans

- 1. $(2 - e^2)^{\frac{1}{2}}$
- 2. $(1 - e^2)^{\frac{3}{2}}$
- 3. $(1 - e^2)$
- 4. $(2 - e^2)^{\frac{3}{2}}$

Question ID : 264330145133

Option 1 ID : 264330568789

Option 2 ID : 264330568787

Option 3 ID : 264330568790

Option 4 ID : 264330568788

Status : Answered

Chosen Option : 4

Q.11 If $\frac{2 \sin A - \cos A}{\sin A + \cos A} = 1$, then find the value of $\cot A$.

Ans

- 1. 1
- 2. $\frac{1}{2}$
- 3. $\frac{1}{3}$
- 4. 2

Question ID : 264330157750

Option 1 ID : 264330618359

Option 2 ID : 264330618361

Option 3 ID : 264330618362

Option 4 ID : 264330618360

Status : Answered

Chosen Option : 2

Q.12 A, B and C can do a piece of work in 11 days, 20 days and 55 days respectively. How soon can the work be done if A works with B on first day, A works with C on second day and so on?

- Ans
- 1. $8\frac{1}{2}$ days
 - 2. $9\frac{1}{2}$ days
 - 3. 8 days
 - 4. 9 days

Question ID : 26433082415
Option 1 ID : 264330323494
Option 2 ID : 264330323496
Option 3 ID : 264330323493
Option 4 ID : 264330323495
Status : Answered
Chosen Option : 3

Q.13 Study the given table and answer the question that follows.

Number of children	Number of families
0	4
1	22
2	15
3	6
4	2

The average number of children per family is:

- Ans
- 1. 1.47
 - 2. 1.59
 - 3. 1.23
 - 4. 1.72

Question ID : 264330145023
Option 1 ID : 264330568348
Option 2 ID : 264330568349
Option 3 ID : 264330568347
Option 4 ID : 264330568350
Status : Answered
Chosen Option : 2

Q.14 A fast local of Mumbai takes 45 minutes less than a slow local for a journey of 150 km. If the speed of the fast local is 10 km/h more than that of the slow local, find the speed (in km/h) of the slow local train.

- Ans
- 1. 30
 - 2. 35
 - 3. 45
 - 4. 40

Question ID : 264330103988
Option 1 ID : 264330408253
Option 2 ID : 264330408254
Option 3 ID : 264330408256
Option 4 ID : 264330408255
Status : Answered
Chosen Option : 4

Q.15 In a school of 720 students, the ratio of boys to girls is 3 : 5. Find how many new boys may be allowed to the school if 18 new girls are admitted, so that the ratio of boys to girls changes to 2 : 3.

Ans 1. 42

2. 44

3. 50

4. 38

Question ID : 264330145047

Option 1 ID : 264330568443

Option 2 ID : 264330568445

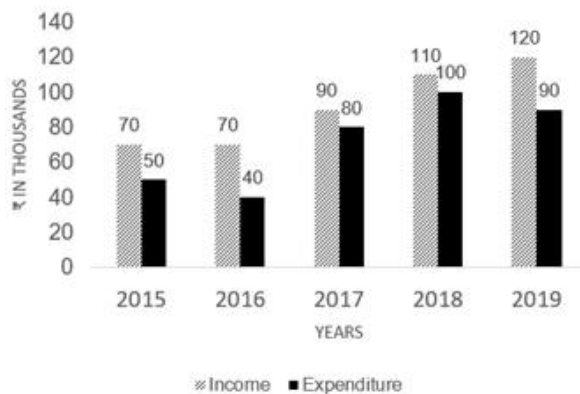
Option 3 ID : 264330568446

Option 4 ID : 264330568444

Status : Answered

Chosen Option : 1

Q.16 The given graph shows the income and expenditure of a family. Study the graph and answer the question that follows.



The expenditure of the family increased by _____ from 2017 to 2018.

Ans 1. 25%

2. 11%

3. 22%

4. 20%

Question ID : 264330165431

Option 1 ID : 264330648803

Option 2 ID : 264330648805

Option 3 ID : 264330648804

Option 4 ID : 264330648806

Status : Answered

Chosen Option : 1

Q.17 Which of the following is the greatest four-digit number that is divisible by 15, 25, 40, and 75?

Ans 1. 9200

2. 9500

3. 9600

4. 9000

Question ID : 264330145051

Option 1 ID : 264330568460

Option 2 ID : 264330568462

Option 3 ID : 264330568461

Option 4 ID : 264330568459

Status : Answered

Chosen Option : 3

Q.18 What is the average of the first six prime numbers?

Ans

1. $6\frac{1}{3}$

2. $6\frac{5}{6}$

3. $6\frac{2}{3}$

4. $6\frac{1}{6}$

Question ID : 264330104485

Option 1 ID : 264330410242

Option 2 ID : 264330410243

Option 3 ID : 264330410244

Option 4 ID : 264330410241

Status : Answered

Chosen Option : 2

Q.19 Ayush spends 25% of an amount of money on an insurance policy, 26% on food, 23% on children's education and 19% on recreation. He deposits the remaining amount of ₹26,600 in the bank. What is the total amount (in ₹) that he spends on food and recreation together?

Ans

1. 1,95,000

2. 1,71,000

3. 1,62,000

4. 1,83,000

Question ID : 264330158256

Option 1 ID : 264330620383

Option 2 ID : 264330620385

Option 3 ID : 264330620386

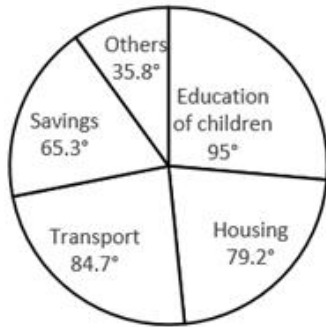
Option 4 ID : 264330620384

Status : Answered

Chosen Option : 2

Q.20 Study the given pie-chart carefully and answer the question that follows.
Degree wise Break-up of Expenditure of a Family in a Month

Total Amount Spent In a
Month = ₹56800.



What is the amount spent by the family on housing?

- Ans
- 1. ₹11,814
 - 2. ₹6,248
 - 3. ₹10,615
 - 4. ₹12,496

Question ID : 264330165434

Option 1 ID : 264330648815

Option 2 ID : 264330648818

Option 3 ID : 264330648817

Option 4 ID : 264330648816

Status : Answered

Chosen Option : 4

Q.21 The number of balls, each one is 4 cm in the diameter that can be made from a solid metallic sphere of diameter 32 cm is:

- Ans
- 1. 256
 - 2. 64
 - 3. 512
 - 4. 1024

Question ID : 264330165654

Option 1 ID : 264330649697

Option 2 ID : 264330649695

Option 3 ID : 264330649696

Option 4 ID : 264330649698

Status : Answered

Chosen Option : 3

Q.22 Simplify the given expression.

$$b + 2a - [(3b + a) - (2a + b) + 2a] - a$$

- Ans
- 1. $-a$
 - 2. b
 - 3. $-b$
 - 4. a

Question ID : 264330157761
Option 1 ID : 264330618406
Option 2 ID : 264330618403
Option 3 ID : 264330618404
Option 4 ID : 264330618405
Status : Answered
Chosen Option : 3

Q.23 In a store, Arun has two options to buy a mobile phone, either he can pay the full amount of Rs.2,500 or he may buy at an instalment scheme, i.e. Rs.520 in down payment and four equal instalments, rate of interest being charged at 25% p.a. simple interest. Arun buys a mobile phone on the instalment scheme. What is the monthly instalment for Arun?

- Ans
- 1. Rs.510
 - 2. Rs.530
 - 3. Rs.550
 - 4. Rs.520

Question ID : 26433063339
Option 1 ID : 264330248011
Option 2 ID : 264330248008
Option 3 ID : 264330248009
Option 4 ID : 264330248010
Status : Answered
Chosen Option : 3

Q.24 In a 1200 m race, Rakesh reaches the final point in 36 seconds and Rajesh reaches in 40 sec. By how much distance does Rakesh beat Rajesh?

- Ans
- 1. 130 m
 - 2. 120 m
 - 3. 140 m
 - 4. 150 m

Question ID : 264330145065
Option 1 ID : 264330568516
Option 2 ID : 264330568515
Option 3 ID : 264330568517
Option 4 ID : 264330568518
Status : Answered
Chosen Option : 2

Q.25 Rakesh runs a coaching institute having 50 faculty members. The average monthly salary of 35 faculty members is ₹37,500. What will be the average monthly salary (in ₹) of the other 15 faculty members, if the average monthly salary of all the 50 faculty members is found to be ₹30,000?

- Ans
- 1. 13,000
 - 2. 13,500
 - 3. 12,500
 - 4. 12,000

Question ID : 264330165667
Option 1 ID : 264330649749
Option 2 ID : 264330649750
Option 3 ID : 264330649748
Option 4 ID : 264330649747
Status : Answered
Chosen Option : 3

Q.26 If $\sin\theta + \cos\theta = \sqrt{2} \cos\theta$, then find $\frac{\sin\theta - \cos\theta}{\sin\theta}$:

- Ans
- 1. $-\sqrt{2}$
 - 2. -1
 - 3. 1
 - 4. $\sqrt{2}$

Question ID : 264330158420
Option 1 ID : 264330621042
Option 2 ID : 264330621040
Option 3 ID : 264330621039
Option 4 ID : 264330621041
Status : Answered
Chosen Option : 1

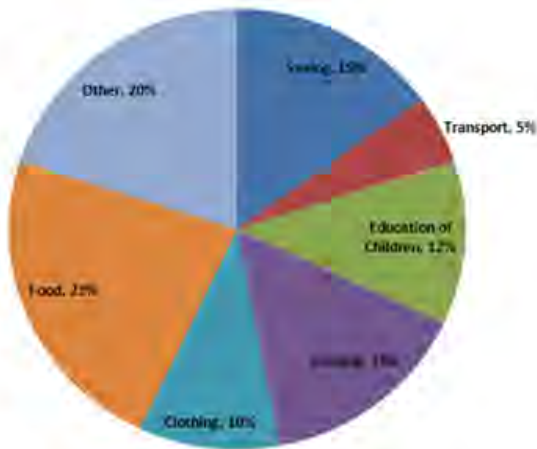
Q.27 Ankita sold three toys. The first toy was sold for ₹1,500 at a profit of 25%; the second toy was sold for ₹2,800 at a loss of 50% and the third toy was sold for ₹3,500 at a profit of 25%. Find her total profit or loss percentage.

- Ans
- 1. 15.25% loss
 - 2. 15.25% profit
 - 3. 18.75% profit
 - 4. 18.75% loss

Question ID : 264330131457
Option 1 ID : 264330514932
Option 2 ID : 264330514931
Option 3 ID : 264330514933
Option 4 ID : 264330514934
Status : Answered
Chosen Option : 4

Q.28 Study the given pie-chart and answer the question that follows.

The pie-chart shows the expenditure of a family on different items and their savings throughout the year 2021.



If the total income for the year was ₹1,00,000, then the difference in the expenses (in ₹) between housing and transport was:

- Ans
- 1. 9,500
 - 2. 10,500
 - 3. 9,000
 - 4. 10,000

Question ID : 264330163476

Option 1 ID : 264330641164

Option 2 ID : 264330641166

Option 3 ID : 264330641163

Option 4 ID : 264330641165

Status : Answered

Chosen Option : 4

Q.29 Simplify the given expression.

$$(x - 2y)(y - 3x) + (x + y)(x - y) + (x - 3y)(2x + y)$$

- Ans
- 1. $2y(x - 3y)$
 - 2. $2y(x + 3y)$
 - 3. $2x(x - 3y)$
 - 4. $2x(x + 3y)$

Question ID : 264330157774

Option 1 ID : 264330618456

Option 2 ID : 264330618458

Option 3 ID : 264330618455

Option 4 ID : 264330618457

Status : Answered

Chosen Option : 1

Q.30 The least number of five digits which is exactly divisible by 9, 12, 15, 25 and 27 is:

Ans 1. 10800

2. 10250

3. 10700

4. 10600

Question ID : 26433064889

Option 1 ID : 264330254149

Option 2 ID : 264330254151

Option 3 ID : 264330254150

Option 4 ID : 264330254148

Status : Answered

Chosen Option : 1

Q.31 The LCM of two numbers is five times their HCF. If the product of the two numbers is 20480, then find their HCF and LCM, respectively.

Ans 1. 46 and 230

2. 48 and 240

3. 64 and 320

4. 56 and 280

Question ID : 26433065040

Option 1 ID : 264330254753

Option 2 ID : 264330254754

Option 3 ID : 264330254752

Option 4 ID : 264330254755

Status : Answered

Chosen Option : 3

Q.32 Find the HCF of 125, 250 and 750.

Ans 1. 50

2. 25

3. 125

4. 75

Question ID : 26433065033

Option 1 ID : 264330254725

Option 2 ID : 264330254724

Option 3 ID : 264330254727

Option 4 ID : 264330254726

Status : Answered

Chosen Option : 3

Q.33 The LCM of 8, 12 and 18 is:

Ans 1. 24

2. 80

3. 72

4. 36

Question ID : 264330145079

Option 1 ID : 264330568571

Option 2 ID : 264330568574

Option 3 ID : 264330568573

Option 4 ID : 264330568572

Status : Answered

Chosen Option : 3

Q.34 Study the given table and answer the question that follows.

The table shows the number of employees in three organisations during three years.

Year	2018	2019	2020
Organization			
P	75	69	85
Q	96	81	74
R	85	63	90

What is the respective ratio between total number of employees in organisations P and R together in 2019 and total number of employees in organisations Q and R together in 2020?

- Ans** 1. 23 : 41
 2. 33 : 41
 3. 41 : 31
 4. 33 : 23

Question ID : 264330158264
Option 1 ID : 264330620415
Option 2 ID : 264330620418
Option 3 ID : 264330620417
Option 4 ID : 264330620416
Status : Answered
Chosen Option : 2

Q.35 The ratio of monthly income and expenditure of a man is 7:3. If his expenditure is ₹5,400, find his monthly income.

- Ans** 1. ₹12,600
 2. ₹13,300
 3. ₹11,500
 4. ₹10,400

Question ID : 264330145070
Option 1 ID : 264330568537
Option 2 ID : 264330568538
Option 3 ID : 264330568536
Option 4 ID : 264330568535
Status : Answered
Chosen Option : 1

Q.36 If 30% of Ravi's income is equal to 40% of Suresh's income, then 50% of Ravi's income is equal to what percentage of Suresh's income?

- Ans
- 1. $66\frac{1}{3}\%$
 - 2. $33\frac{1}{3}\%$
 - 3. $33\frac{2}{3}\%$
 - 4. $66\frac{2}{3}\%$

Question ID : 264330103394
Option 1 ID : 264330405882
Option 2 ID : 264330405883
Option 3 ID : 264330405884
Option 4 ID : 264330405881
Status : Answered
Chosen Option : 4

Q.37 If Arun can complete $\frac{2}{3}$ rd of a work in 12 days, then in how many days can he complete $\frac{1}{6}$ th of the same work?

- Ans
- 1. 3
 - 2. 4
 - 3. 5
 - 4. 2

Question ID : 264330101377
Option 1 ID : 264330398056
Option 2 ID : 264330398055
Option 3 ID : 264330398054
Option 4 ID : 264330398053
Status : Answered
Chosen Option : 1

Q.38 The chord of a circle is equal to its radius. Find the difference between the angle subtended by this chord at the minor arc and major arc of the circle.

- Ans
- 1. 30°
 - 2. 120°
 - 3. 60°
 - 4. 150°

Question ID : 264330165539
Option 1 ID : 264330649235
Option 2 ID : 264330649236
Option 3 ID : 264330649237
Option 4 ID : 264330649238
Status : Answered
Chosen Option : 2

Q.39 The length of the common chord of two intersecting circles is 24 cm. If the diameter of the circles are 30 cm and 26 cm, then the distance between the centres (in cm) is:

- Ans 1. 16 cm
 2. 14 cm
 3. 18 cm
 4. 12 cm

Question ID : 264330170155
Option 1 ID : 264330667296
Option 2 ID : 264330667298
Option 3 ID : 264330667297
Option 4 ID : 264330667295
Status : Answered
Chosen Option : 2

Q.40 Study the given table and answer the question that follows.
The table shows the number of students in various courses in various cities A, B, C, D and E in India during the academic year 2022-2023.

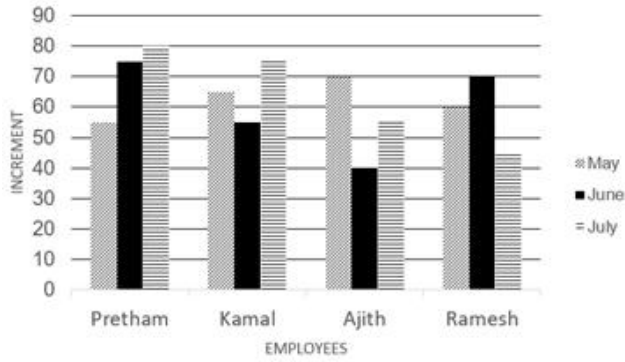
City	MBA	Science	Engineering	Medicine	MCA	Total
A	1200	2560	4520	1100	960	10340
B	1350	2650	5100	1050	850	11000
C	1250	2640	4580	1120	750	10340
D	1960	1250	3500	1850	1600	10160
E	1200	2100	3500	960	540	8300

During the academic year 2022-2023, which city had the largest number of students?

- Ans 1. C
 2. D
 3. A
 4. B

Question ID : 264330157714
Option 1 ID : 264330618217
Option 2 ID : 264330618218
Option 3 ID : 264330618215
Option 4 ID : 264330618216
Status : Answered
Chosen Option : 4

Q.41 Study the given bar graph carefully and answer the question that follows. Increment of four employees (in ₹) in the months of May, June and July.



What is Kamal's overall average increment in three months?

- Ans
- 1. ₹60
 - 2. ₹70
 - 3. ₹75
 - 4. ₹65

Question ID : 264330165427

Option 1 ID : 264330648788

Option 2 ID : 264330648790

Option 3 ID : 264330648789

Option 4 ID : 264330648787

Status : Answered

Chosen Option : 4

Q.42 A hollow cylindrical tube made of plastic is 3 cm thick. If the external diameter is 20 cm and length of the tube is 49 cm, find the volume of the plastic.

- Ans
- 1. 7238 cm³
 - 2. 7644 cm³
 - 3. 7546 cm³
 - 4. 7854 cm³

Question ID : 264330103644

Option 1 ID : 264330406882

Option 2 ID : 264330406884

Option 3 ID : 264330406881

Option 4 ID : 264330406883

Status : Answered

Chosen Option : 4

Q.43 The value of $2\tan^2 45^\circ + \cos^2 30^\circ - \sin^2 60^\circ$ is:

- Ans
- 1. 2
 - 2. 1
 - 3. -1
 - 4. -2

Question ID : 264330157752

Option 1 ID : 264330618368

Option 2 ID : 264330618367

Option 3 ID : 264330618369

Option 4 ID : 264330618370

Status : Answered

Chosen Option : 1

Q.44 A shopkeeper sells sugar at ₹40 per kg, which he purchased at ₹36 per kg. His weighing machine is faulty and it weighs only 800 gm while selling. His percentage profit (correct to 2 decimal places) is:

- Ans
- 1. 37.58%
 - 2. 40%
 - 3. 39.28%
 - 4. 38.89%

Question ID : 26433099045
 Option 1 ID : 264330388820
 Option 2 ID : 264330388817
 Option 3 ID : 264330388818
 Option 4 ID : 264330388819
 Status : Answered
 Chosen Option : 4

Q.45 ΔPQR is right angled at Q such that $PQ=(x-y)$, $QR=x$ and $PR=(x+y)$. S is a point on QR such that $QS=PQ$. The ratio QS:SR for any values of x and y is:

- Ans
- 1. 3 : 1
 - 2. 2 : 1
 - 3. 1 : 2
 - 4. 1 : 3

Question ID : 264330158286
 Option 1 ID : 264330620503
 Option 2 ID : 264330620505
 Option 3 ID : 264330620506
 Option 4 ID : 264330620504
 Status : Not Answered
 Chosen Option : --

Q.46 The following table represents the number of scooters sold by 5 stores in 4 different months in the year 2022.

Months \ Stores	A	B	C	D	E
January	212	168	173	182	190
February	312	250	212	175	182
March	280	275	265	255	245
April	270	280	290	305	275

Find the ratio between the total number of scooters sold by stores A and B together in January and the total number of scooters sold by stores D and E together in March?

- Ans
- 1. 20 : 23
 - 2. 18 : 23
 - 3. 17 : 25
 - 4. 19 : 25

Question ID : 264330167250
 Option 1 ID : 264330655996
 Option 2 ID : 264330655997
 Option 3 ID : 264330655998
 Option 4 ID : 264330655995
 Status : Answered
 Chosen Option : 4

Q.47 A man covers a certain distance by bike. If he covers 25% of the distance at the speed of 25 km/h, 50% of the distance at the speed of 50 km/h and the remaining distance at the speed of 12.5 km/h, find his average speed over the whole journey.

- Ans
- 1. 20 km/h
 - 2. 30 km/h
 - 3. 25 km/h
 - 4. 35 km/h

Question ID : 26433063952
 Option 1 ID : 264330250400
 Option 2 ID : 264330250402
 Option 3 ID : 264330250401
 Option 4 ID : 264330250403
 Status : Answered
 Chosen Option : 3

Q.48 If the sum of two numbers is 60 and their HCF and LCM are 5 and 60, respectively, then the sum of the reciprocals of the numbers will be:

- Ans
- 1. $\frac{1}{11}$
 - 2. $\frac{1}{6}$
 - 3. $\frac{1}{4}$
 - 4. $\frac{1}{5}$

Question ID : 26433096373
 Option 1 ID : 264330378232
 Option 2 ID : 264330378231
 Option 3 ID : 264330378229
 Option 4 ID : 264330378230
 Status : Answered
 Chosen Option : 4

Q.49 The following table gives the number of different types of batteries sold by a company over the years (numbers in hundreds).

Type of battery \ Year	7AH	32AH	35AH	55AH
2018	20	30	40	50
2019	40	35	45	45
2020	50	40	40	40
2021	40	50	50	45
2022	45	45	35	55

What is the difference in the number of 7AH batteries sold in 2021 and 2022?

- Ans
- 1. 200
 - 2. 700
 - 3. 300
 - 4. 500

Question ID : 264330167252
 Option 1 ID : 264330656003
 Option 2 ID : 264330656006
 Option 3 ID : 264330656004
 Option 4 ID : 264330656005
 Status : Answered
 Chosen Option : 4

Q.50 The HCF and LCM of two numbers are 9 and 126, respectively. Find the larger number, if the ratio between the numbers is 2 : 7.

- Ans 1. 42
 2. 63
 3. 77
 4. 21

Question ID : 26433063284
Option 1 ID : 264330247790
Option 2 ID : 264330247789
Option 3 ID : 264330247791
Option 4 ID : 264330247788
Status : Answered
Chosen Option : 2

Section : English Comprehension

Q.1 Select the most appropriate option that can substitute the underlined segment in the given sentence.

The concert was filled with rapt teenage listeners.

- Ans 1. really fashionable
 2. boldly dressed
 3. truly energetic
 4. fully attentive

Question ID : 26433099880
Option 1 ID : 264330392109
Option 2 ID : 264330392112
Option 3 ID : 264330392110
Option 4 ID : 264330392111
Status : Answered
Chosen Option : 3

Q.2 Select the most appropriate ANTONYM of the given word.
Decline

- Ans 1. Escape
 2. Ascend
 3. Demonstrate
 4. Traverse

Question ID : 26433099652
Option 1 ID : 264330391214
Option 2 ID : 264330391216
Option 3 ID : 264330391213
Option 4 ID : 264330391215
Status : Answered
Chosen Option : 2

Q.3 Select the most appropriate option that can substitute the underlined segment in the given sentence. If there is no need to substitute it, select 'No substitution required'.
It was a quite afternoon, so Dan decided to take a nap.

- Ans
- 1. an quiet
 - 2. an quite
 - 3. No substitution required
 - 4. a quiet

Question ID : 26433070770
Option 1 ID : 264330277538
Option 2 ID : 264330277536
Option 3 ID : 264330277539
Option 4 ID : 264330277537
Status : Answered
Chosen Option : 3

Q.4 Select the most appropriate option to fill in the blank.
This is not _____ exhaustive list of words.

- Ans
- 1. many
 - 2. an
 - 3. a
 - 4. No word required

Question ID : 264330145275
Option 1 ID : 264330569355
Option 2 ID : 264330569357
Option 3 ID : 264330569356
Option 4 ID : 264330569358
Status : Answered
Chosen Option : 2

Q.5 Select the most appropriate meaning of the highlighted idiom in the given sentence.

She said she liked my hair, but it turned out to be a left handed compliment.

- Ans
- 1. A joke
 - 2. A flattery
 - 3. An insult
 - 4. A praise

Question ID : 264330108898
Option 1 ID : 264330427870
Option 2 ID : 264330427871
Option 3 ID : 264330427872
Option 4 ID : 264330427869
Status : Answered
Chosen Option : 3

Q.6 Select the most appropriate ANTONYM of the given word.

Redemption

- Ans** 1. Salvation
 2. Blasphemy
 3. Corrugation
 4. Conjunction

Question ID : 264330163398
Option 1 ID : 264330640871
Option 2 ID : 264330640872
Option 3 ID : 264330640873
Option 4 ID : 264330640874
Status : Answered
Chosen Option : 2

Q.7 Parts of the following sentence have been underlined and given as options. Select the option that contains an error.

Have they been work in that particular shop for several years?

- Ans** 1. work
 2. been
 3. for
 4. Have

Question ID : 26433089373
Option 1 ID : 264330350995
Option 2 ID : 264330350994
Option 3 ID : 264330350996
Option 4 ID : 264330350993
Status : Answered
Chosen Option : 1

Q.8 Select the correct spelling of the incorrectly spelt word.

He had a round face made jovial by bright, almost boyish eyes and eyebrows
ridiculusly small for a man his size.

- Ans** 1. ridicolusly
 2. jouvial
 3. juvial
 4. ridiculously

Question ID : 26433088981
Option 1 ID : 264330349463
Option 2 ID : 264330349462
Option 3 ID : 264330349464
Option 4 ID : 264330349461
Status : Answered
Chosen Option : 4

Q.9 Select the word segment that substitutes (replaces) the bracketed word segment correctly and completes the sentence meaningfully:
Unless you (do will not prepare) well you will not perform well.

- Ans 1. would not prepare
 2. prepare
 3. will do not prepare
 4. will prepare

Question ID : 26433088800
Option 1 ID : 264330348756
Option 2 ID : 264330348754
Option 3 ID : 264330348753
Option 4 ID : 264330348755
Status : Answered
Chosen Option : 2

Q.10 Select the most appropriate meaning of the given idiom.

Bite the bullet

- Ans 1. Decide to do what is good
 2. To bite something very hard
 3. Decide to do the inevitable which you were avoiding
 4. Decide to take the easier way out

Question ID : 264330163380
Option 1 ID : 264330640808
Option 2 ID : 264330640807
Option 3 ID : 264330640809
Option 4 ID : 264330640810
Status : Answered
Chosen Option : 3

Q.11 Select the most appropriate ANTONYM of the given word.
Resolute

- Ans 1. Serious
 2. Wavering
 3. Steadfast
 4. Brave

Question ID : 26433098994
Option 1 ID : 264330388620
Option 2 ID : 264330388618
Option 3 ID : 264330388617
Option 4 ID : 264330388619
Status : Answered
Chosen Option : 2

Q.12 The following sentence has been split into four segments. Identify the segment that contains a grammatical error.

Roger went / to an United Kingdom / with his wife / to celebrate Christmas.

- Ans
- 1. Roger went
 - 2. to an United Kingdom
 - 3. to celebrate Christmas
 - 4. with his wife

Question ID : 264330120603
Option 1 ID : 264330472651
Option 2 ID : 264330472652
Option 3 ID : 264330472654
Option 4 ID : 264330472653
Status : Answered
Chosen Option : 2

Q.13 Some words in the following sentences have been underlined and given as options. Select the option that contains a spelling error.

Why is everyone so dressed up? What's the occaseon? Is it a wedding?

- Ans
- 1. wedding
 - 2. occaseon
 - 3. everyone
 - 4. dressed

Question ID : 264330121269
Option 1 ID : 264330475282
Option 2 ID : 264330475281
Option 3 ID : 264330475279
Option 4 ID : 264330475280
Status : Answered
Chosen Option : 2

Q.14 Select the option that can be used as a one-word substitute for the given group of words.

To restrain or compel a person to do something by force.

- Ans
- 1. Convoy
 - 2. Consensus
 - 3. Coerce
 - 4. Casualty

Question ID : 26433088803
Option 1 ID : 264330348765
Option 2 ID : 264330348767
Option 3 ID : 264330348768
Option 4 ID : 264330348766
Status : Answered
Chosen Option : 3

Q.15 Select the most appropriate option that can substitute the underlined segment in the given sentence.

Health insurance are important today since anyone can face a medical emergency without warning.

- Ans
- 1. will be important
 - 2. has been important
 - 3. was important
 - 4. is important

Question ID : 26433081324
Option 1 ID : 264330319141
Option 2 ID : 264330319144
Option 3 ID : 264330319143
Option 4 ID : 264330319142
Status : Answered
Chosen Option : 4

Q.16 Select the most appropriate meaning of the given idiom.
Spill the beans

- Ans
- 1. To make anything visible
 - 2. To reveal secret information
 - 3. To ruin someone's plan
 - 4. To talk randomly

Question ID : 264330117235
Option 1 ID : 264330460998
Option 2 ID : 264330461000
Option 3 ID : 264330460999
Option 4 ID : 264330460997
Status : Answered
Chosen Option : 2

Q.17 Select the option that will improve the underlined part of the given sentence.
People say different things at different times.

- Ans
- 1. should say fanciful things at different times
 - 2. says delectable things at different times
 - 3. says whimsical things at different times
 - 4. say diverse things at different times

Question ID : 264330145289
Option 1 ID : 264330569413
Option 2 ID : 264330569412
Option 3 ID : 264330569411
Option 4 ID : 264330569414
Status : Answered
Chosen Option : 4

Q.18 Select the most appropriate ANTONYM of the given word.
Together

- Ans 1. Apart
 2. United
 3. Freight
 4. Engulf

Question ID : 264330164274
Option 1 ID : 264330644320
Option 2 ID : 264330644319
Option 3 ID : 264330644322
Option 4 ID : 264330644321
Status : Answered
Chosen Option : 1

Q.19 Select the most appropriate ANTONYM of the given word.
Magnificent

- Ans 1. Impressive
 2. Peaceful
 3. Quiet
 4. Modest

Question ID : 264330164171
Option 1 ID : 264330643936
Option 2 ID : 264330643937
Option 3 ID : 264330643938
Option 4 ID : 264330643935
Status : Answered
Chosen Option : 4

Q.20 Select the most appropriate idiom to fill in the blank.
I have all the technical and communication skills necessary to crack any interview; it
will be _____ .

- Ans 1. a storm in a tea cup
 2. a chip on my shoulder
 3. a hard nut to crack
 4. a piece of cake for me

Question ID : 264330134220
Option 1 ID : 264330525878
Option 2 ID : 264330525876
Option 3 ID : 264330525875
Option 4 ID : 264330525877
Status : Answered
Chosen Option : 4

Q.21 Select the most appropriate idiom for the underlined word segment.
He seems to be undecided about whether to move to another city for better prospects.

- Ans
- 1. Bouncing off the walls
 - 2. Running out of steam
 - 3. Sitting on the fence
 - 4. Counting down the days

Question ID : 264330167999
Option 1 ID : 264330658888
Option 2 ID : 264330658890
Option 3 ID : 264330658889
Option 4 ID : 264330658887
Status : Answered
Chosen Option : 3

Q.22 The following sentence has been split into four segments. Identify the segment that contains a grammatical error.

I have a dog and a cow. / A dog is black / but the cow is / black and white.

- Ans
- 1. A dog is black
 - 2. black and white
 - 3. but the cow is
 - 4. I have a dog and a cow

Question ID : 264330120602
Option 1 ID : 264330472648
Option 2 ID : 264330472650
Option 3 ID : 264330472649
Option 4 ID : 264330472647
Status : Answered
Chosen Option : 1

Q.23 Select the most appropriate synonym of the underlined word.
Improved rail transport is essential for business.

- Ans
- 1. Recommended
 - 2. Trivial
 - 3. Crucial
 - 4. Technical

Question ID : 264330117332
Option 1 ID : 264330461381
Option 2 ID : 264330461384
Option 3 ID : 264330461383
Option 4 ID : 264330461382
Status : Answered
Chosen Option : 3

Q.24 Select the most appropriate synonym of the given word.

Desolate

- Ans** 1. Fortunate
 2. Sturdy
 3. Depressive
 4. Hopeful

Question ID : 264330163331
Option 1 ID : 264330640623
Option 2 ID : 264330640626
Option 3 ID : 264330640625
Option 4 ID : 264330640624
Status : Answered
Chosen Option : 3

Q.25 Select the option that can be used as a one-word substitute for the given group of words.

An act of exchanging information

- Ans** 1. Collaboration
 2. Communication
 3. Touch
 4. Hold

Question ID : 26433088440
Option 1 ID : 264330347348
Option 2 ID : 264330347345
Option 3 ID : 264330347347
Option 4 ID : 264330347346
Status : Answered
Chosen Option : 2

Q.26 Select the correct spelling of the incorrectly spelt word.

They were more often abnoxious than not, impatient with me because my services had been essentially imposed upon them.

- Ans** 1. obnoxious
 2. impatint
 3. servises
 4. essentialy

Question ID : 26433088984
Option 1 ID : 264330349475
Option 2 ID : 264330349473
Option 3 ID : 264330349474
Option 4 ID : 264330349476
Status : Answered
Chosen Option : 1

Q.27 Select the most appropriate ANTONYM of the underlined word in the given sentence.

All members of the association adhere to a strict code of practice.

- Ans 1. observe
 2. cling
 3. flout
 4. comply

Question ID : 264330117116
Option 1 ID : 264330460534
Option 2 ID : 264330460536
Option 3 ID : 264330460535
Option 4 ID : 264330460533
Status : Answered
Chosen Option : 3

Q.28 Select the most appropriate ANTONYM for the highlighted word.
She has a penchant for art and craft.

- Ans 1. anxiety
 2. hatred
 3. fear
 4. joy

Question ID : 264330120739
Option 1 ID : 264330473173
Option 2 ID : 264330473171
Option 3 ID : 264330473174
Option 4 ID : 264330473172
Status : Answered
Chosen Option : 2

Q.29 Select the most appropriate option that can substitute the underlined segment in the given sentence.

The team leader tried to remain positive or optimistic in the situation, even though they were facing tough competition and limited resources.

- Ans 1. to put a strong hand forward
 2. to put on a strong exterior
 3. to put a strong desire in front of
 4. to put a brave face on

Question ID : 264330139271
Option 1 ID : 264330545600
Option 2 ID : 264330545601
Option 3 ID : 264330545599
Option 4 ID : 264330545602
Status : Answered
Chosen Option : 4

Q.30 Select the most appropriate ANTONYM of the given word.
Superb

- Ans 1. Infallible
 2. Incurable
 3. Inferior
 4. Splendid

Question ID : 264330164275
Option 1 ID : 264330644325
Option 2 ID : 264330644324
Option 3 ID : 264330644326
Option 4 ID : 264330644323
Status : Answered
Chosen Option : 3

Q.31 Choose the most appropriate meaning of the underlined phrase.
He was carried off his feet when he was declared to have won the prize.

- Ans 1. Was wild with excitement
 2. Was dizzy
 3. Became delirious
 4. Danced on his toes

Question ID : 264330137452
Option 1 ID : 264330538432
Option 2 ID : 264330538433
Option 3 ID : 264330538434
Option 4 ID : 264330538431
Status : Answered
Chosen Option : 1

Q.32 Select the most appropriate phrasal verb to fill in the blank.
It took seven years for Harish to _____ his migraine.

- Ans 1. shake down
 2. shake up
 3. shake out
 4. shake off

Question ID : 26433084920
Option 1 ID : 264330333403
Option 2 ID : 264330333404
Option 3 ID : 264330333401
Option 4 ID : 264330333402
Status : Answered
Chosen Option : 3

Q.33 Select the most appropriate meaning of the underlined idiom that can be substituted in the following sentence.

The new routine will suit you to a T.

- Ans 1. nicely
 2. a little bit
 3. exactly
 4. very poorly

Question ID : 26433094760
Option 1 ID : 264330371873
Option 2 ID : 264330371876
Option 3 ID : 264330371874
Option 4 ID : 264330371875
Status : Answered
Chosen Option : 3

Q.34 Select the most appropriate meaning of the given idiom.

Spill the beans

- Ans 1. Sound familiar
 2. Fail to make an impact
 3. To be very expensive
 4. Give away a secret

Question ID : 26433091830
Option 1 ID : 264330360659
Option 2 ID : 264330360657
Option 3 ID : 264330360660
Option 4 ID : 264330360658
Status : Answered
Chosen Option : 4

Q.35 Replace the underlined segment with the most appropriate idiom/phrase from the following options.

This is the critical point of the issue. One should always be focused on it.

- Ans 1. Chip off the old block
 2. A black sheep
 3. The crux of the matter
 4. Don't cry over spilt milk

Question ID : 26433091834
Option 1 ID : 264330360673
Option 2 ID : 264330360675
Option 3 ID : 264330360676
Option 4 ID : 264330360674
Status : Answered
Chosen Option : 3

Q.36 Select the most appropriate option that can substitute the underlined segment in the given sentence.

I like all games instead of cricket.

- Ans
- 1. rather
 - 2. exclude
 - 3. object
 - 4. except

Question ID : 26433098974
Option 1 ID : 264330388548
Option 2 ID : 264330388545
Option 3 ID : 264330388546
Option 4 ID : 264330388547
Status : Answered
Chosen Option : 4

Q.37 Select the option that can be used as a one-word substitute for the given group of words.

Requiring exceptional skill or caution in performance or handling

- Ans
- 1. Blunt
 - 2. Tricky
 - 3. Sustainable
 - 4. Abstract

Question ID : 26433088447
Option 1 ID : 264330347376
Option 2 ID : 264330347374
Option 3 ID : 264330347375
Option 4 ID : 264330347373
Status : Answered
Chosen Option : 2

Q.38 The following sentence has been divided into parts. One of them may contain an error. Select the part that contains the error from the given options. If you don't find any error, mark 'No error' as your answer.

(1) He could / (2) be pass his exams / (3) if he studied harder. / (4) No error

- Ans
- 1. 2
 - 2. 1
 - 3. 3
 - 4. 4

Question ID : 264330164351
Option 1 ID : 264330644616
Option 2 ID : 264330644615
Option 3 ID : 264330644617
Option 4 ID : 264330644618
Status : Answered
Chosen Option : 1

Q.39 Select the most appropriate option that can substitute the underlined word which has been incorrectly spelt.
They have begun to study in sepparate rooms.

- Ans**
- 1. saperate
 - 2. separate
 - 3. seprate
 - 4. saparate

Question ID : 264330123043
Option 1 ID : 264330482238
Option 2 ID : 264330482236
Option 3 ID : 264330482235
Option 4 ID : 264330482237
Status : Answered
Chosen Option : 2

Q.40 Select the sentence that has a spelling error.

- A- One has to understand the rudimentary fact that intelligence and intellect are at two opposite poles.
- B- An intellectual person may have all the knowledge of the world but won't know how to give it a shape.
- C- Knowledge will plague the individual if he does not have the intelligence to express it.
- D- Without basic intelligence, an individual is trapped within himself manifesting conflicts and ignorance in the external world.

- Ans**
- 1. Without basic intelligence, an individual is trapped within himself, manifesting conflicts and ignorance in the external world.
 - 2. An intellectual person may have all the knowledge of the world but won't know how to give it a shape.
 - 3. Knowledge will plague the individual if he does not have the intelligence to express it.
 - 4. One has to understand the rudimentary fact that intelligence and intellect are at two opposite poles.

Question ID : 264330141562
Option 1 ID : 264330554586
Option 2 ID : 264330554584
Option 3 ID : 264330554585
Option 4 ID : 264330554583
Status : Answered
Chosen Option : 4

Comprehension:

In the following passage some words have been deleted. Read the passage carefully and select the most appropriate option to fill in each blank.

Rabindranath Tagore founded a small school at Santiniketan in 1901 and Kala Bhavan, an art school, in 1919 which (1)_____ became a part of the Visvabharati University founded in 1921. Located in an (2)_____ village some distance from the city of Calcutta, Kala Bhavan presented an alternative methodology of art training, in which studio based practice was (3)_____ in favour of learning through observation and living as a part of nature. The natural surroundings with the (4)_____ of bare red earth dotted with trees, the colours of the changing seasons, the animals and birds (5)_____ inspiration to students.

SubQuestion No : 41

Q.41 Select the most appropriate option to fill in blank no. 1.

- Ans 1. better
 2. later
 3. faster
 4. slower

Question ID : 264330164177

Option 1 ID : 264330643957

Option 2 ID : 264330643955

Option 3 ID : 264330643958

Option 4 ID : 264330643956

Status : Answered

Chosen Option : 2

Comprehension:

In the following passage some words have been deleted. Read the passage carefully and select the most appropriate option to fill in each blank.

Rabindranath Tagore founded a small school at Santiniketan in 1901 and Kala Bhavan, an art school, in 1919 which (1)_____ became a part of the Visvabharati University founded in 1921. Located in an (2)_____ village some distance from the city of Calcutta, Kala Bhavan presented an alternative methodology of art training, in which studio based practice was (3)_____ in favour of learning through observation and living as a part of nature. The natural surroundings with the (4)_____ of bare red earth dotted with trees, the colours of the changing seasons, the animals and birds (5)_____ inspiration to students.

SubQuestion No : 42

Q.42 Select the most appropriate option to fill in blank no. 2.

- Ans 1. normal
 2. magical
 3. reliable
 4. idyllic

Question ID : 264330164178

Option 1 ID : 264330643959

Option 2 ID : 264330643960

Option 3 ID : 264330643962

Option 4 ID : 264330643961

Status : Answered

Chosen Option : 4

Comprehension:

In the following passage some words have been deleted. Read the passage carefully and select the most appropriate option to fill in each blank.

Rabindranath Tagore founded a small school at Santiniketan in 1901 and Kala Bhavan, an art school, in 1919 which (1)_____ became a part of the Visvabharati University founded in 1921. Located in an (2)_____ village some distance from the city of Calcutta, Kala Bhavan presented an alternative methodology of art training, in which studio based practice was (3)_____ in favour of learning through observation and living as a part of nature. The natural surroundings with the (4)_____ of bare red earth dotted with trees, the colours of the changing seasons, the animals and birds (5)_____ inspiration to students.

SubQuestion No : 43

Q.43 Select the most appropriate option to fill in blank no. 3.

- Ans 1. accepted
 2. rejected
 3. investigated
 4. aspired

Question ID : 264330164179

Option 1 ID : 264330643963

Option 2 ID : 264330643964

Option 3 ID : 264330643965

Option 4 ID : 264330643966

Status : Answered

Chosen Option : 4

Comprehension:

In the following passage some words have been deleted. Read the passage carefully and select the most appropriate option to fill in each blank.

Rabindranath Tagore founded a small school at Santiniketan in 1901 and Kala Bhavan, an art school, in 1919 which (1)_____ became a part of the Visvabharati University founded in 1921. Located in an (2)_____ village some distance from the city of Calcutta, Kala Bhavan presented an alternative methodology of art training, in which studio based practice was (3)_____ in favour of learning through observation and living as a part of nature. The natural surroundings with the (4)_____ of bare red earth dotted with trees, the colours of the changing seasons, the animals and birds (5)_____ inspiration to students.

SubQuestion No : 44

Q.44 Select the most appropriate option to fill in blank no. 4.

- Ans 1. vistas
 2. murk
 3. haze
 4. band

Question ID : 264330164180

Option 1 ID : 264330643970

Option 2 ID : 264330643969

Option 3 ID : 264330643968

Option 4 ID : 264330643967

Status : Answered

Chosen Option : 1

Comprehension:

In the following passage some words have been deleted. Read the passage carefully and select the most appropriate option to fill in each blank.

Rabindranath Tagore founded a small school at Santiniketan in 1901 and Kala Bhavan, an art school, in 1919 which (1)_____ became a part of the Visvabharati University founded in 1921. Located in an (2)_____ village some distance from the city of Calcutta, Kala Bhavan presented an alternative methodology of art training, in which studio based practice was (3)_____ in favour of learning through observation and living as a part of nature. The natural surroundings with the (4)_____ of bare red earth dotted with trees, the colours of the changing seasons, the animals and birds (5)_____ inspiration to students.

SubQuestion No : 45

Q.45 Select the most appropriate option to fill in blank no. 5.

- Ans 1. groomed
 2. refused
 3. provided
 4. agreed

Question ID : 264330164181

Option 1 ID : 264330643972

Option 2 ID : 264330643971

Option 3 ID : 264330643973

Option 4 ID : 264330643974

Status : Answered

Chosen Option : 3

Comprehension:

Read the given passage carefully and answer the questions that follow.

Mountains occupy about a quarter of the Earth's land, harbour most of its biodiversity hotspots and supply fresh water to an estimated half of humanity. Present on every continent, mountains include a multitude of ecosystems holding many unique species such as snow leopards and mountain gorillas. They are also home to great cultural diversity among people adapted to the challenges of mountain life. Their special traditions and breath-taking scenery attract ever-growing numbers of tourists.

Mountain regions are particularly sensitive to degradation from both human pressures and climate change. Steep slopes mean the clearing of forest for farming, settlements or infrastructure can cause serious soil erosion as well as the loss of habitat. Erosion and pollution harm the quality of water flowing downstream. Climate change threatens the quantity and timing of water supplies to farms, cities, industry and power stations. Fast-rising temperatures are forcing mountain species, ecosystems and the people that depend on them to adapt or migrate.

SubQuestion No : 46

Q.46 What is the ANTONYM for the word 'diversity' from the passage?

- Ans 1. Block
 2. Dilemma
 3. Uniformity
 4. Heritage

Question ID : 264330164691

Option 1 ID : 264330645930

Option 2 ID : 264330645929

Option 3 ID : 264330645927

Option 4 ID : 264330645928

Status : Answered

Chosen Option : 3

Comprehension:

Read the given passage carefully and answer the questions that follow.

Mountains occupy about a quarter of the Earth's land, harbour most of its biodiversity hotspots and supply fresh water to an estimated half of humanity. Present on every continent, mountains include a multitude of ecosystems holding many unique species such as snow leopards and mountain gorillas. They are also home to great cultural diversity among people adapted to the challenges of mountain life. Their special traditions and breath-taking scenery attract ever-growing numbers of tourists.

Mountain regions are particularly sensitive to degradation from both human pressures and climate change. Steep slopes mean the clearing of forest for farming, settlements or infrastructure can cause serious soil erosion as well as the loss of habitat. Erosion and pollution harm the quality of water flowing downstream. Climate change threatens the quantity and timing of water supplies to farms, cities, industry and power stations. Fast-rising temperatures are forcing mountain species, ecosystems and the people that depend on them to adapt or migrate.

SubQuestion No : 47

Q.47 What is the ANTONYM for the word 'migrate' from the passage?

- Ans 1. Stay
 2. Run
 3. Die
 4. Assume

Question ID : 264330164693

Option 1 ID : 264330645935

Option 2 ID : 264330645936

Option 3 ID : 264330645937

Option 4 ID : 264330645938

Status : Answered

Chosen Option : 1

Comprehension:

Read the given passage carefully and answer the questions that follow.

Mountains occupy about a quarter of the Earth's land, harbour most of its biodiversity hotspots and supply fresh water to an estimated half of humanity. Present on every continent, mountains include a multitude of ecosystems holding many unique species such as snow leopards and mountain gorillas. They are also home to great cultural diversity among people adapted to the challenges of mountain life. Their special traditions and breath-taking scenery attract ever-growing numbers of tourists.

Mountain regions are particularly sensitive to degradation from both human pressures and climate change. Steep slopes mean the clearing of forest for farming, settlements or infrastructure can cause serious soil erosion as well as the loss of habitat. Erosion and pollution harm the quality of water flowing downstream. Climate change threatens the quantity and timing of water supplies to farms, cities, industry and power stations. Fast-rising temperatures are forcing mountain species, ecosystems and the people that depend on them to adapt or migrate.

SubQuestion No : 48

Q.48 Which is the best description of the tone of the passage?

- Ans 1. Laudatory
 2. Emotional
 3. Biased
 4. Humanistic

Question ID : 264330164690

Option 1 ID : 264330645923

Option 2 ID : 264330645925

Option 3 ID : 264330645924

Option 4 ID : 264330645926

Status : Answered

Chosen Option : 4

Comprehension:

Read the given passage carefully and answer the questions that follow.

Mountains occupy about a quarter of the Earth's land, harbour most of its biodiversity hotspots and supply fresh water to an estimated half of humanity. Present on every continent, mountains include a multitude of ecosystems holding many unique species such as snow leopards and mountain gorillas. They are also home to great cultural diversity among people adapted to the challenges of mountain life. Their special traditions and breath-taking scenery attract ever-growing numbers of tourists.

Mountain regions are particularly sensitive to degradation from both human pressures and climate change. Steep slopes mean the clearing of forest for farming, settlements or infrastructure can cause serious soil erosion as well as the loss of habitat. Erosion and pollution harm the quality of water flowing downstream. Climate change threatens the quantity and timing of water supplies to farms, cities, industry and power stations. Fast-rising temperatures are forcing mountain species, ecosystems and the people that depend on them to adapt or migrate.

SubQuestion No : 49

Q.49 Which of the following represents the structure of the passage?

- Ans
- 1. Chronological
 - 2. Definition
 - 3. Compare and contrast
 - 4. Cause-effect

Question ID : 264330164692

Option 1 ID : 264330645934

Option 2 ID : 264330645932

Option 3 ID : 264330645933

Option 4 ID : 264330645931

Status : Answered

Chosen Option : 4

Comprehension:

Read the given passage carefully and answer the questions that follow.

Mountains occupy about a quarter of the Earth's land, harbour most of its biodiversity hotspots and supply fresh water to an estimated half of humanity. Present on every continent, mountains include a multitude of ecosystems holding many unique species such as snow leopards and mountain gorillas. They are also home to great cultural diversity among people adapted to the challenges of mountain life. Their special traditions and breath-taking scenery attract ever-growing numbers of tourists.

Mountain regions are particularly sensitive to degradation from both human pressures and climate change. Steep slopes mean the clearing of forest for farming, settlements or infrastructure can cause serious soil erosion as well as the loss of habitat. Erosion and pollution harm the quality of water flowing downstream. Climate change threatens the quantity and timing of water supplies to farms, cities, industry and power stations. Fast-rising temperatures are forcing mountain species, ecosystems and the people that depend on them to adapt or migrate.

SubQuestion No : 50

Q.50 Which of the following most accurately states the central idea of the passage?

- Ans
- 1. Pollution
 - 2. Mountain ecosystem
 - 3. Biodegradation
 - 4. Climate change

Question ID : 264330164689

Option 1 ID : 264330645919

Option 2 ID : 264330645922

Option 3 ID : 264330645921

Option 4 ID : 264330645920

Status : Answered

Chosen Option : 3